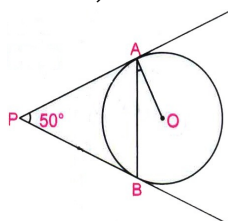


2 Marks

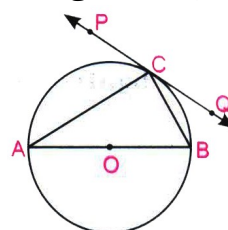
65 x 2 = 130

- 1) In figure, CP and CQ are tangents to a circle with centre O. ARB is another tangent touching the circle at R. If CP = 11cm, and BC = 7cm, then find the length of BR.

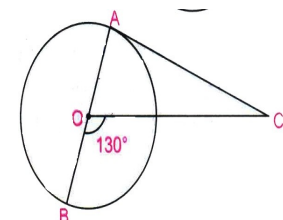


- 2) A point P is 26cm from the centre of the circle. The length of the tangent drawn from P to the circle is 24cm. Find the radius of the circle.

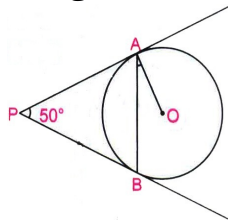
- 3) In figure, PQ is a tangent at a point C to a circle with centre O. If AB is a diameter and $\angle CAB = 30^\circ$, and $\angle PCA$.



- 4) In figure, AOB is a diameter of a circle with centre O and AC is a tangent to the circle at A. If $\angle BOC = 130^\circ$, then find $\angle ACO$.

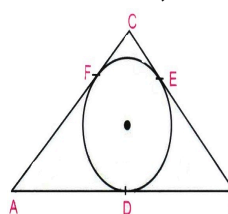


- 5) In figure, PA and PB are tangents to the circle with centre O such that $\angle APB = 50^\circ$. Write the measure of $\angle OAB$.

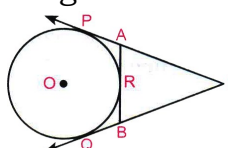


- 6) Two concentric circles of radii a and b ($a > b$) are given. Find the length of the chord of the larger circle which touches the smaller circle.

- 7) In figure, a circle inscribed in triangle ABC touches its sides AB, BC and AC at points D, E and F respectively. If AB=12cm, BC=8cm, and AC=10cm, then find the lengths of AD, BE, and CF.



- 8) In figure, XP and XQ are two tangents to a circle with centre O from a point X outside the circle. ARB is tangent to circle at R. Prove that $XA + AR = XB + BR$.



9 TO 12
ONLINE
1 TO 1
MATHS
TUITION
AVAILABLE

CBSE 9 10 11 12

TN STATE 10 11 12

NEET & JEE

JOIN MY WHATSAPP PAID
2025 - 2026 TEST GROUP



8056206308



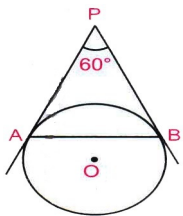
RAVI MATHS TUITION CENTER

www.ravitestpapers.in

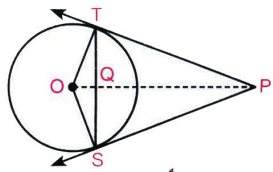
www.ravitestpapers.com



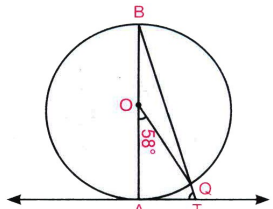
- 9) In figure, AP and BP are tangents to a circle with centre O, such that $AP = 5\text{cm}$ and $\angle APB = 60^\circ$. Find the length of chord AB.



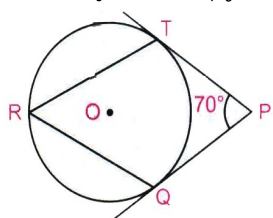
- 10) In figure from an external point P, two tangents PT and PS are drawn to a circle with centre O radius r. If $OP = 2r$, show that $\angle OTS = \angle OST = 30^\circ$.



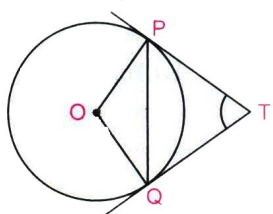
- 11) In figure AB is the diameter of a circle with centre O and AT is a tangent. If $\angle AOQ = 58^\circ$ find $\angle ATQ$.



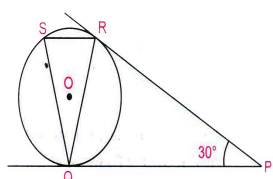
- 12) In figure O is the centre of a circle. PT and PQ are tangents to the circle from an external point P. If $\angle TPQ = 70^\circ$, find $\angle TRQ$



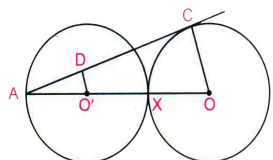
- 13) In figure, PQ is a chord of length 8cm of a circle of radius 5cm. The tangents at P and Q intersect at a point T. Find the lengths of TP and TQ.



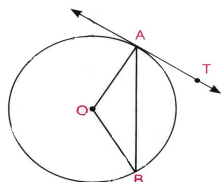
- 14) In figure, tangents PQ and PR are drawn from an external point P to a circle with centre O, such that $\angle RPQ = 30^\circ$. A chord RS is drawn parallel to the tangent PQ. Find $\angle RQS$.



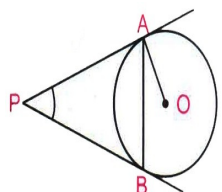
- 15) In figure two equal circles, with centres O and O', touch each other at X. OO' produced meets the circle with centre O' at A. AC is tangent to the circle with centre O, at the point C. O'D is perpendicular to AC. Find the value $\frac{DO'}{CO}$



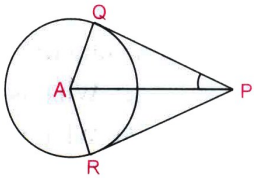
- 16) In given figure, O is the centre of the circle, AB is a chord and AT is the tangent at A. If $\angle AOB = 100^\circ$ then find $\angle BAT$



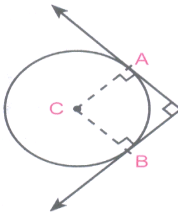
- 17) In the figure PA and PB are tangents to the circle with centre O. If $\angle APB = 60^\circ$, then find $\angle OAB$.



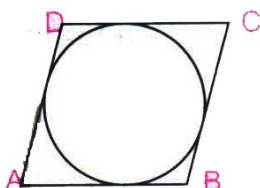
- 18) In figure PQ and PR are tangents to circle with centre A. If $\angle QPA = 27^\circ$, then find $\angle QAR$.



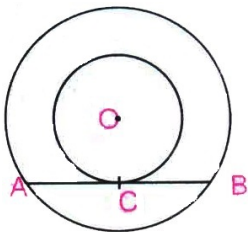
- 19) In the figure, PA and PB are two tangents drawn from an external point P to a circle with centre C and radius 4cm. If $PA \perp PB$, find the length of each tangent.



- 20) Prove that the lengths of tangents drawn from an external point to a circle are equal. Using the above, prove the following: A quadrilateral ABCD is drawn to circumscribe a circle. Prove that $AB + CD = AD + BC$.

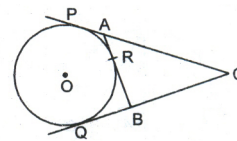


- 21) Prove that the tangent at any point of a circle is perpendicular to the radius through the point of contact. Using the above, do the following: In figure, O is the centre of the two concentric circles. AB is a chord of the larger circle touching the smaller circle at C. Prove that $AC = BC$.

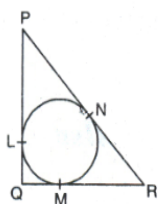


- 22) Two concentric circles of radii a and b , where $a > b$ are given. Find the length of the chord of the larger circle which touches the smaller circle.

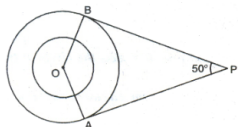
- 23) In figure, CP and CQ are tangents from an external point C to a circle with centre O. AB is another tangent which touches the circle at R. If $CP = 11$ cm and $BR = 4$ cm, find the length of BC.



- 24) In figure, a circle is inscribed in a triangle PQR with $PQ = 10$ cm, $QR = 8$ cm and $PR = 12$ cm. Find the lengths QM, RN and PL.

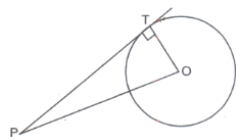


- 25) In the figure, PA and PB are the two tangents to the circle with centre O. Prove that $\angle AOB$ and $\angle APB$ are supplementary. If $\angle AOB = 50^\circ$, find $\angle APB$.



- 26) From a point Q 13 cm away from the centre of a circle, the length of tangent PQ to the circle is 12 cm. Find the radius of the circle (in cm).

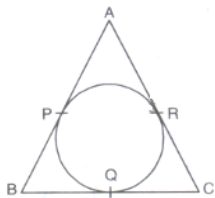
- 27) In the figure, PT is a tangent to the circle with centre O. If $PT = 30$ cm and the diameter of circle is 32 cm, then find the length of the segment OP.



- 28) If a pair of tangents to a circle which are inclined to each other at an angle of 60° , then find the degree measure of $\angle POQ$.

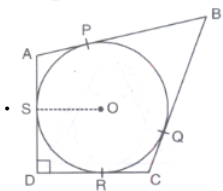
- 29) If tangent PA and PB from a point P to a circle with centre O are inclined to each other at an angle of 110° , then find the degree measure of angle POA.

- 30) In figure, the sides AB, BC and CA of a triangle ABC, touch a circle at P, Q and R respectively. If $PA = 4\text{ cm}$, $BP = 3\text{ cm}$ and $AC = 11\text{ cm}$, then find the length of BC (in cm).

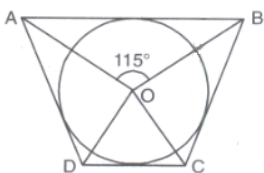


- 31) If the radii of two concentric circles are 5 cm and 13 cm, then find the length of the chord of one circle which is tangent to the other circle.

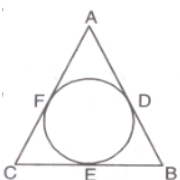
- 32) In figure, a circle is inscribed in a quadrilateral ABCD touching the sides AB, BC, CD and AD at P, Q, R and S respectively. If the radius of the circle is 10 cm, $BC = 38\text{ cm}$, $PB = 27\text{ cm}$ and , then find the length of CD



- 33) In the given figure, the quadrilateral ABCD is circumscribed to a circle with centre O. If $\angle AOB = 115^\circ$, then find $\angle COD$.



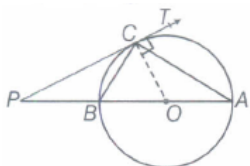
- 34) A circle is inscribed in a triangle ABC having sides $AB = 8\text{ cm}$, $BC = 10\text{ cm}$ and $CA = 12\text{ cm}$ as shown in fig. Find AD, BE and CF.



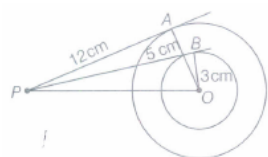
- 35) Prove that the tangent drawn at the ends of a chord of a circle make equal angles with the chord.

- 36) Find the distance between two parallel tangents of a circle of radius 3 cm.

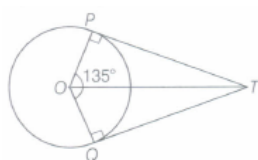
- 37) PC is a tangent to the circle at C. AOB is the diameter which when extended meets the tangent at P. Find $\angle CBA$, $\angle AOC$ and $\angle BCO$, if $\angle PCA = 110^\circ$.



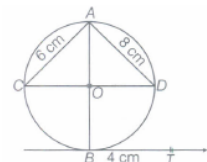
- 38) Two concentric circles with centre O are of radii 5 cm and 3 cm. From an external point P, two tangents PA and PB are drawn to their circles respectively. If $PA = 12\text{ cm}$, then find length of PB.



- 39) In the given figure, if TP and TQ are the two tangents to a circle with centre O, so that $\angle POQ = 135^\circ$, then find $\angle PTQ$.

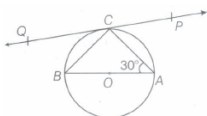


- 40) In the given figure, $AD = 8\text{ cm}$, $AC = 6\text{ cm}$ and TB is the tangent at B to the circle with centre O. Find OT, if BT is 4 cm.

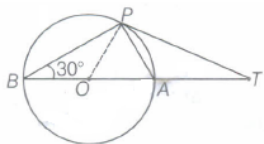


- 41) PA is a tangent to the circle with centre O. If $BC = 3\text{ cm}$, $AC = 4\text{ cm}$ and $\triangle ACB \sim \triangle PAO$, then find OA and $\frac{OP}{AP}$

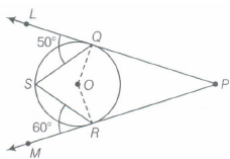
- 42) In the following figure, PQ is a tangent at a point C to circle with centre O. If AB is a diameter and $\angle CAB = 30^\circ$, then find $\angle PCA$.



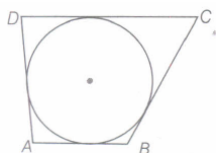
- 43) In the given figure, O is the centre of a circle, BOA is its diameter and the tangent at the point P meets BA extended at T. If $\angle PBO = 30^\circ$, then find $\angle PTA$.



- 44) In adjoining figure, PQ and PR are tangents to the circle with centre O and S is a point on the circle such that $\angle SQL = 50^\circ$ and $\angle SRM = 60^\circ$. Find $\angle QSR$.

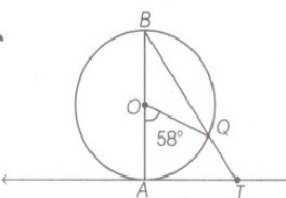


- 45) What is the length of the tangent drawn from a point 8 cm away from the centre of a circle of radius 6 cm?
- 46) If the angle between two radii of a circle is 130° , then what is the angle between the tangents at the end points of radii at their point of intersection?
- 47) AB is a chord of circle with centre O. At B, a tangent PB is drawn such that its length is 24 cm. The distance of P from the centre is 26 cm, If the chord AB is 16 cm, find its distance from the centre.
- 48) Prove that the intercept of a tangent between a pair of parallel tangents to a circle subtend a right angle at the centre of the circle.
- 49) In the following figure, a quadrilateral ABCD circumscribing a circle such that AB = 20 cm, BC = 24 cm and AD = 21 cm.



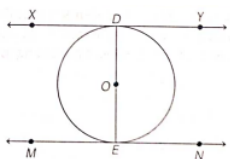
Two friends Rahul and Santosh observed the figure, Santosh said that length of DC is 30 cm. Is he right? Explain.

- 50) In given figure, AB is diameter of a circle with centre O and AT is tangent. If $\angle AOQ = 58^\circ$, find $\angle ATQ$

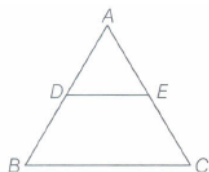


- 51) If A(1,1) and B(7, 9) are the end points of a diameter of a circle, then find the coordinates of the centre of the circle.
- 52) Points A (-1, y) and B (5, 7) lie on a circle with centre O(2, -3y) such that AB is a diameter of the circle. Find the value of y. Also, find the radius of the circle.
- 53) From an external point P, two tangents PA and PB are drawn to the circle with centre O. Prove that OP is the perpendicular bisector of chord AB.

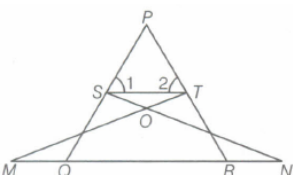
- 54) XY and MN are the tangents drawn at the end points of the diameter DE of the circle with centre O. Prove that $XY \parallel MN$.



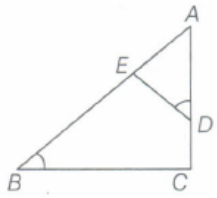
- 55) In the given figure, $DE \parallel BC$. DE = 4 cm, BC = 8 cm, area of $\triangle ADE = 25$ sq.cm. Find the area of $\triangle ABC$



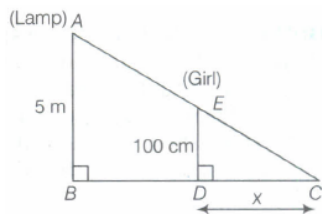
- 56) In the given figure, if $\angle 1 = \angle 2$ and $\triangle NSQ \cong \triangle MTR$, prove that $\triangle PTS \sim \triangle PRQ$



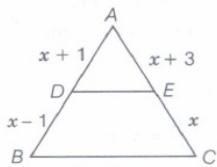
- 57) In $\triangle ABC$, if $\angle ADE = \angle B$, then prove that $\triangle ADE \sim \triangle ABC$. Also, if $AD = 7.6$ cm, $AE = 7.2$ cm, $BE = 4.2$ cm and $BC = 8.4$ cm, find DE .



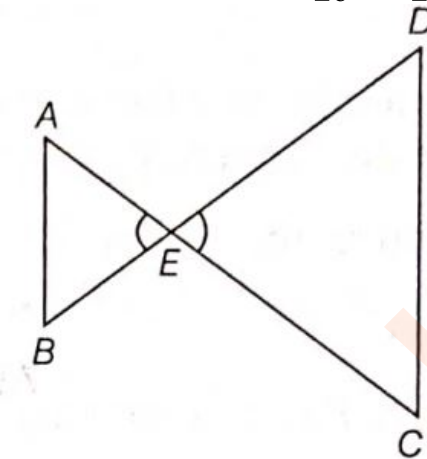
- 58) A girl of height 100 cm is walking away from the base of a lamppost at a speed of 1.9 m/s. If the lamp is 5 m above the ground, find the length of her shadow after 4s.



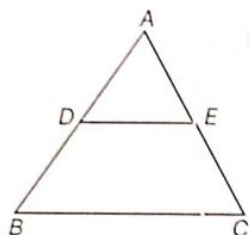
- 59) In $\triangle ABC$, $DE \parallel BC$, find the value of x .



- 60) In $\triangle ABC$, if X and Y are points on AB and AC respectively such that $\frac{AX}{XB} = \frac{3}{4}$, $AY = 5$ and $YC = 9$, then state whether XY and BC parallel or not.
- 61) If two poles 5 m and 15 m high are 100 m apart, then find the height of the point of intersection of the line joining the top of each pole to the foot of the opposite pole.
- 62) In $\triangle ABC$, $DE \parallel BC$. If $DE = \frac{2}{3} BC$ and area of $\triangle ABC = 81 \text{ cm}^2$, then find the area of $\triangle DAE$.
- 63) Given $\triangle ABC \sim \triangle POR$, if $\frac{AB}{PQ} = \frac{1}{3}$, then find $\frac{\text{ar } \triangle ABC}{\text{ar } \triangle PQR}$.
- 64) In the given figure, $\frac{EA}{EC} = \frac{EB}{ED}$, prove that $\triangle EAB \sim \triangle ECD$.



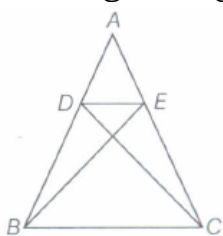
- 65) In the given figure, $AD = 2$ cm, $BD = 3$ cm, $AE = 3.5$ cm and $AC = 7$ cm. Is DE parallel to BC ?



3 Marks

28 x 3 = 84

- 66) Prove that in two concentric circles, the chord of the larger circle, which touches the smaller circle, is bisected at the point of contact.
- 67) In the given figure, if $\triangle ABE \cong \triangle ACD$, show that $\triangle ADE \sim \triangle ABC$.

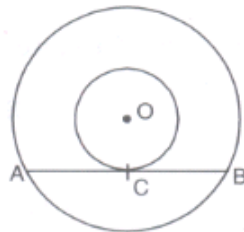


- 68) In two concentric circles, a chord of length 24 cm of larger circle becomes a tangent to the smaller circle whose radius is 5 cm. Find the radius of the larger circle.

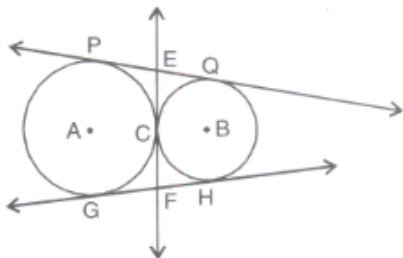
- 69) If PA and PB are two tangents drawn from a point P to a circle with centre O touching it at A and B, prove that OP is perpendicular bisector of AB.

- 70) In the given figure, the chord AB of the larger of the two concentric circles, with centre O, touches the smaller circle

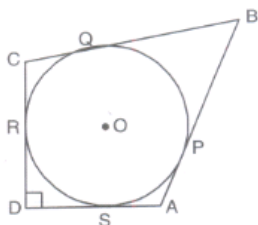
O, touches the smaller circle at C. Prove that, $AC = CB$.



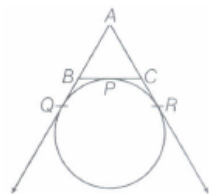
- 71) In fig., two circles touch each other externally at C. Prove that the common tangent at C bisects the other two common tangents



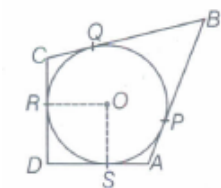
- 72) In the figure, $\angle ADC = 90^\circ$, $BC = 38$ cm, $CD = 28$ cm and $BP = 25$ cm. Find the radius of the circle.



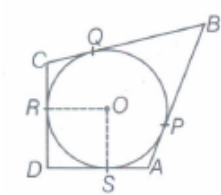
- 73) A circle touches the side BC of a $\triangle ABC$ at P and AB and AC when produced at O and R respectively as shown in the figure. Show that $AQ = \frac{1}{2}$ or show that $AQ = \frac{1}{2}(BC + CA + AB)$



- 74) In the given figure, $\angle ADC = 90^\circ$, $BC = 38$ cm, $CD = 28$ cm and $BP = 25$ cm, then find the radius of the circle.



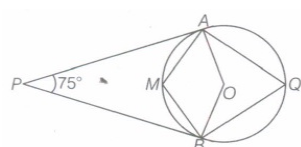
- 75) A circle is inscribed in a $\triangle ABC$ having sides $AB=8$ cm, $BC = 10$ cm and $CA = 12$ cm as shown in figure. Find AD, BE and CF



- 76) The radii of two concentric circles are 13 cm and 8 cm. AB is a diameter of the bigger circle. BD is a tangent to the smaller circle touching it at D. Find the length of AD.

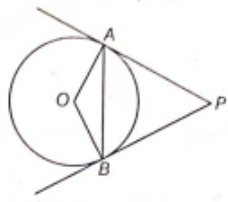
- 77) ABC is triangle. A circle touches sides AB and AC produced and side BC at X, Y and Z respectively. Show that $AX = \frac{1}{2}$ perimeter of $\triangle ABC$.

- 78) In the given figure, O is the centre of the circle. Determine $\angle AOB$ and $\angle AMB$, if PA and PB are tangents and $\angle APB = 75^\circ$.



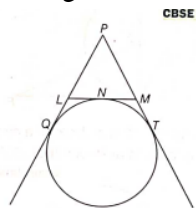
- 79) From a point P, the length of the tangent to a circle is 24 cm and the distance of P from the centre of the circle is 25 cm. Find the radius of the circle.

- 80) PA and PB are tangents drawn to a circle of centre O from an external point P. Chord AB makes an angle of 30° with the radius at the point of contact.



If length of the chord is 6 cm, find the length of the tangent PA and the length of the radius OA

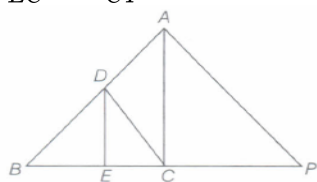
- 81) If PQ = 28cm, then find the perimeter of $\triangle PLM$



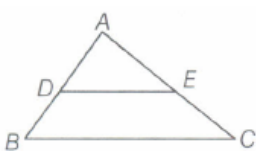
- 82) It is given that $\triangle ABC \sim \triangle EDF$ such that AB = 5 cm, AC = 7 cm, DF = 15 cm and DE = 12 cm. Find the lengths of the remaining sides of the triangles.

- 83) If D and E are points on the respective sides AB and AC of $\triangle ABC$ such that AD = 6 cm, BD = 9 cm, AE = 8 cm, EC = 12 cm. Prove that $DE \parallel BC$.

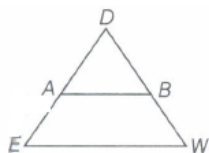
- 84) In the given figure of $\triangle ABC$, $DE \parallel AC$. If $DC \parallel AP$, where point P lies on BC produced, then prove that $\frac{BE}{EC} = \frac{BC}{CP}$.



- 85) In the given figure, $DE \parallel BC$. If AD = 3 cm, DB = 4 cm and AE = 6 cm, find EC.

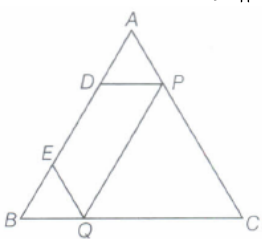


- 86) In $\triangle DEW$, $AB \parallel EW$. If AD = 4 cm, DE = 12 cm and DW = 24 cm, find the value of DB.

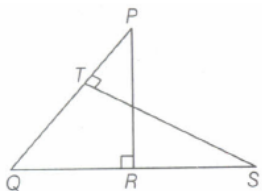


- 87) In $\triangle ABC$, D and E are points on the sides AB and AC respectively, such that $DE \parallel BC$. If AD = $4x - 3$, AE = $8x - 7$, BD = $3x - 1$ and CE = $5x - 3$, find the value of x.

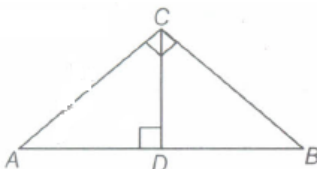
- 88) In the given figure, D and E are two points lying on side AB, such that AD = BE. If $DP \parallel BC$ and $EQ \parallel AC$, then prove that $PQ \parallel AB$.



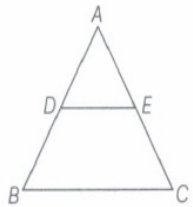
- 89) In the given figure, PQR and QST are two right angled triangles, right angled at R and T, respectively. Prove that $QR \times QS = QP \times QT$.



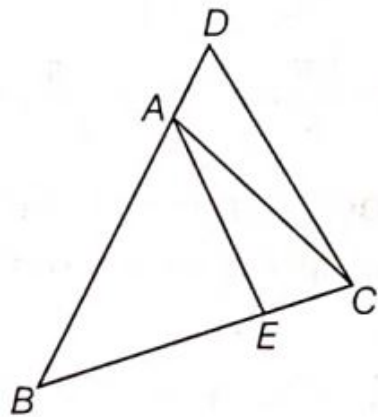
- 90) In the given figure, $\triangle ACB = 90^\circ$ and $CD \perp AB$. Prove that $\frac{BC^2}{AC^2} = \frac{BD}{AD}$



- 91) In figure, $DE \parallel BC$ $AD = 1\text{cm}$ and $BD = 2\text{ cm}$. What is the ratio of the ar (MBC) to the ar ($\triangle ADE$)?

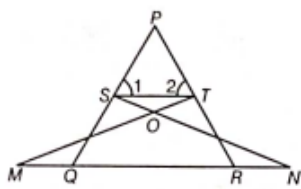


- 92) In the given figure, $\angle ABC = \angle ACB$ and $\frac{BC}{BE} = \frac{BD}{AC}$



Show that $\triangle ABE \sim \triangle DBC$ and $AE \parallel DC$.

- 93) In the given figure, if $\angle 1 = \angle 2$ and $\triangle NSQ = \triangle MTR$, prove that $\triangle PTS \sim \triangle PRQ$.

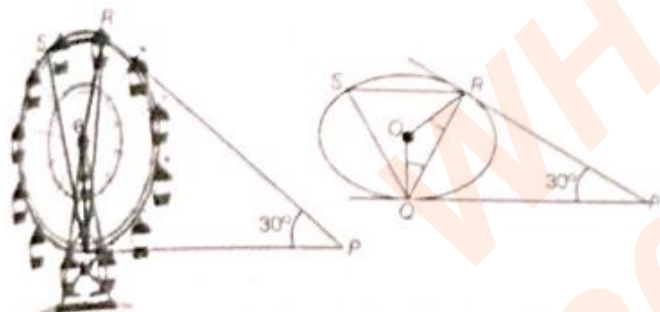


Case Study Questions

6 x 4 = 24

- 94) A Ferris wheel (or a big wheel in the United Kingdom) is an amusement ride consisting of a rotating upright wheel with multiple passenger-carrying components (commonly referred to as passenger cars, cabins, tubs, capsules, gondolas, or pods) attached to the rim in such a way that as the wheel turns, they are kept upright, usually by gravity.

After taking a ride in Ferris wheel, Aarti came out from the crowd and was observing her friends who were enjoying the ride . She was curious about the different angles and measures that the wheel will form. She forms the figure as given below.



- (i) In the given figure, find $\angle ROQ$
 (a) 60° (b) 100° (c) 150° (d) 90°
 (ii) Find $\angle RQP$.
 (a) 75° (b) 60° (c) 30° (d) 90°
 (iii) Find $\angle RSQ$
 (a) 60° (b) 75° (c) 100° (d) 30°
 (iv) Find $\angle ORP$.
 (a) 90° (b) 70° (c) 100° (d) 60°

CBSE 10TH MATHS
1 TO 1 - ONLINE TUITION

RAVI MATHS TUITION CENTER
WHATSAPP - 8056206308

CONTACT FOR DETAIL




FULL SYLLABUS COVERD IN 30 CLASSES

- ✓ **EVERYDAY CLASS**
- ✓ **FREE TEST PAPERS & NOTES TILL BOARD EXAM**
- ✓ **FLEXIBLE TIME**

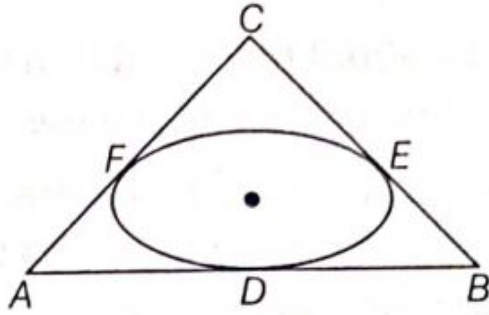
FREE TEST PAPERS AVAILABLE IN MY WEBSITE

www.ravitestpapers.com

- 95) Varun has been selected by his school to design logo for sports day t-shirts for students and staff. The logo design is as given in the figure and he is working on the fonts and different colours according to the theme.



In given figure, a circle with centre O is inscribed in a $\triangle ABC$, such that it touches the sides AB , BC and CA at points D , E and F , respectively. The lengths of sides AB , BC and CA are 12 cm , 8 cm and 10 cm , respectively.



- (i) Find the length of AD .
(a) 7 cm (b) 8 cm (c) 5 cm (d) 9 cm
- (ii) Find the length of BE .
(a) 8 cm (b) 5 cm (c) 2 cm (d) 9 cm
- (iii) Find the length of CF .
(a) 9 cm (b) 5 cm (c) 2 cm (d) 3 cm
- (iv) If radius of the circle is 4 cm , Find the area of $\triangle OAB$.
(a) 20 cm^2 (b) 36 cm^2 (c) 24 cm^2 (d) 48 cm^2
- (v) Find area of $\triangle ABC$.
(a) 50 cm^2 (b) 60 cm^2 (c) 100 cm^2 (d) 90 cm^2

10TH CBSE SALES MATERIALS

1 10TH MATHS JEE FOUNDATION	RS.350
2 10TH SCIENCE JEE FOUNDATION	RS.350
3 10TH SST JEE FOUNDATION	RS.350
4 10TH MATHS NOTES	RS.350
5 10TH SCIENCE NOTES	RS.350
6 10TH SST NOTES	RS.350
7 10TH MATHS QB FILES MCQ 235	RS.350
8 10TH SCIENCE QB FILES	RS.350
9 10TH SST QB FILES	RS.350

**ALL 9
MATERIALS
TOGETHER
COST**

RS.2500

RAVI TEST PAPERS & NOTES, WHATSAPP – 8056206308
CHECK GOOGLE - RAVI TEST PAPERS - FOR FREE MATERIALS

- 96) A scale drawing of an object is the same shape as the object but a different size. The scale of a drawing is a comparison of the length used on a drawing to the length it represents. The scale is written as a ratio. The ratio of two corresponding sides in similar figures is called the scale factor.

$$\text{Scale factor} = \frac{\text{length in image}}{\text{corresponding length in object}}$$



If one shape can become another using resizing, then the shapes are similar. Hence, two shapes are similar when one can become the other after a resize, flip, slide or turn. In the photograph below showing the side view of a train engine. Scale factor is 1:200.

This means that a length of 1 cm on the photograph above corresponds to a length of 200 cm, or 2 metres, on the actual engine. The scale can also be written as the ratio of two lengths.

(a) If the length of the model is 11 cm, then the overall length of the engine in the photograph above, including the couplings (mechanism used to connect) is

- (i) 22 cm (ii) 220 cm (iii) 220 m (iv) 22 m

(b) What will affect the similarity of any two polygons?

- (i) They are flipped horizontally (ii) They are dilated by a scale factor.
(iii) They are translated down (iv) They are not the mirror image of one another

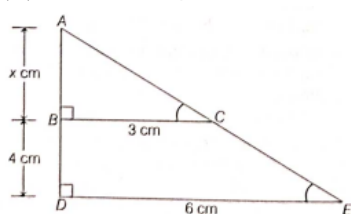
(c) What is the actual width of the door if the width of the door in photograph is 0.35 cm?

- (i) 0.7 m (ii) 0.7 cm (iii) 0.07 cm (iv) 0.07 m

(d) If two similar triangles have a scale factor of 5 : 3, which statement regarding the two triangles is true

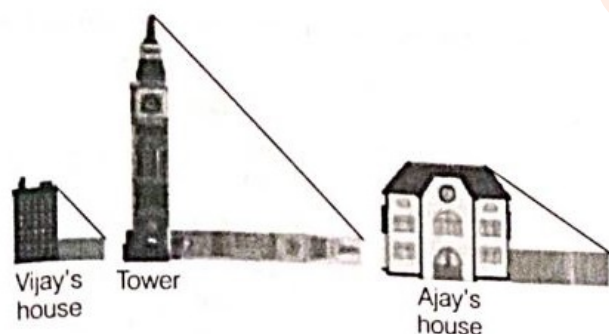
- (i) The ratio of their perimeters is 15 : 1 (ii) Their altitudes have a ratio 25 : 15
(iii) Their medians have a ratio 10 : 4 (iv) Their medians have a ratio 10 : 4

(e) The length of AB in the given figure is



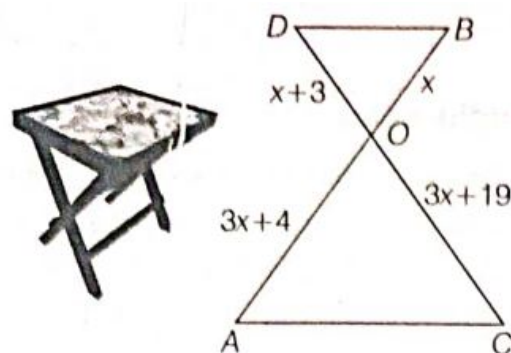
- (i) 8 cm (ii) 6 cm (iii) 4 cm (iv) 0.07 m

- 97) Vijay is trying to find the average height of a tower near his house. He is using the properties of similar triangles. The height of Vijay's house is 20 m when Vijay's house casts a shadow 10 m long on the ground. At the same time, the tower casts a shadow 50 m long on the ground and the house of Ajay casts 20 m shadow on the ground.

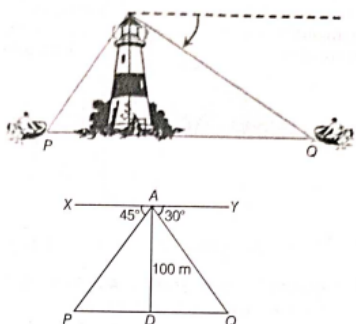


- (i) What is the height of the tower?
(a) 20 m (b) 50 m (c) 100 m (d) 200 m
- (ii) What will be the length of the shadow of the tower when Vijay's house casts a shadow of 12 m?
(a) 75 m (b) 50 m (c) 45 m (d) 60 m
- (iii) What is the height of Ajay's house?
(a) 30 m (b) 40 m (c) 50 m (d) 20 m
- (iv) When the tower casts a shadow of 40 m, same time what will be the length of the shadow of Ajay's house?
(a) 16 m (b) 32 m (c) 20 m (d) 8 m
- (v) When the tower casts a shadow of 40 m, same time what will be the length of the shadow of Vijay's house?
(a) 15 m (b) 32 m (c) 16 m (d) 8 m

- 98) In the figure given below, a folding table is shown. The legs of the table are represented by line segments AB and CD intersecting at O. Join AC and BD. Considering table top is a parallel to the ground and $OB = x$, $OD = x + 3$, $OC = 3x + 19$ and $OA = 3x + 4$, answer the following questions.



- (i) Prove that ΔOAC is similar to ΔOBD
(ii) Prove that $\frac{OA}{AC} = \frac{OB}{BD}$
(iii) (a) Observe the figure and find the value of x . Hence, find the length of OC .
Or
(b) Observe the figure and find $\frac{BD}{AC}$.
- 99) A boy is standing on the top of light house. He observed that Boat P and Boat Q are approaching the light house from opposite directions. He finds that angle of depression of Boat P is 45° and angle of depression of Boat Q is 30° . He also knows that height of the light house is 100 m.



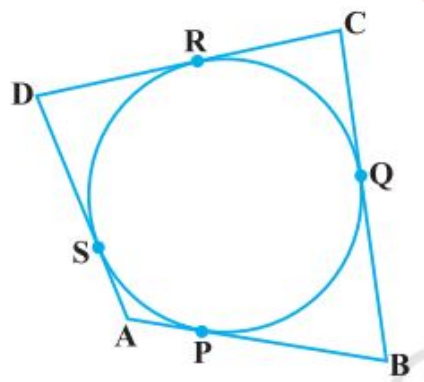
Based on the above information, answer the following questions.

- (i) What is the measure of $\angle APD$?
(ii) If $\angle YAQ = 30^\circ$, then $\angle AQD$ is also 30° . Why?
(iii) How far is Boat P from the light house? Or How far is Boat Q from the light house?

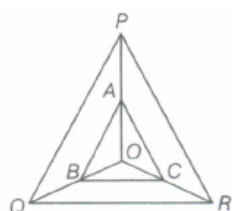
5 Marks

24 x 5 = 120

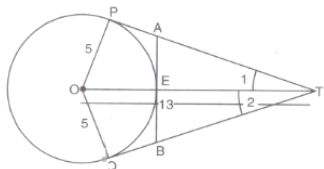
- 100) Two concentric circles are of radii 5 cm and 3 cm. Find the length of the chord of the larger circle which touches the smaller circle.
- 101) A quadrilateral ABCD is drawn to circumscribe a circle (see figure). Prove that $AB + CD = AD + BC$.



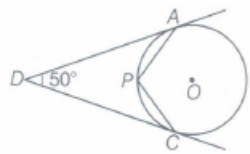
- 102) Prove that the parallelogram circumscribing a circle is a rhombus.
- 103) Two tangents TP and TQ are drawn to a circle with centre O from an external point T. Prove that $\angle PTQ = 2\angle OPQ$.
- 104) In the given figure, A, B and C are points on OP, OQ and OR respectively, such that $AB \parallel PQ$ and $AC \parallel PR$. Show that $BC \parallel QR$.



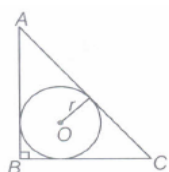
- 105) In figure, O is the centre of a circle of radius 5 cm. T is a point such that $OT = 13$ cm and OT intersects circle at E. If AB is a tangent to the circle at E, find the length of AB, where TP and TQ are two tangents to the circle.



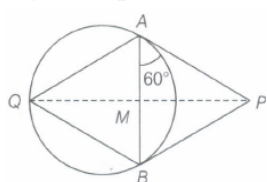
- 106) In the given figure, O is the centre of the circle. Determine $\angle AOC$, if DA and DC are tangents and $\angle ADC = 50^\circ$.



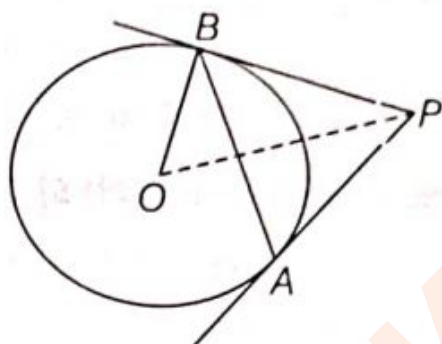
- 107) In the adjoining figure, a right angled $\triangle ABC$, circumscribes a circle of radius r . If AB and BC are of lengths 8 cm and 6 cm respectively, then find the value of r .



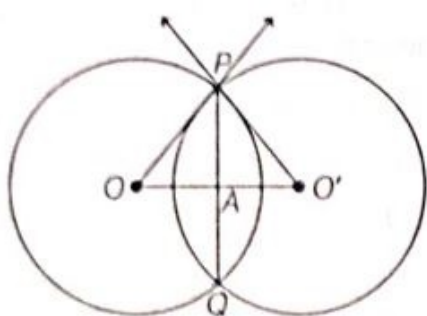
- 108) PA and PB are the tangents to a circle which circumscribes an equilateral $\triangle ABQ$. If $\angle PAB = 60^\circ$, as shown in the figure, prove that QP bisects AB at right angle.



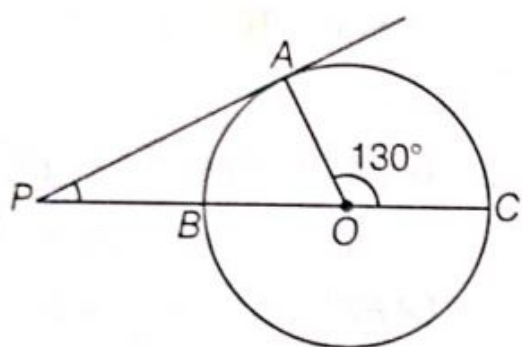
- 109) In the given figure AB is a chord of a circle, with centre O, such that $AB = 16$ cm and radius of circle is 10 cm. Tangents at A and B intersect each other at P. Find the length of PA.



- 111) Two circles with centres O and O' of radii 6 cm and 8 cm, respectively intersect at two points P and Q such that OP and $O'P$ are tangents to the two circles. Find the length of the common chord PQ.

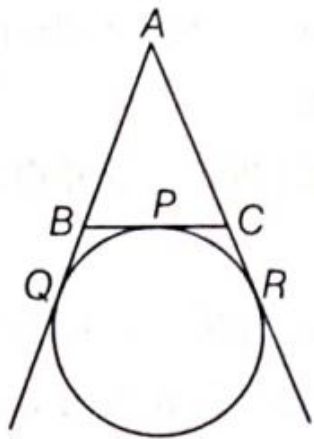


- 112) In the given figure, PA is a tangent to the circle drawn from the external point P and PBC is the secant to the circle with BC as diameter.

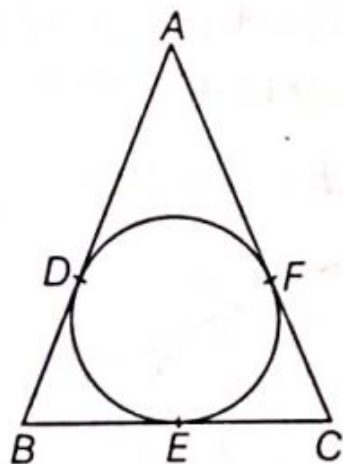


If $\angle AOC = 130^\circ$, then find the measure of $\angle APB$, where O is the centre of the circle.

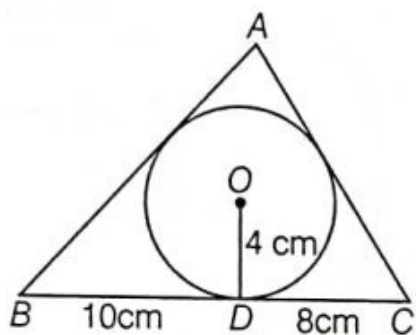
- 113) A circle touches the side BC of a $\triangle ABC$ at a point P and touches AB and AC when produced at Q and R respectively. Show that $AQ = \frac{1}{2}$ (Perimeter of $\triangle ABC$).



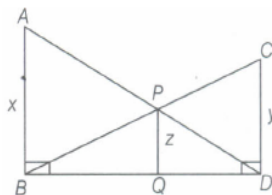
- 114) ABC is an isosceles triangle with $AB = AC$, circumscribed about a circle. Prove that BC is bisected at E.



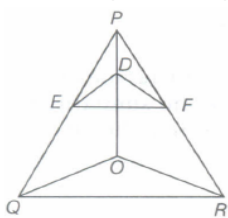
- 115) A $\triangle ABC$ is drawn to circumscribe a circle of radius 4 cm such that the segments BD and DC are of lengths 10 cm and 8 cm, respectively. Find the lengths of the sides AB and AC, if it is given that area $\triangle ABC = 90 \text{ cm}^2$.



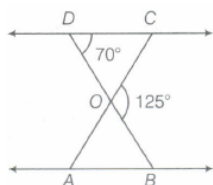
- 116) In the given figure, $AB \parallel PQ \parallel CD$, $AB = x$ units, $CD = y$ units and $PQ = z$ units. Prove that $\frac{1}{x} + \frac{1}{y} = \frac{1}{z}$.



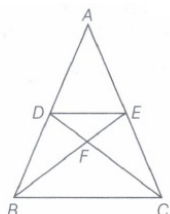
- 117) In the given figure, $DE \parallel OQ$ and $DF \parallel OR$. Show that $EF \parallel QR$.



- 118) In the given figure, $\triangle ODC \sim \triangle OBA$, $\angle BOC = 125^\circ$ and $\angle CDO = 70^\circ$. Find $\angle DOC$, $\angle DCO$ and $\angle OAB$.



- 119) In the given figure, if $DE \parallel BC$ and $AD : DB = 5 : 4$, then find $\frac{\text{ar}(\triangle DFE)}{\text{ar}(\triangle CFB)}$.



- 120) Prove that the ratio of the areas of two similar triangles is equal to the square of the ratio of their corresponding medians.

- 121) State and prove Basic Proportionality theorem.
- 122) Through the mid-point M of the side CD of a parallelogram ABCD, the line BM is drawn intersecting AC in L and AD produced in E. Prove that $EL = 2BL$.
- 123) In $\triangle ABC$, if $AD \perp BC$ and $AD^2 = BD \times DC$, then prove that $\angle BAC = 90^\circ$.

WHATSAPP 8056206308

**JOIN MY *PAID TEST* GROUP
WITH PDF ANSWERS**

**MATHS SCIENCE & SST
CHAPTERWISE NOTES
& LOTS OF UNITS TEST
PAPERS UPLOAD TILL
FINAL EXAM 2026**

**FEES RS.3000
ONE TIME FEES**

**10 CBSE
2025-26
paid group**

**FREE PDF TEST PAPERS
AVAILABLE IN MY WEBSITE
ravitestpapers.com**

RAVI TEST PAPERS & NOTES