

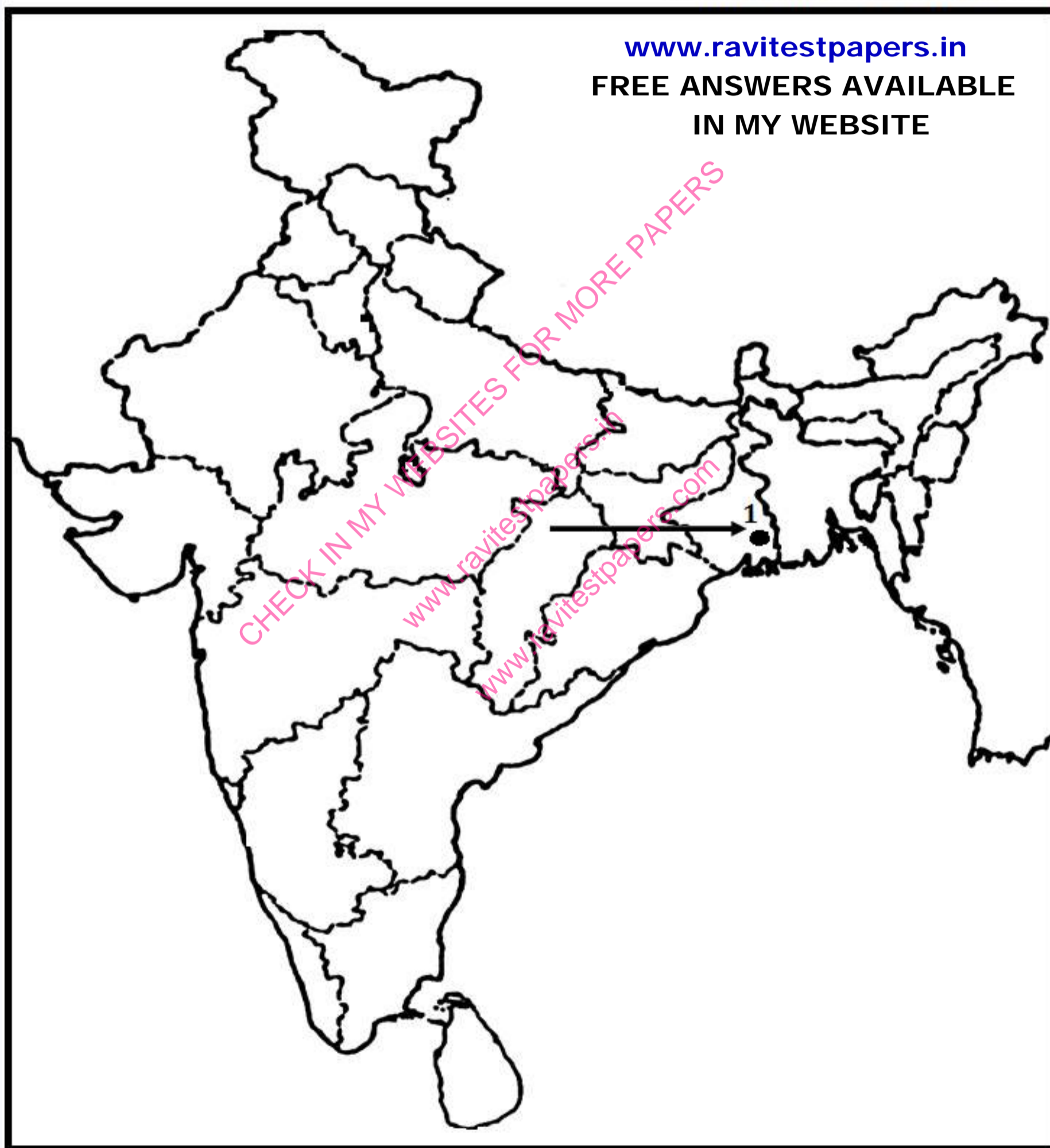
**MY YOUTUBE CHANNEL NAME - RAVI TEST PAPERS**

**FOR PDF FILES CHECK [www.ravitestpapers.com](http://www.ravitestpapers.com)**

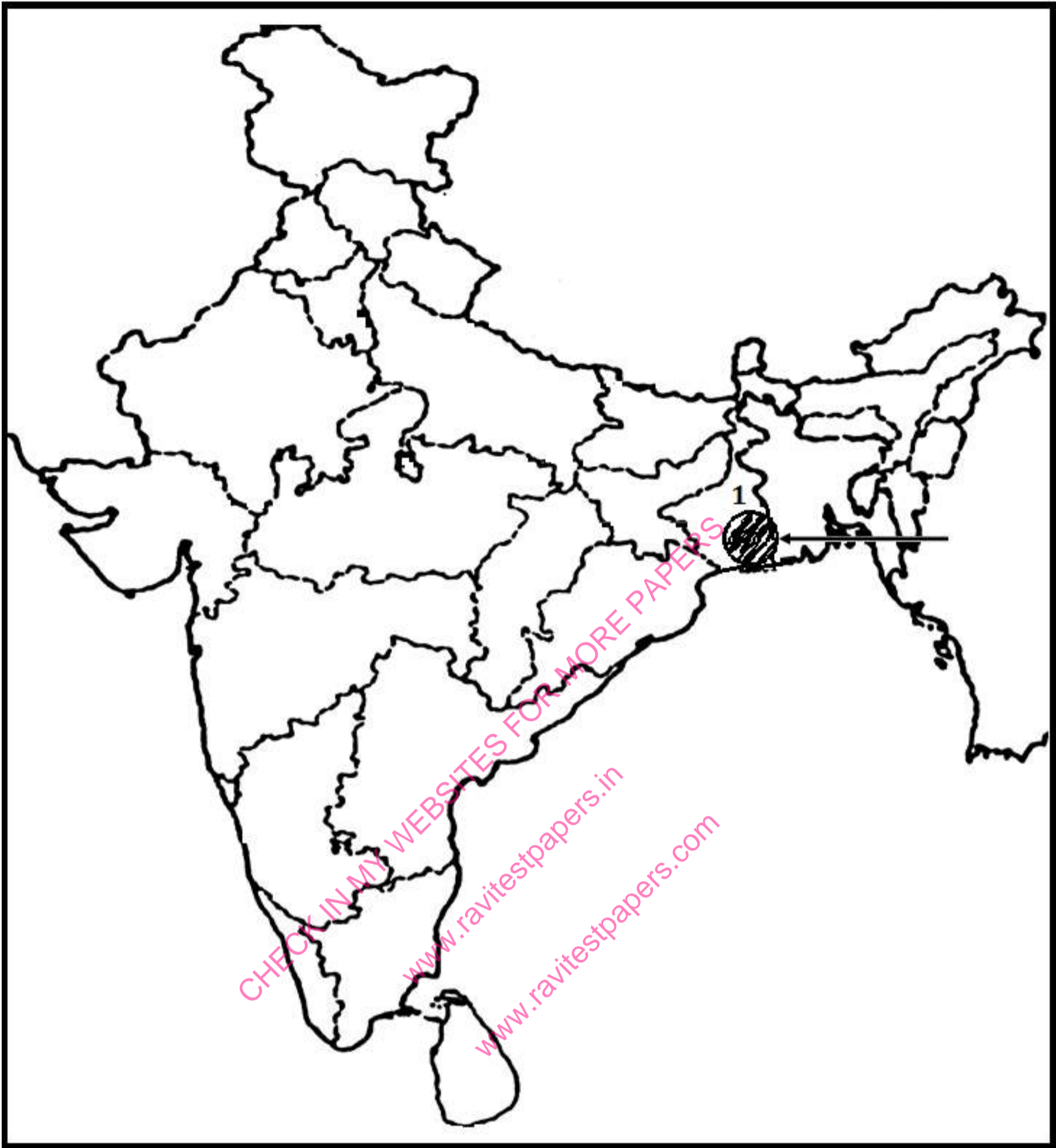
**FREE WHATSAPP GROUP LINK - [www.ravitestpapers.in](http://www.ravitestpapers.in)**

- Q1.**
1. On the given political outline map of India, the place is shown by no.1, where Indian National Congress Session was held in 1920. Identify the place and name it on the line drawn. **2 Marks**
  2. On the same map shade and name the State where the 'No Tax Campaign' was started.

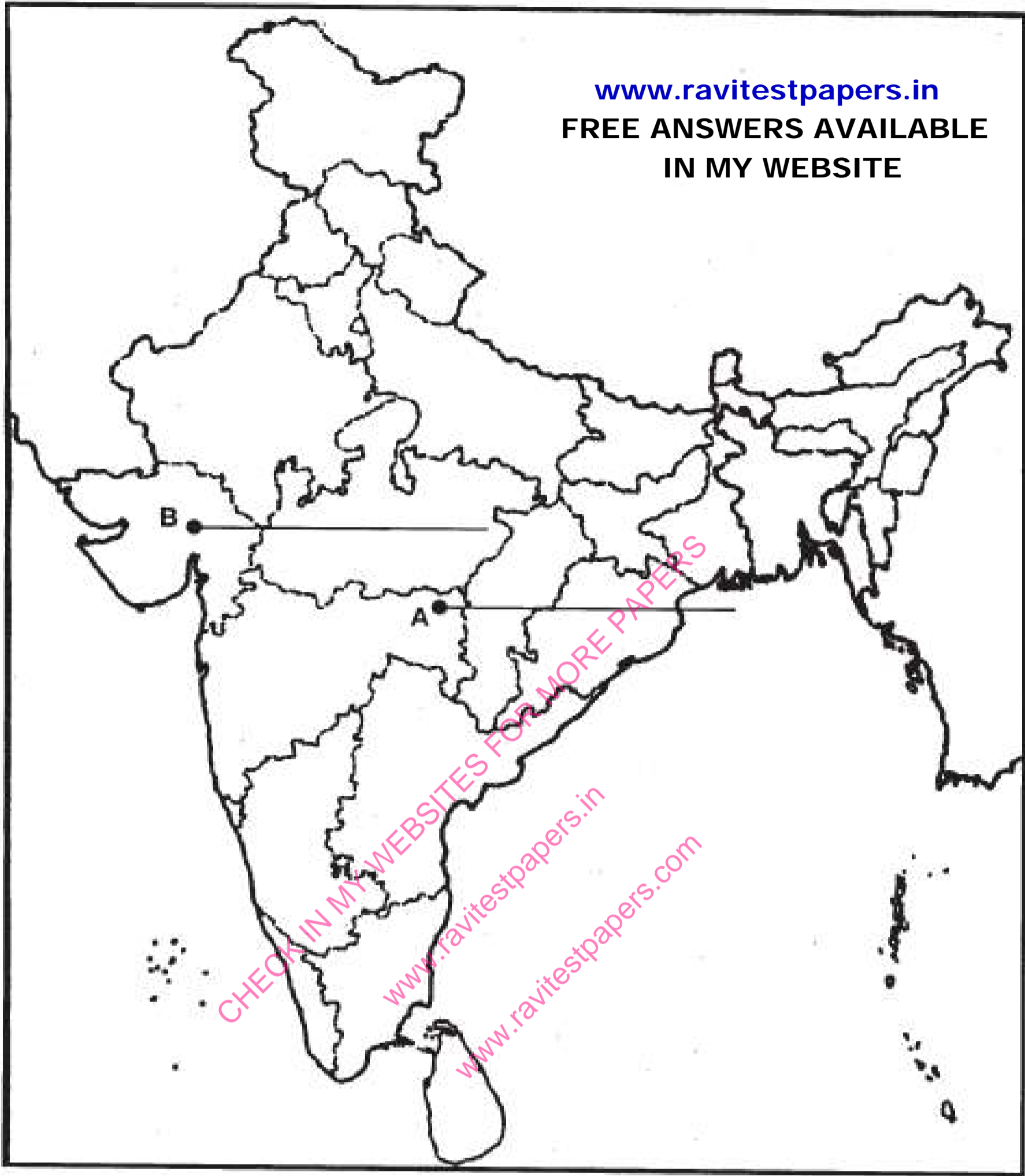
**Outline Map Of India (Political)**



- Q2.**
1. On the given political outline map of India, a place is shown by number 1, which was a famous large-scale industrial region on the eastern coast of the country in 1931. Identify and write the correct name of this place on the line drawn on the map. **2 Marks**
  2. On the same map of India, shade and name the state where the Champaran movement of Indigo planters started.



- Q3.** Two features - A and B are marked in the given outline political map of India. Identify these features with the help of the following informational and write their correct names on the lines marked on the map. **2 Marks**
1. The place where Indian National Congress session of December 1920 was held.
  2. The place where the cotton mill workers satyagraha was held.



- Q4. Locate and label the following items with appropriate symbols on the same map. 2 Marks
1. Amritsar- The place where Jalianwala Bagh intent took place.

2. Champaran- The place of the indigo planters movement.

**JAN 2026 – MARCH 2027 TEST SERIES**

JOIN MY **PAID WHATSAPP GROUP** - PDF FORMAT TEST WITH ANSWERS

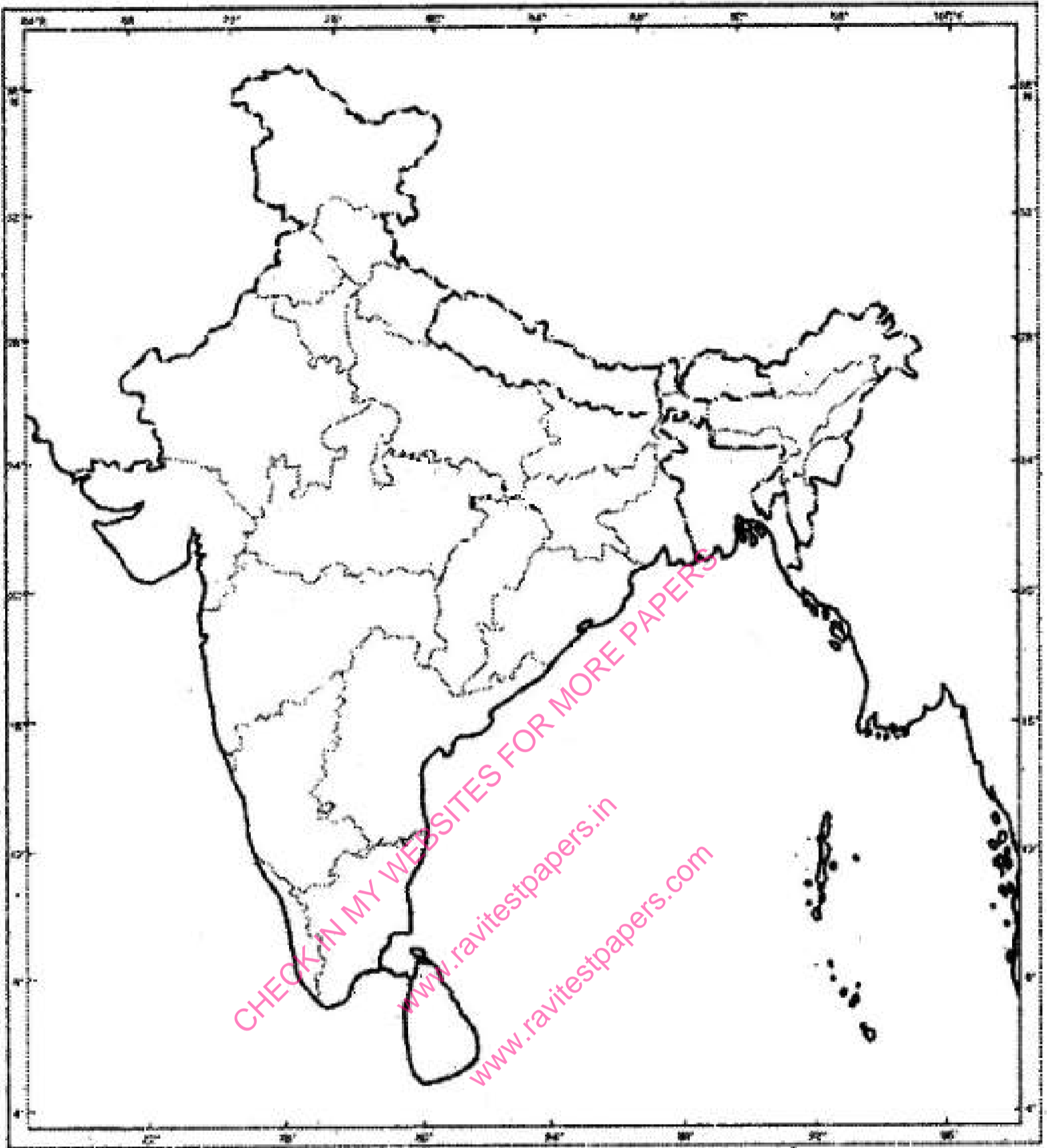
**ONE TIME FEES**

JAN 2026 – MARCH 2027	FEES	JUNE 2026 – MARCH 2027	FEES
CBSE 12TH	RS.4000	CBSE 12TH	RS.3000
CBSE 10TH	RS.4000	CBSE 10TH	RS.3000
NEET - TILL FINAL EXAM	RS.4500	NEET - TILL FINAL EXAM	RS.3500
JEE - TILL FINAL EXAM	RS.4500	JEE - TILL FINAL EXAM	RS.3500
TN 12TH	RS.3000	TN 12TH	RS.2000
TN 10TH	RS.3000	TN 10TH	RS.2000

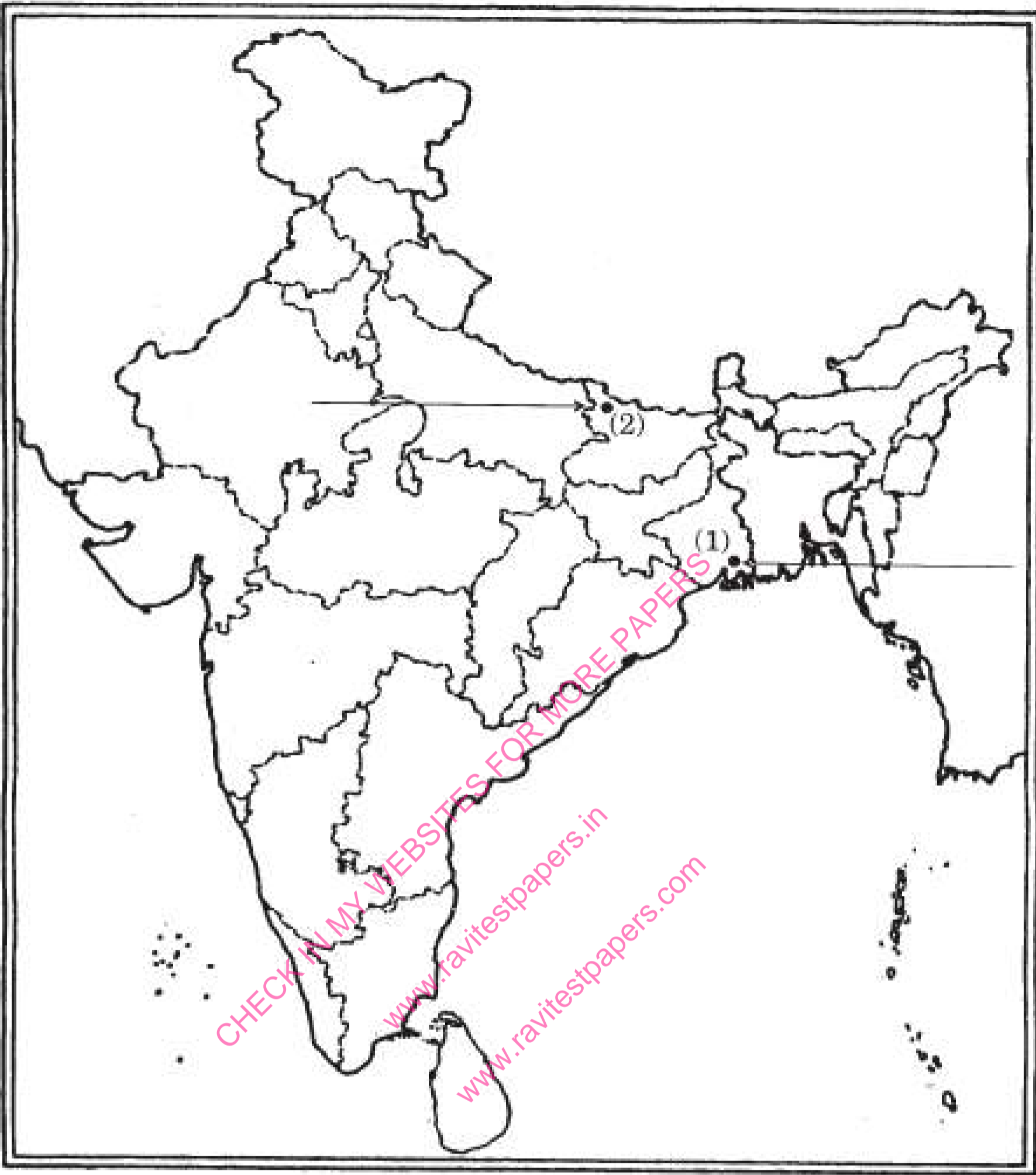
**CHAPTER WISE STUDY MATERIALS AVAILABLE FOR ALL CLASSES**

CHECK FREE TEST PAPERS [www.ravitestpapers.com](http://www.ravitestpapers.com) & [www.ravitestpapers.in](http://www.ravitestpapers.in)

**RAVI TEST PAPERS & NOTES, WHATSAPP – 8056206308**



- Q5.** Two features- (1) and (2) are marked in the given political outline map of India Identify these features with the help of the following information and write their correct names on the lines marked in the map: **2 Marks**
1. The place, where the Indian National Congress Session of September 1920 was held.
  2. The place, where the movement of Indigo Planters took place.



- Q6. Locate and label the following features with appropriate symbols on the same political outline map of In&a: 2 Marks
- Amritsar: The place where Jalianwala Bagh incident.
  - Bardoli: The place where no tax campaign was held.

**JAN 2026 – MARCH 2027 TEST SERIES**

JOIN MY **PAID WHATSAPP GROUP** - PDF FORMAT TEST WITH ANSWERS

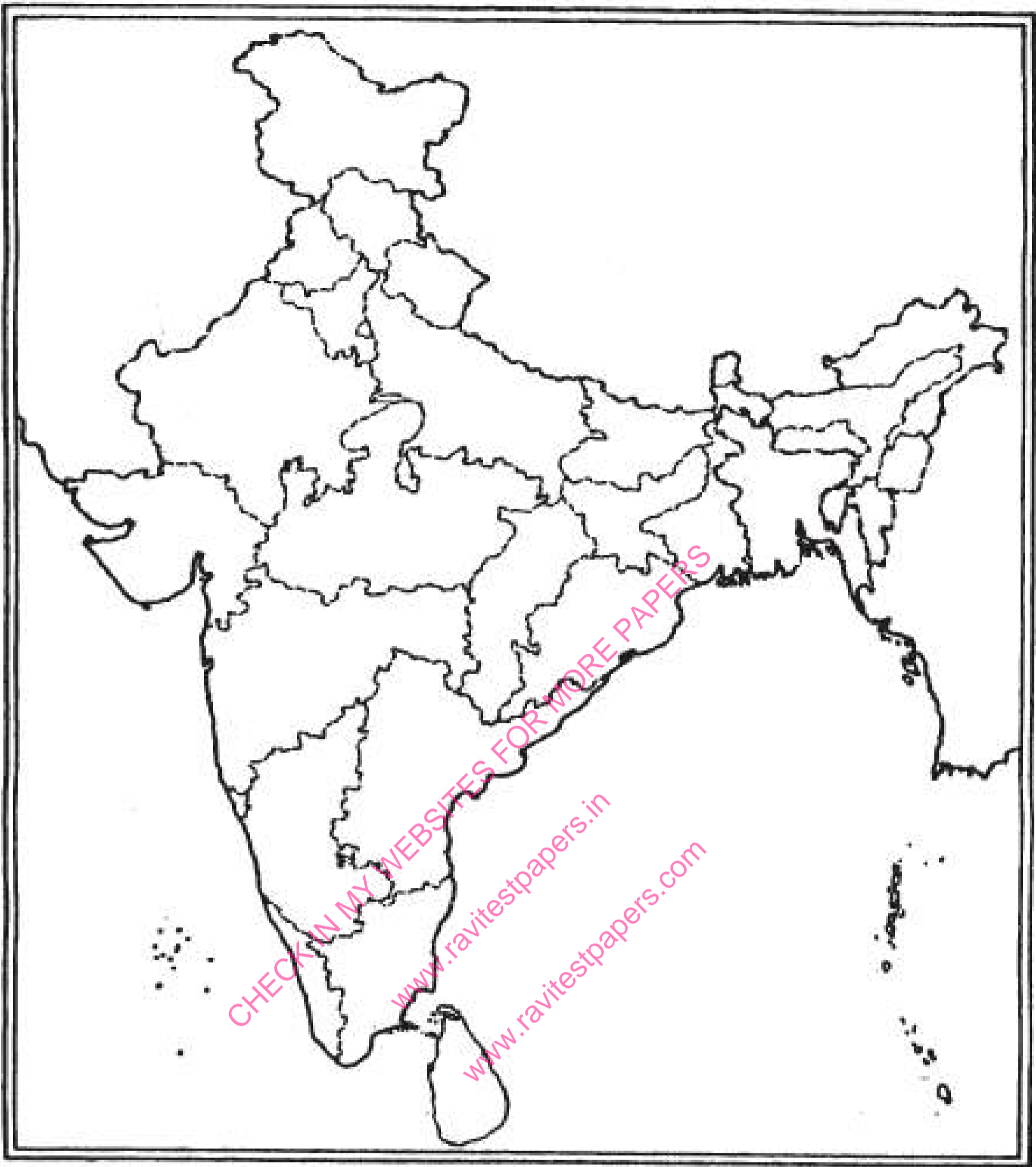
**ONE TIME FEES**

JAN 2026 – MARCH 2027	FEES	JUNE 2026 – MARCH 2027	FEES
CBSE 12TH	RS.4000	CBSE 12TH	RS.3000
CBSE 10TH	RS.4000	CBSE 10TH	RS.3000
NEET - TILL FINAL EXAM	RS.4500	NEET - TILL FINAL EXAM	RS.3500
JEE - TILL FINAL EXAM	RS.4500	JEE - TILL FINAL EXAM	RS.3500
TN 12TH	RS.3000	TN 12TH	RS.2000
TN 10TH	RS.3000	TN 10TH	RS.2000

**CHAPTER WISE STUDY MATERIALS AVAILABLE FOR ALL CLASSES**

CHECK FREE TEST PAPERS [www.ravitestpapers.com](http://www.ravitestpapers.com) & [www.ravitestpapers.in](http://www.ravitestpapers.in)

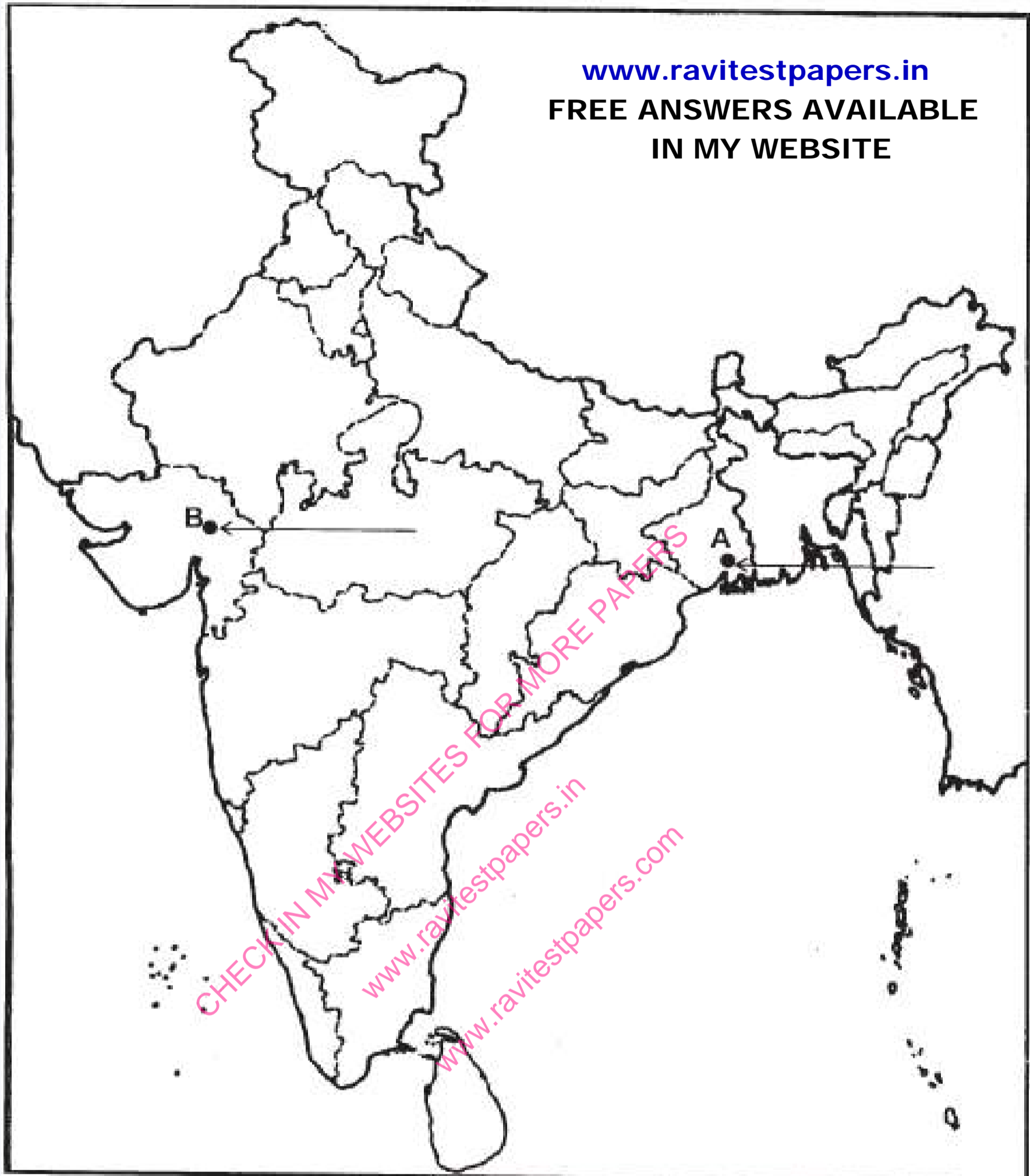
**RAVI TEST PAPERS & NOTES, WHATSAPP – 8056206308**



- Q7.** Two features - A and B are marked in the given political outline map of India. Identify these features with the help of the following information and write their correct names on the lines marked in the map:
1. The place where Indian National Congress Session was held in September 1920.

**2 Marks**

2. The place where the Peasant Satyagraha was held in Gujarat.

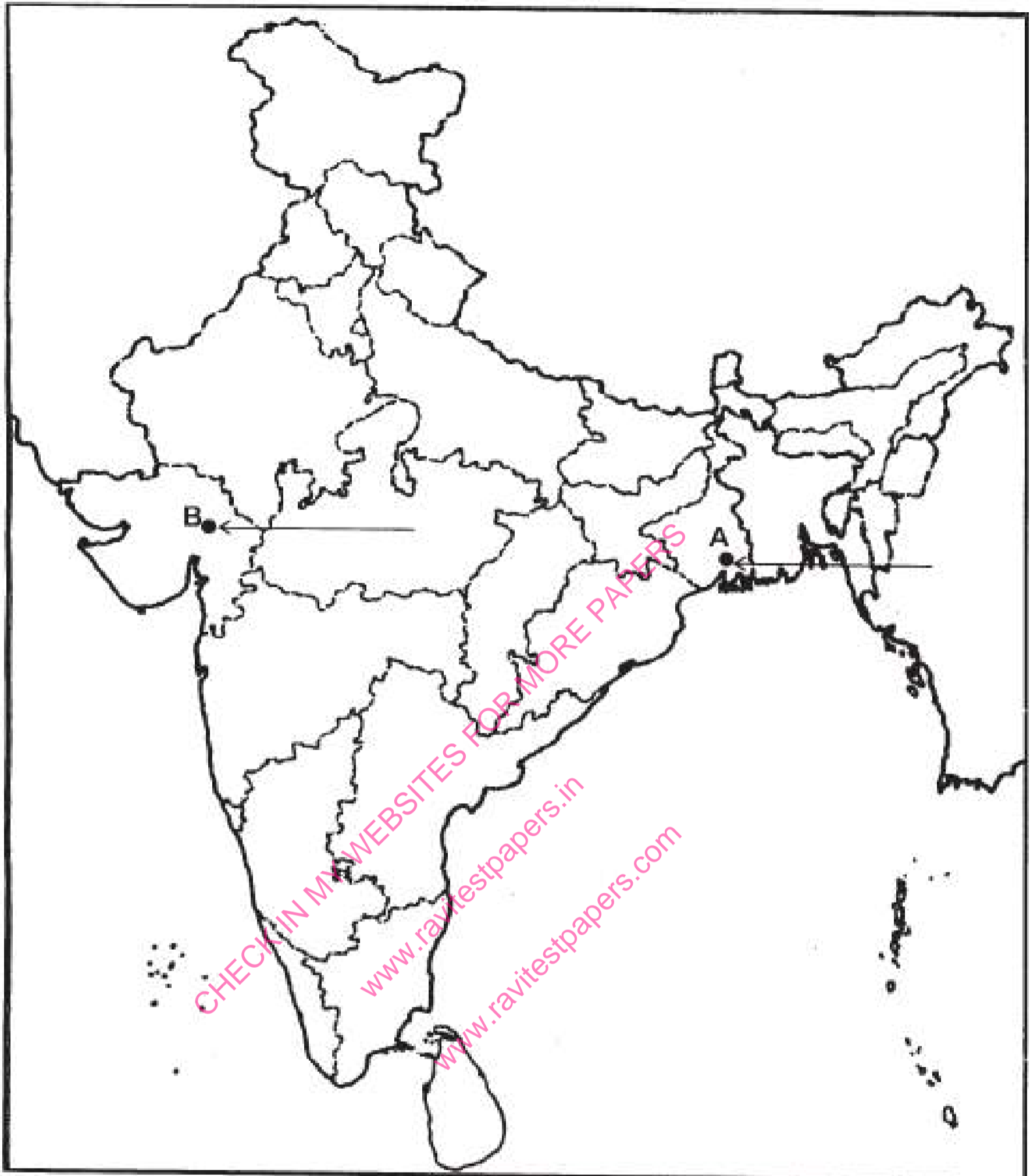


**Q8.** Locate and label the following items with appropriate symbols on the same map:

1. Chauri-Chaura - The place of calling off the Non-Cooperation Movement (N.C.M).

**2 Marks**

2. Amritsar - The place where Jallian Wala Bagh incident took place.

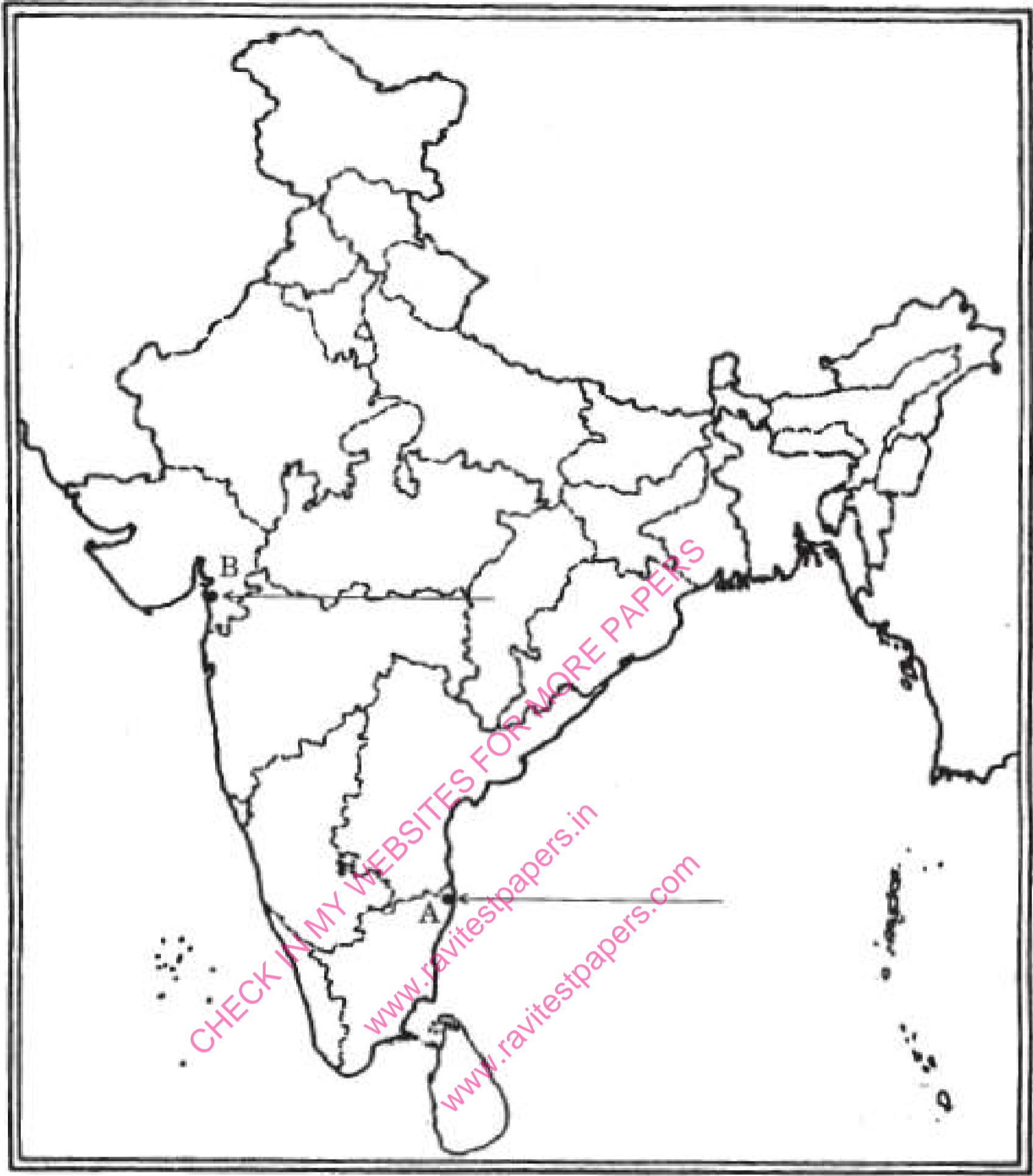


**Q9.** Two features - A and B are marked in the given political outline map of India. Identify these features with the help of the following information and write their correct names on the hues marked in the map:

**2 Marks**

1. The place, where the Indian National Congress Session was held in 1927.

2. The place, where the Civil Disobedience Movement was started.



- Q10.**Locate and label the following features with appropriate symbols on the same political outline map of India:

**2 Marks**

  - Champan - The place where the movement of Indigo Planters took place.
  - Kheda - The place where the Peasant Satyagraha was held.

**JAN 2026 – MARCH 2027 TEST SERIES**

JOIN MY **PAID WHATSAPP GROUP** - PDF FORMAT TEST WITH ANSWERS

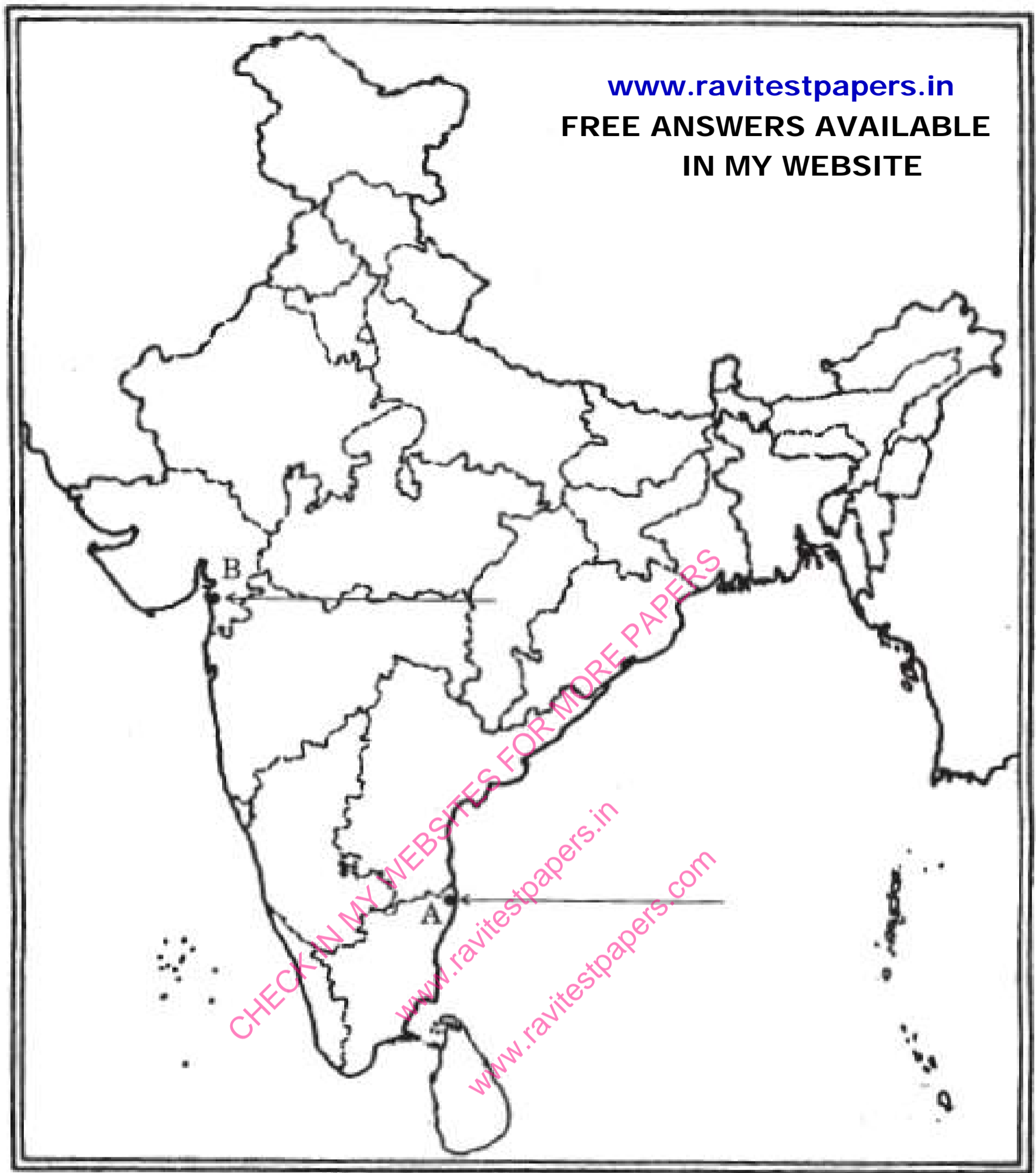
**ONE TIME FEES**

<b>JAN 2026 – MARCH 2027</b>	<b>FEES</b>	<b>JUNE 2026 – MARCH 2027</b>	<b>FEES</b>
CBSE 12TH	RS.4000	CBSE 12TH	RS.3000
CBSE 10TH	RS.4000	CBSE 10TH	RS.3000
NEET - TILL FINAL EXAM	RS.4500	NEET - TILL FINAL EXAM	RS.3500
JEE - TILL FINAL EXAM	RS.4500	JEE - TILL FINAL EXAM	RS.3500
TN 12TH	RS.3000	TN 12TH	RS.2000
TN 10TH	RS.3000	TN 10TH	RS.2000

**CHAPTER WISE STUDY MATERIALS AVAILABLE FOR ALL CLASSES**

CHECK FREE TEST PAPERS [www.ravitestpapers.com](http://www.ravitestpapers.com) & [www.ravitestpapers.in](http://www.ravitestpapers.in)

**RAVI TEST PAPERS & NOTES, WHATSAPP – 8056206308**



**Q11.** On the given political outline map of India, two features A and B are marked. Identify these features with the help of the following information:

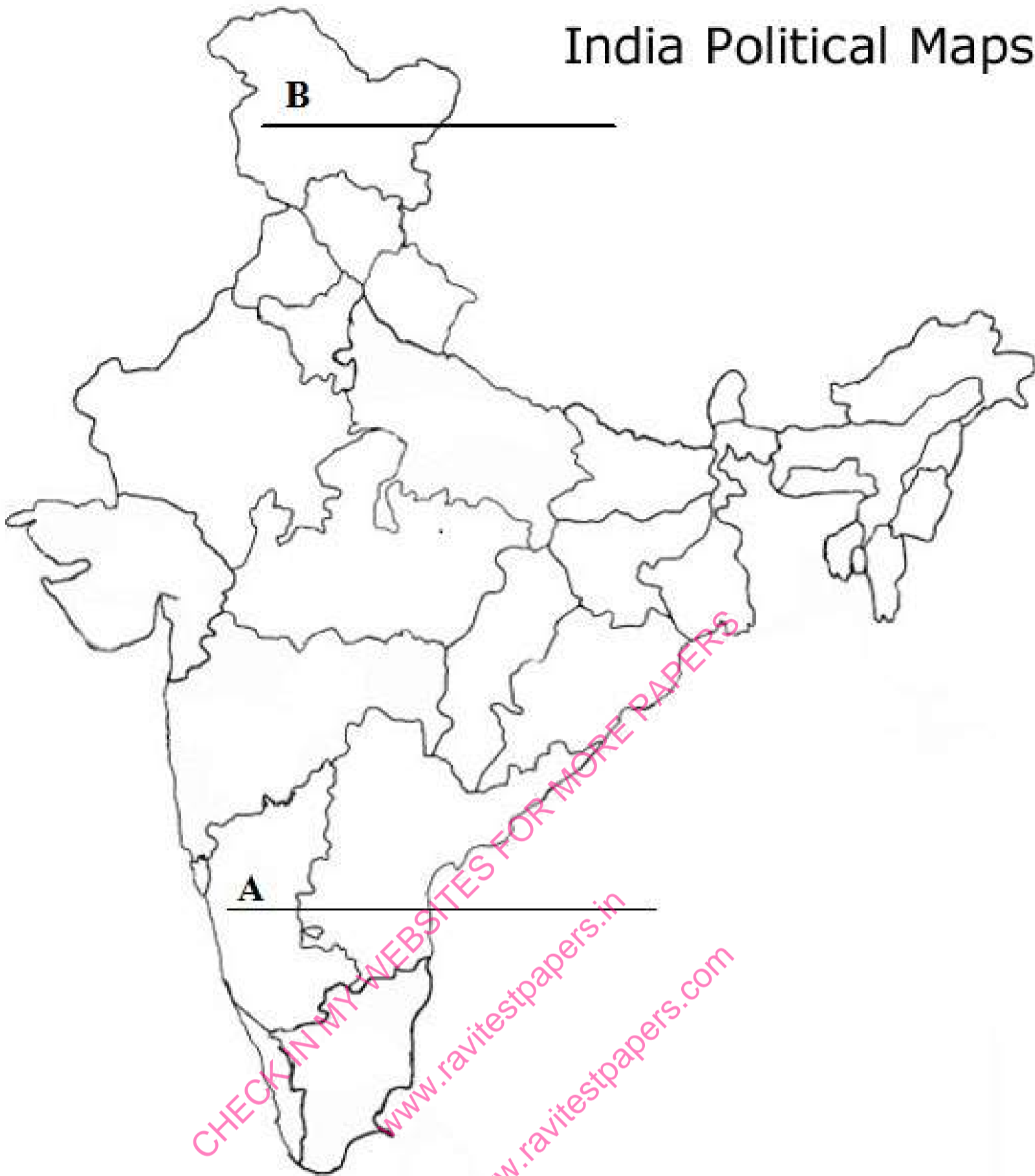
**3 Marks**

1. Iron ore mines.
2. Terminal station of North-South Corridor.

On the same map locate and label the following:

1. Gandhinagar Software Technology Park.

## India Political Maps

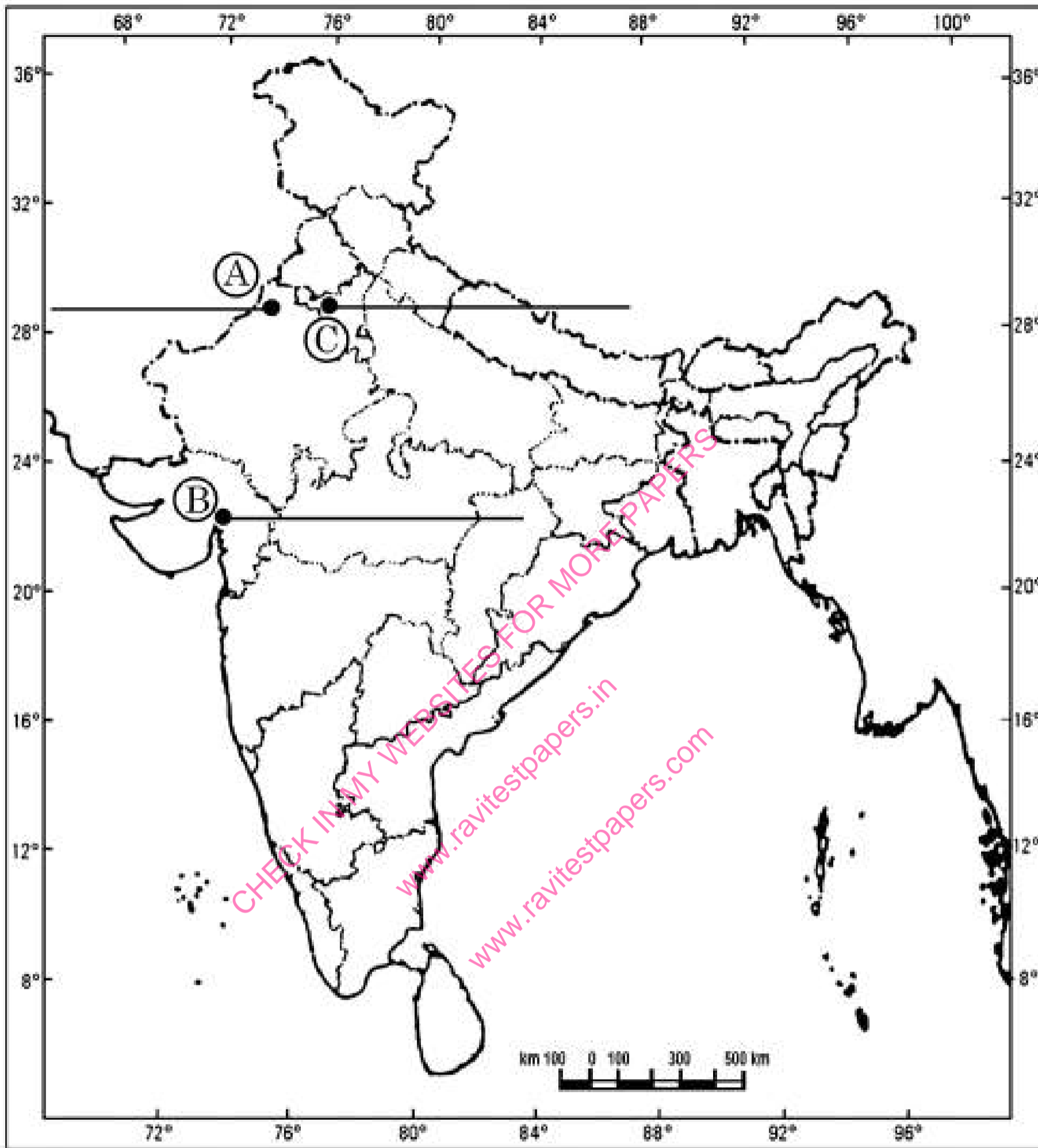


**Q12.** Three features A, B and C are marked on the given political outline map of India. Identify these features with the help of the following information and write their correct names on the lines marked in the map.

**3 Marks**

1. The place where the Indian National Congress Session was held.
2. The place associated with peasant's satyagraha.
3. The city associated with the Jallianwala Bagh incident.

भारत का रेखा-मानचित्र ( राजनीतिक )  
Outline Map of India (Political)



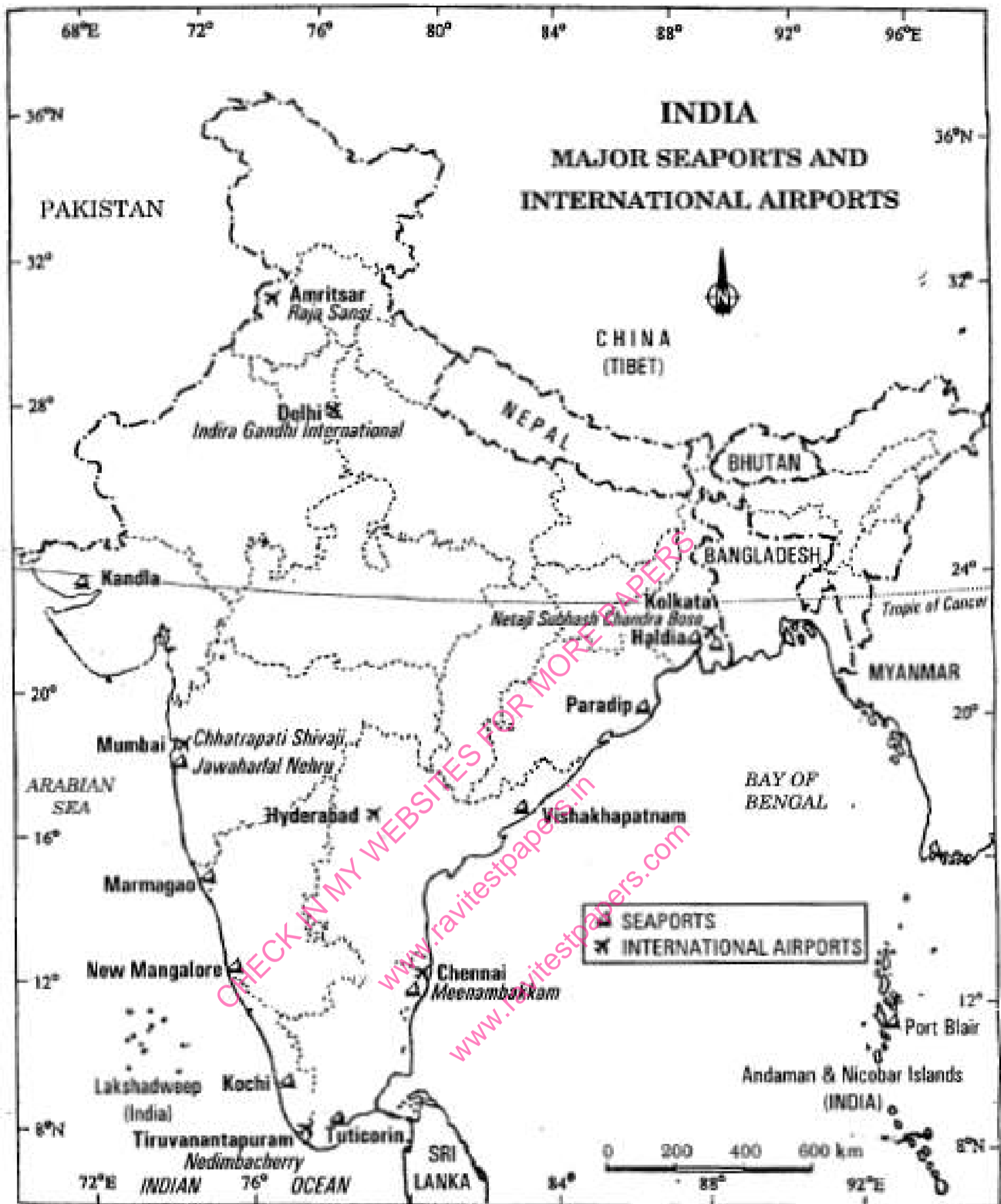
Q13.Study the map given below showing major seaports and international airports of India carefully and answer the questions that follow:- 3 Marks

**JAN 2026 – MARCH 2027 TEST SERIES**

JOIN MY **PAID WHATSAPP GROUP** - PDF FORMAT TEST WITH ANSWERS  
**ONE TIME FEES**

JAN 2026 – MARCH 2027	FEES	JUNE 2026 – MARCH 2027	FEES
CBSE 12TH	RS.4000	CBSE 12TH	RS.3000
CBSE 10TH	RS.4000	CBSE 10TH	RS.3000
NEET - TILL FINAL EXAM	RS.4500	NEET - TILL FINAL EXAM	RS.3500
JEE - TILL FINAL EXAM	RS.4500	JEE - TILL FINAL EXAM	RS.3500
TN 12TH	RS.3000	TN 12TH	RS.2000
TN 10TH	RS.3000	TN 10TH	RS.2000

**CHAPTER WISE STUDY MATERIALS AVAILABLE FOR ALL CLASSES**  
 CHECK FREE TEST PAPERS [www.ravitestpapers.com](http://www.ravitestpapers.com) & [www.ravitestpapers.in](http://www.ravitestpapers.in)  
**RAVI TEST PAPERS & NOTES, WHATSAPP – 8056206308**



1. Name three states which have major seaports but do not have international airports as shown in the map given above,
2. Write the names of the major seaports of these states.

**Q14.** On the given political outline map of India locate and label the following with appropriate symbols:

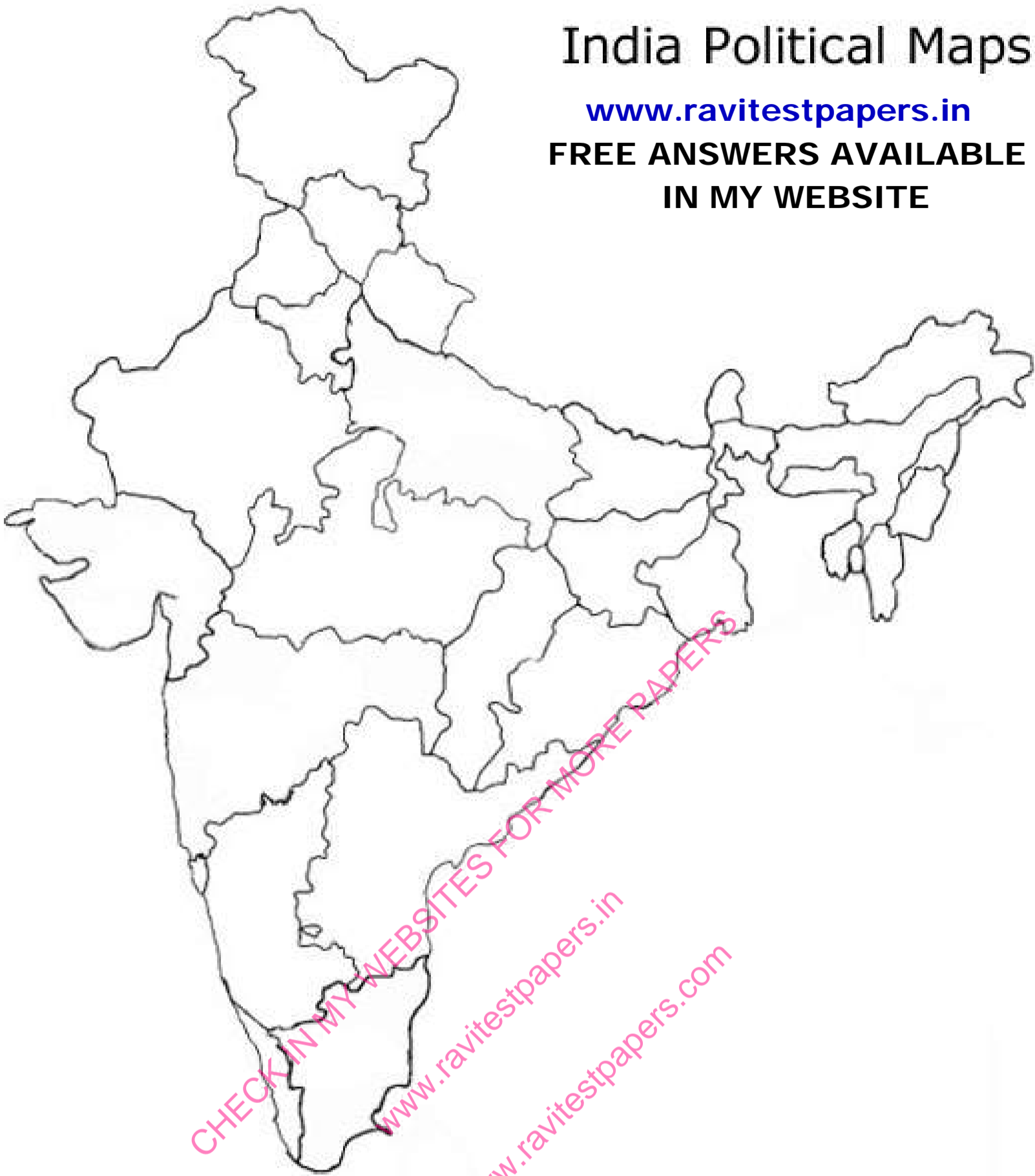
**3 Marks**

- |             |                          |
|-------------|--------------------------|
| A Salem     | Iron and Steel Centre    |
| B Kandla    | Major Sea Port           |
| C Hyderabad | Software Technology Park |

## India Political Maps

[www.ravitestpapers.in](http://www.ravitestpapers.in)

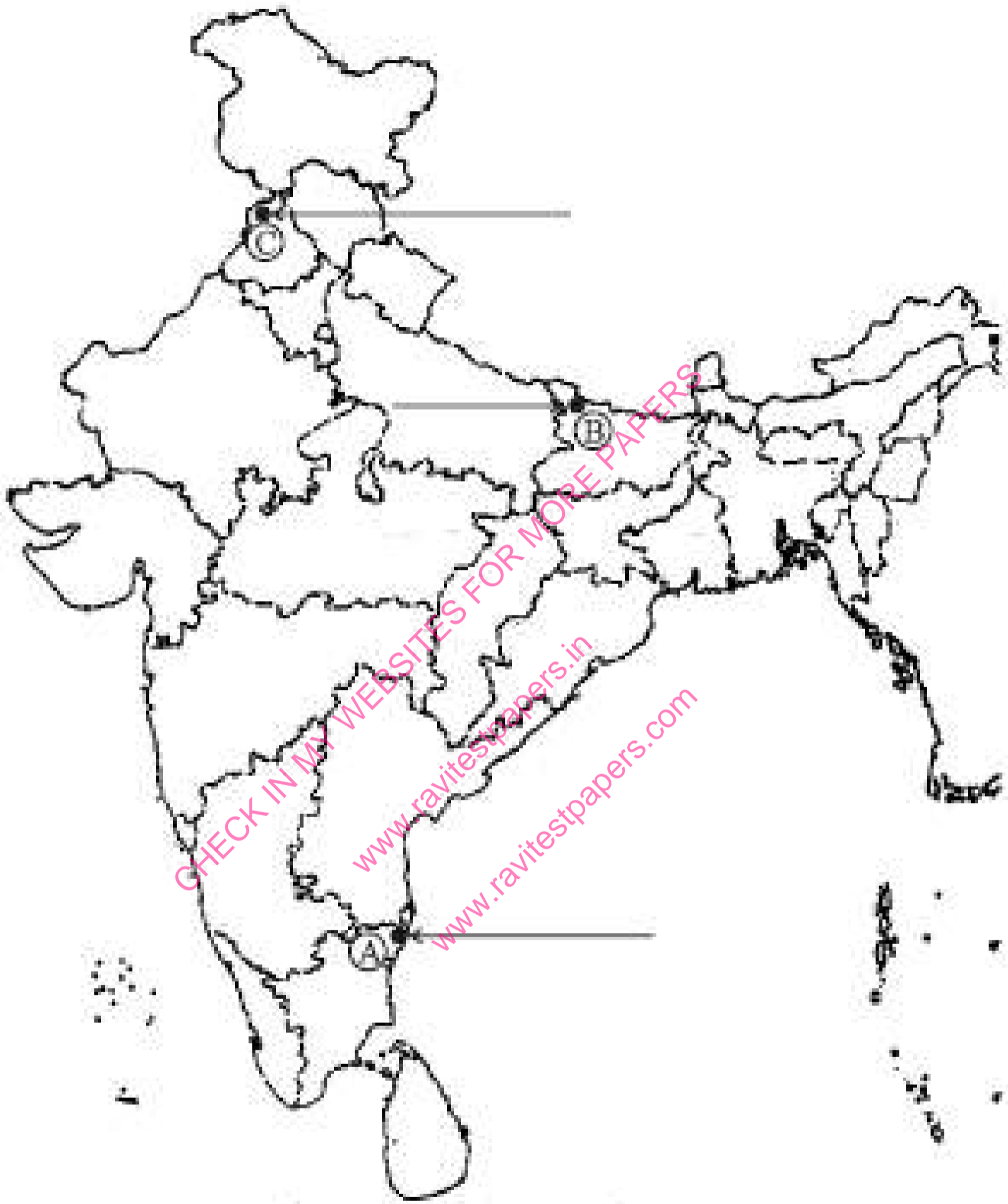
**FREE ANSWERS AVAILABLE  
IN MY WEBSITE**



**Q15.** Three features A, B and C are marked on the given political outline map of **India**. Identify these features with the help of the following information and write their correct names on the lines marked in the map:

**3 Marks**

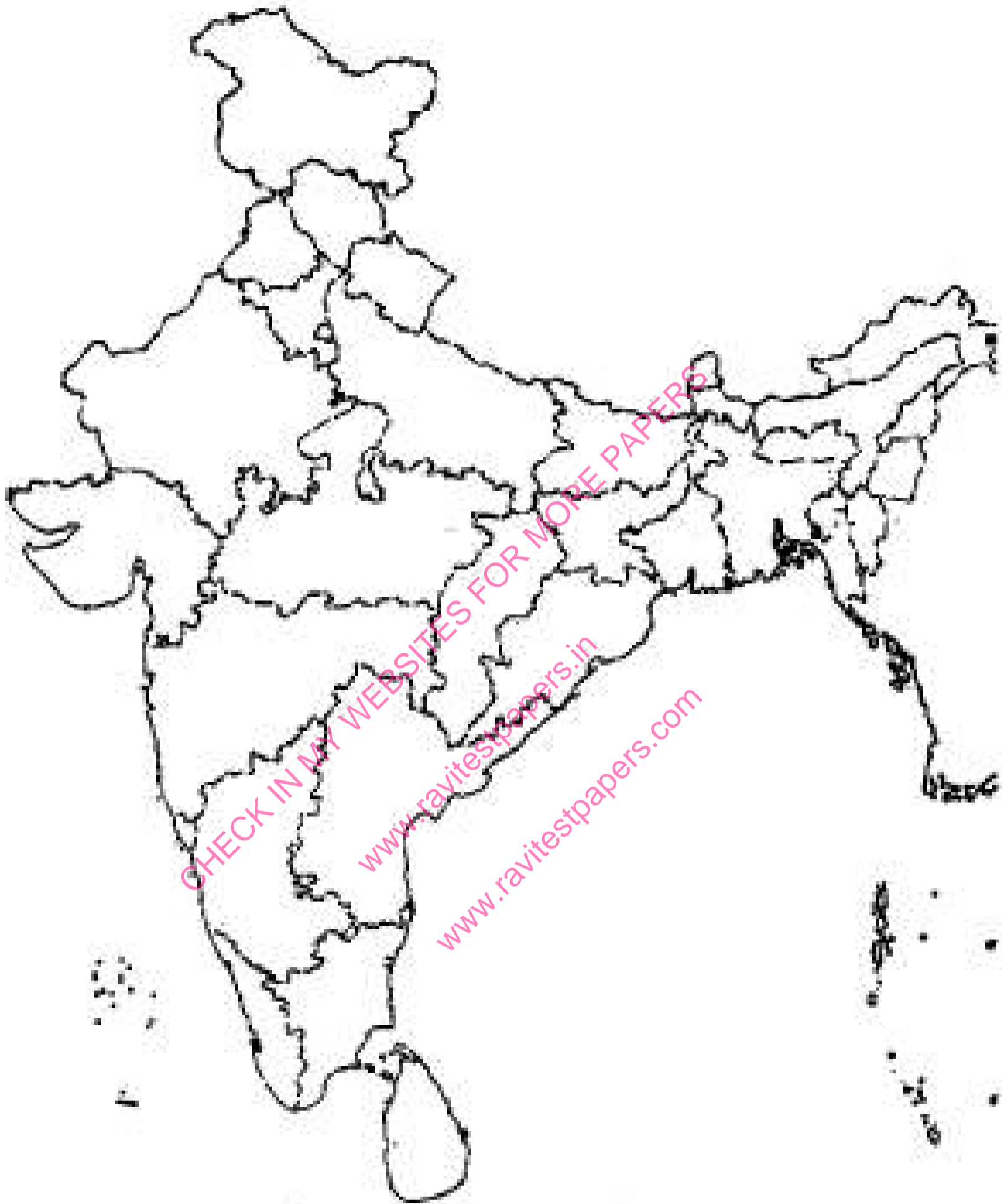
1. The place where the Indian National Congress Session was held.
2. The place associated with peasant's satyagraha.
3. The city associated with the Jallianwala Bagh incident.



**Q16.** On the given political outline map of India locate and label the following with appropriate symbols:

**3 Marks**

- |    |            |                        |
|----|------------|------------------------|
| A. | Ankleshwar | - Oil field            |
| B. | Durgapur   | - Iron and steel plant |
| C. | Tuticorin  | - Major seaport        |



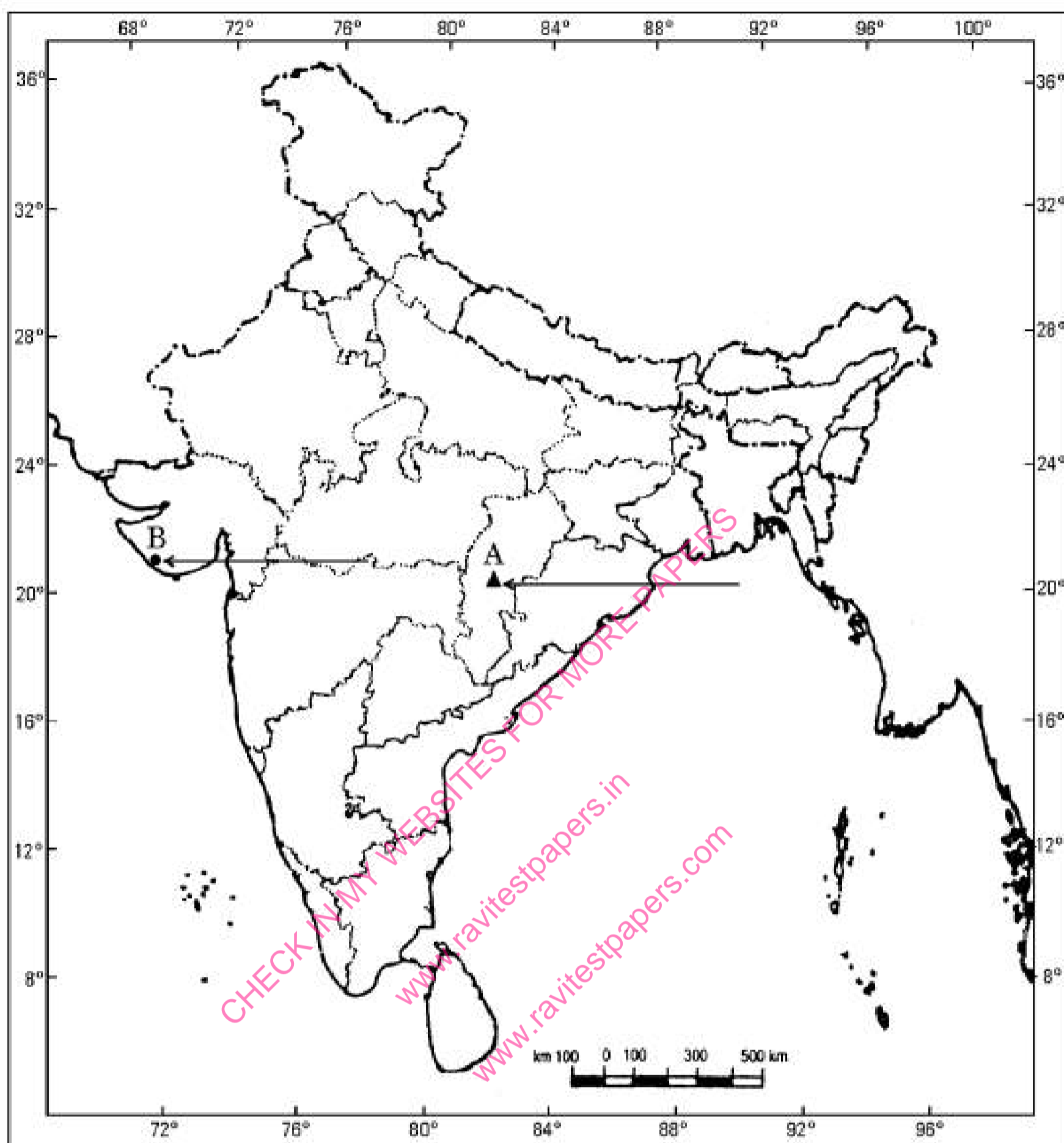
**Q17.** Two features A and B are marked on the given political outline map of **India**. Identify these features with the help of the following information and write their correct names on the lines marked in the map: **3 Marks**

1. Iron ore mines.
2. Terminal Station of East-West Corridor.

On the same political outline map of India, locate and label the following:

Vishakhapatnam — Software Technology Park.

# Outline Map of India (Political)



**Q18.** 1. On the given outline political Map of India, identify the place marked as (A) with the help of following information and write its correct name on the line marked near it.

**3 Marks**

(A) The place where National Congress Session was held in September 1920.

2. On the same given Map of India, locate and label the following with appropriate symbols.

1. (I) Tarapur-Nuclear Power Plant.

**OR**

(II) Kalpakkam-Nuclear Power Plant.

2. Hyderabad-Rajiv Gandhi International Airpor.

## JAN 2026 – MARCH 2027 TEST SERIES

JOIN MY **PAID WHATSAPP GROUP** - PDF FORMAT TEST WITH ANSWERS

### ONE TIME FEES

JAN 2026 – MARCH 2027	FEES	JUNE 2026 – MARCH 2027	FEES
CBSE 12TH	RS.4000	CBSE 12TH	RS.3000
CBSE 10TH	RS.4000	CBSE 10TH	RS.3000
NEET - TILL FINAL EXAM	RS.4500	NEET - TILL FINAL EXAM	RS.3500
JEE - TILL FINAL EXAM	RS.4500	JEE - TILL FINAL EXAM	RS.3500
TN 12TH	RS.3000	TN 12TH	RS.2000
TN 10TH	RS.3000	TN 10TH	RS.2000

**CHAPTER WISE STUDY MATERIALS AVAILABLE FOR ALL CLASSES**

CHECK FREE TEST PAPERS [www.ravitestpapers.com](http://www.ravitestpapers.com) & [www.ravitestpapers.in](http://www.ravitestpapers.in)

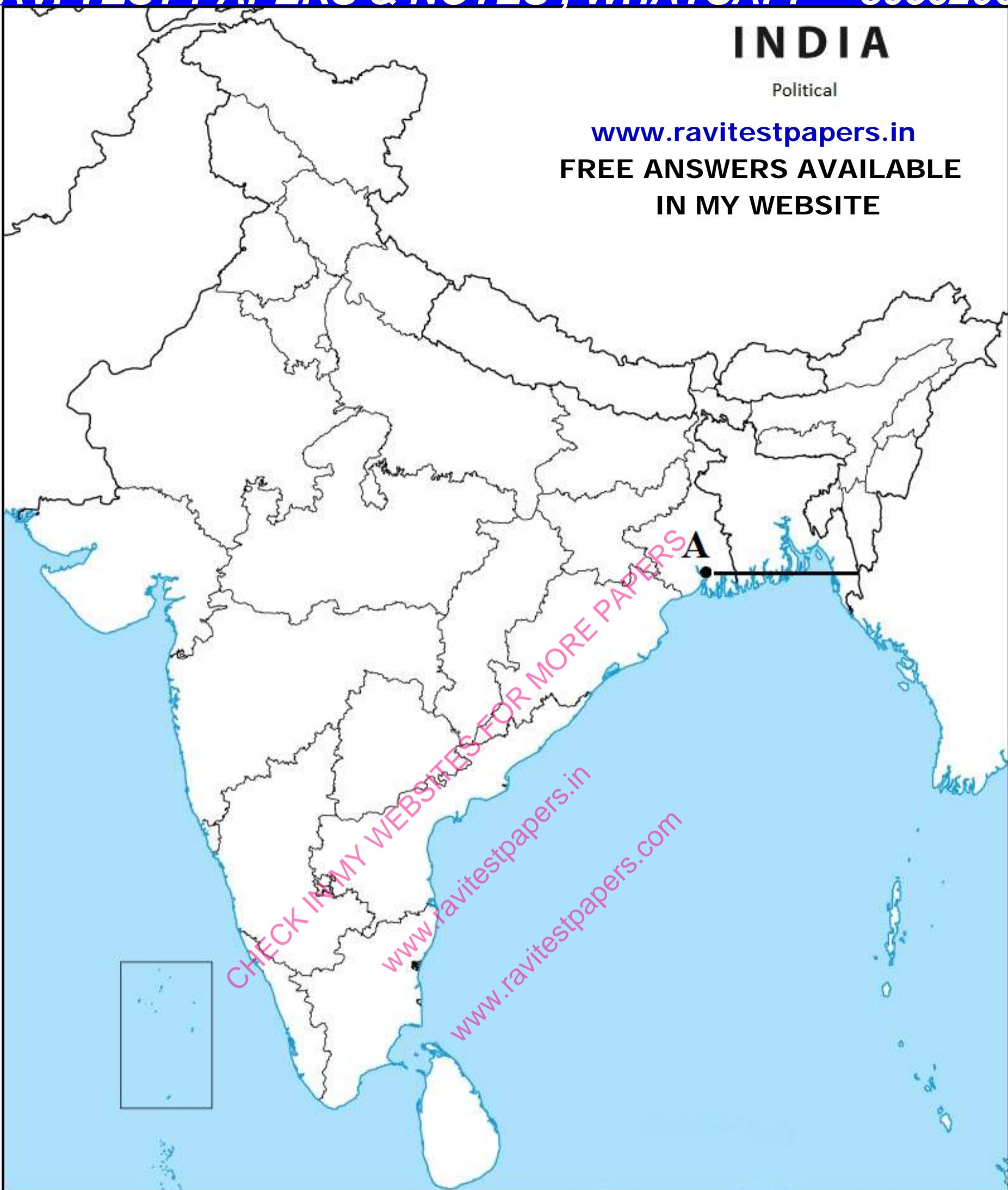
**RAVI TEST PAPERS & NOTES, WHATSAPP – 8056206308**

# INDIA

Political

[www.ravitestpapers.in](http://www.ravitestpapers.in)

FREE ANSWERS AVAILABLE  
IN MY WEBSITE

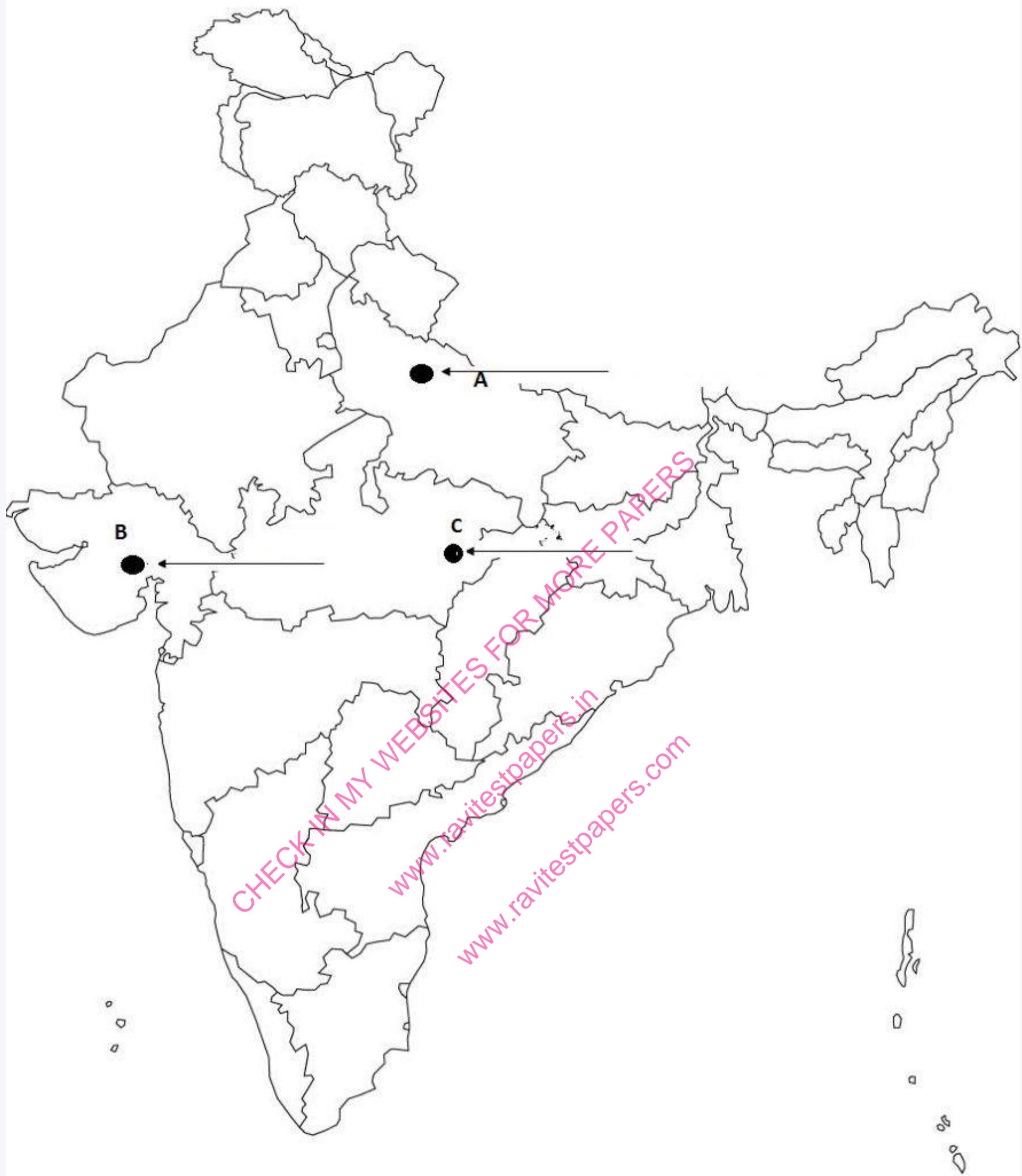


**Q19.** Three features A, B and C are marked on the given political outline map of India. Identify these features with the help of the following information and write their correct names on the lines marked on the map:

**3 Marks**

1. The place, related to the calling off the 'Non-Cooperation Movement.'
2. The place where the 'Peasant's Satyagraha' was started.
3. Name the place where 'Indian National Congress' session was held.

## India



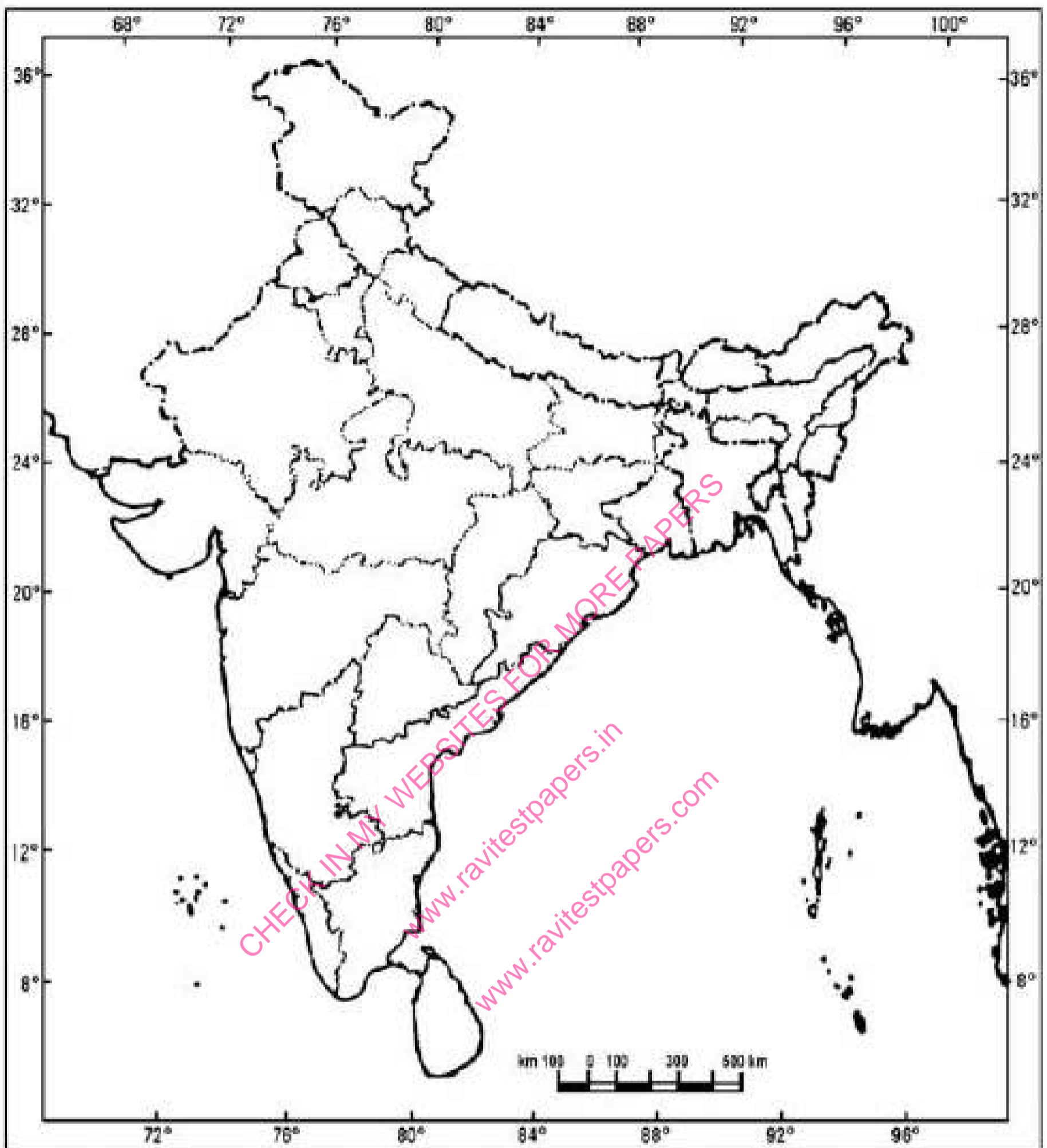
Q20.

3 Marks

On the given political outline map of India (on page 11), locate and label the following with appropriate symbols :

1. Oil Field -Digboi
2. Iron and Cteel Plant - Bhilai
3. Major Cea Port -Kochi

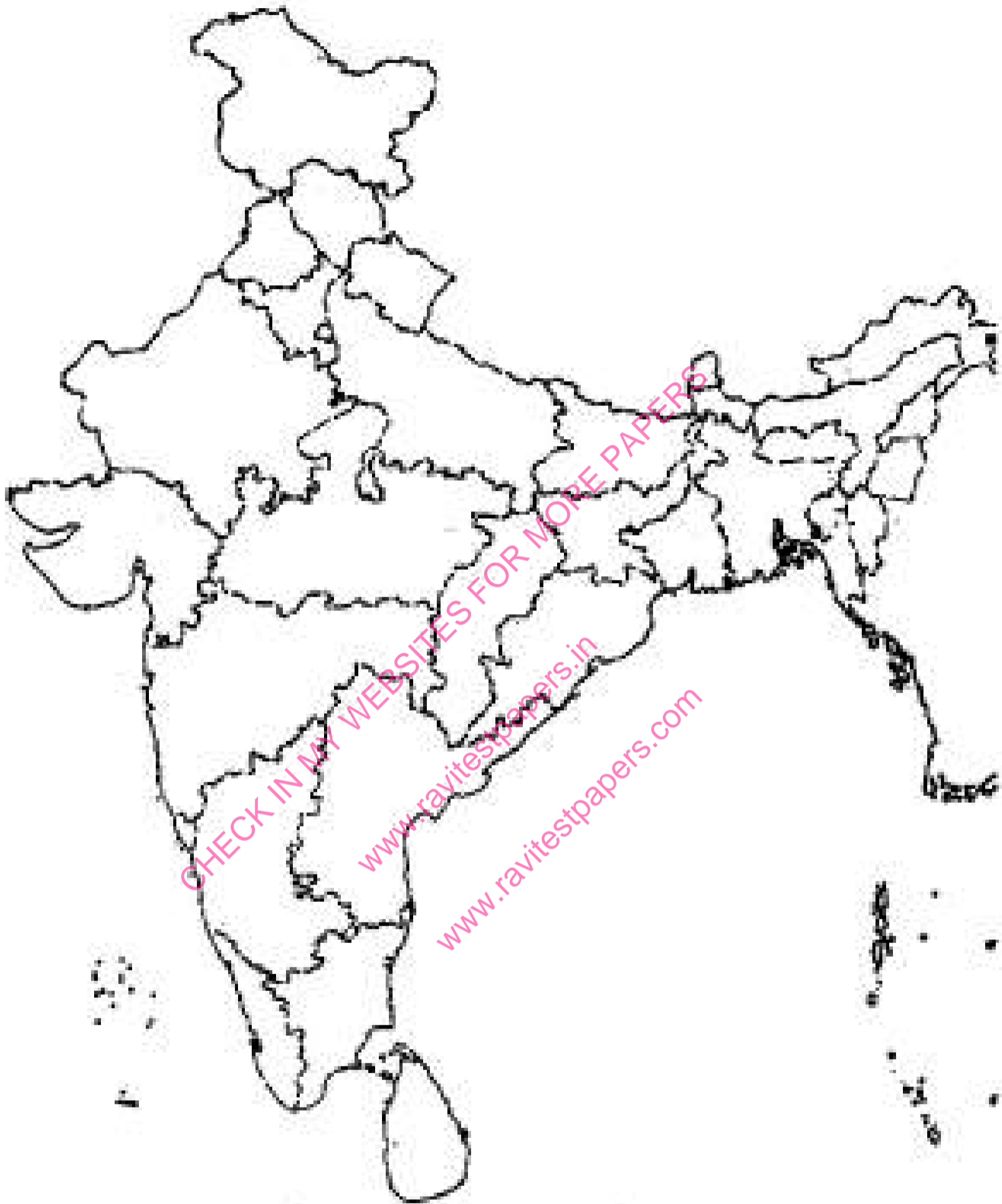
## Outline Map of India (Political)



**Q21.** On the given political outline map of India (on page II), locate and label the following with appropriate symbols:

**3 Marks**

1. Oil Field - Digboi.
2. Iron and Steel Plant - Bhilai.
3. Major Sea Port - Kochi.



**Q22.** 1. On the given political outline map of India (on page 11), identify the place marked as A with the help of the following information and write its correct name on the line marked near it.

**3 Marks**

A. The place where Jallianwala Bagh massacre took place.

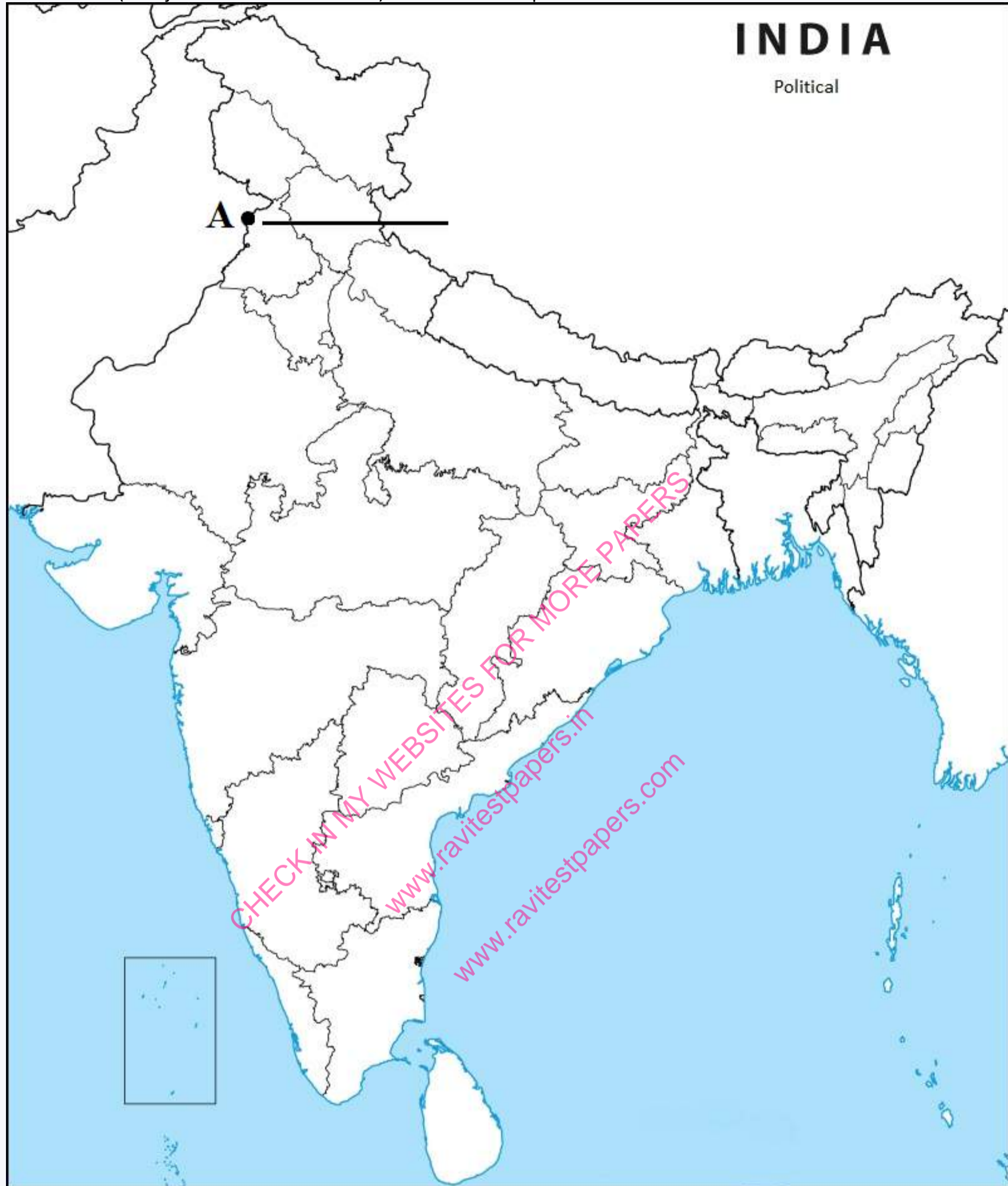
2. On the same given map of India, locate and label the following:

1. (I) Singrauli Thermal Plant.

OR

(II) Mumbai Software Technology Park.

2. Kolkata (Netaji Subhash Chandra Bose) International Airport.

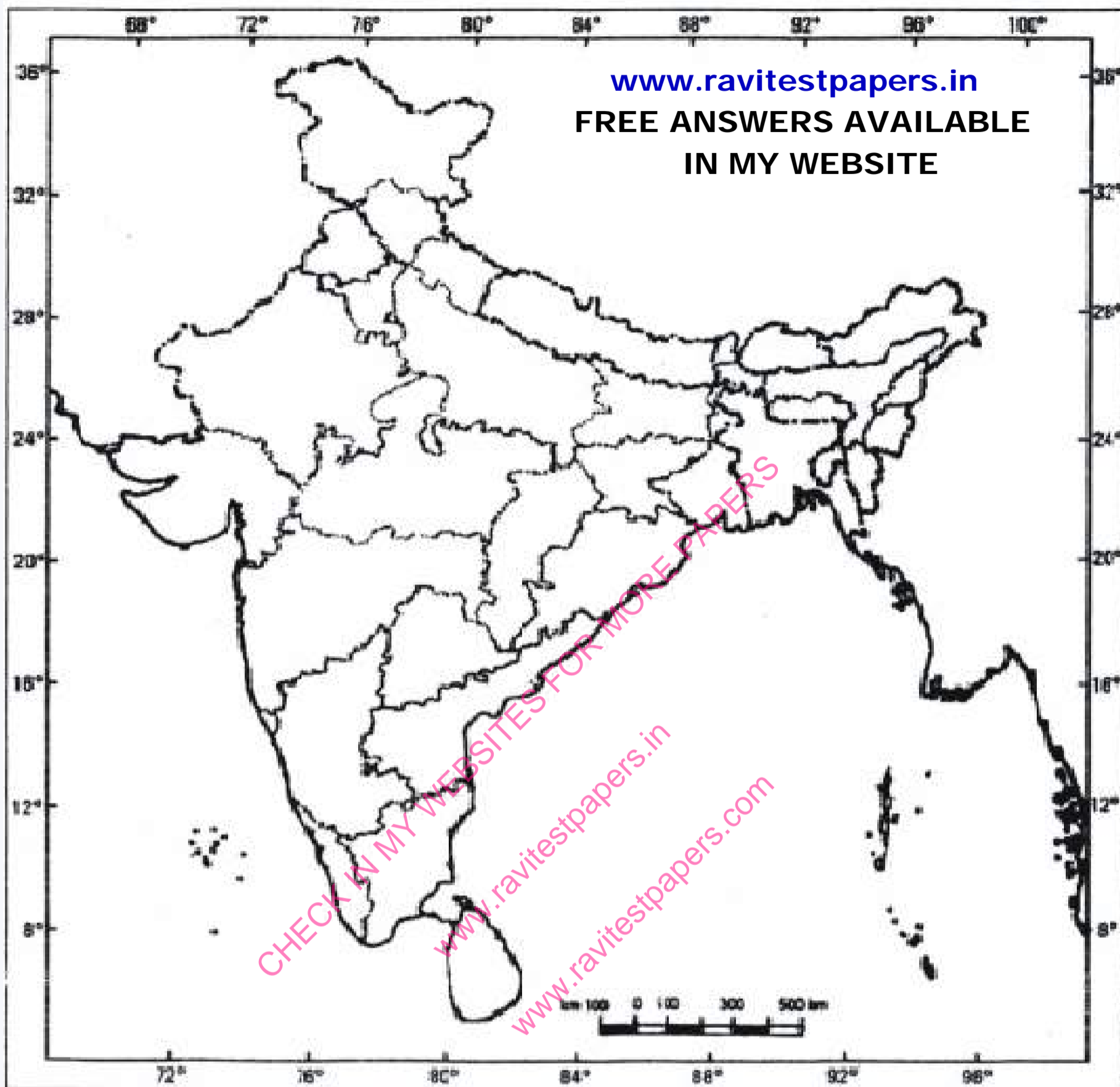


**Q23.** On the given political outline map of India locate and label the following with appropriate symbols:

**3 Marks**

1. Nuclear Power Plant – Kalpakkam.
2. Iron and Steel Plant – Rourkela.
3. Major Sea Port – Kandla.

भारत का रेखा-मानचित्र (राजनीतिक)  
Outline Map of India (Political)



- Q24.** Three features A, B and C, are marked on the given political outline map of India. Identify these features with the help of the following information and write their correct names on the lines marked in the map: **3 Marks**
1. The place where cotton mill workers organised Satyagraha.
  2. The place related to the calling off the Non-Cooperation Movement.

**JAN 2026 – MARCH 2027 TEST SERIES**

JOIN MY **PAID WHATSAPP GROUP** - PDF FORMAT TEST WITH ANSWERS

**ONE TIME FEES**

JAN 2026 – MARCH 2027	FEES	JUNE 2026 – MARCH 2027	FEES
CBSE 12TH	RS.4000	CBSE 12TH	RS.3000
CBSE 10TH	RS.4000	CBSE 10TH	RS.3000
NEET - TILL FINAL EXAM	RS.4500	NEET - TILL FINAL EXAM	RS.3500
JEE - TILL FINAL EXAM	RS.4500	JEE - TILL FINAL EXAM	RS.3500
TN 12TH	RS.3000	TN 12TH	RS.2000
TN 10TH	RS.3000	TN 10TH	RS.2000

**CHAPTER WISE STUDY MATERIALS AVAILABLE FOR ALL CLASSES**

CHECK FREE TEST PAPERS [www.ravitestpapers.com](http://www.ravitestpapers.com) & [www.ravitestpapers.in](http://www.ravitestpapers.in)

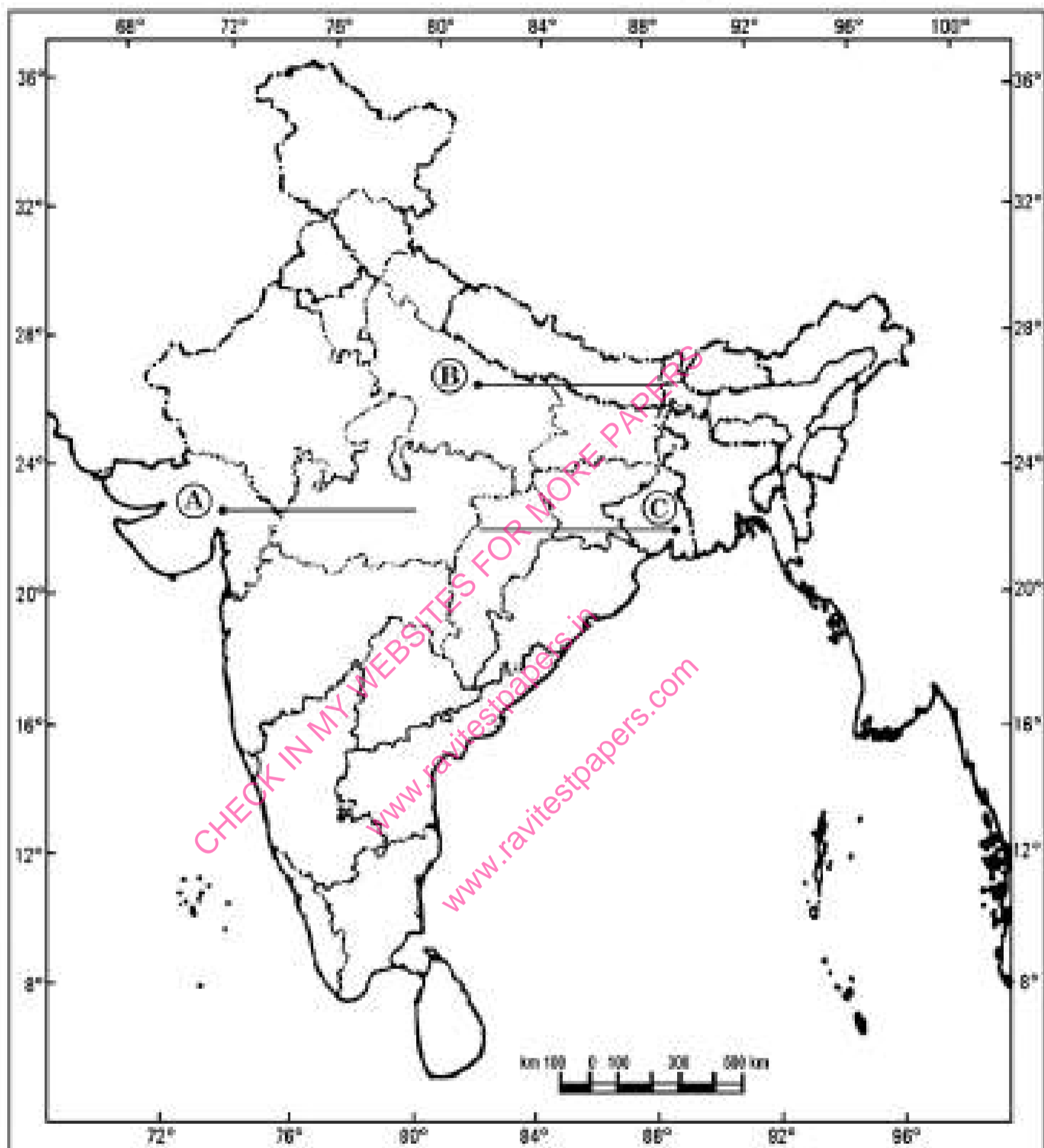
**RAVI TEST PAPERS & NOTES, WHATSAPP – 8056206308**

3. The place where the Indian National Congress Session was held.

प्रश्न सं. 29 के लिए

For question no. 29

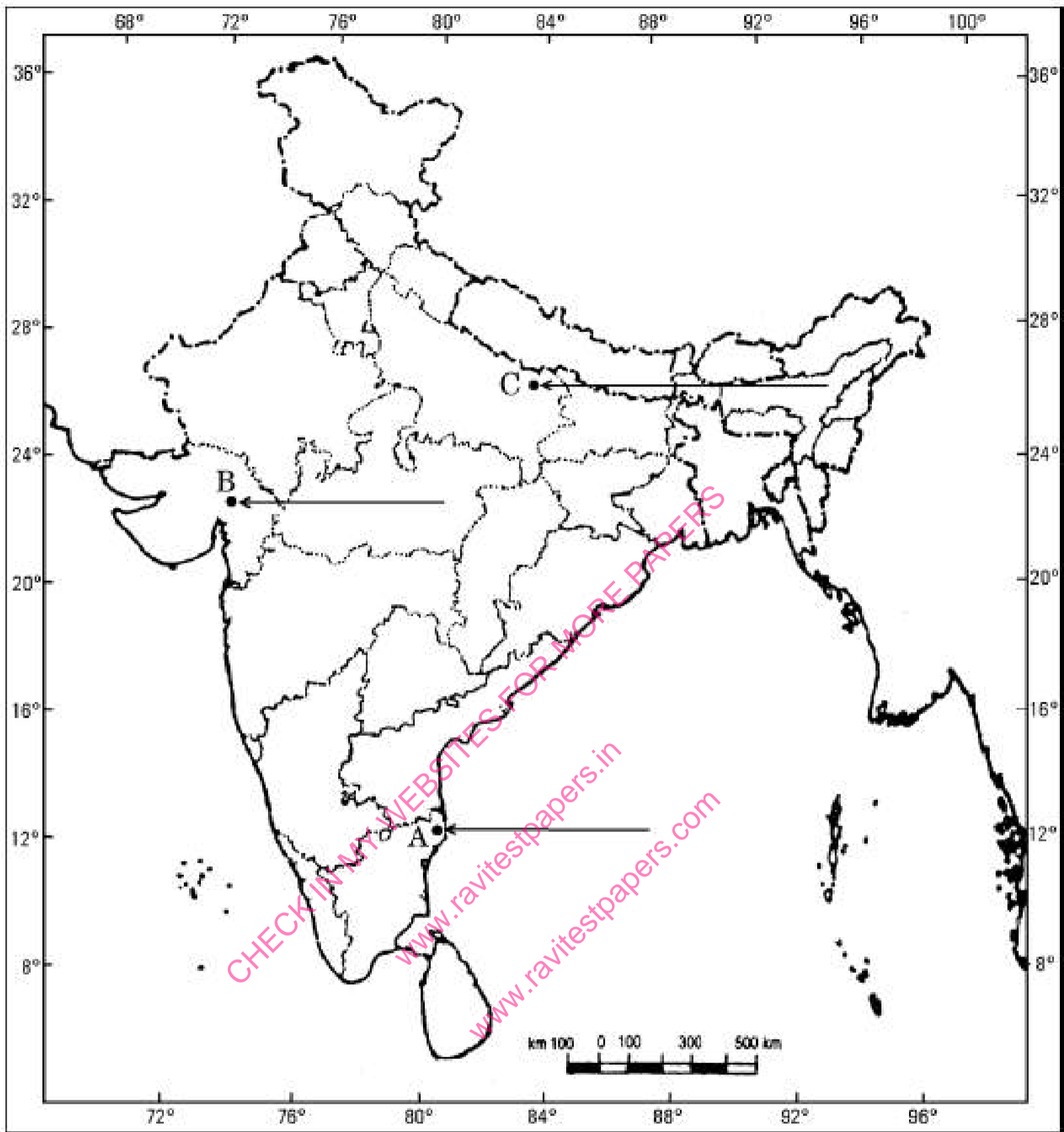
भारत का रेखा-मानचित्र ( राजनीतिक )  
Outline Map of India (Political)



**Q25.** Three features A, B and C, are marked on the given political outline map of **India** (on page 9). Identify these features **3 Marks** with the help of the following information and write their correct names on the lines marked in the map:

1. The place where the Indian National Congress Session was held.
2. The place associated with the Peasant's Satyagraha.
3. The place related to calling off the Non-Cooperation Movement.

## Outline Map of India (Political)

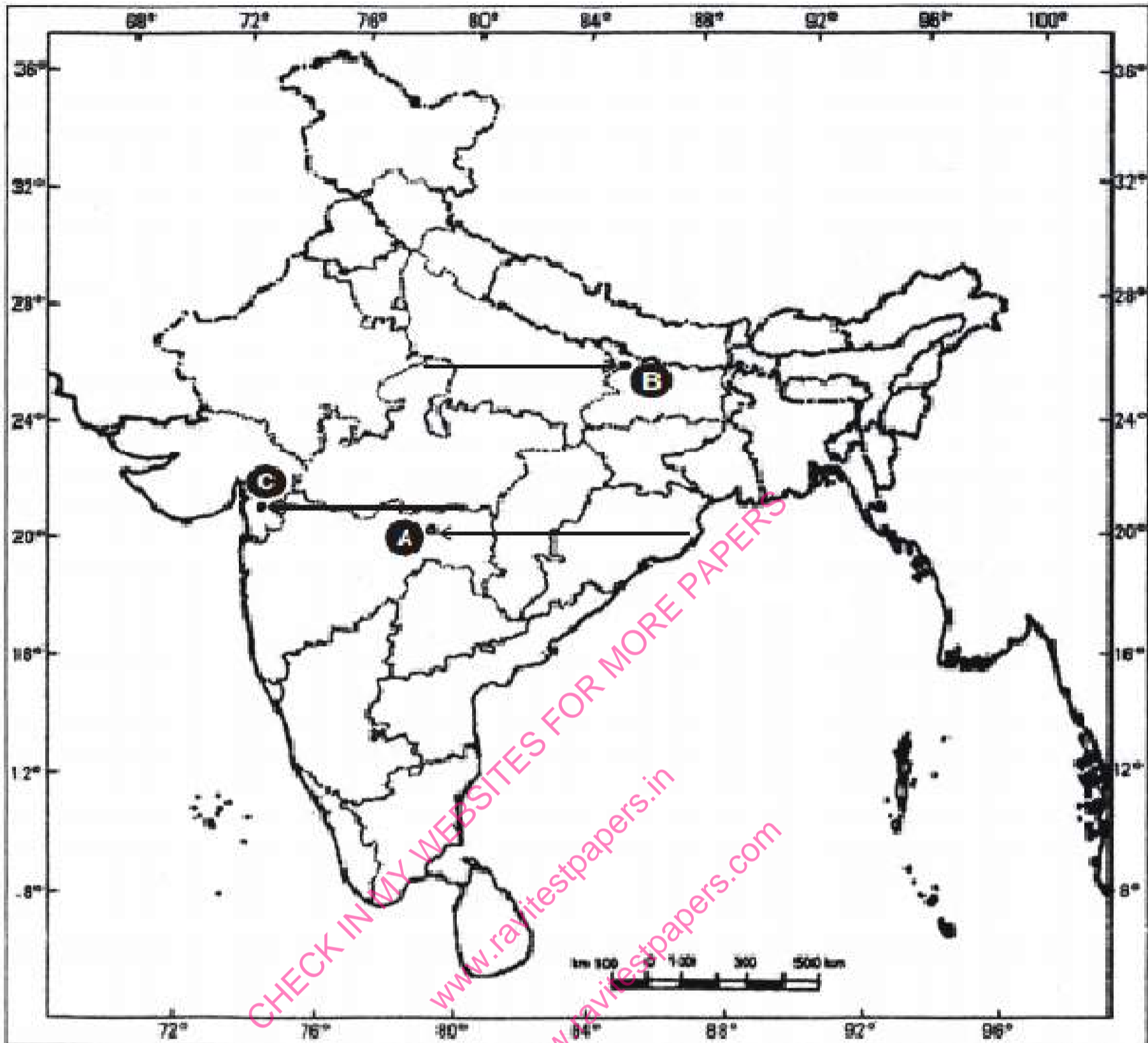


**Q26.** Three features (A), (B) and (C) are marked on the given political outline map of India. Identify these features with the help of the following information and write their correct names on the lines marked in the map:

**3 Marks**

1. The place where the Indian National Congress Session was held.
2. The place where the 'No Tax Campaign' was started.
3. The place where peasants organised a Satyagraha.

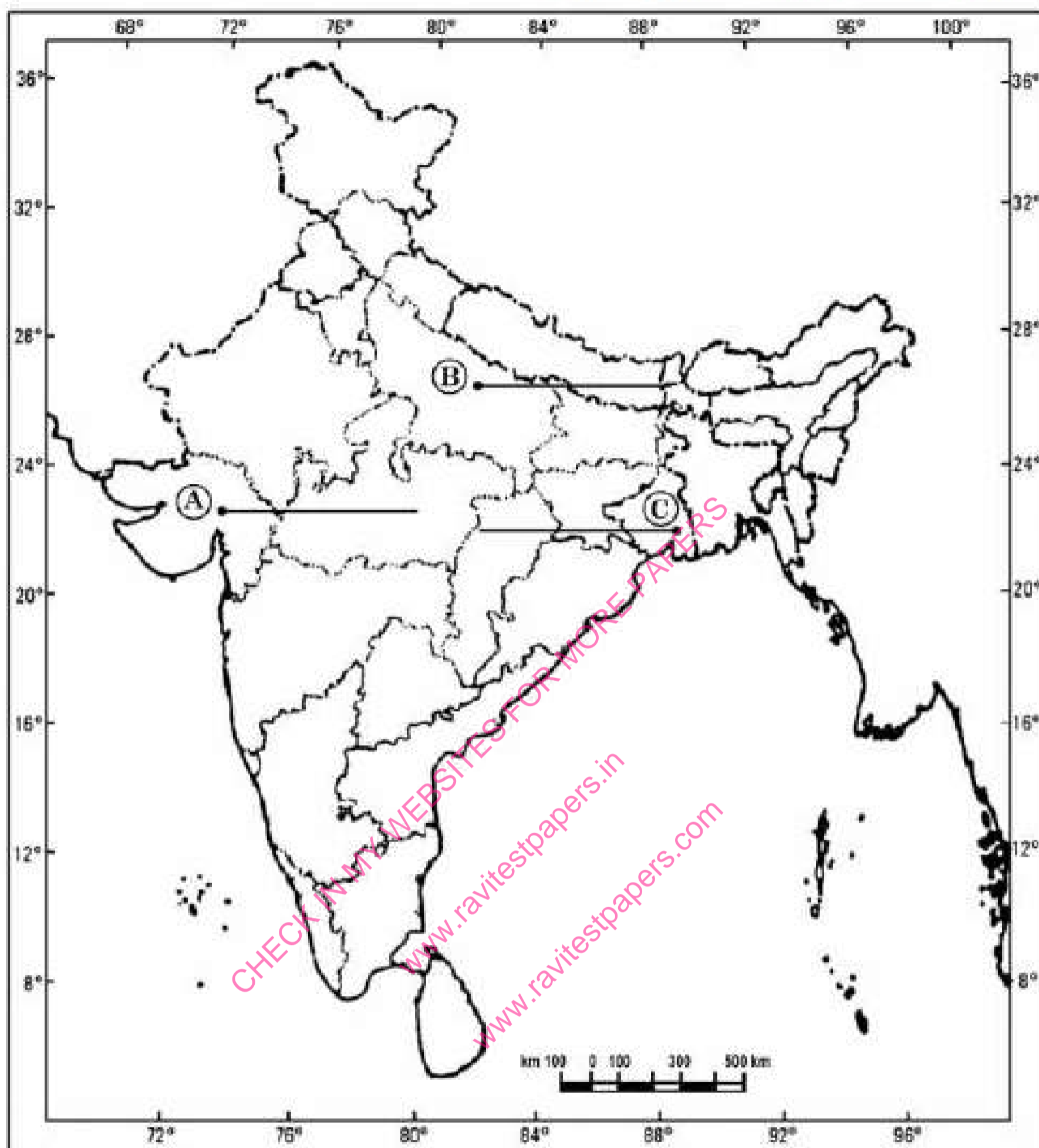
भारत का रेखा-मानचित्र (राजनीतिक)  
Outline Map of India (Political)



Q27.

3 Marks

## Outline Map of India (Political)



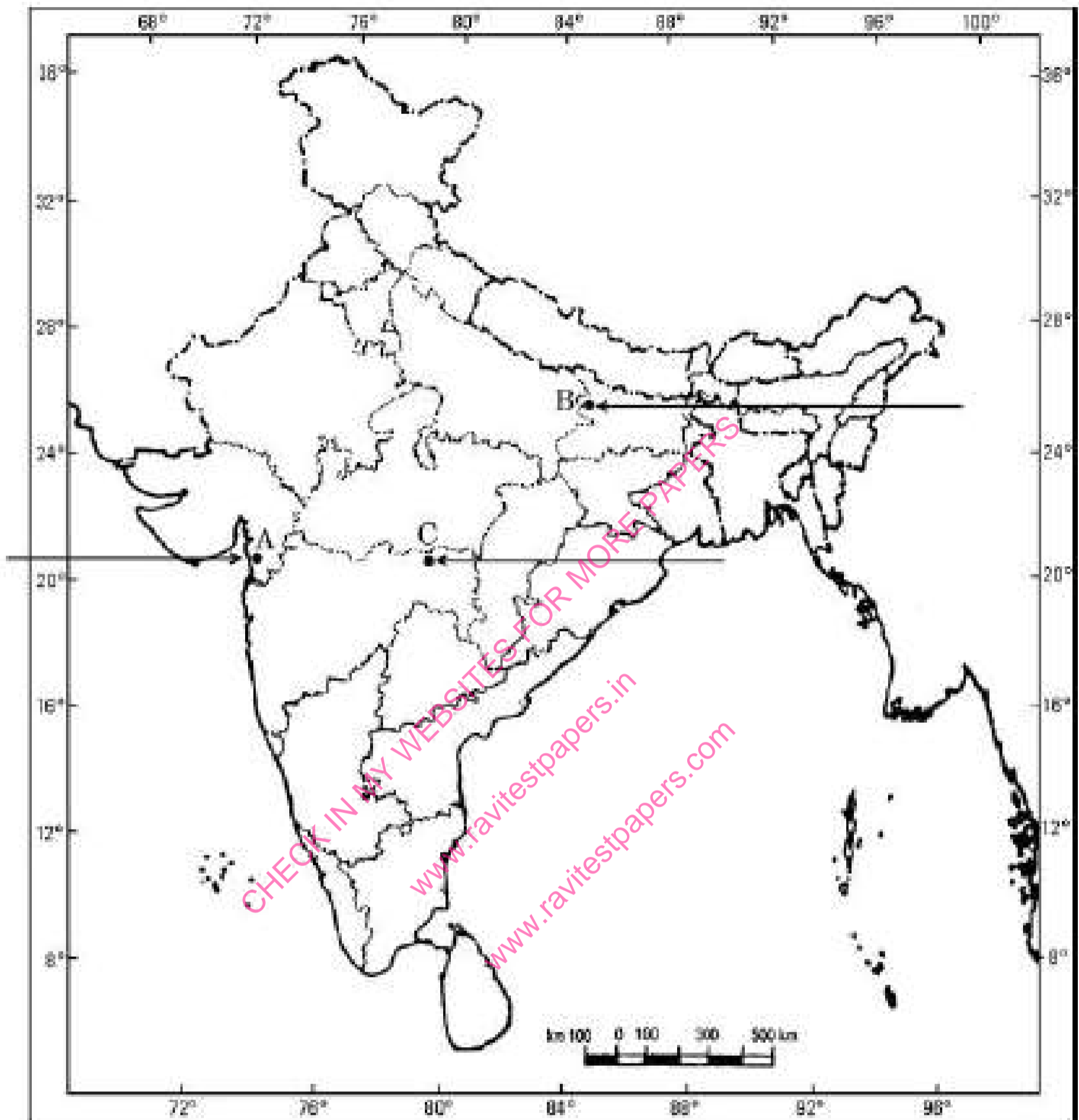
Three features A, B and C are marked on the given political outline map of India. Identify these features with the help of the following information and write their correct names on the lines marked in the map :

1. The place where cotton mill workers organised Satyagraha.
2. The place related to the calling off the Non-Cooperation Movement.
3. The place where the Indian National Congress Session was held.

**Q28.** Three features— A, B and C are marked on the given political outline map of India. Identify these features with the help of the following information and write their names on the lines marked in the map: **3 Marks**

1. The place from where the Civil Disobedience Movement was started.
2. The place from where the Movement of Indigo Planters was started.
3. The place where the Indian National Congress Session was held.

भारत का रेखा-मानचित्र (राजनीतिक)  
Outline Map of India (Political)



**Q29.** Three features A, B and C, are marked in the political outline map of India. Identify these features with the help of the following information and write their correct names on the lines marked on the map: **3 Marks**

1. The place where the Indian National Congress Session was held in 1920.
2. The city where the Jallianwala Bagh incident occurred.
3. The place where the peasants struggled against the indigo plantation system.

## India Political Maps

[www.ravitestpapers.in](http://www.ravitestpapers.in)

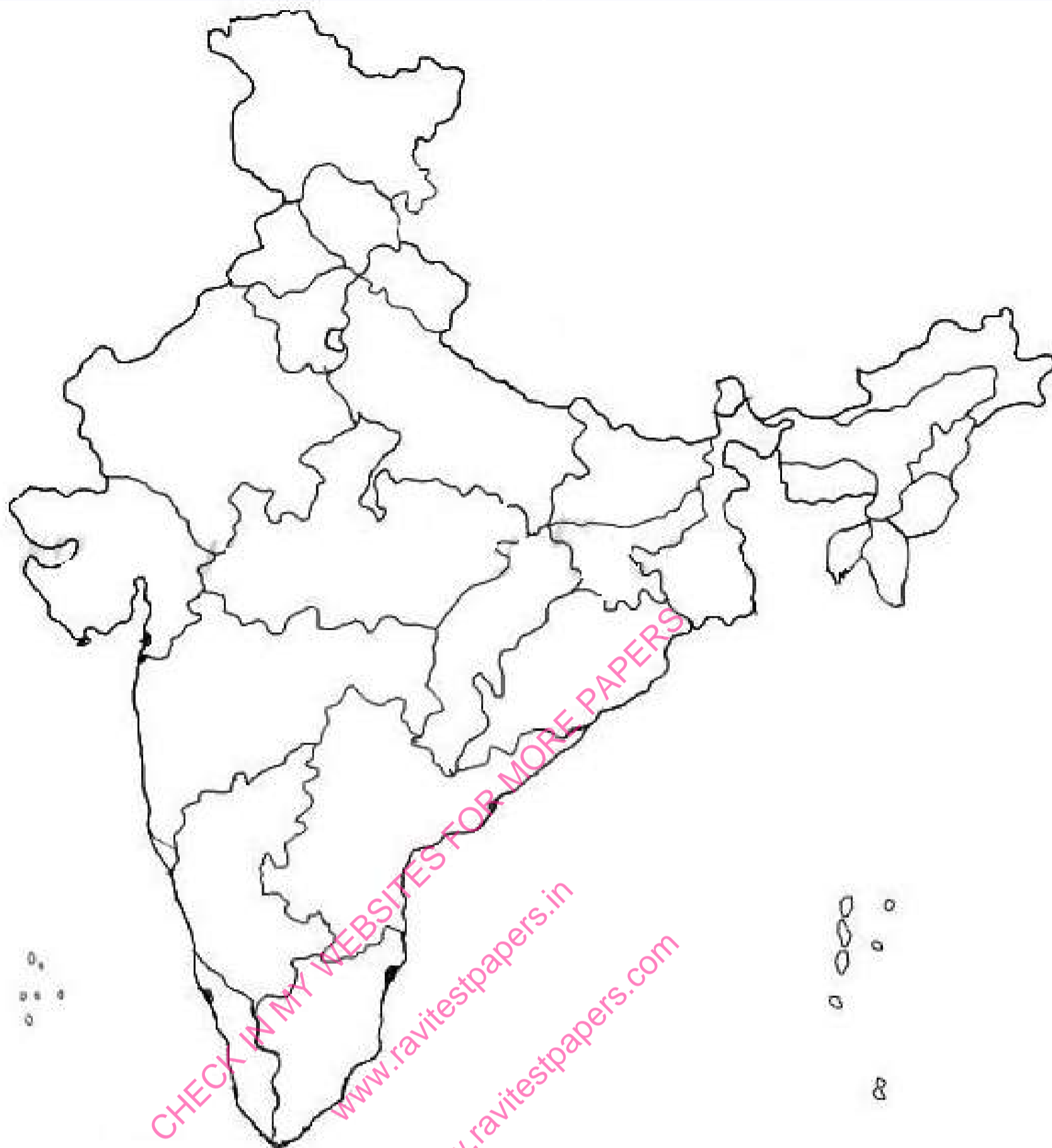
FREE ANSWERS AVAILABLE  
IN MY WEBSITE



**Q30.** On the given political outline map of India (locate and label the following features with appropriate symbols:

**3 Marks**

1. Naraura– Nuclear Power Plant.
2. Tuticorin– Major Sea Port.
3. Bhilai– Iron and Steel Plant.



- Q31.** Three features A, B and C are marked on the given political outline map of India. Identify these features with the help of the following information and write their correct names on the lines marked on the map: **3 Marks**
1. The city associated with the Jallianwala Bagh incident.
  2. The place where the Indian National Congress session was held.
  3. The place where Gandhiji violated the Salt Law.

**JAN 2026 – MARCH 2027 TEST SERIES**

JOIN MY **PAID WHATSAPP GROUP** - PDF FORMAT TEST WITH ANSWERS

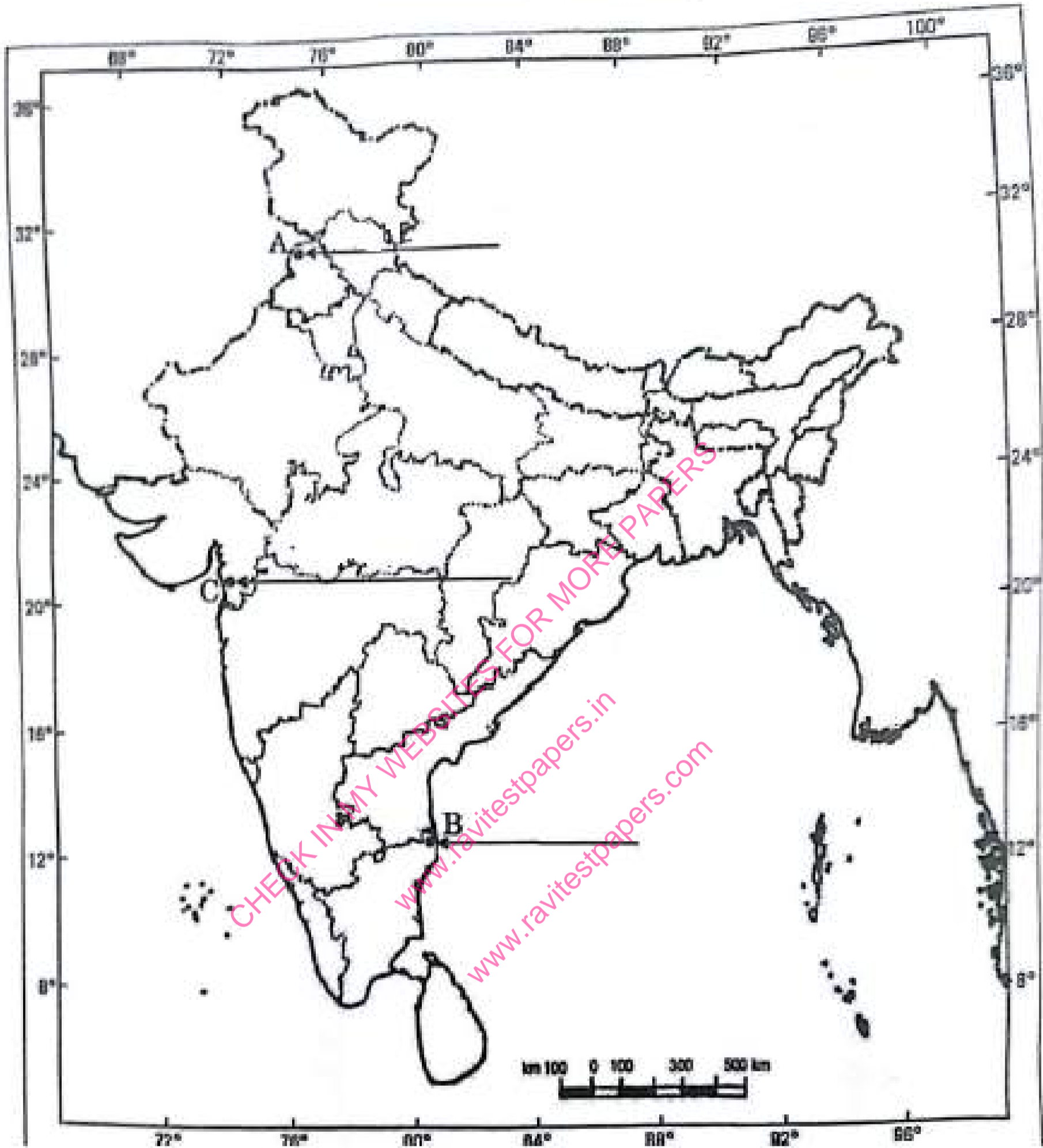
**ONE TIME FEES**

<b>JAN 2026 – MARCH 2027</b>	<b>FEES</b>	<b>JUNE 2026 – MARCH 2027</b>	<b>FEES</b>
CBSE 12TH	RS.4000	CBSE 12TH	RS.3000
CBSE 10TH	RS.4000	CBSE 10TH	RS.3000
NEET - TILL FINAL EXAM	RS.4500	NEET - TILL FINAL EXAM	RS.3500
JEE - TILL FINAL EXAM	RS.4500	JEE - TILL FINAL EXAM	RS.3500
TN 12TH	RS.3000	TN 12TH	RS.2000
TN 10TH	RS.3000	TN 10TH	RS.2000

**CHAPTER WISE STUDY MATERIALS AVAILABLE FOR ALL CLASSES**

CHECK FREE TEST PAPERS [www.ravitestpapers.com](http://www.ravitestpapers.com) & [www.ravitestpapers.in](http://www.ravitestpapers.in)  
**RAVI TEST PAPERS & NOTES, WHATSAPP – 8056206308**

भारत का रेखा-मानचित्र (राजनीतिक)  
Outline Map of India (Political)

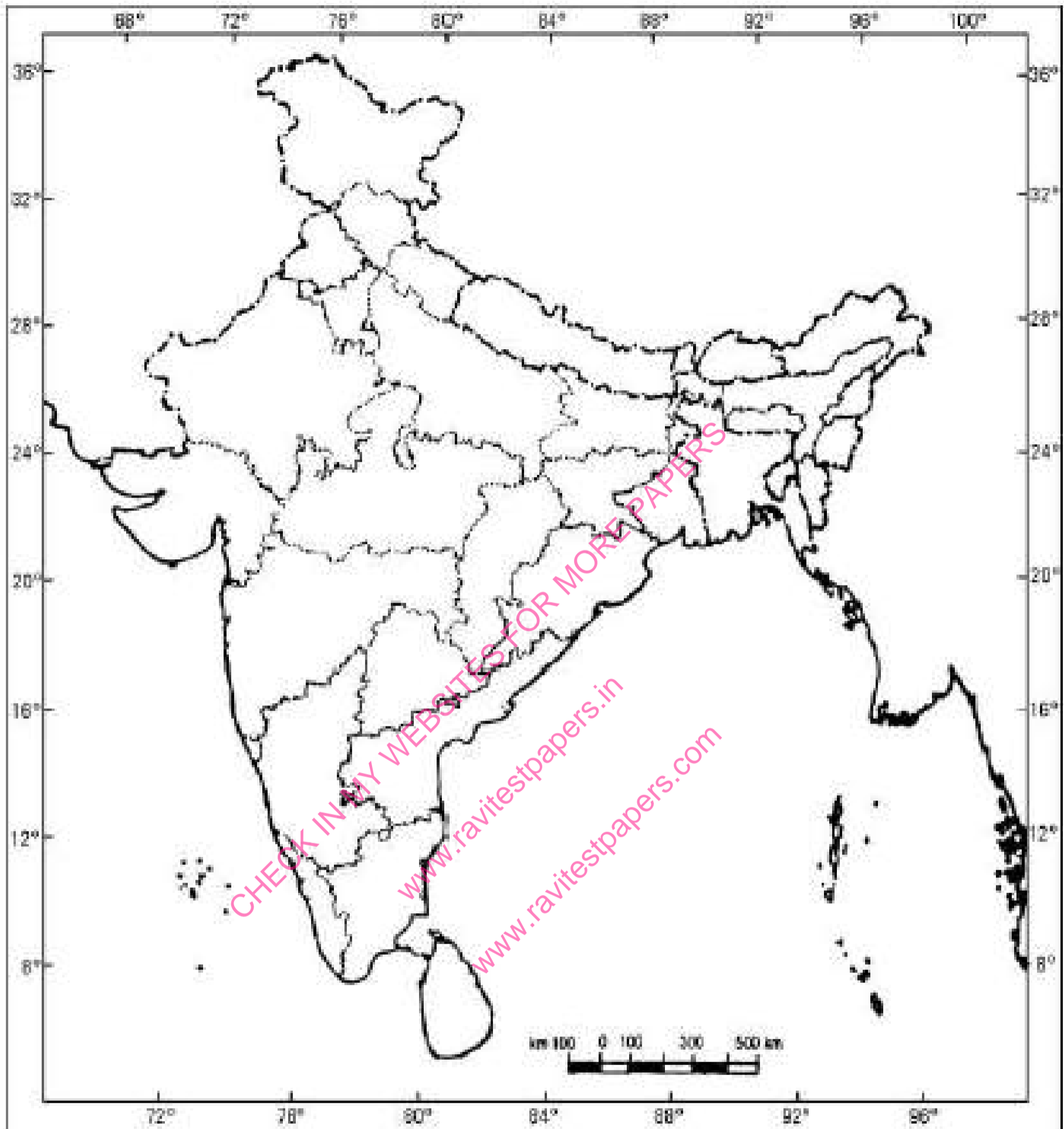


Q32. On the given political outline map of India locate and label the following with appropriate symbols:

3 Marks

1. Ajmer : Mica Mines.
2. Kochi : Major Sea Port.
3. Bhadravati : Iron and Steel Plant.

भारत का रेखा-मानचित्र (राजनीतिक)  
Outline Map of India (Political)

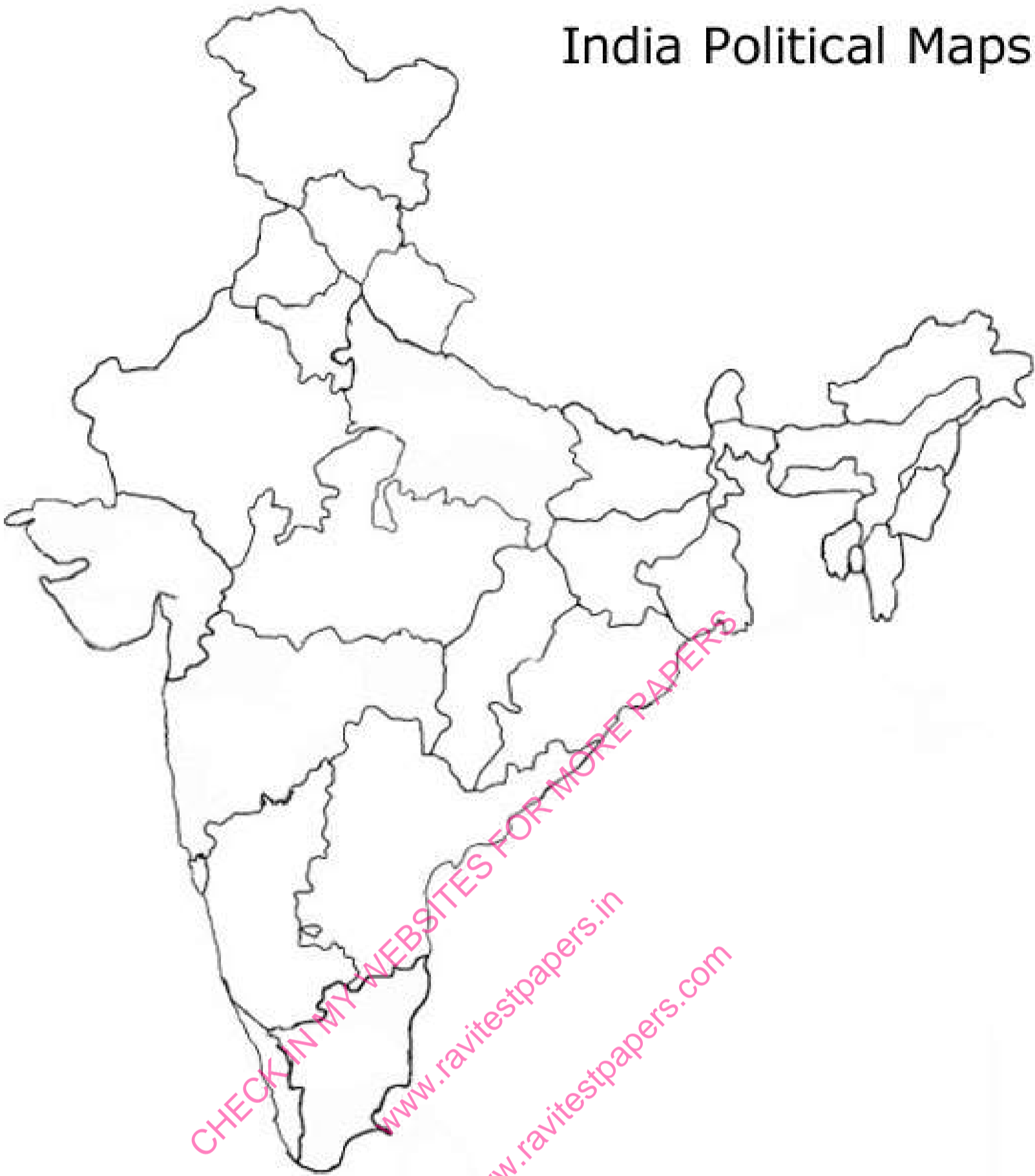


Q33. On the given political outline map of India locate and label the following with appropriate symbols:

3 Marks

- |             |                          |
|-------------|--------------------------|
| A Salem     | Iron and Steel Centre    |
| B Kandla    | Major Sea Port           |
| C Hyderabad | Software Technology Park |

## India Political Maps



**Q34.** 1. On the given political outline map of India (on page 11), identify the place marked as A with the help of the following information and write its correct name on the line marked near it.

**3 Marks**

A. The place where Non-Cooperation Movement was called off due to violence.

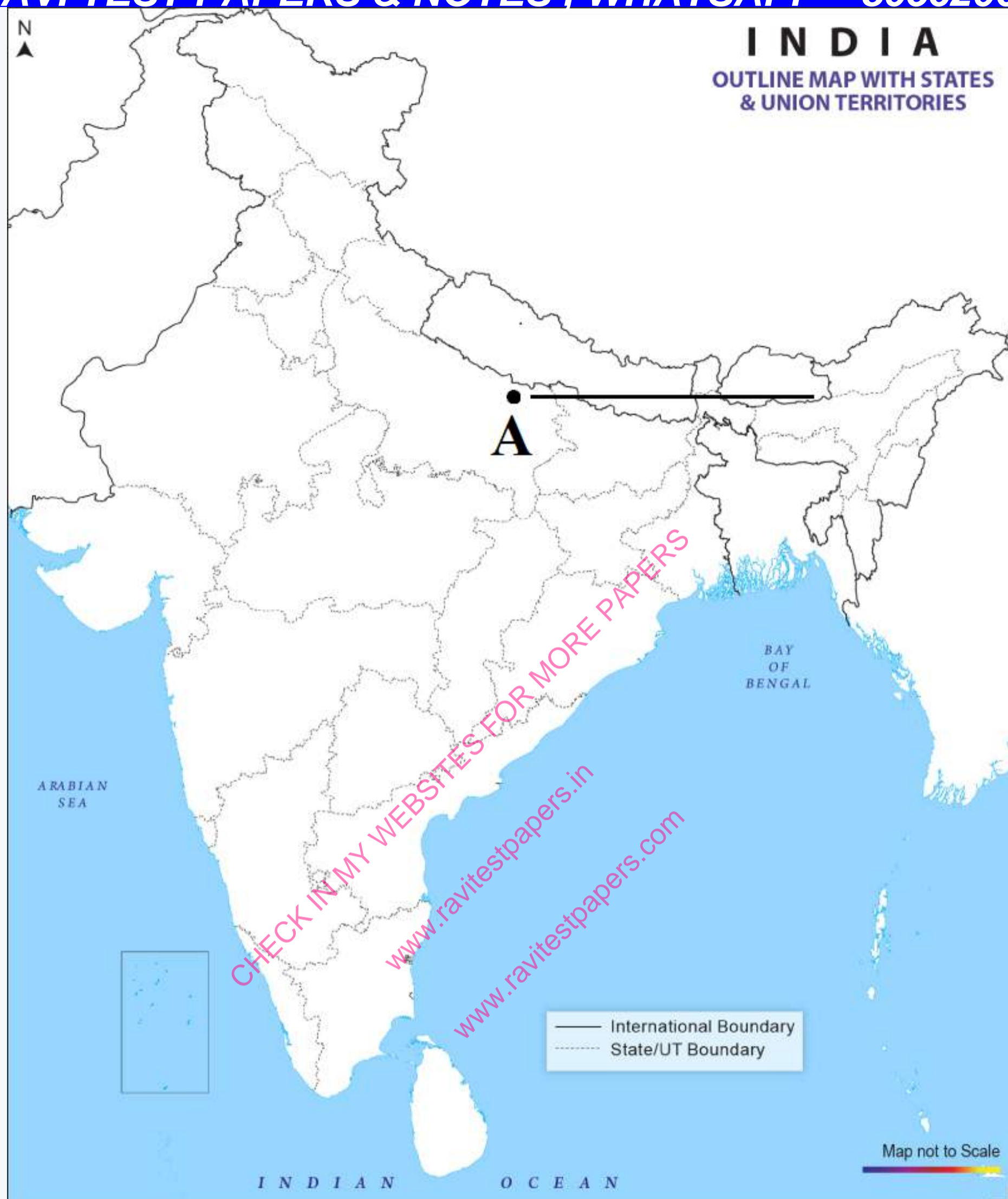
2. On the same given map of India, locate and label the following:

1. (I) Narora Nuclear Power Plant.

**OR**

(II) Bengaluru Software Technology Park.

2. Indira Gandhi International Airport.



**Q35.** 1. On the given outline Political Map of India, identify the place marked as 'A' with the help of following information and write its correct name on the line marked near it:

**3 Marks**

A. The place where Indian National Congress Session was held in September, 1920.

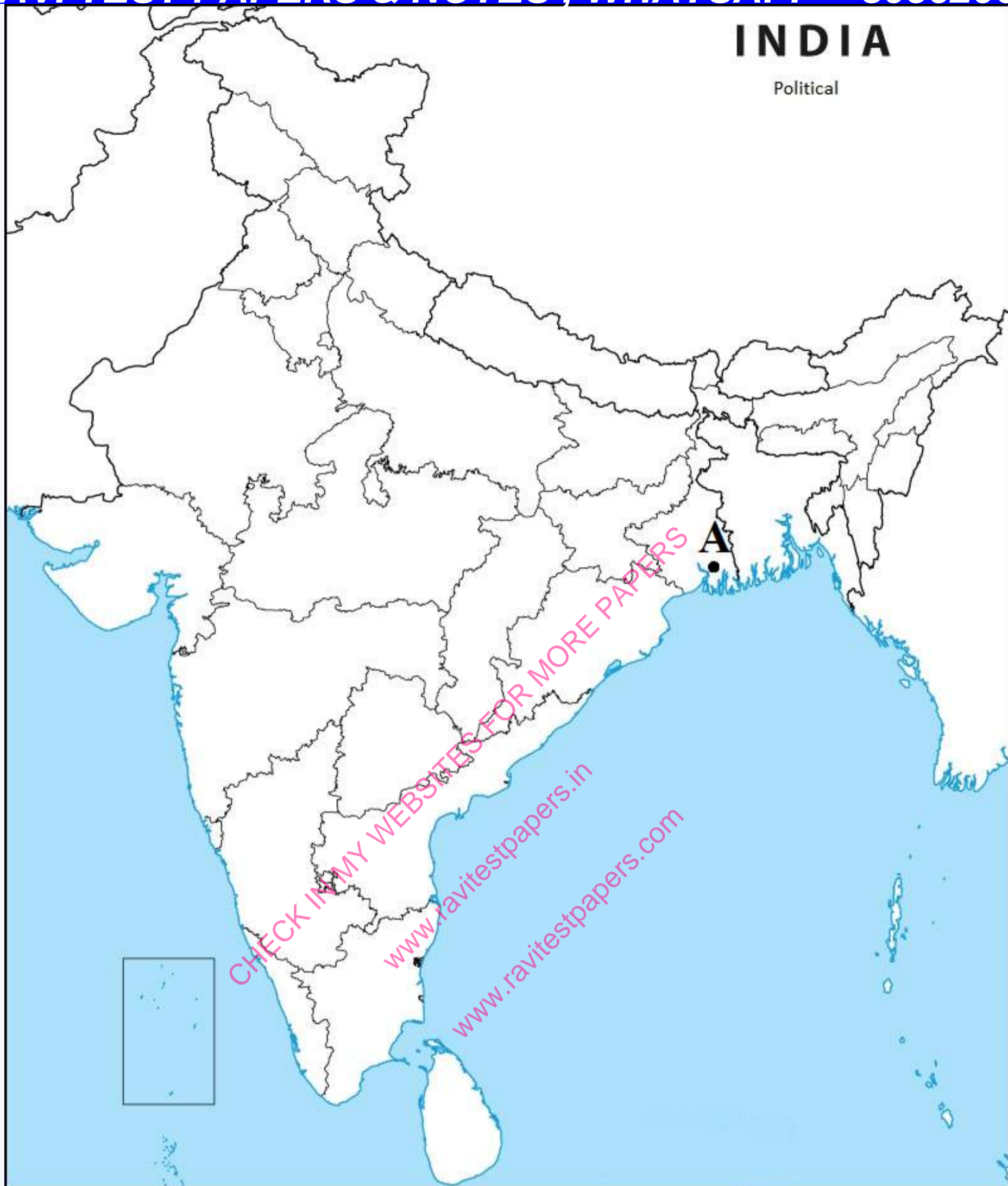
2. On the same given Map of India, locate and label the following:

1. (I) Ramagundam Thermal Plant.

**OR**

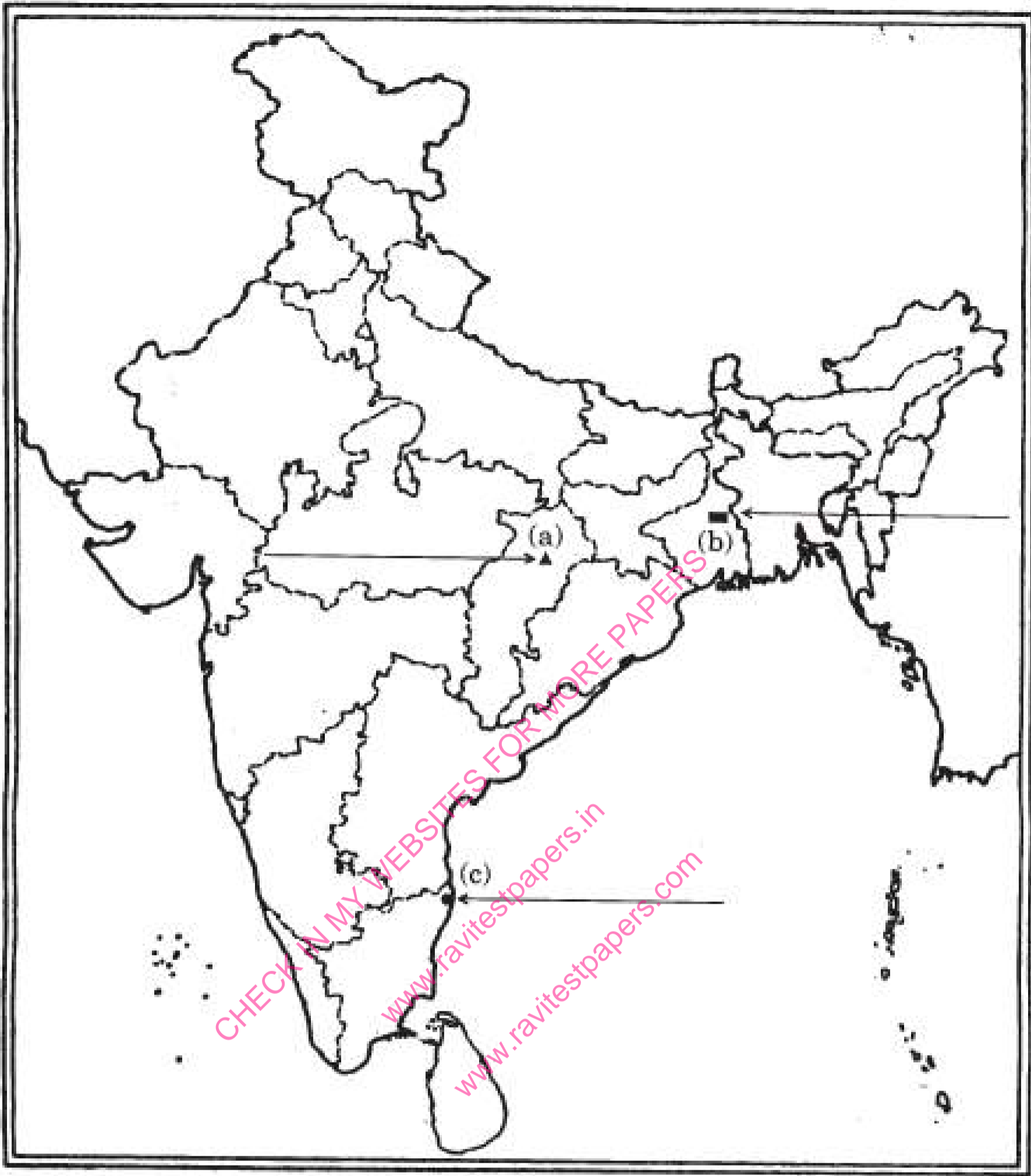
(II) Pune Software Technology Park.

2. Chennai (Meenambakam) International Airport.



**Q36.** Three features- (a), (b) and (c) are marked in the given political outline map of India. Identify these features with the help of the following information and write their correct names on the lines marked in the map: **3 Marks**

1. Coal Mine.
2. Silk industry.
3. International Airport.



**Q37.**Locate and label the following items on the same political outline map of India with appropriate symbols:

**3 Marks**

1. Kanpur- Cotton Textile Industry.
2. Bhadravati- Iron and Steel Plant.
3. Kandla- Sea Port.

### JAN 2026 – MARCH 2027 TEST SERIES

JOIN MY **PAID WHATSAPP GROUP** - PDF FORMAT TEST WITH ANSWERS

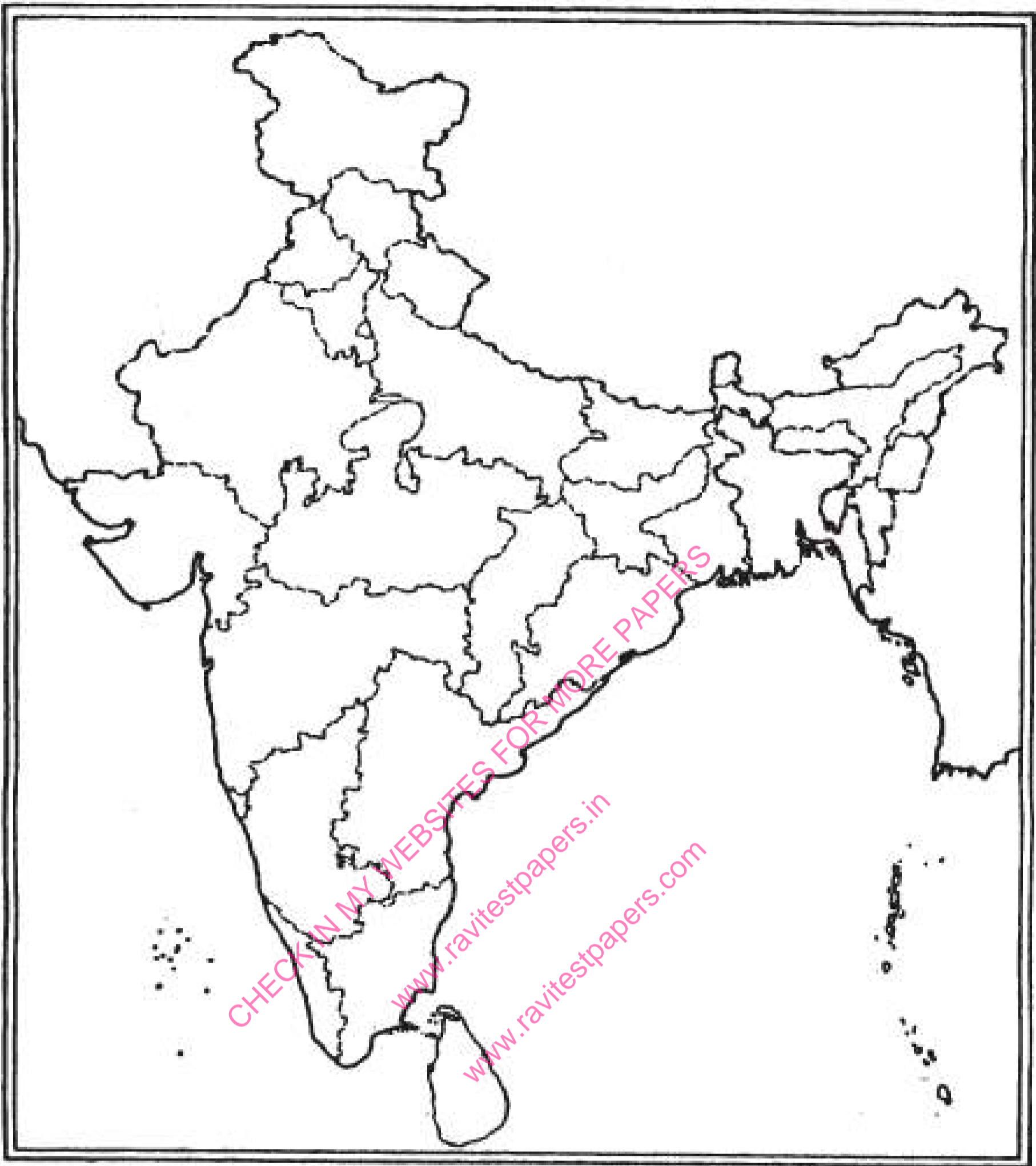
#### ONE TIME FEES

JAN 2026 – MARCH 2027	FEES	JUNE 2026 – MARCH 2027	FEES
CBSE 12TH	RS.4000	CBSE 12TH	RS.3000
CBSE 10TH	RS.4000	CBSE 10TH	RS.3000
NEET - TILL FINAL EXAM	RS.4500	NEET - TILL FINAL EXAM	RS.3500
JEE - TILL FINAL EXAM	RS.4500	JEE - TILL FINAL EXAM	RS.3500
TN 12TH	RS.3000	TN 12TH	RS.2000
TN 10TH	RS.3000	TN 10TH	RS.2000

**CHAPTER WISE STUDY MATERIALS AVAILABLE FOR ALL CLASSES**

CHECK FREE TEST PAPERS [www.ravitestpapers.com](http://www.ravitestpapers.com) & [www.ravitestpapers.in](http://www.ravitestpapers.in)

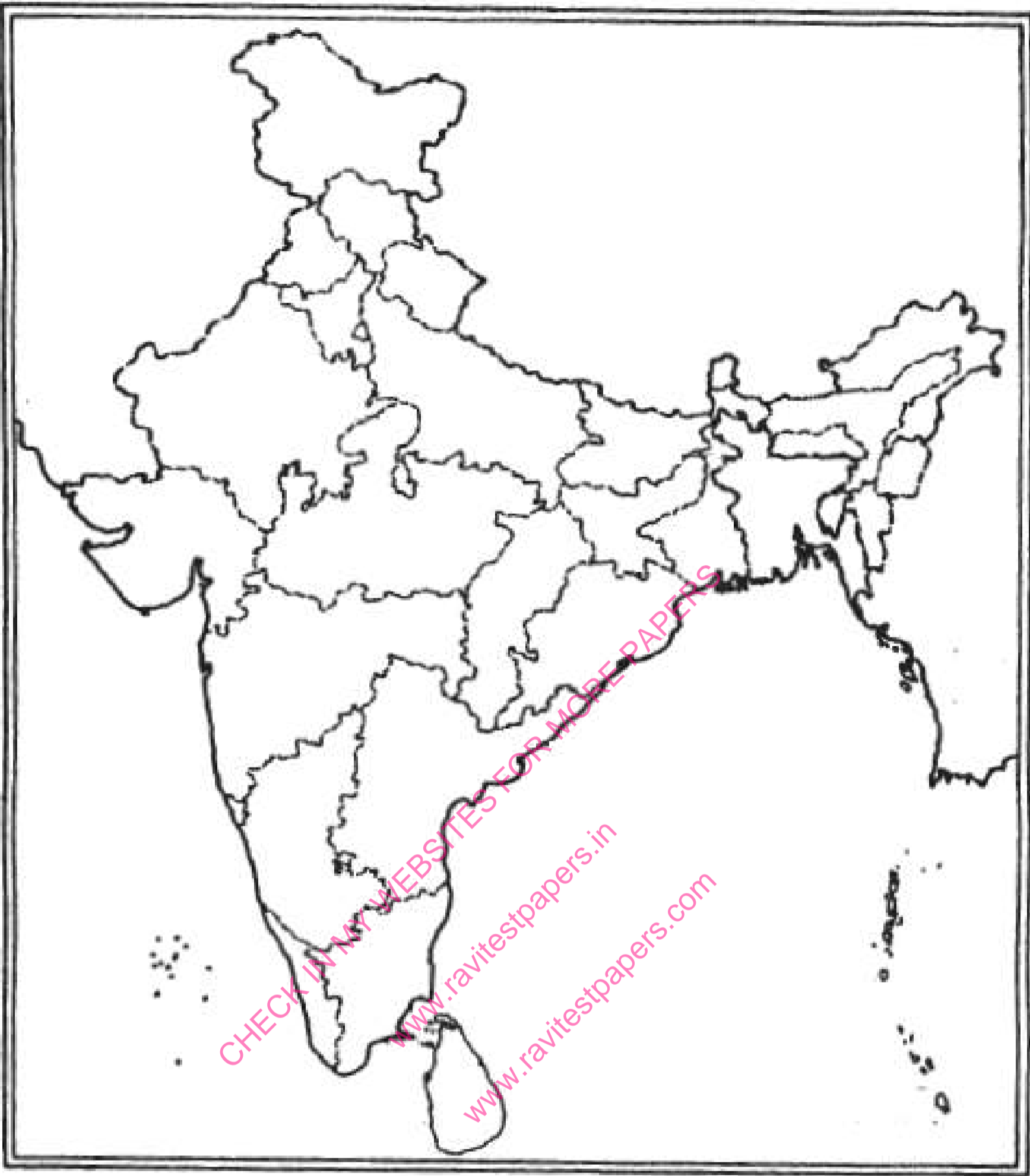
**RAVI TEST PAPERS & NOTES, WHATSAPP – 8056206308**



**Q38.** Locate and label the following features with appropriate symbols on the same political outline map of India with appropriate symbols:

**3 Marks**

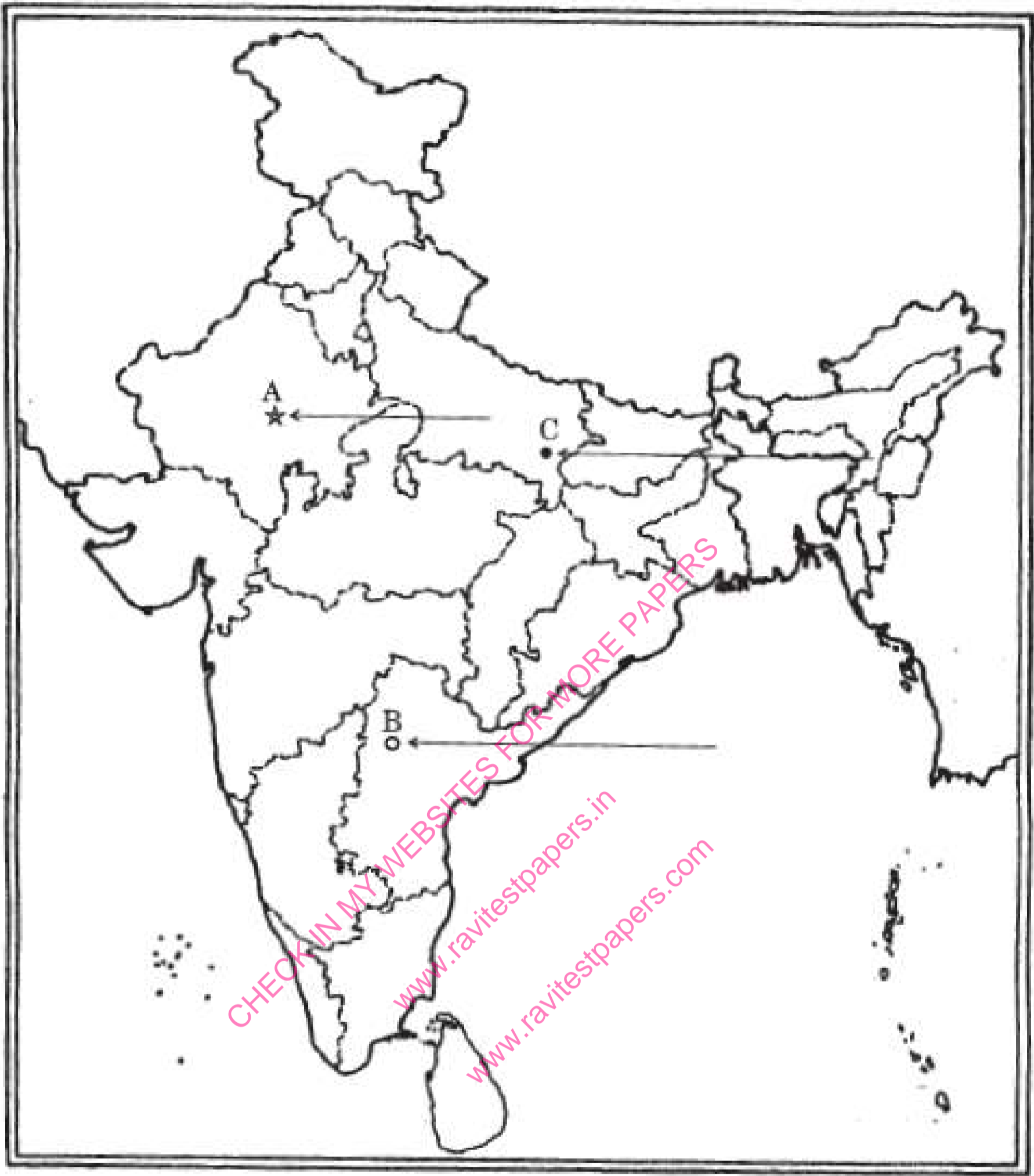
1. Bhilai- Iron and Steel Plant.
2. Narora - Nuclear Power Plant.
3. Kandla - Sea Port.



**Q39.** Three features A, B and C are marked in the given political outline map of India. Identify these features with the help of the following information and write their correct names on the lines marked in the map:

**3 Marks**

1. Mica mines.
2. Software Technology Park.
3. Terminal Station of N.H.7.

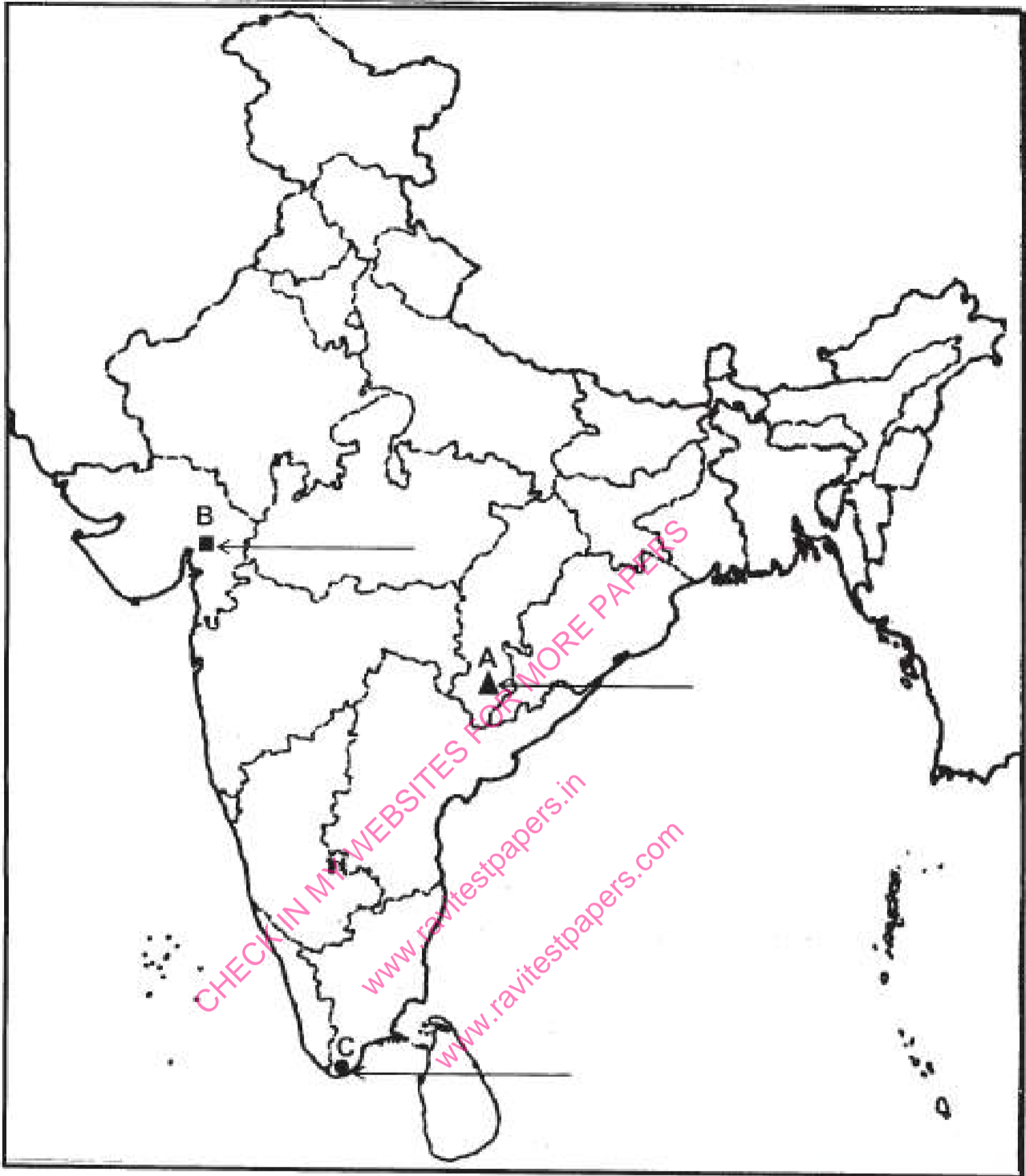


**Q40.** Three features -A, B and C are marked in the given political outline map of India. Identify these features with the help of the following information and write their correct names on the lines marked in the map:

**3 Marks**

1. Iron-ore mine.
2. Oilfield.

3. Terminal Station of N.H.7.

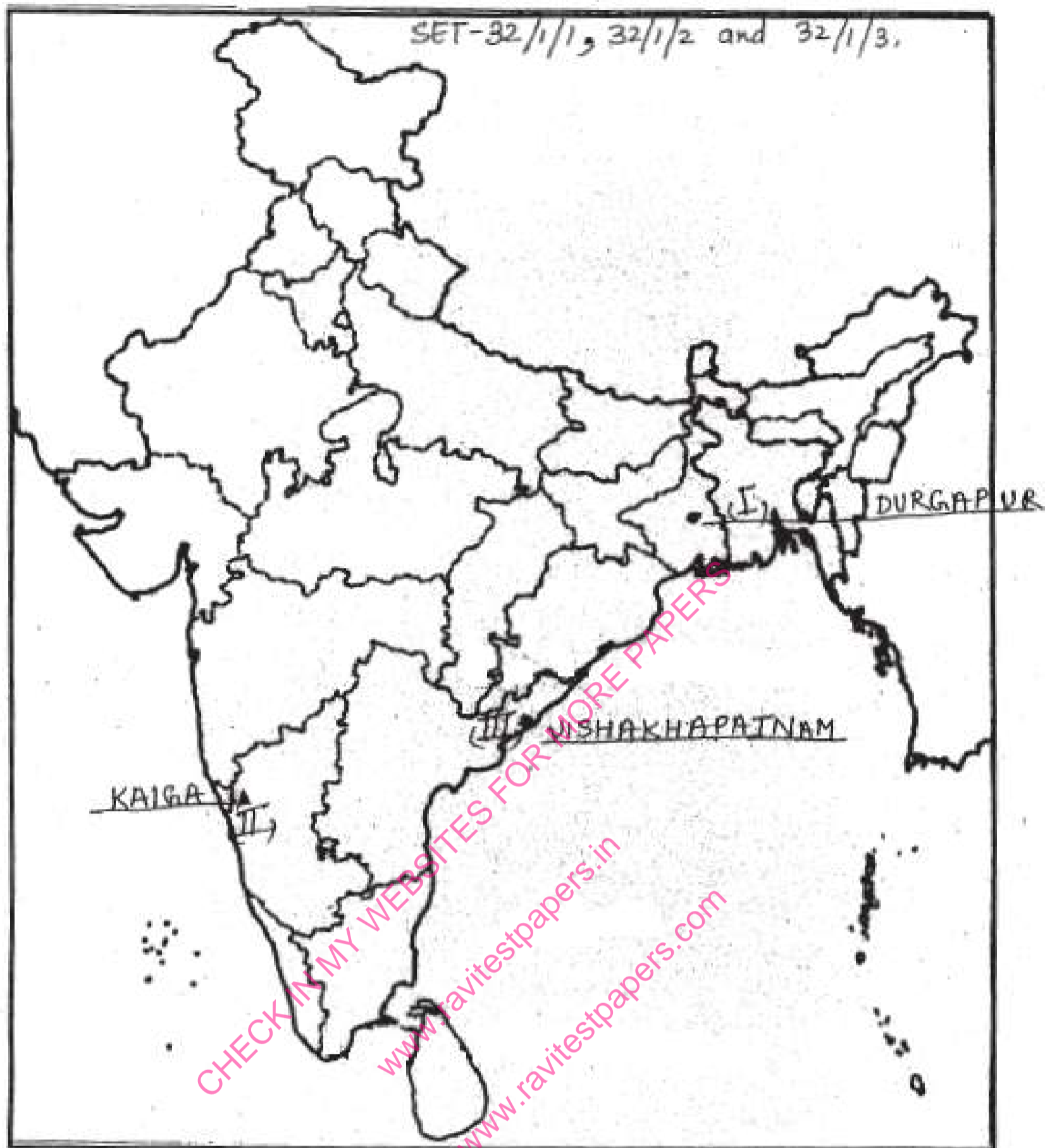


**Q41.** Locate and label the following items with appropriate symbols and write their correct names on the same map:

**3 Marks**

1. Durgapur-Iron and Steel Plant.
2. Kaiga-Nuclear Power Plant.

3. Vishakhapatnam-Sea Port.



Q42. Locate and label the following items on the same map with appropriate symbols.

3 Marks

1. Mohali - Soft ware Technology Park.
2. Bokaro - honand Steel Industry.

### JAN 2026 – MARCH 2027 TEST SERIES

JOIN MY **PAID WHATSAPP GROUP** - PDF FORMAT TEST WITH ANSWERS

#### ONE TIME FEES

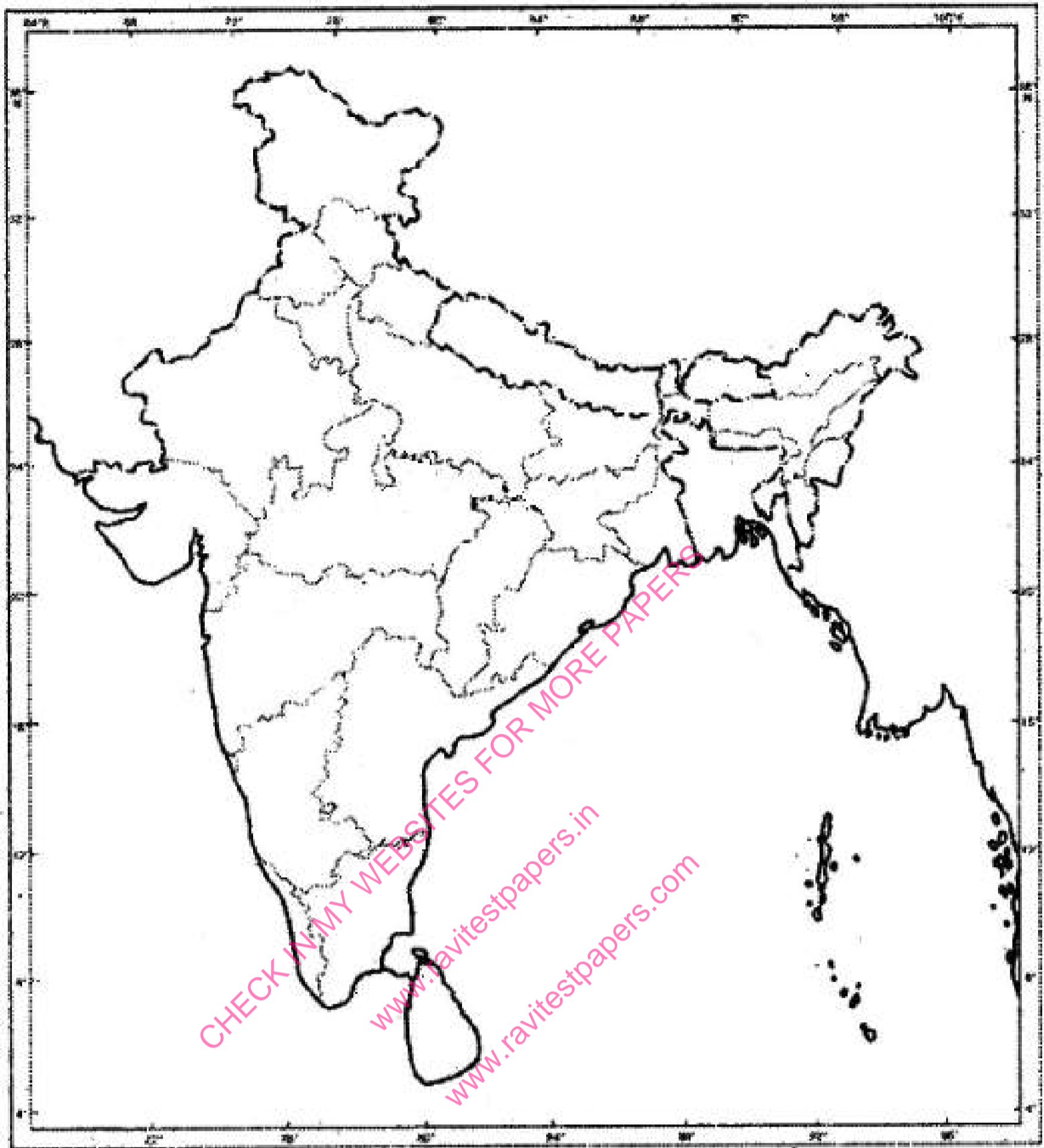
JAN 2026 – MARCH 2027	FEES	JUNE 2026 – MARCH 2027	FEES
CBSE 12TH	RS.4000	CBSE 12TH	RS.3000
CBSE 10TH	RS.4000	CBSE 10TH	RS.3000
NEET - TILL FINAL EXAM	RS.4500	NEET - TILL FINAL EXAM	RS.3500
JEE - TILL FINAL EXAM	RS.4500	JEE - TILL FINAL EXAM	RS.3500
TN 12TH	RS.3000	TN 12TH	RS.2000
TN 10TH	RS.3000	TN 10TH	RS.2000

CHAPTER WISE STUDY MATERIALS AVAILABLE FOR ALL CLASSES

CHECK FREE TEST PAPERS [www.ravitestpapers.com](http://www.ravitestpapers.com) & [www.ravitestpapers.in](http://www.ravitestpapers.in)

RAVI TEST PAPERS & NOTES, **WHATSAPP – 8056206308**

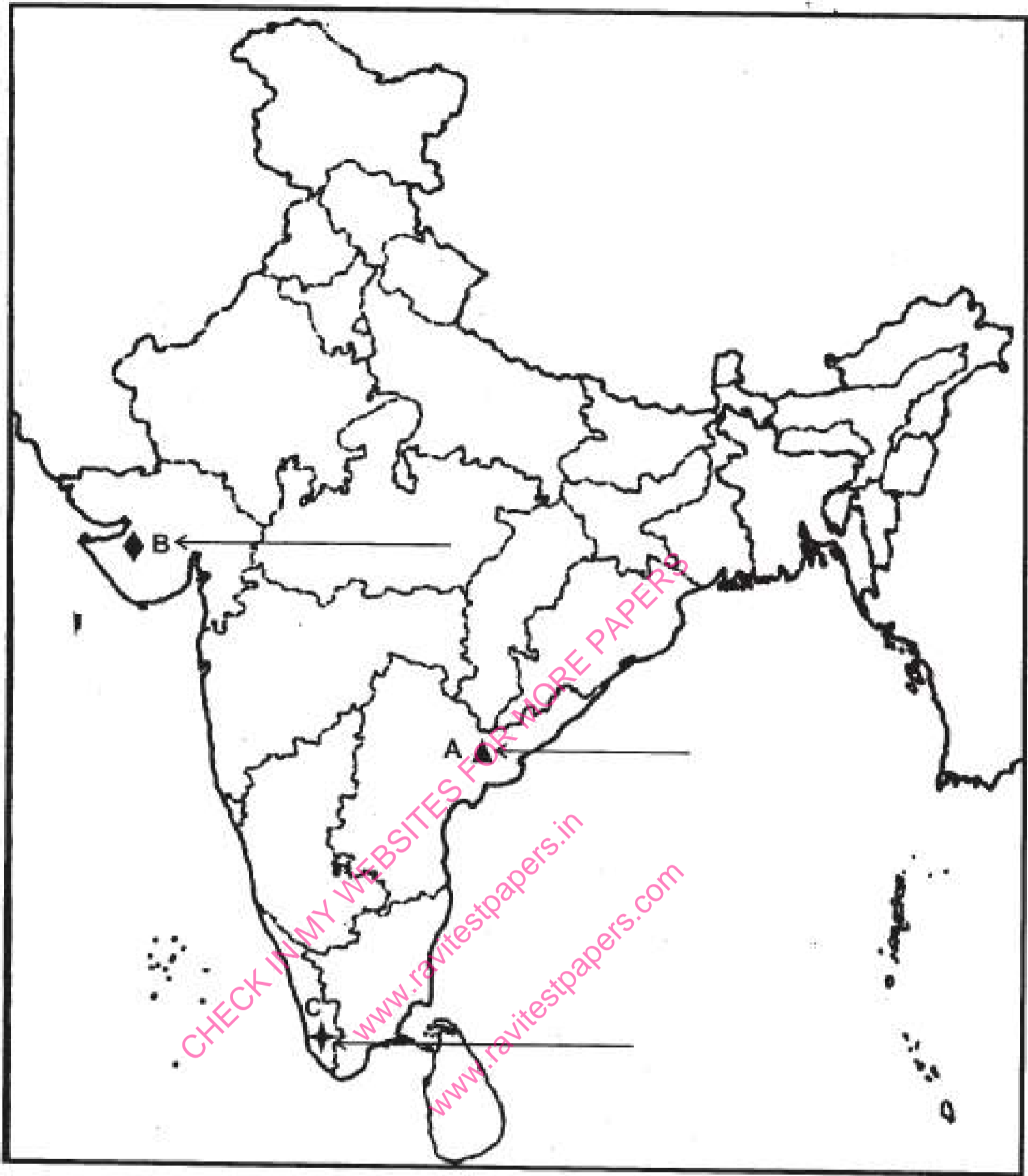
3. Paradeep - Sea Port.



**Q43.** Three features- A, B and C are marked in the given outline political map of India. Identify these features with the help of the following information and write their correct names on the lines marked in the map.

**3 Marks**

1. Coal mine.
2. Woollen industry.
3. International airport.



**Q44.** Locate the following States on a blank outline political map of India: Manipur, Sikkim, Chhattisgarh and Goa.

**3 Marks**

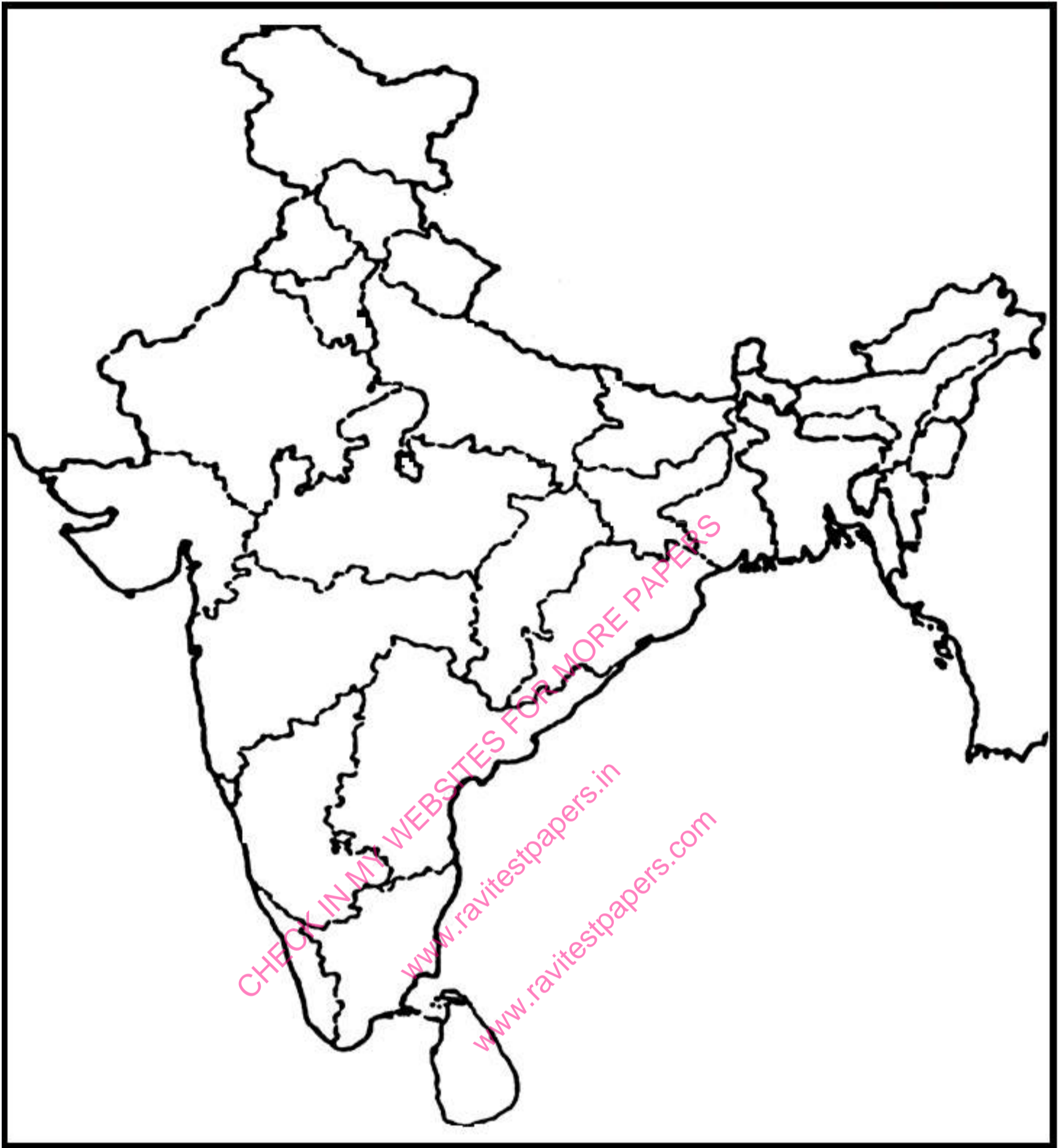
**Q45.** Identify and shade three federal countries (other than India) on a blank outline political map of the world.

**3 Marks**

**Q46.** On the given political outline map of India locate and label the following:-

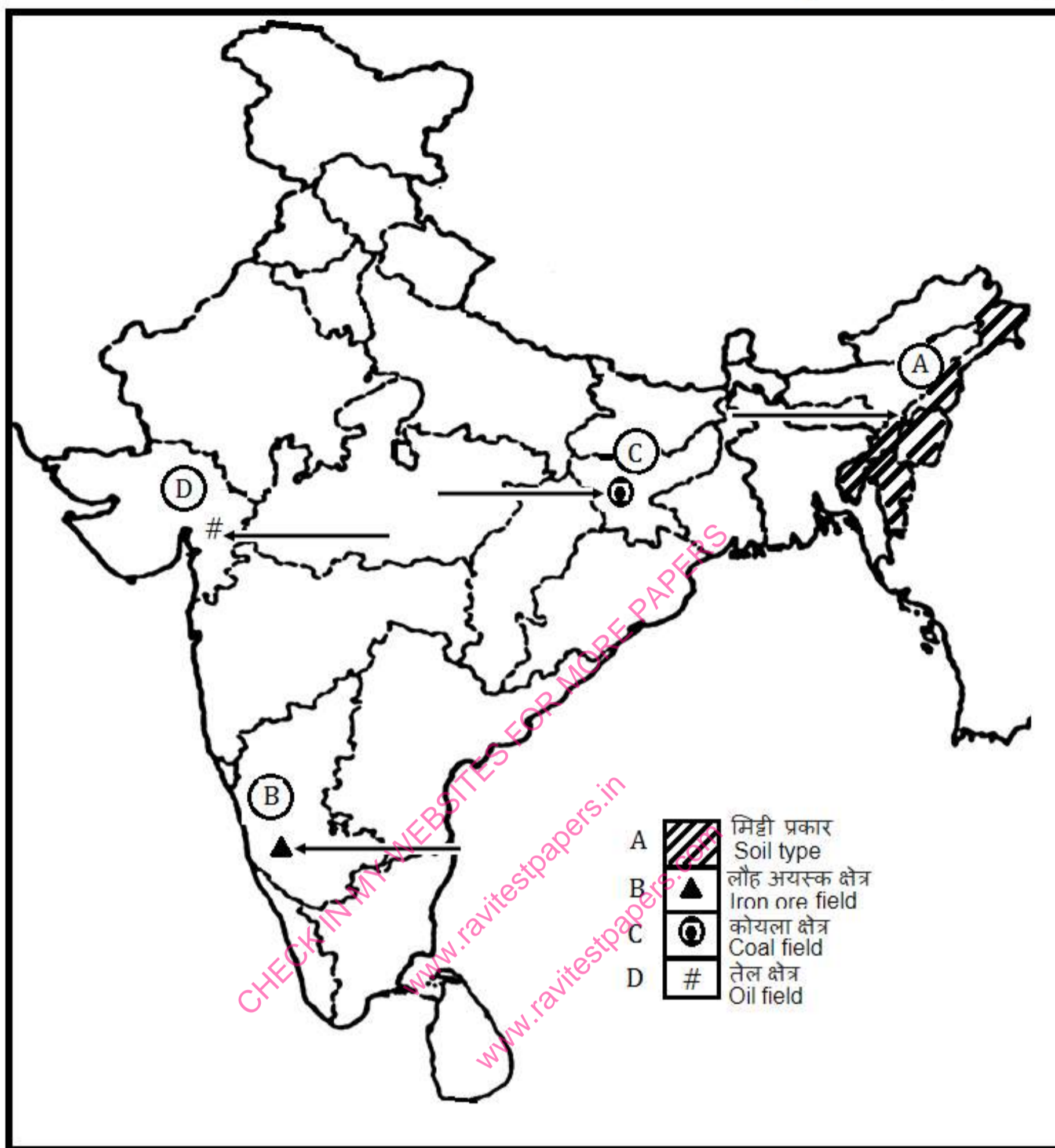
**4 Marks**

1. Salal - Dam.
2. Barauni - Thermal Power Station.
3. Bhadravati - Iron and Steel Plant.
4. Kakrapar - Nuclear Power Station.



**Q47.** On the given political outline map of India, four geographical features A, B, C and D are marked. Identify these features with the help of the map key and write their correct names on the line marked against each of it in the map.

**4 Marks**

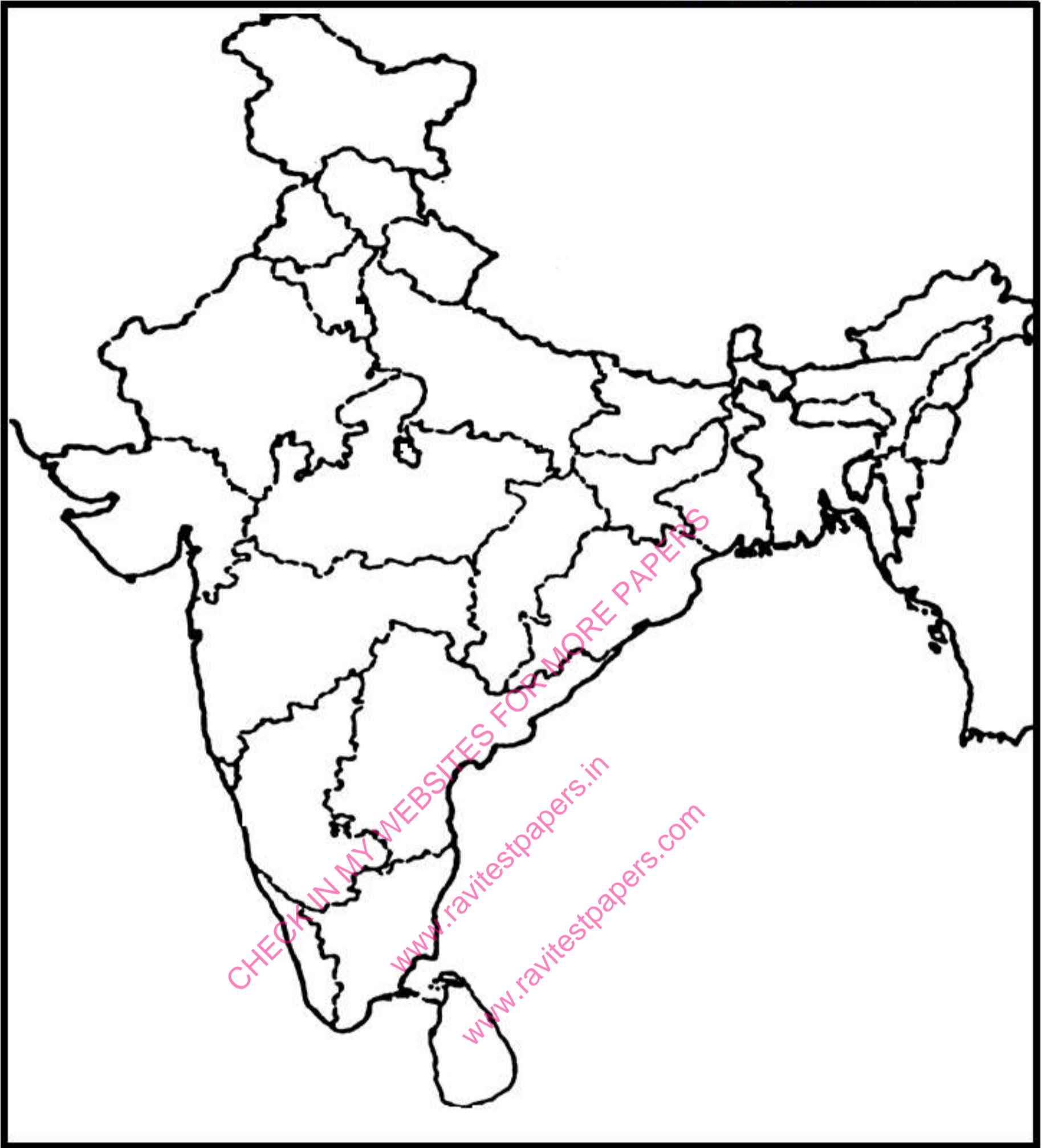


**Q48.** On the given political outline map of India, locate and label the following features:-

**4 Marks**

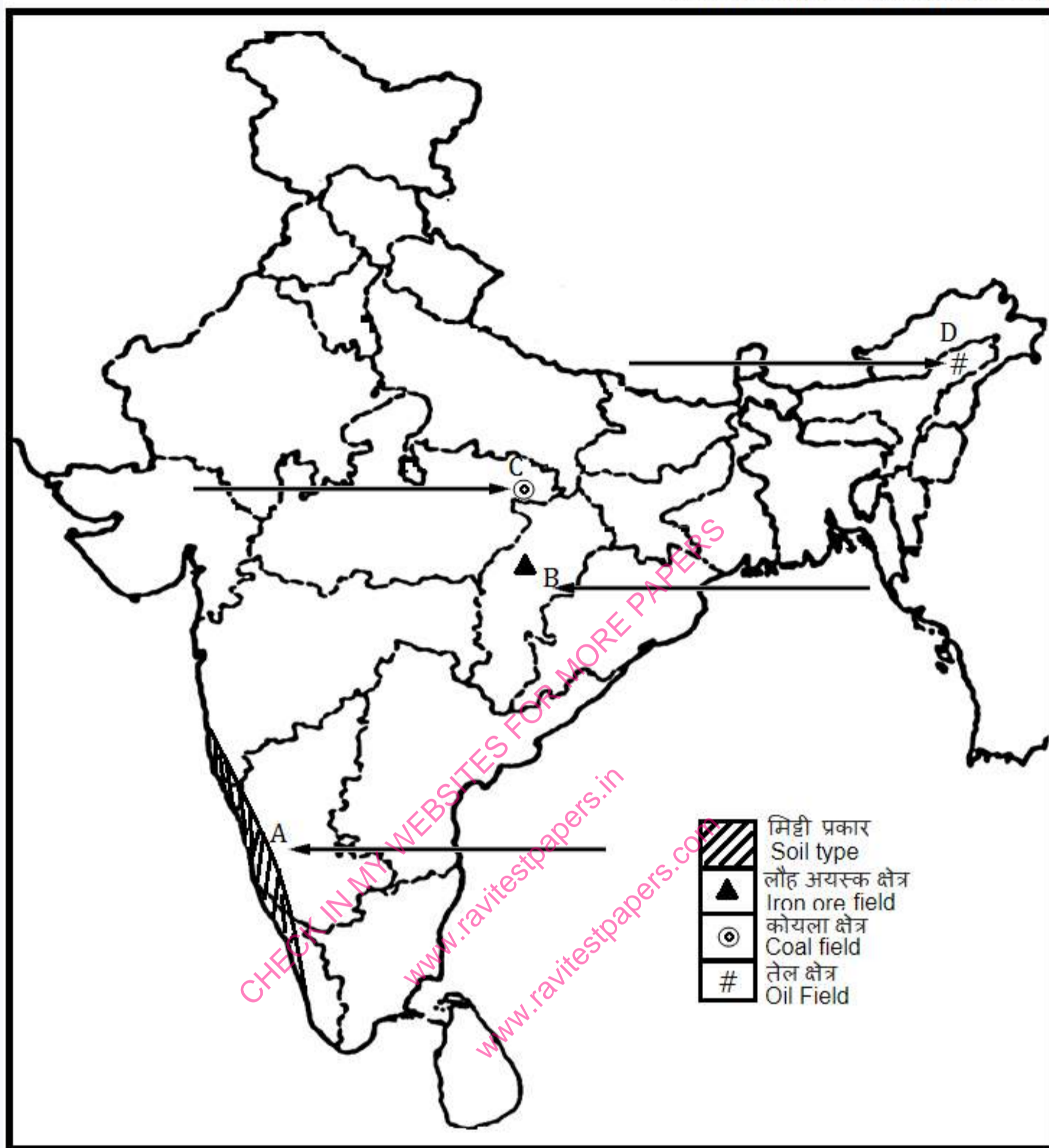
1. Tehri Dam.
2. Korba Thermal Power Plant.
3. Coimbatore - Cotton Textile Industry.
4. Pune - Software Technological Park.

Outline Map of India (Political)



**Q49.**On the given political outline map of India, are shown four geographical features A, B, C and D. Identify these features with the help of the map key and write their correct names on the line marked against each in the map.

**4 Marks**



**Q50.** 1. Two features 'a' and 'b' are marked on the given political outline map of India (on page 11). Identify these features with the help of the following information and write their correct names on the lines marked near them:

**5 Marks**

1. The place where the Indian National Congress Session was held.
2. The place from where Gandhiji organized Satyagraha in favour of Indigo planters.
2. Locate and label any three of the following with appropriate symbols on the same given political outline map of India:

1. Tarapur – Nuclear Power Plant.
2. Tungabhadra – Dam.
3. Mohali – Software Technology Park.
4. Kandla – Major Sea Port.
5. Durgapur – Iron and Steel Plant.

### JAN 2026 – MARCH 2027 TEST SERIES

JOIN MY **PAID WHATSAPP GROUP** - PDF FORMAT TEST WITH ANSWERS

#### ONE TIME FEES

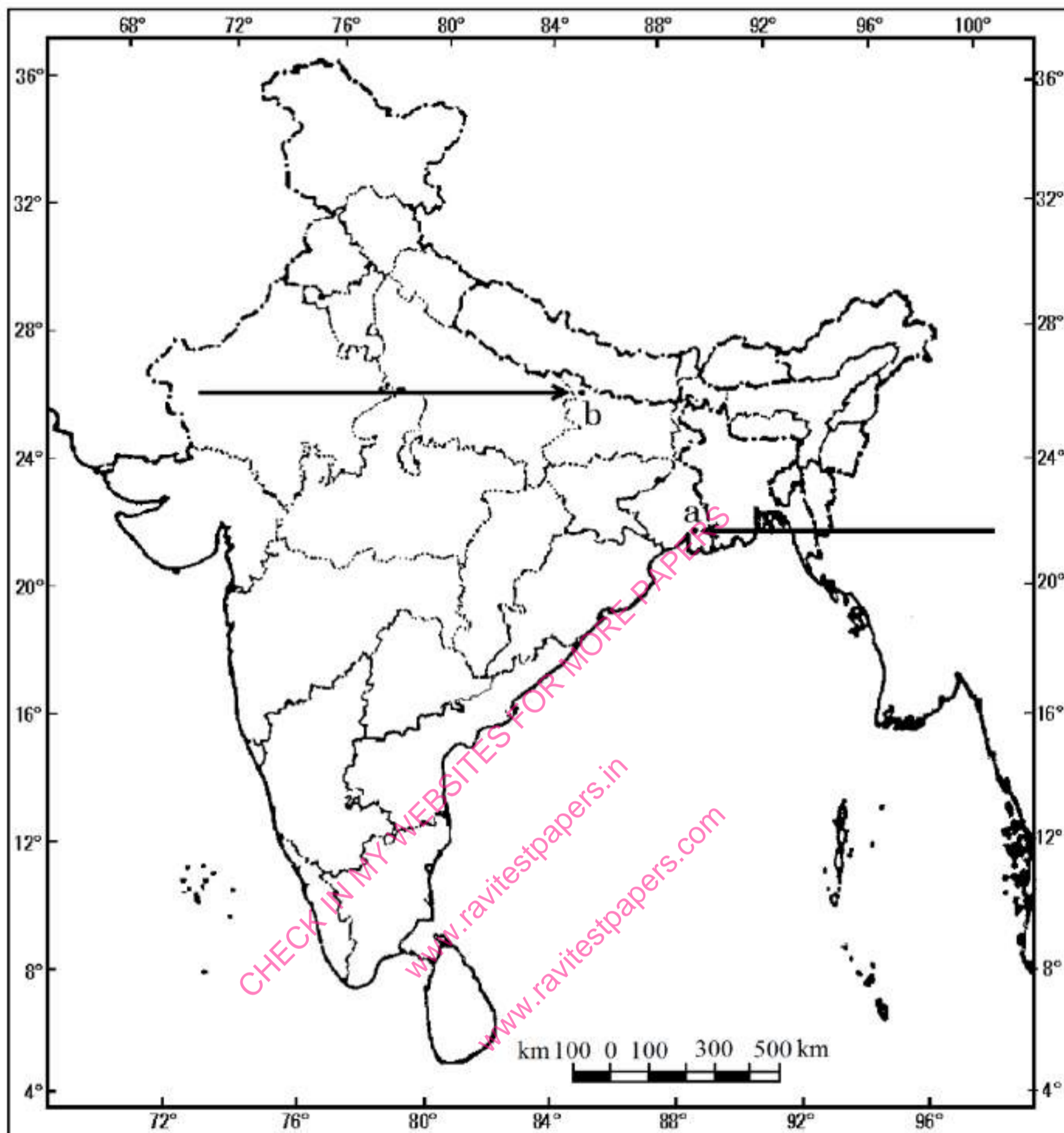
JAN 2026 – MARCH 2027	FEES	JUNE 2026 – MARCH 2027	FEES
CBSE 12TH	RS.4000	CBSE 12TH	RS.3000
CBSE 10TH	RS.4000	CBSE 10TH	RS.3000
NEET - TILL FINAL EXAM	RS.4500	NEET - TILL FINAL EXAM	RS.3500
JEE - TILL FINAL EXAM	RS.4500	JEE - TILL FINAL EXAM	RS.3500
TN 12TH	RS.3000	TN 12TH	RS.2000
TN 10TH	RS.3000	TN 10TH	RS.2000

**CHAPTER WISE STUDY MATERIALS AVAILABLE FOR ALL CLASSES**

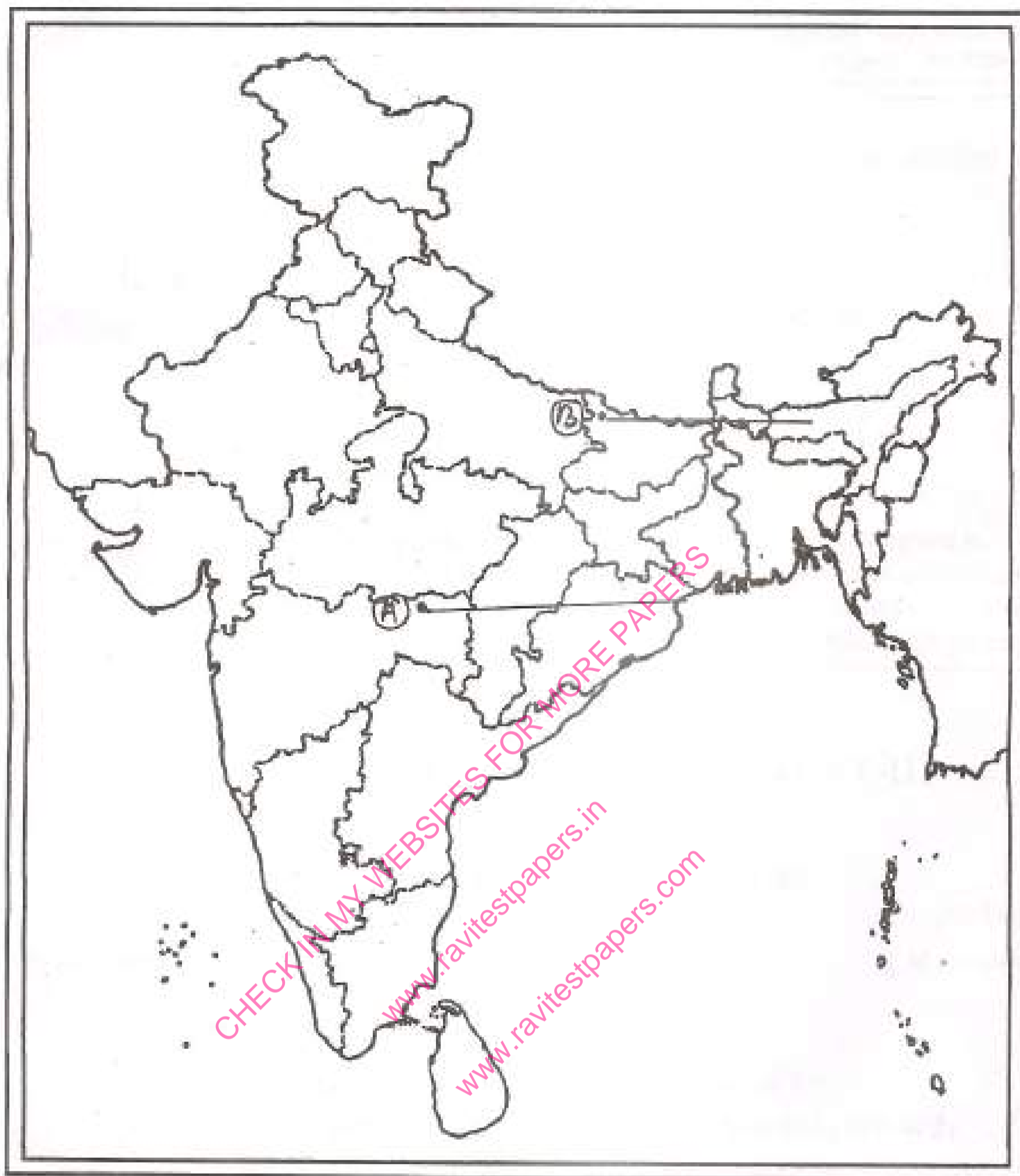
CHECK FREE TEST PAPERS [www.ravitestpapers.com](http://www.ravitestpapers.com) & [www.ravitestpapers.in](http://www.ravitestpapers.in)

**RAVI TEST PAPERS & NOTES, WHATSAPP – 8056206308**

## Outline Map of India (Political)


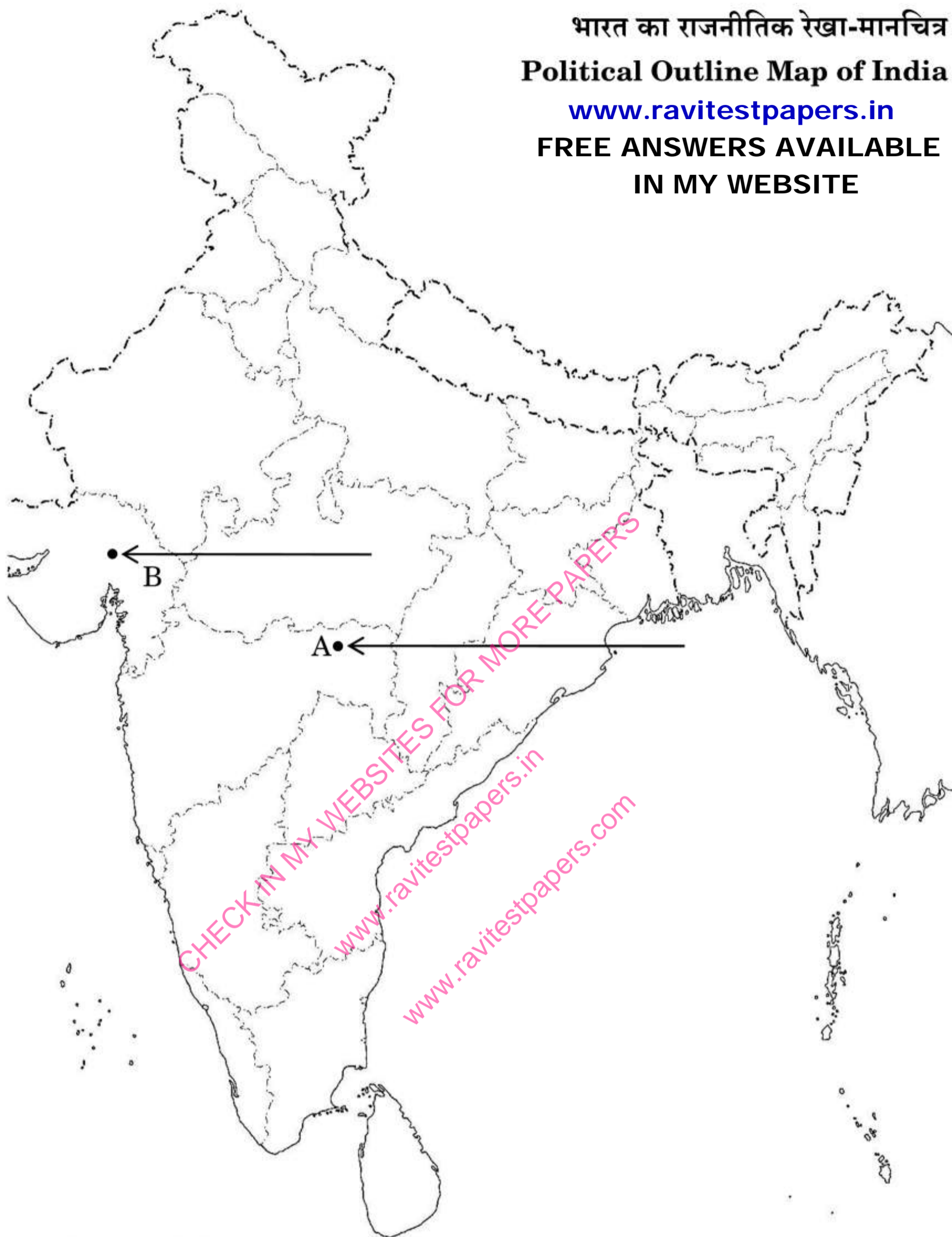


- Q51.** 1. Two features A and B, are marked in the political outline map of India. Identify these features with the help of the following information and write their correct names on the lines marked in the map: **5 Marks**
1. The place, where the Indian National Congress Session was held in December 1920.
  2. The place, where the 'Movement of Indigo Planters' was started.
2. On the same given political outline map of India, locate and label the following features with appropriate symbols:
1. Kalpakkam – Nuclear plant.
  2. Bhadravati – Iron and steel plant.
  3. Kochchi – Major sea port.



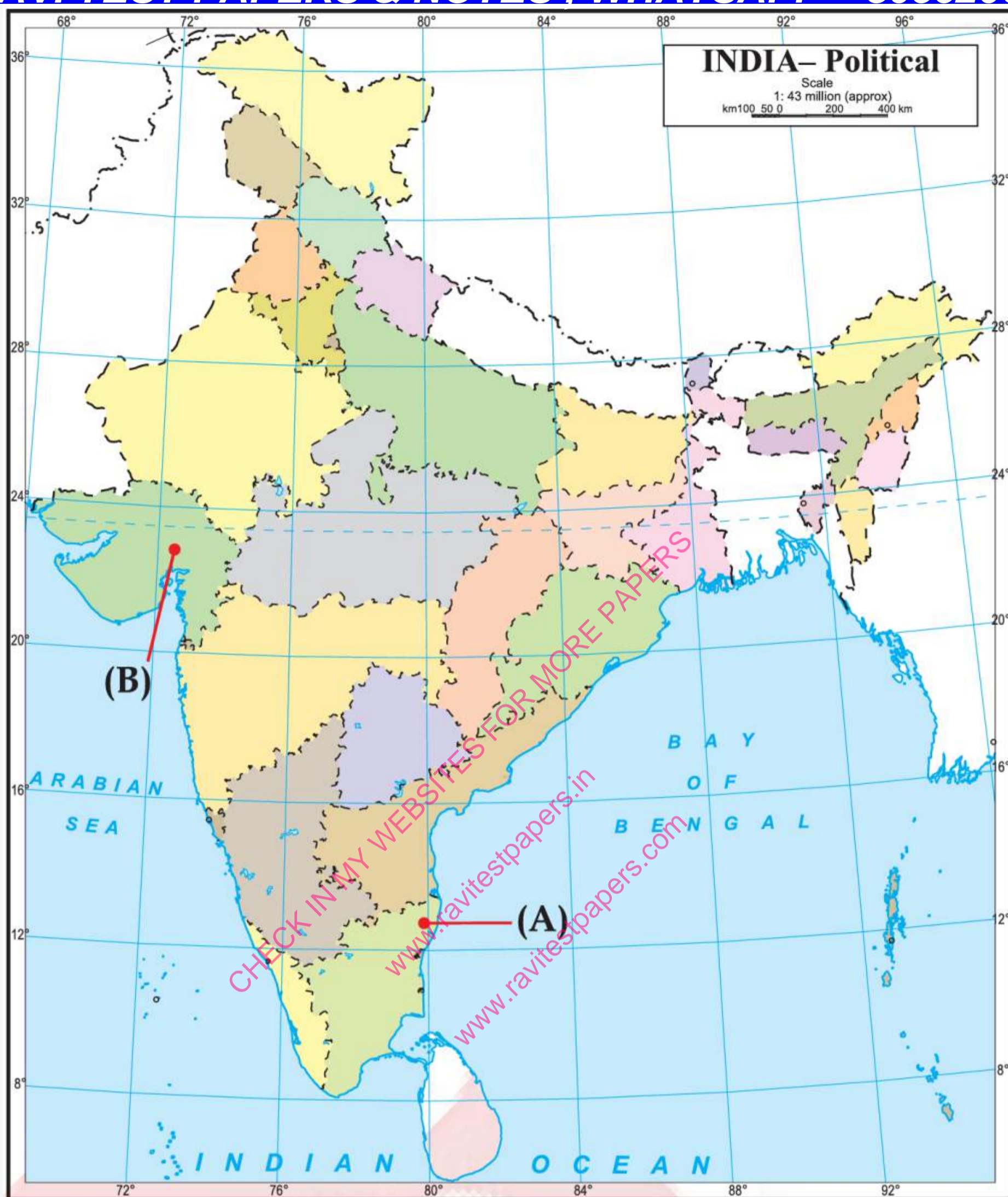
- Q52.** 1. Two places A and B have been marked on the given political outline map of India (on page 27). Identify them with the help of the following information and write their correct names on the lines drawn near them: **5 Marks**
1. The place where the session of Indian National Congress was held in 1920.
  2. The place where Gandhiji started Dandi March.
2. On the same political outline map of India, locate and label any three of the following with suitable symbols:
1. Leading state in production of Jute
  2. Atomic Power Plant located in Gujarat
  3. Iron and Steel Plant located in Jharkhand
  4. Sri Guru Ram Das Jee International Airport

भारत का राजनीतिक रेखा-मानचित्र  
Political Outline Map of India  
[www.ravitestpapers.in](http://www.ravitestpapers.in)  
FREE ANSWERS AVAILABLE  
IN MY WEBSITE

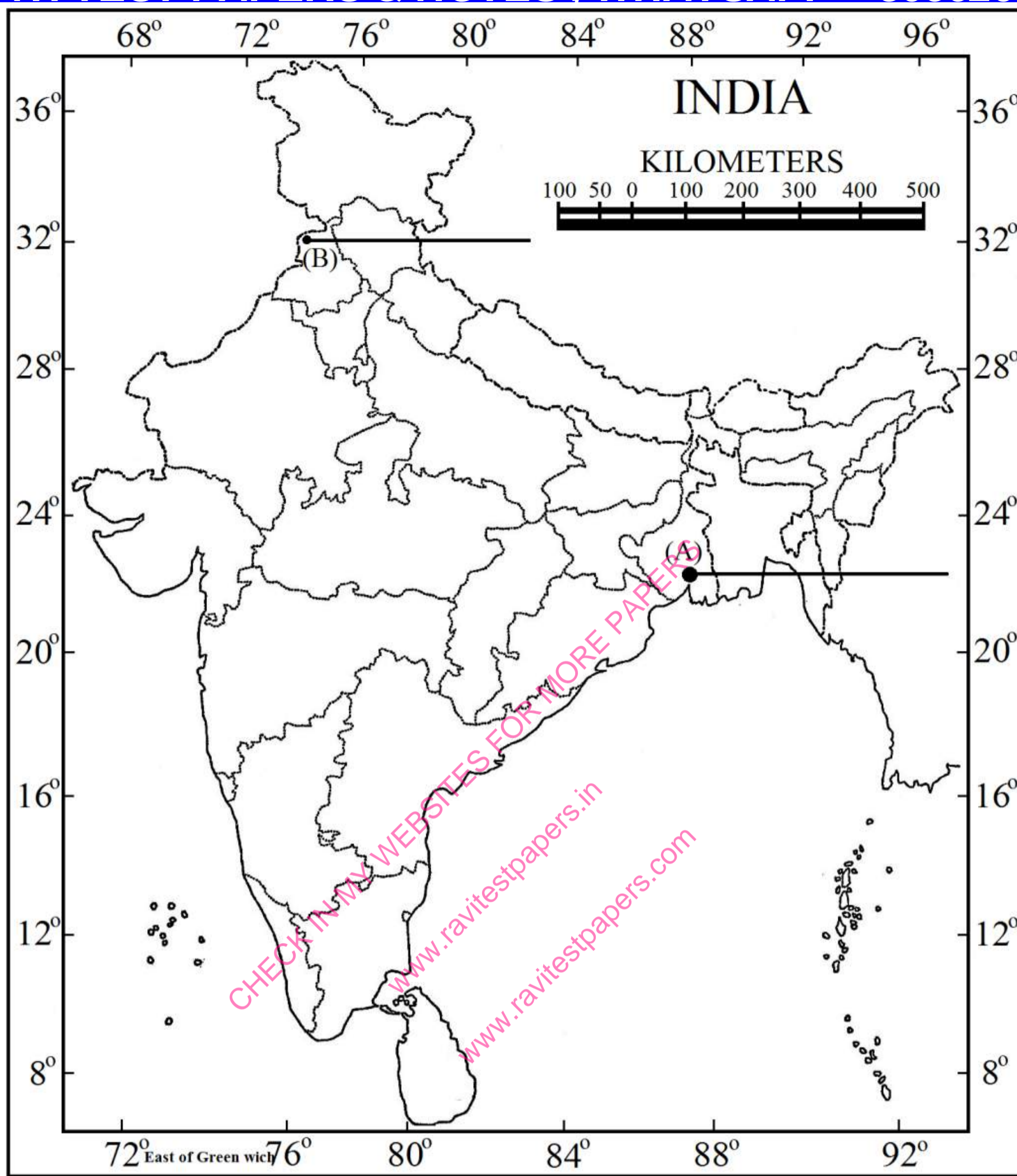


- Q53.** 1. Two places 'A' and 'B' have been marked on the given political outline map of India. Identify them with the help of the following information and write their correct names on the lines drawn near them:
1. The place where the session of Indian National Congress took place in 1927.
  2. The place where Mahatma Gandhi led the movement of cotton mill workers.
2. On the same outline map of India locate and label any three of the following with suitable symbols:
1. An International Airport located in Punjab.
  2. A major Sea port located in Gujarat.
  3. A major oil field of India located in Arabian Sea.
  4. A Nuclear Power Plant located in Uttar Pradesh.

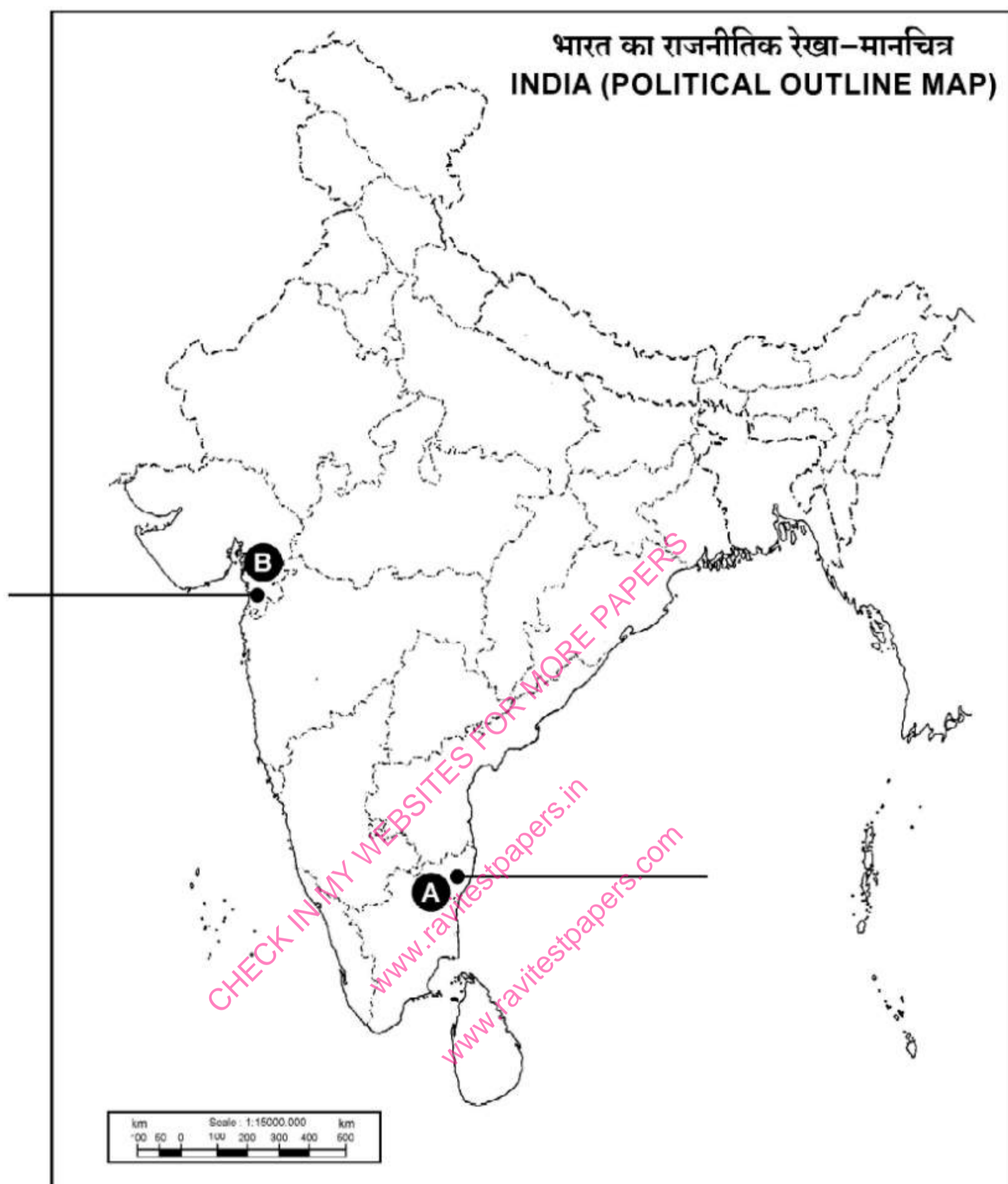
**5 Marks**



- Q54.** 1. Two features A and B are marked on the given political outline map of India. Identify these features with the help of the following information and write their correct names on the lines marked near them. **5 Marks**
1. The place where the Indian National Congress Session was held.
  2. The city where Jallianwalla Bagh incident took place.
2. Locate and label any three of the following with appropriate symbols on the same given outline political map of India.
1. Kalpakkam - Nuclear Power Plant
  2. Vijayanagar - Iron and Steel Plant
  3. Noida - Software Technology Park
  4. Paradeep - Sea Port
  5. Sardar Sarovar - Dam



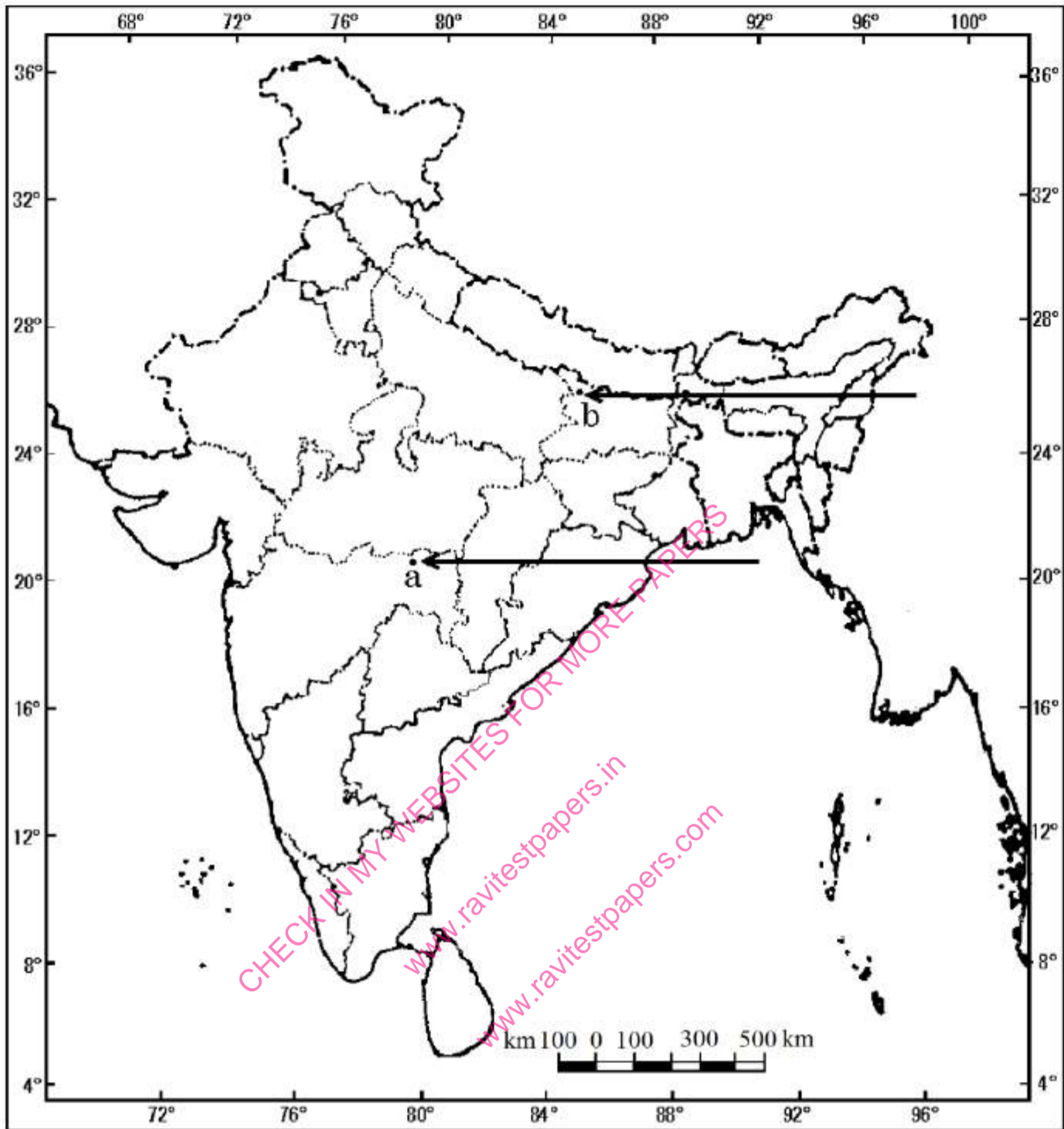
- Q55.** 1. Two places (A) and (B) have been marked on the given political outline Map of India. Identify them with the help of given information and write their correct names on the lines drawn near them. **5 Marks**
- The Place where Indian National Congress Session was held in 1927.
  - The place where Mahatma Gandhi broke Salt law.
2. On the same outline Map of India locate and label any three of the following with suitable symbols.
- Indira Gandhi International Airport.
  - Kakrapar — Atomic Power Station.
  - Hyderabad — Software Technology Park.
  - Kandla Sea Port.



- Q56.** 1. Two features 'a' and 'b' are marked on the given political outline map of India (on page 11). Identify these features with the help of the following information and write their correct names on the lines marked near them:
1. The place where the Indian National Congress session was held.
  2. The place from where the movement of Indigo planters was started.
2. Locate and label any three of the following with appropriate symbols on the same given political outline map of India:
1. Hirakud – Dam.
  2. Kochi – Major sea port.
  3. Salem – Iron and Steel Centre.
  4. Hyderabad – Software Technology Park.
  5. Naraura – Nuclear Power Plant.

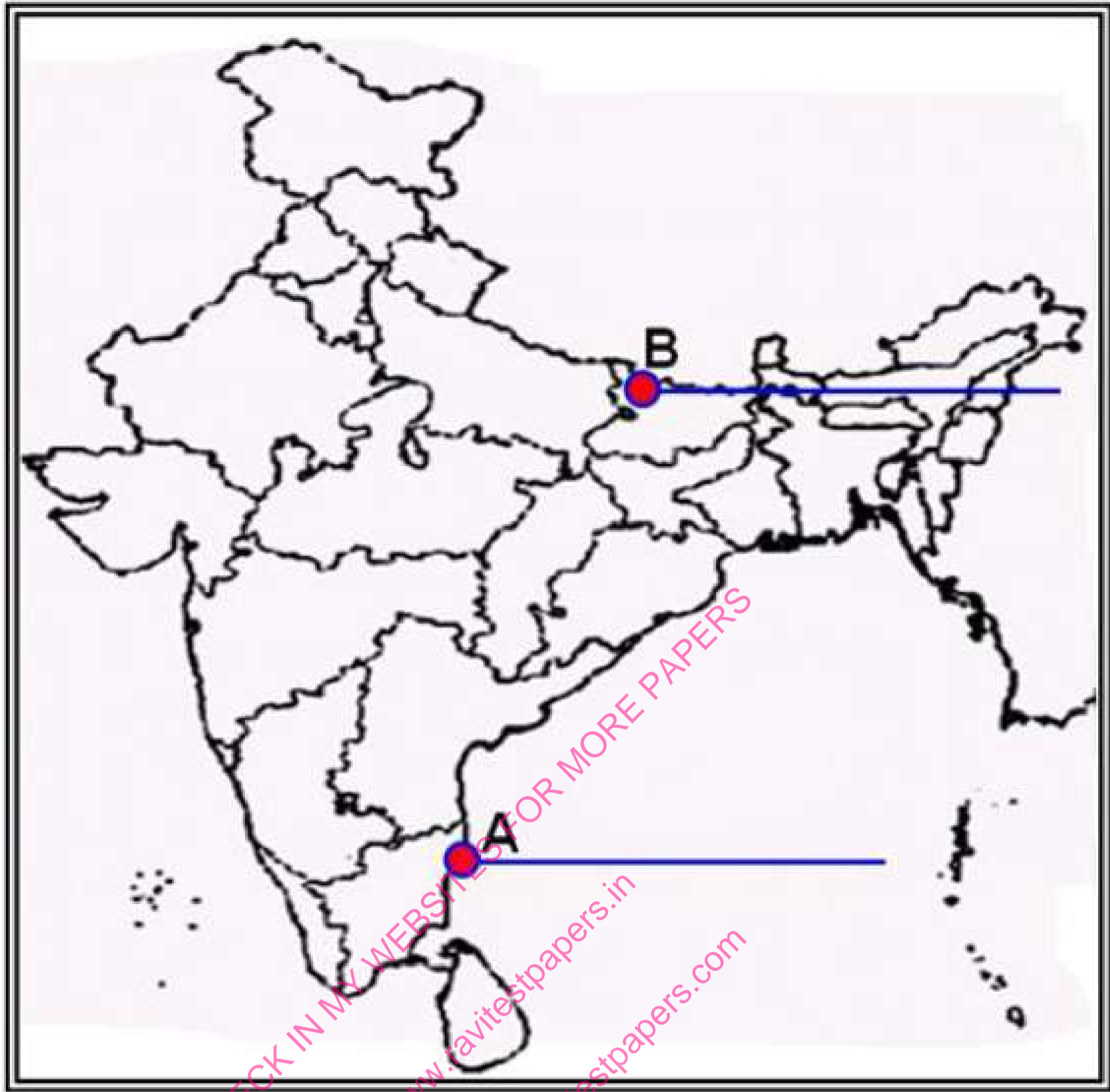
5 Marks

## Outline Map of India (Political)



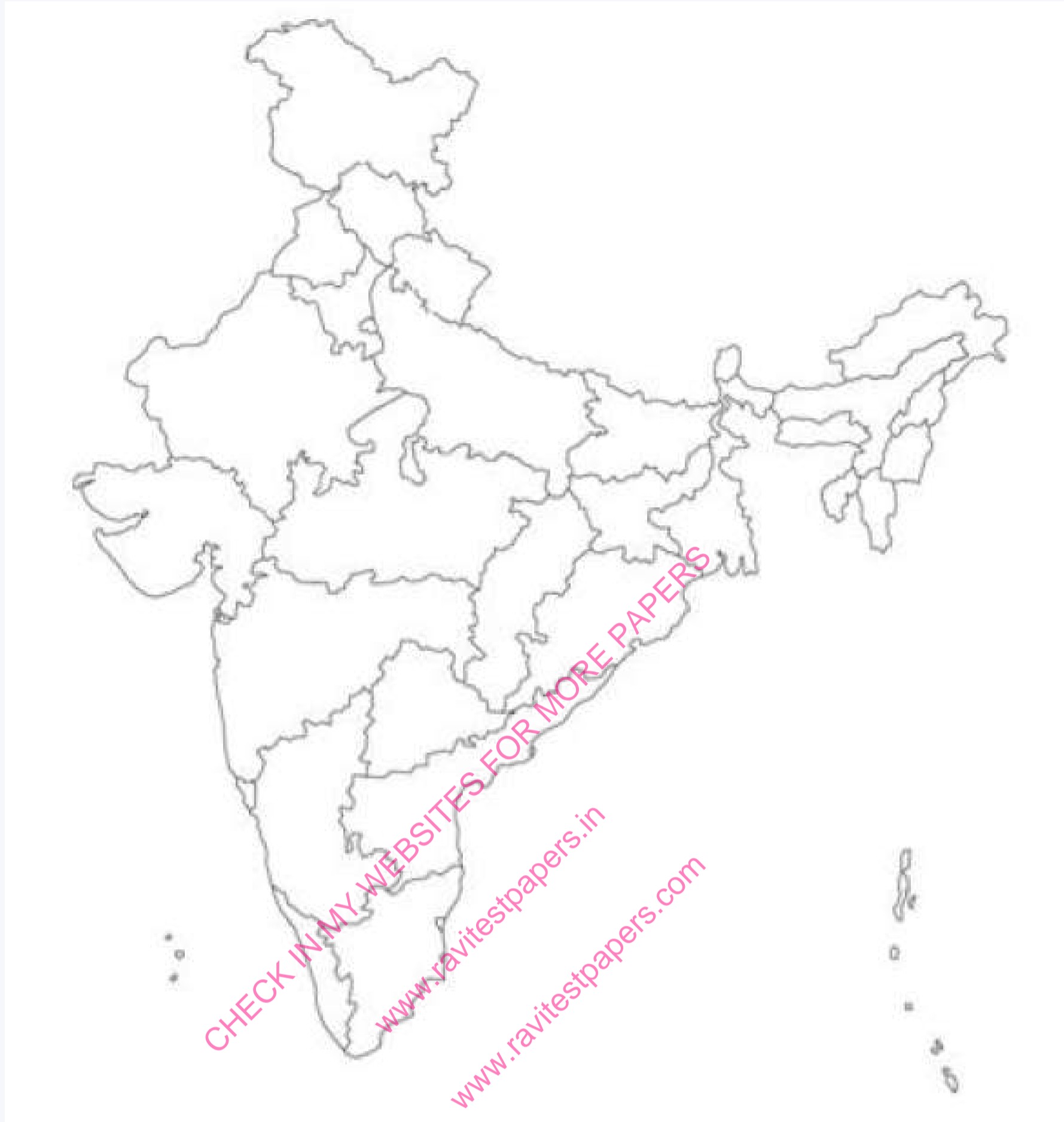
- Q57.** 1. Two features A and B are marked in the political outline map of India. Identify these features with the help of the following information and write their correct names on the lines marked in the map: **5 Marks**
1. The place where the Indian National Congress Session was held in 1927.

2. The place which is associated with the movement of Indigo Planters.



2. On the same political outline map of India, locate and label the following with appropriate symbols
1. Narora-a nuclear power plant.
  2. Rourkela-an iron and steel plant.

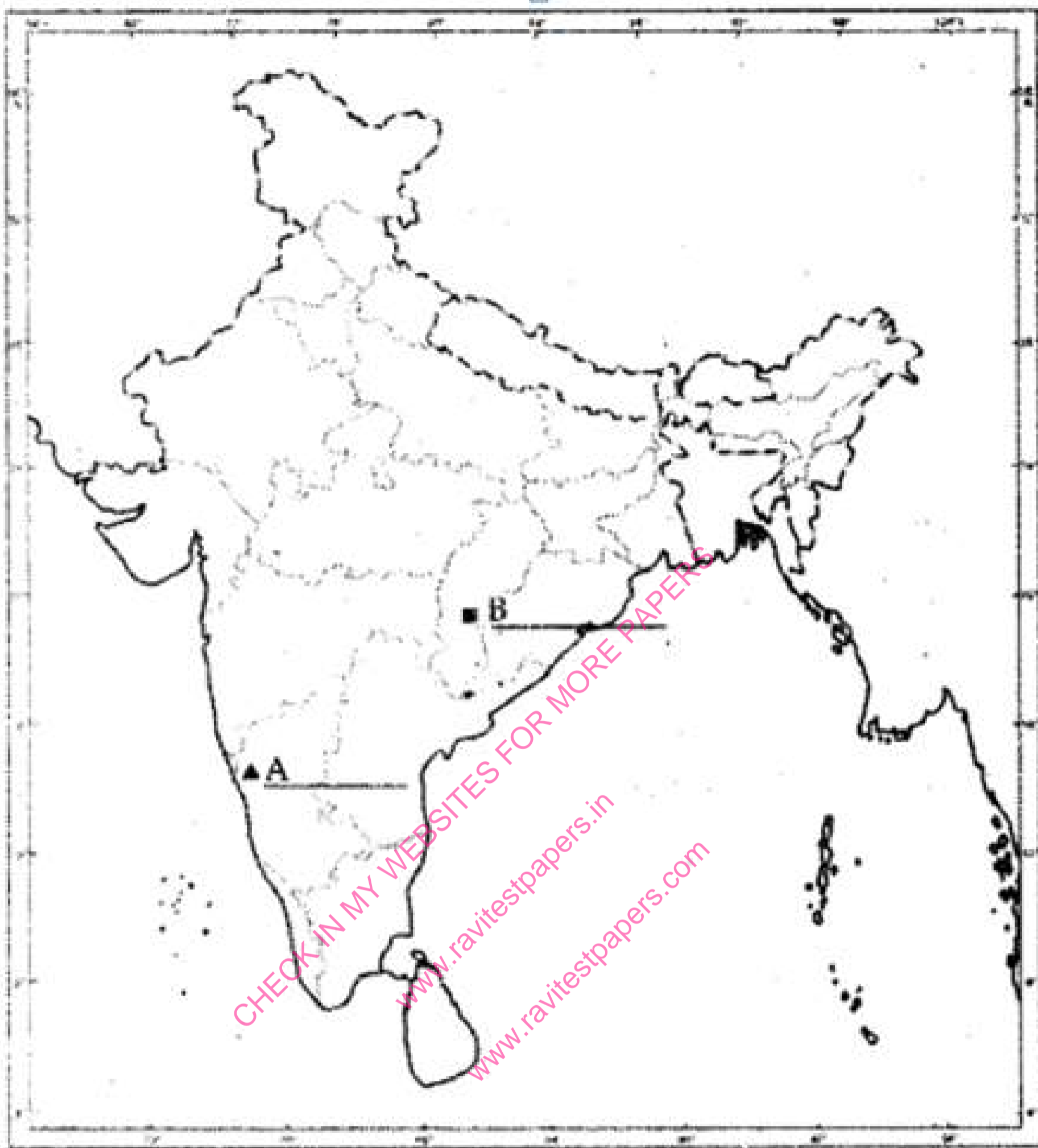
3. Kandla-a major sea port.



**Q58.**On the given political outline map of India:

**5 Marks**

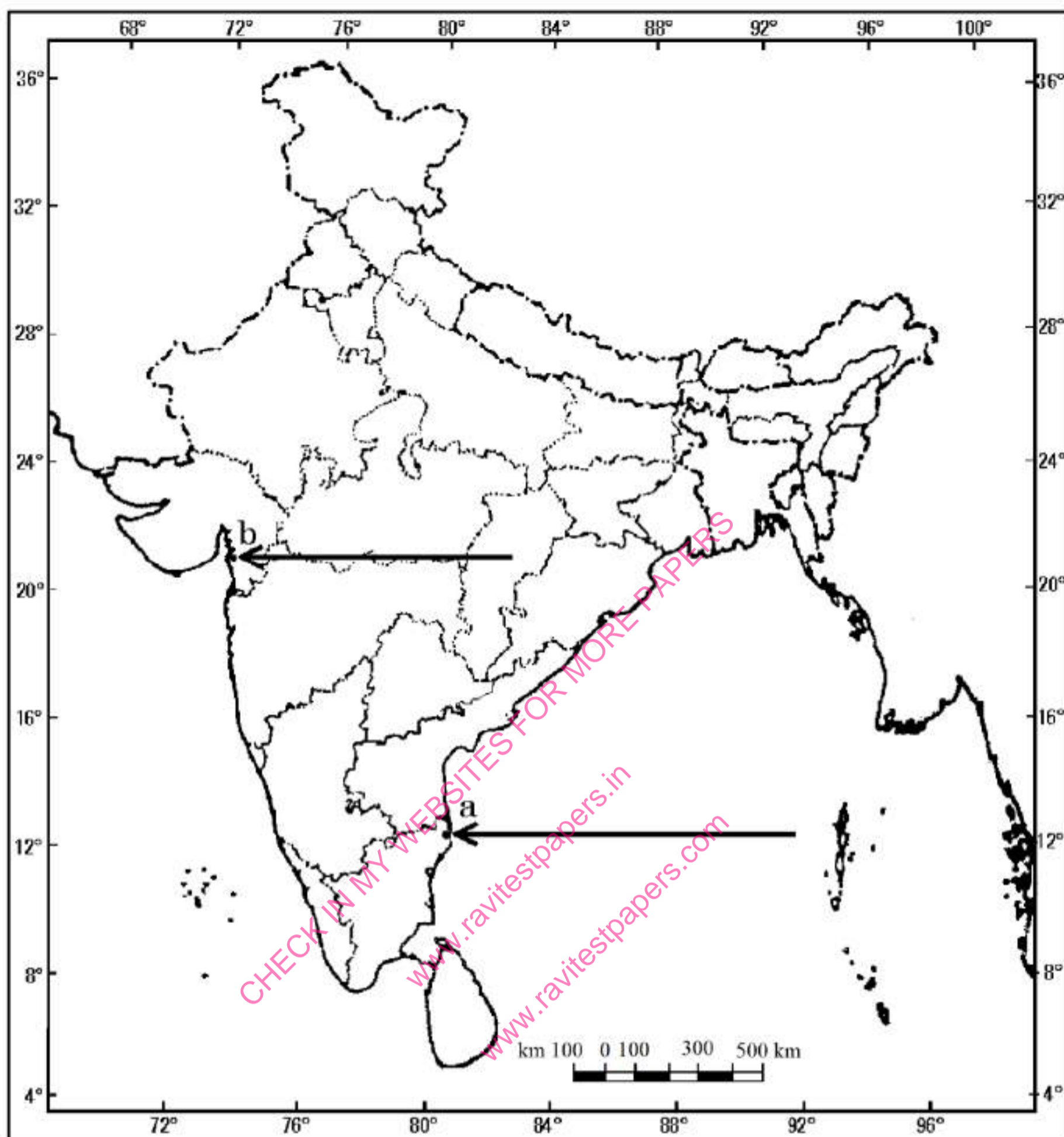
1. Identify.
  1. Nuclear Power Plant:
  2. Iron and Steel Centre:
2. Locate and label.
  1. Kandla—Major Sea Port.



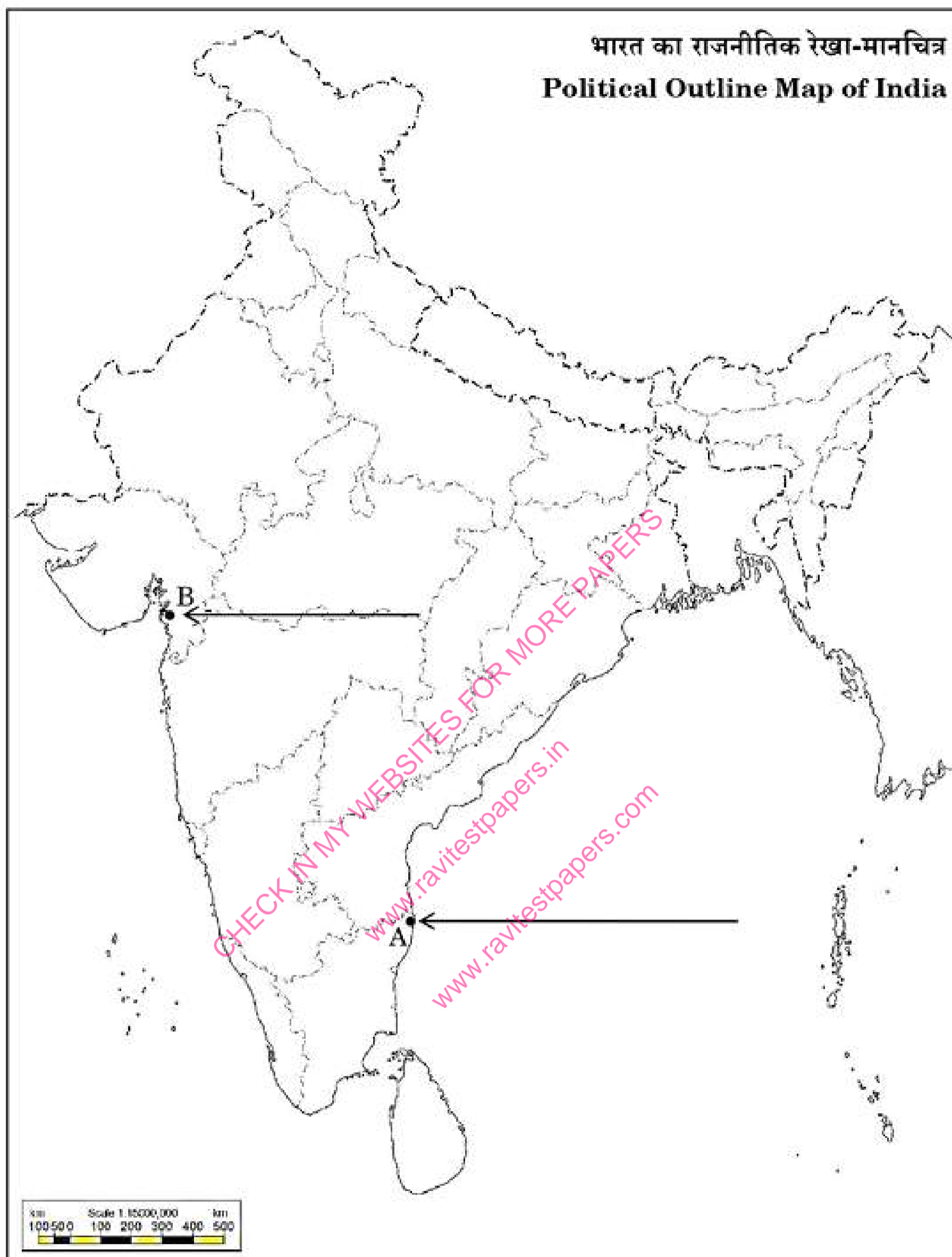
- Q59.** 1. Two features 'a' and 'b' are marked on the given political outline map of India (on page 11). Identify these features with the help of the following information and write their correct names on the lines marked near them:
1. The place where the Indian National Congress Session was held.
  2. The place where Gandhiji violated the salt law.
2. Locate and label any three of the following with appropriate symbols on the same given outline political map of India:
1. Bokaro – Iron and Steel Plant.
  2. Gandhinagar – Software Technology Park.
  3. Tarapur – Nuclear Power Plant.
  4. Salal – Dam.
  5. Tuticorin – Sea Port.

**5 Marks**

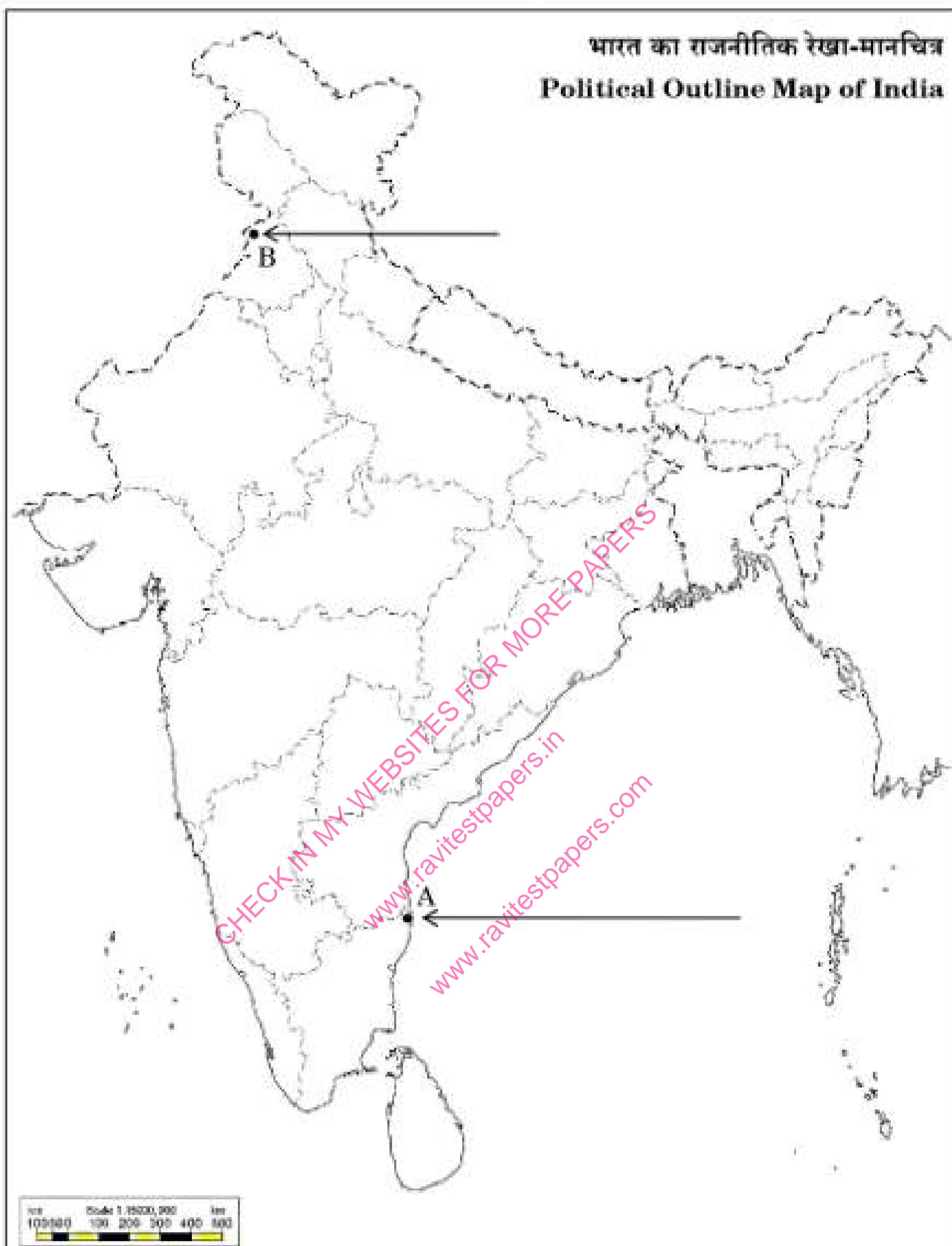
## Outline Map of India (Political)



- Q60.** 1. Two places A and B have been marked on the given political outline map of India. Identify them with the help of the following information and write their correct names on the lines drawn near them: **5 Marks**
1. The place where the session of Indian National Congress was held place in 1927.
  2. The place where Mahatma Gandhi broke the Salt Law.
2. On the same political outline map of India, locate and label any three of the following with suitable symbols:
1. An international airport of West Bengal
  2. A software technology park of Karnataka
  3. A nuclear power plant located in Maharashtra
  4. A major sea port of Odisha



- Q61.** 1. Two places 'A' and 'B' have been marked on the given political outline map of India (on page 27). Identify them **5 Marks** with the help of the following information and write their correct names on the lines drawn near them.
1. The place where the session of Indian National Congress was held in December 1927.
  2. The place where Jallianwala Bagh incident took place.
2. On the same political outline map of India, locate and label any three of the following with suitable symbols:
1. Eastern terminal station of the
  2. East-West Corridor Leading state in coffee production
  3. Nuclear power plant located in Uttar Pradesh
  4. Major sea port located in Odisha



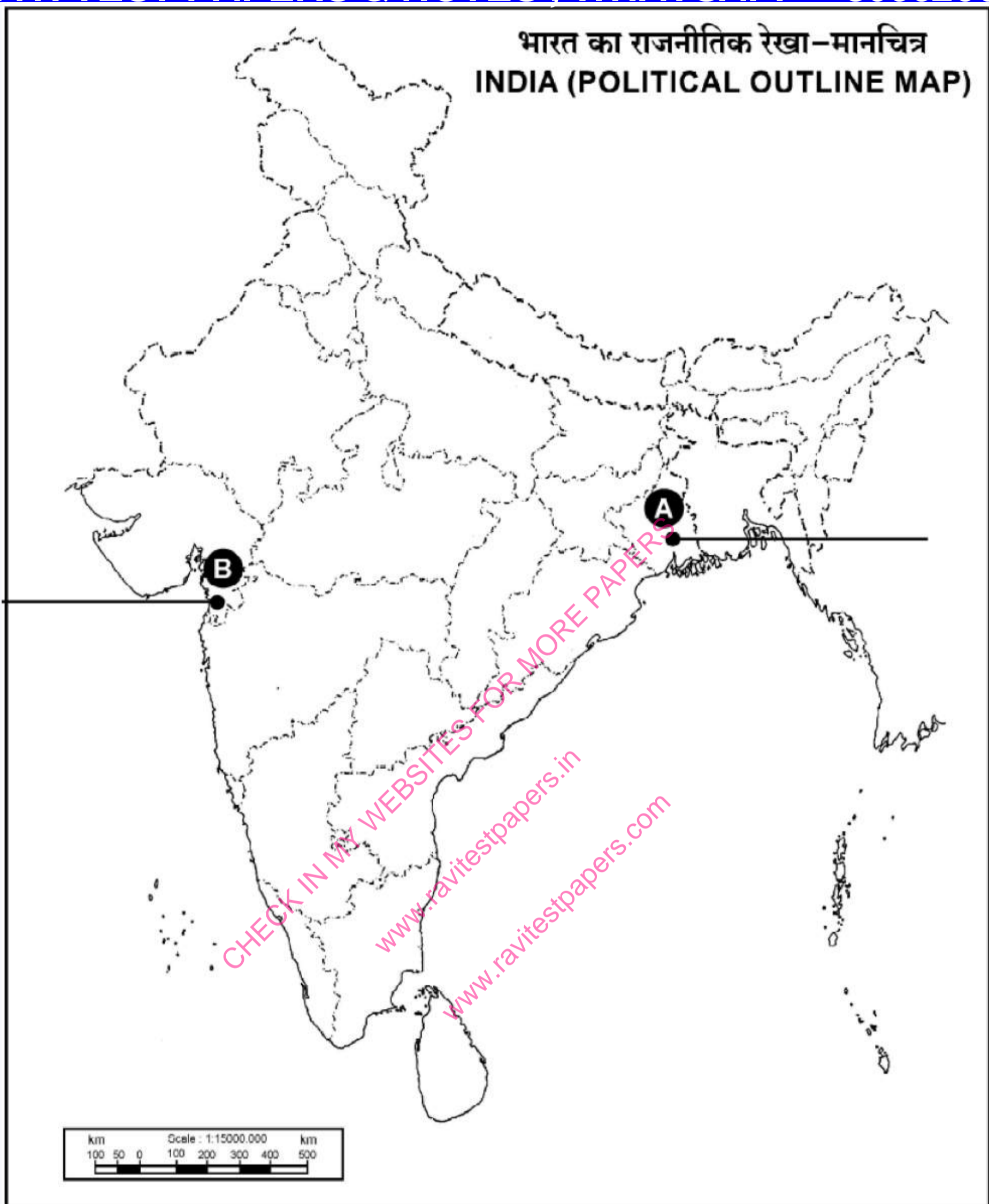
**Q62.** 1. Two places (A) and (B) have been marked on the given outline political Map of India. Identify them with the help of given information and write their correct names on the lines drawn near them:

**5 Marks**

- The place where the session of INC was held in September, 1920.
- The place where Mahatma Gandhi broke Salt Law.

2. On the same outline Map of India, locate and label any THREE of the following with suitable symbols:

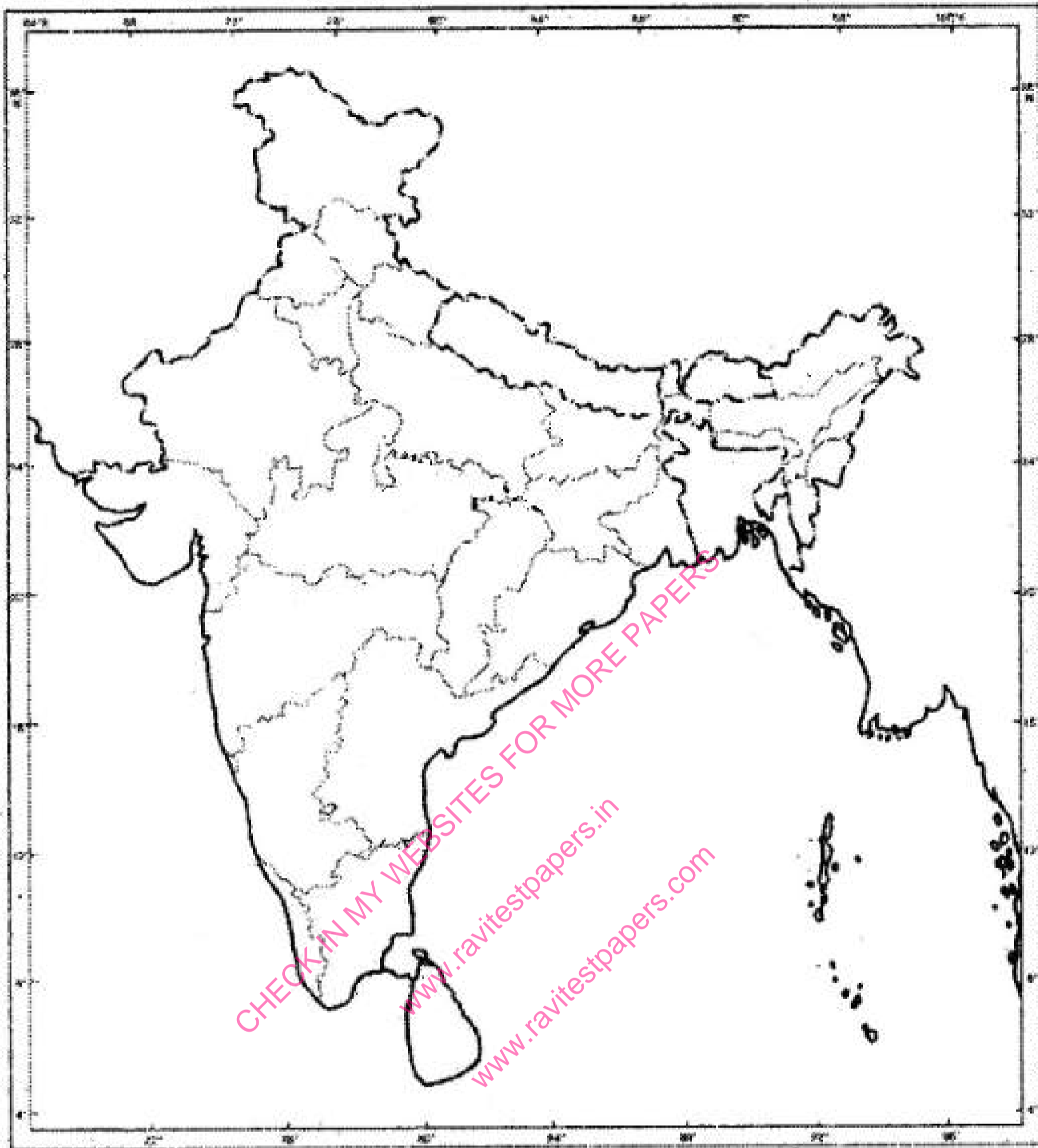
- Hirakud Dam
- Tarapur Atomic Power Station
- Pune Software Technology Park
- Paradip Sea Port



Q63. Identify and label the following on the map of India:

5 Marks

1. The place, where the Indian National Congress Session was held in 1927.
2. The place, where the Non-cooperation Movement was called off.
3. The place where the Jallianwala Bagh Massacre took place.

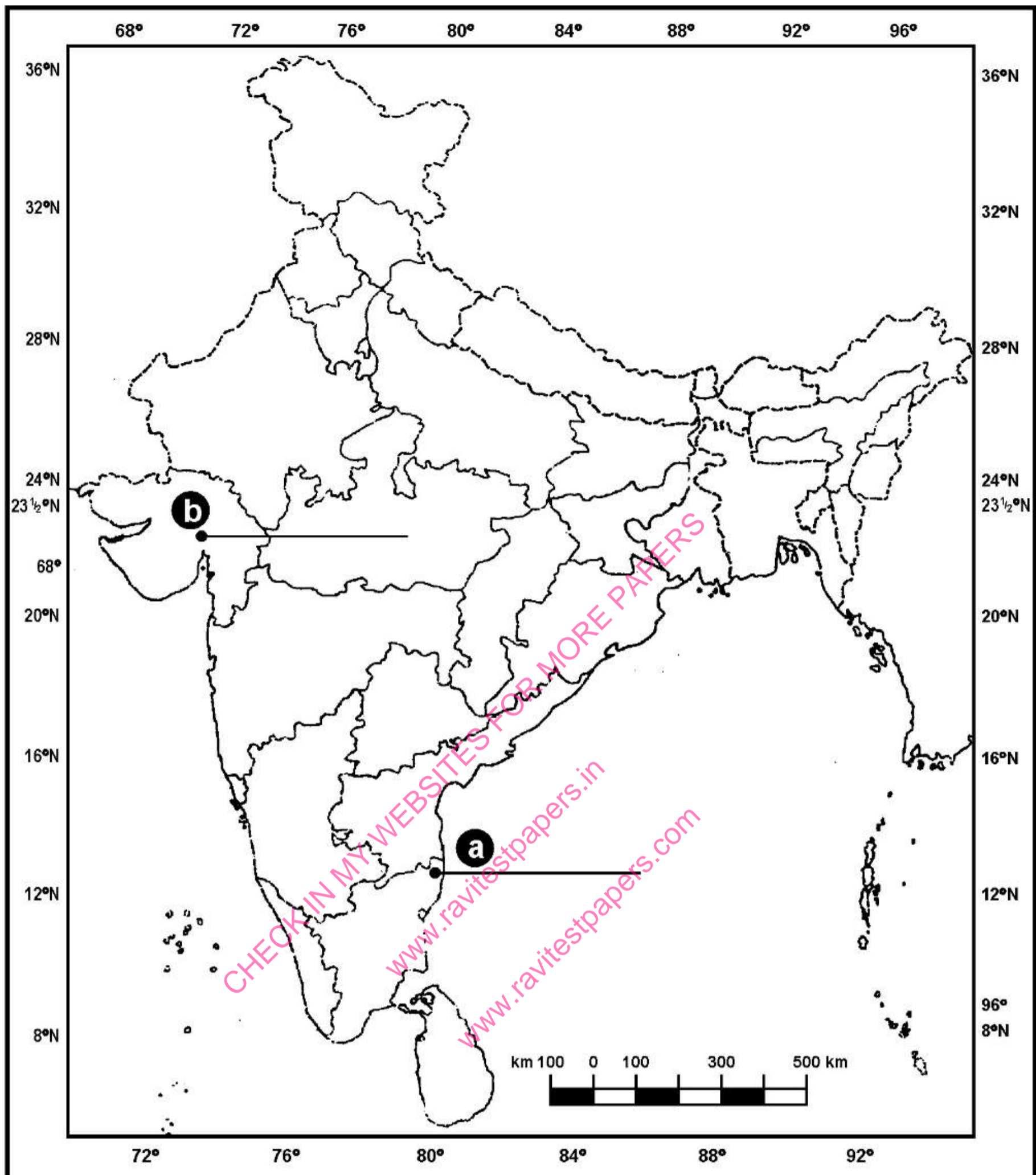


- Q64.** 1. Two places A and B have been marked on the given political outline map of India (on page 23). Identify them with the help of the following information and write their correct names on the lines drawn near them:
- The place where the session of the Indian National Congress was held in December, 1920.
  - The place where Jallianwala Bagh incident occurred.
2. On the same political outline map of India, locate and label any three of the following with suitable symbols:.
- Noida — Software Technology Park.
  - Bailadila — Iron-ore mines.
  - Tarapur — Nuclear Power Plant.
  - Haldia — Sea port.

**5 Marks**

- Q65.** 1. Two features a and b are marked on the given political outline map of India. Identify these features with the help of the following information and write their correct names on the lines marked near them:
- The place where the Indian National Congress Session was held.
  - The place where Gandhiji organized 'Satyagraha' in favour of cotton mill workers.
2. Locate and label the following with appropriate symbols on the same given outline political map of India.
- Raja Sansi – International Airport.
  - Bhadravati – Iron and Steel Plant.
  - Software Technology Park of West Bengal.

**5 Marks**



- Q66.** 1. Two features A and B are marked in the political outline map of India. Identify these features with the help of the following information and write their correct names on the lines marked in the map: **5 Marks**
1. The place where the Indian National Congress Session was held in September 1920.

2. The place where the cotton mill workers Satyagraha was organised in 1918.



2. On the same political outline map of India, locate and label the following with appropriate symbols:

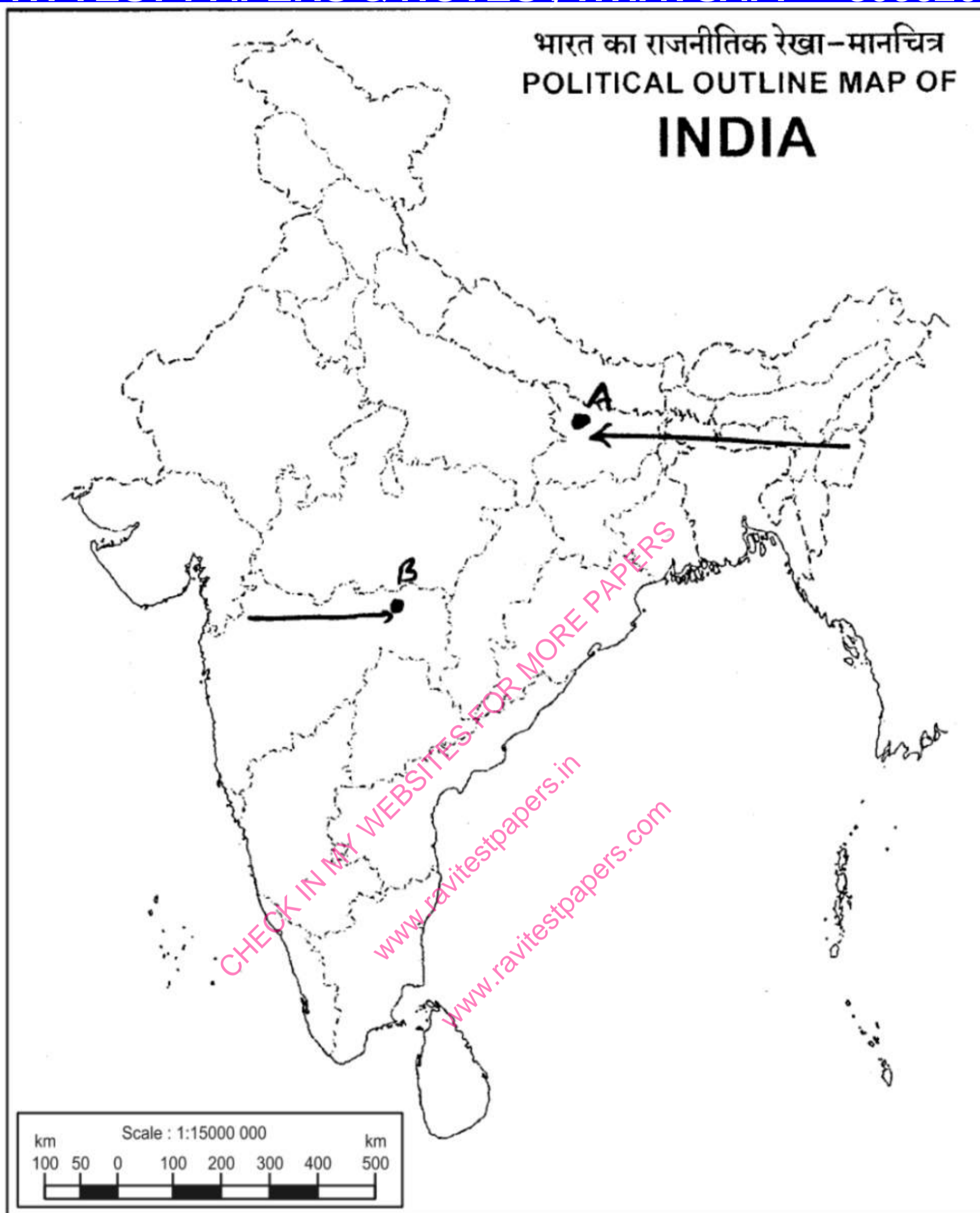
1. Bhilai - iron and steel plant.
2. Coimbatore - cotton textile centre.
3. Raja Sansi - international airport.

**Q67.** 1. Two places A and B have been marked on the given political outline map of India. Identify them with the help of given information and write their correct names on the lines drawn near them. **5 Marks**

- a. The place where Mahatma Gandhi started Satyagraha for Indigo peasants.
- b. The place where the session of Indian National Congress held in December, 1920.

2. On the same outline map of India locate and label any three of the following with suitable symbols:

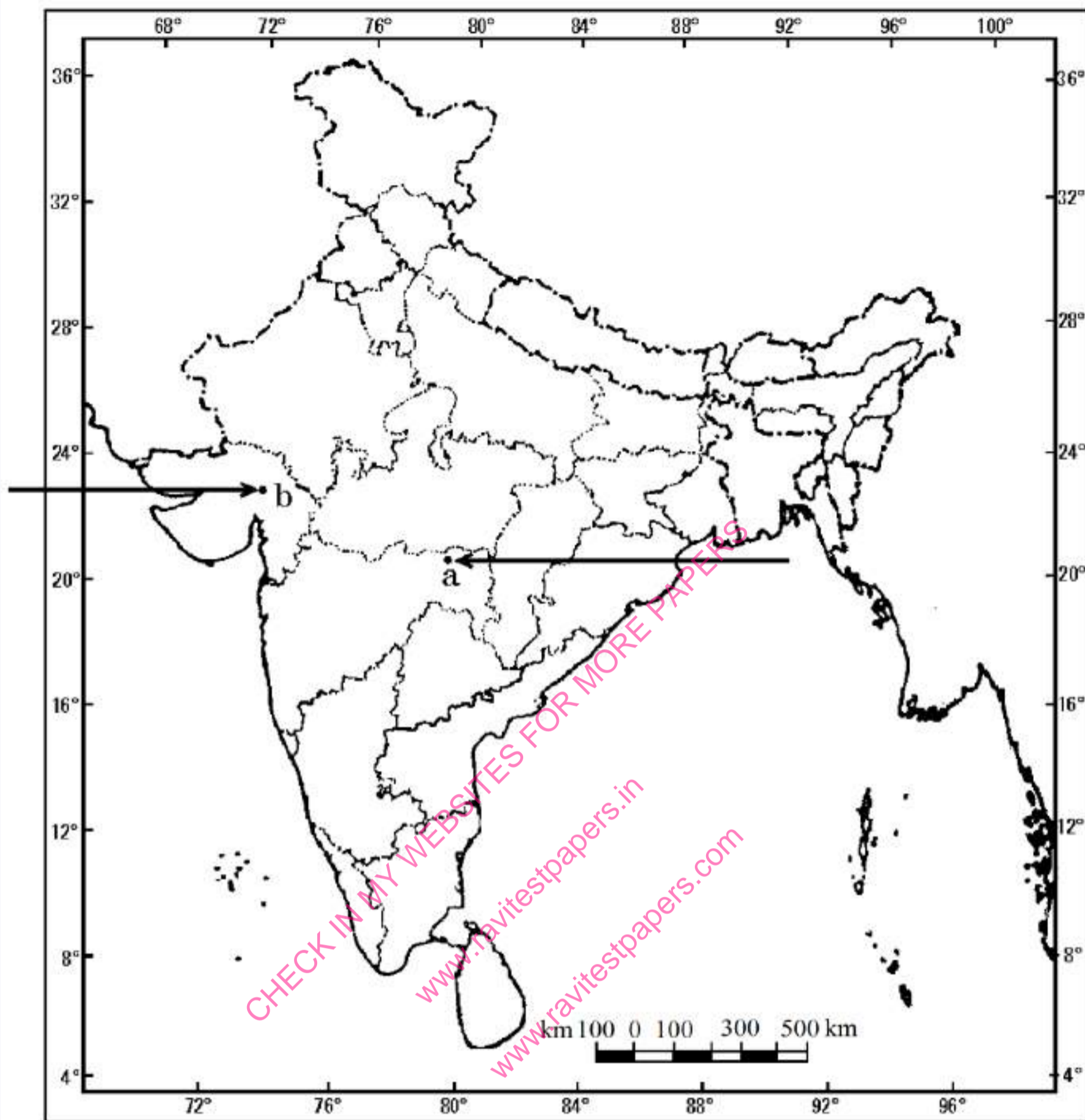
- a. Tehri Dam
- b. Naraura Atomic Power Station
- c. Pune Software Technology Park
- d. Haldia Sea Port



- Q68.** 1. Two features 'a' and 'b' are marked on the given political outline map of India (on page 11). Identify these features with the help of the following information and write their correct names on the lines marked near them:
1. The place where the Indian National Congress Session was held.
  2. The place where Gandhiji organized Satyagraha in favour of cotton mill workers.
2. Locate and label any three of the following with appropriate symbols on the same given political outline map of India:
1. Raja Sansi – International Airport.
  2. Bhadravati – Iron and Steel Plant.
  3. Software Technology Park of West Bengal.
  4. Tehri – Dam.
  5. Kaiga – Nuclear Power Plant.

**5 Marks**

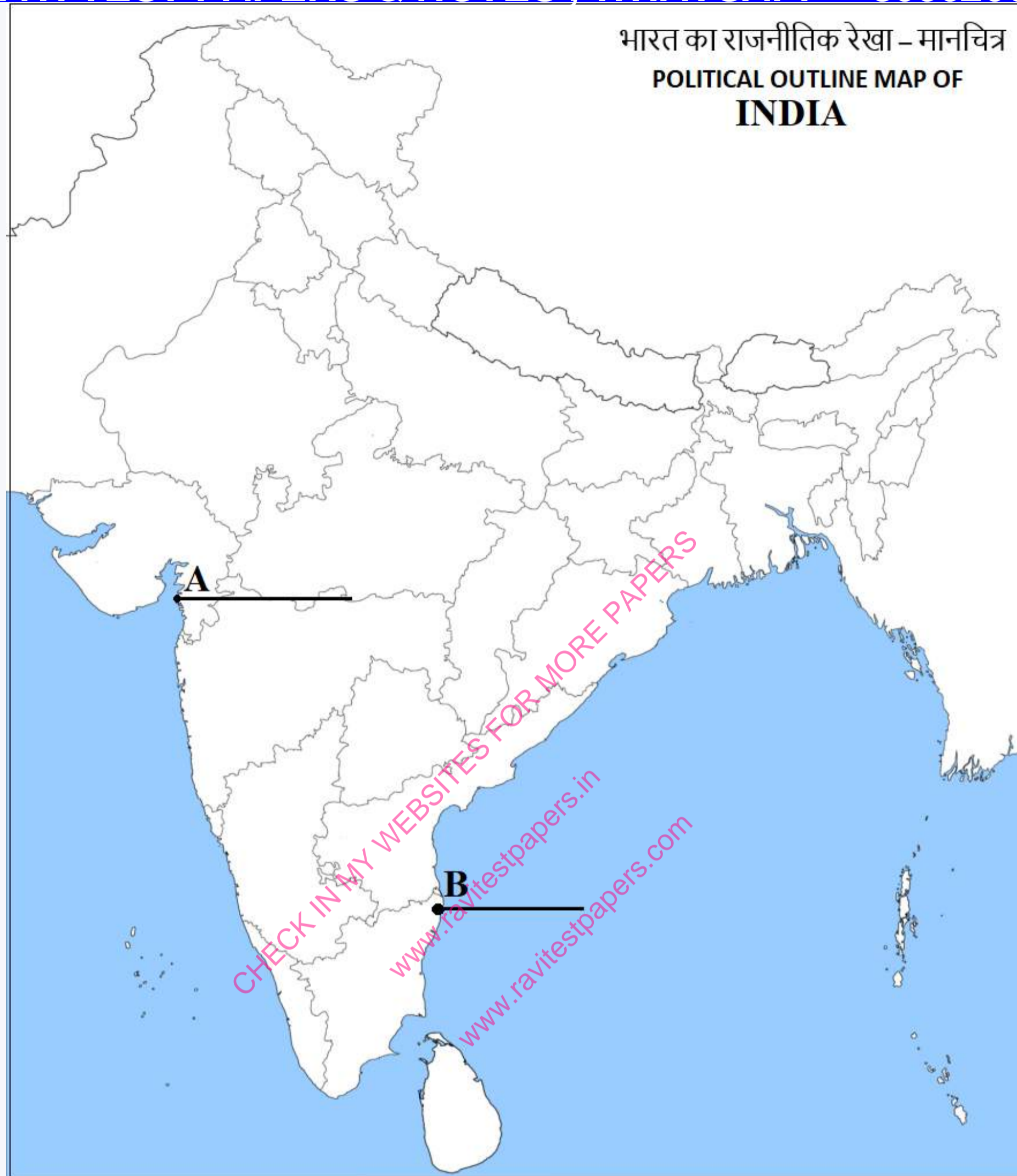
# Outline Map of India (Political)



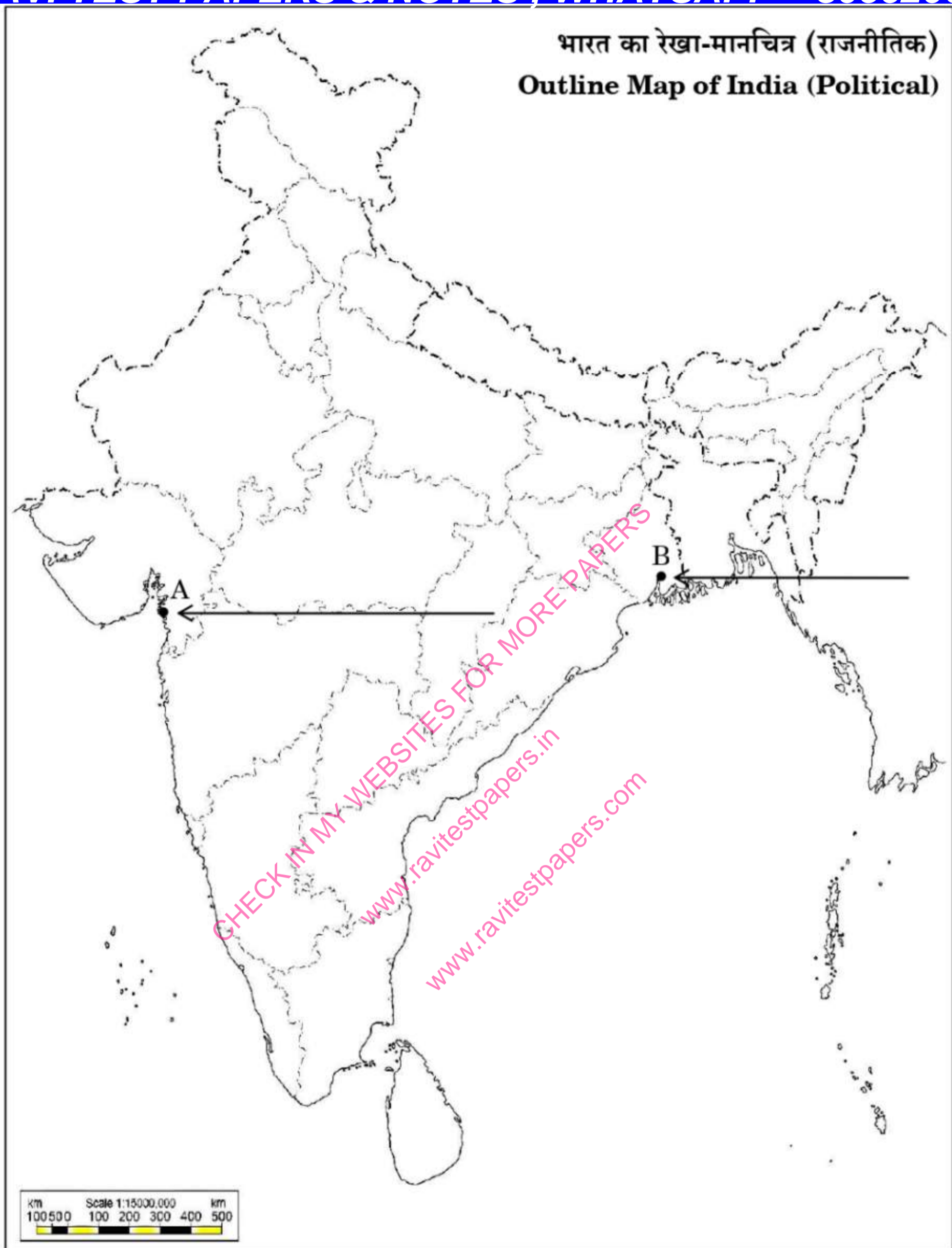
- Q69.** 1. Two places 'A' and 'B' have been marked on the given Political outline map of India. Identify them with the help of the following information and write their correct names on the lines drawn near them:
1. The place where Mahatma Gandhi broke the salt law.
  2. The place where Session of Indian National Congress was held in 1927.
2. On the same Political outline map of India, locate and label any three of the following with suitable symbols:
- |     |            |                          |
|-----|------------|--------------------------|
| (a) | Hirakud    | Dam                      |
| (b) | Mumbai     | Software Technology Park |
| (c) | Raja Sansi | International Airport    |
| (d) | Naraura    | Nuclear Power Plant      |

**5 Marks**

भारत का राजनीतिक रेखा – मानचित्र  
POLITICAL OUTLINE MAP OF  
**INDIA**



- Q70.** 1. Two places A and B have been marked on the given political outline map of India (on page 23). Identify them with the help of the following information and write their correct names on the lines drawn near them: **5 Marks**
- The place where Gandhiji broke the salt law.
  - The place where the session of the Indian National Congress was held in September, 1920.
2. On the same political outline map of India, locate and label any three of the following with suitable symbols:
- Tehri — Dam
  - Bokaro — Coal mines
  - Pune — Software Technology Park
  - Tuticorin — Sea port

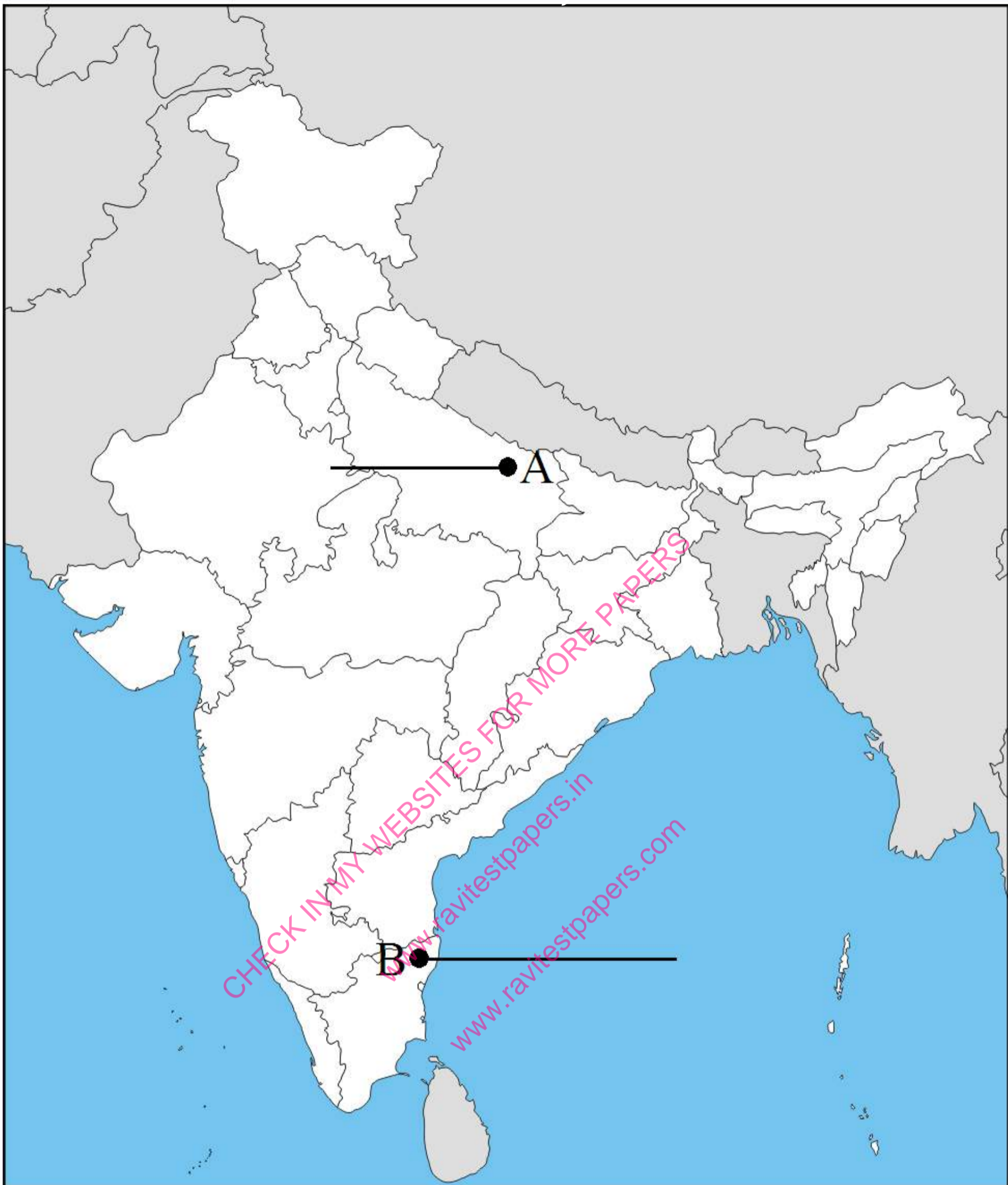


**Q71.** Two features A and B are marked in the political outline map of India. Identify these features with the help of the following information and write their correct names on the line marked in the map.

**5 Marks**

(A) The Place where the Indian National Congress Session was held in 1927.

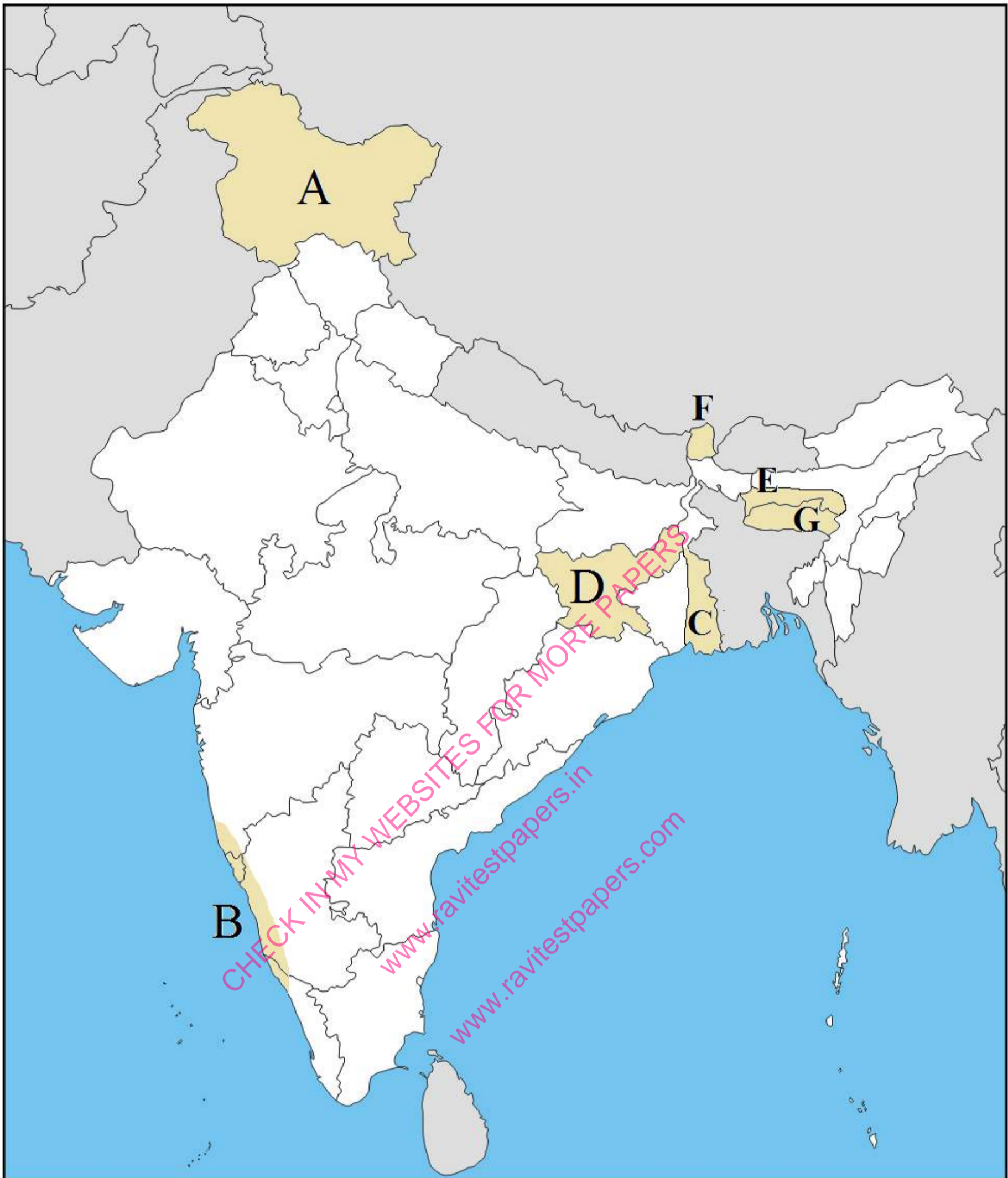
(B) The place where Non-Cooperation Movement was called off.



**Q72.** On the given political outline map of India, locate and label the following items.

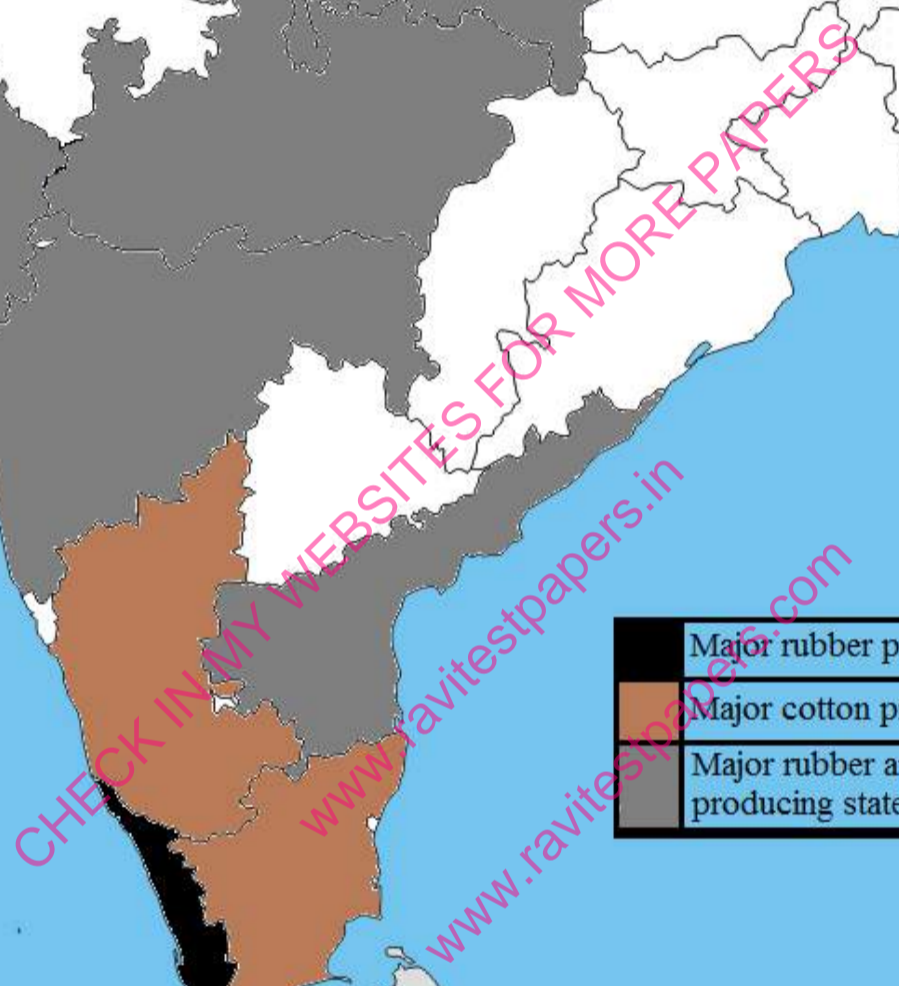
**5 Marks**

A. Salal Project B. Tungabhadra Dam C. Rana Pratap Sagar Dam D. Hirakund Dam E. Tehri Dam F. Bhakra Nangal Dam G. Sardar Sarovar Dam H. Nagarjuna Sagar.



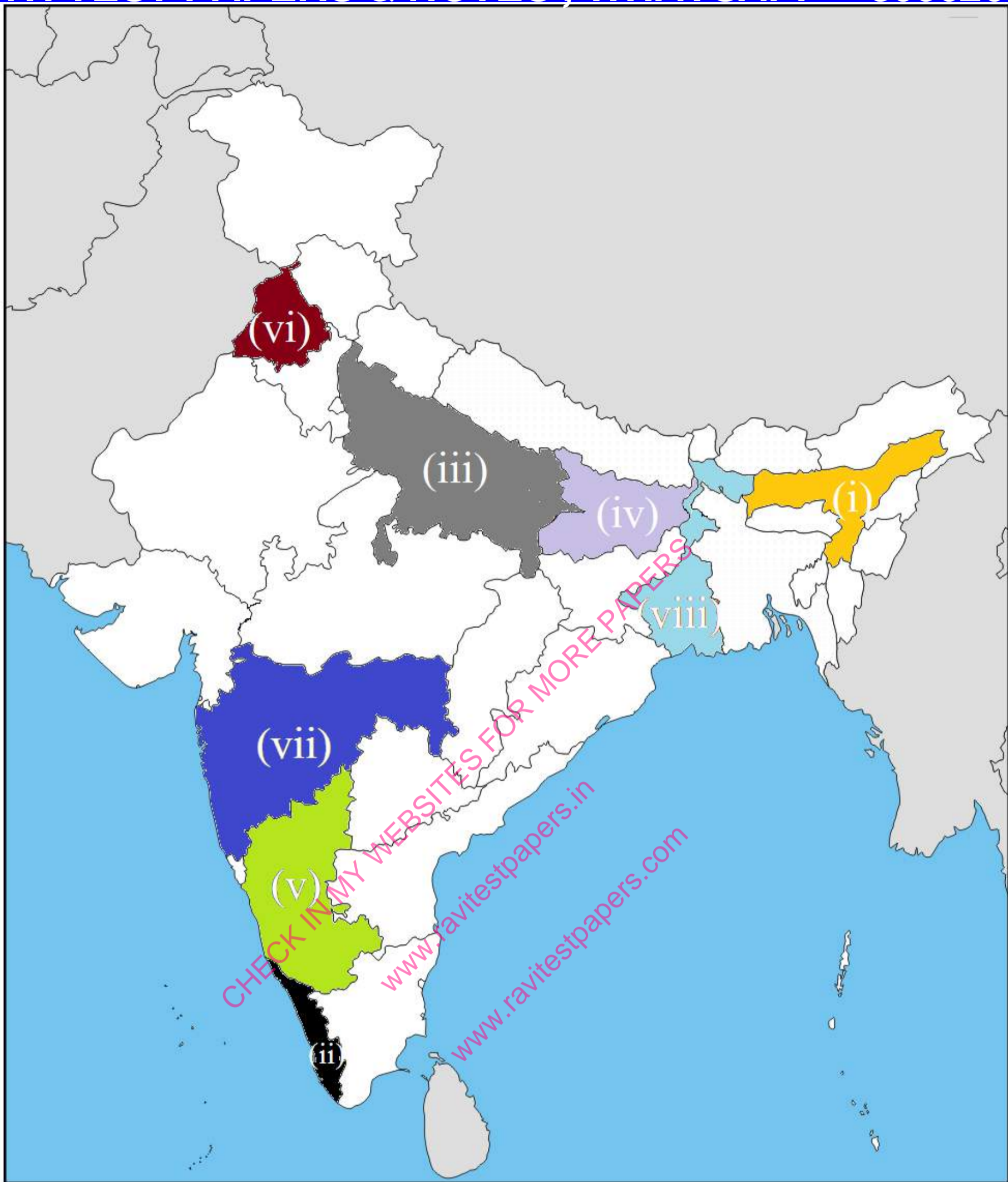
**Q73.** On an outline map of India given below, identify the largest/ major producer states of rubber, cotton and jute and write their names with the help of symbols marked in the map.

**5 Marks**



5 Marks

- [www.ravitestpapers.in](http://www.ravitestpapers.in) / [www.ravitestpapers.com](http://www.ravitestpapers.com)**



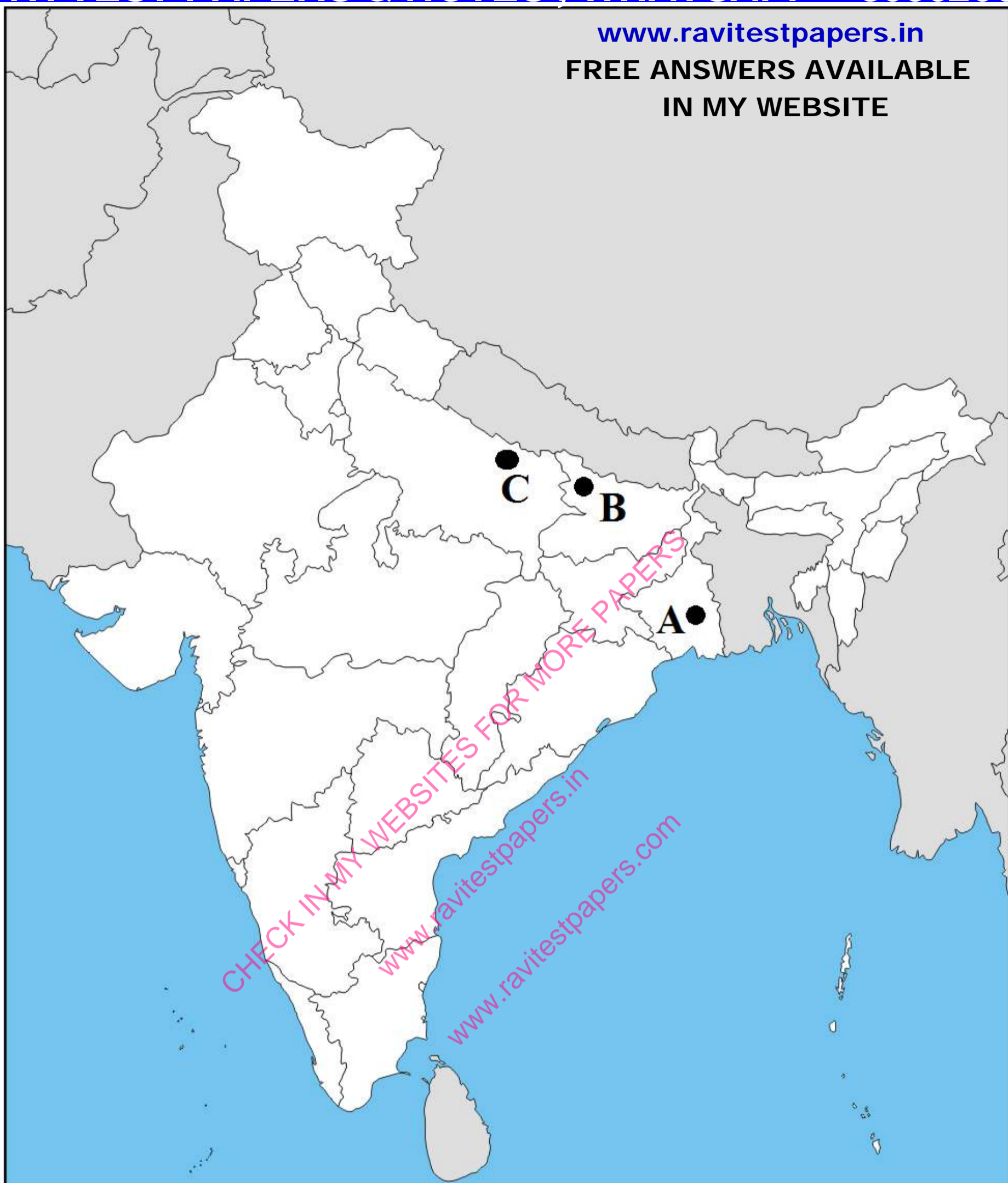
**Q75.** Five jute producing states are shown as 1, 2, 3, 4 and 5 on the given outline map of India. Identify these states and write their names on the lines marked in the map.

**5 Marks**

**Q76.** Three features A, B and C are marked on the given outline political map of India. Identify these features with the help of the following information and write their correct names.

**5 Marks**

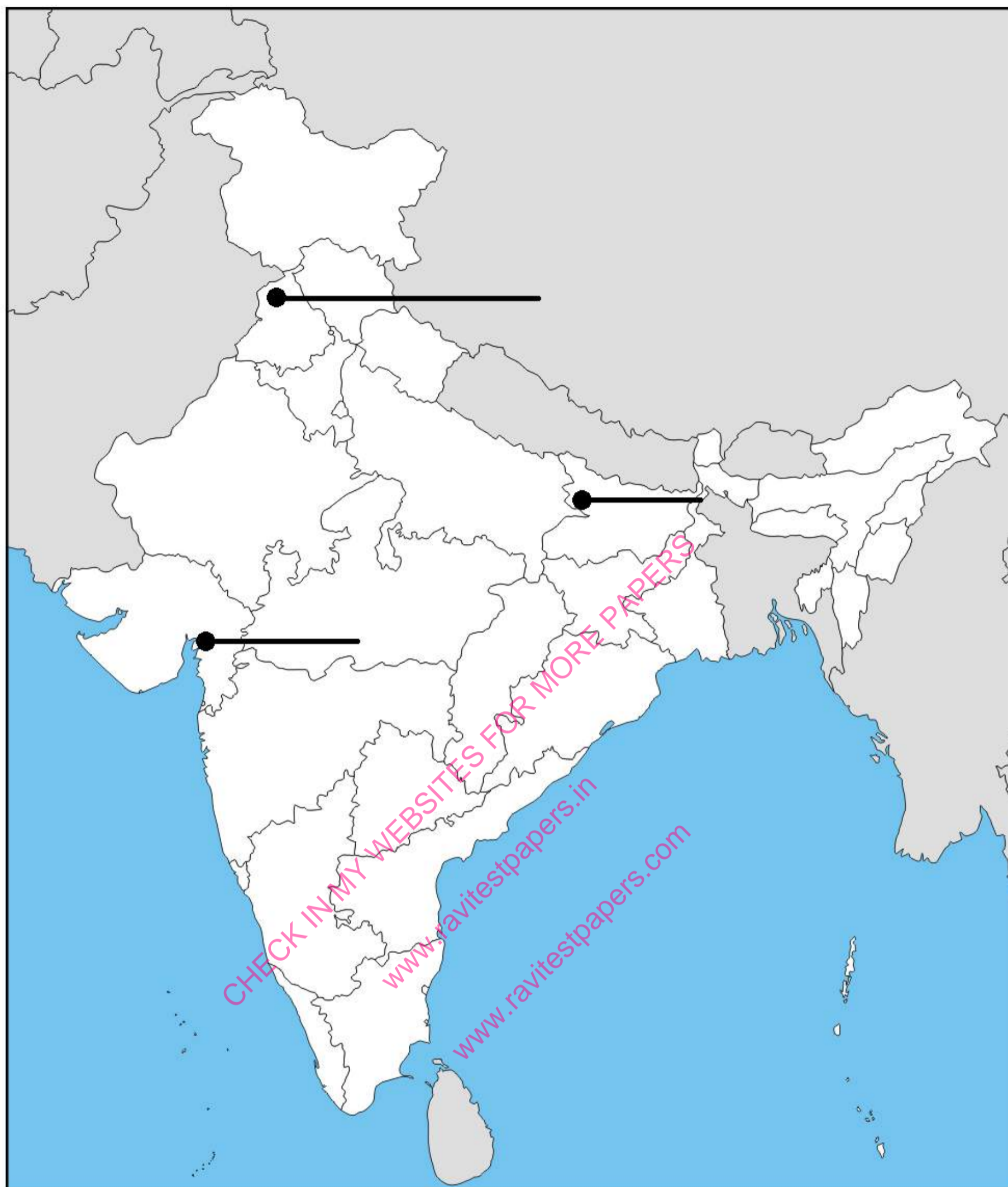
- (A) Place where Indian National Congress session was held in September 1920.
- (B) Place where Gandhiji organized a satyagraha in 1916.
- (C) Place where a police station was set on fire by enraged people.



**Q77.** Three features A, B and C are marked in the given outline political map of India. Identify these features with the help of the following information and write their correct names on the line marked in the map.

**5 Marks**

- (A) Peasant Satyagraha.
- (B) Movement of Indigo Planters.
- (C) Place where Jallianwala Tragedy took place.



Q78. Identify the major areas of rice and wheat marked on an outline map of India given below.

5 Marks

### JAN 2026 – MARCH 2027 TEST SERIES

JOIN MY PAID WHATSAPP GROUP - PDF FORMAT TEST WITH ANSWERS

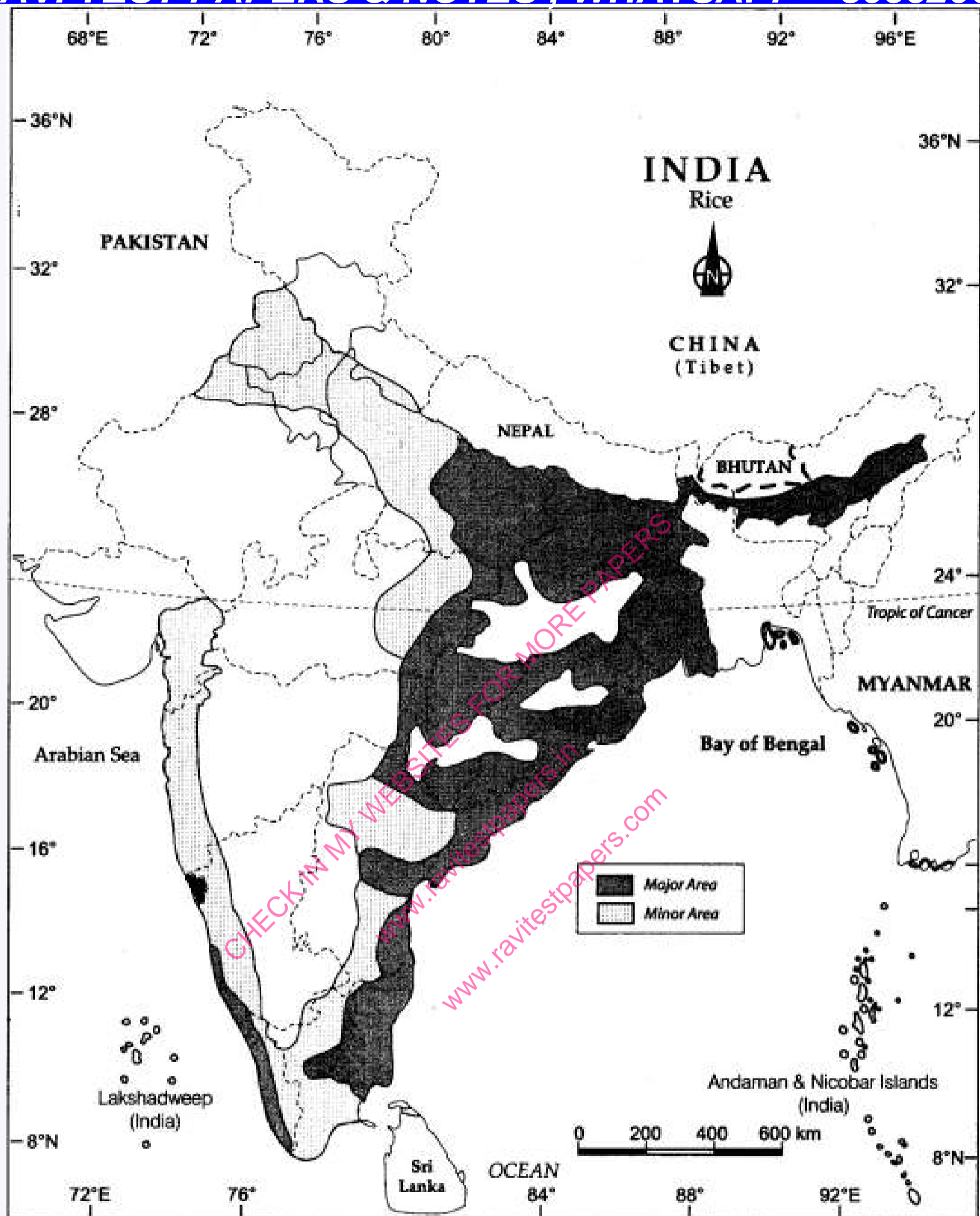
#### ONE TIME FEES

JAN 2026 – MARCH 2027	FEES	JUNE 2026 – MARCH 2027	FEES
CBSE 12TH	RS.4000	CBSE 12TH	RS.3000
CBSE 10TH	RS.4000	CBSE 10TH	RS.3000
NEET - TILL FINAL EXAM	RS.4500	NEET - TILL FINAL EXAM	RS.3500
JEE - TILL FINAL EXAM	RS.4500	JEE - TILL FINAL EXAM	RS.3500
TN 12TH	RS.3000	TN 12TH	RS.2000
TN 10TH	RS.3000	TN 10TH	RS.2000

CHAPTER WISE STUDY MATERIALS AVAILABLE FOR ALL CLASSES

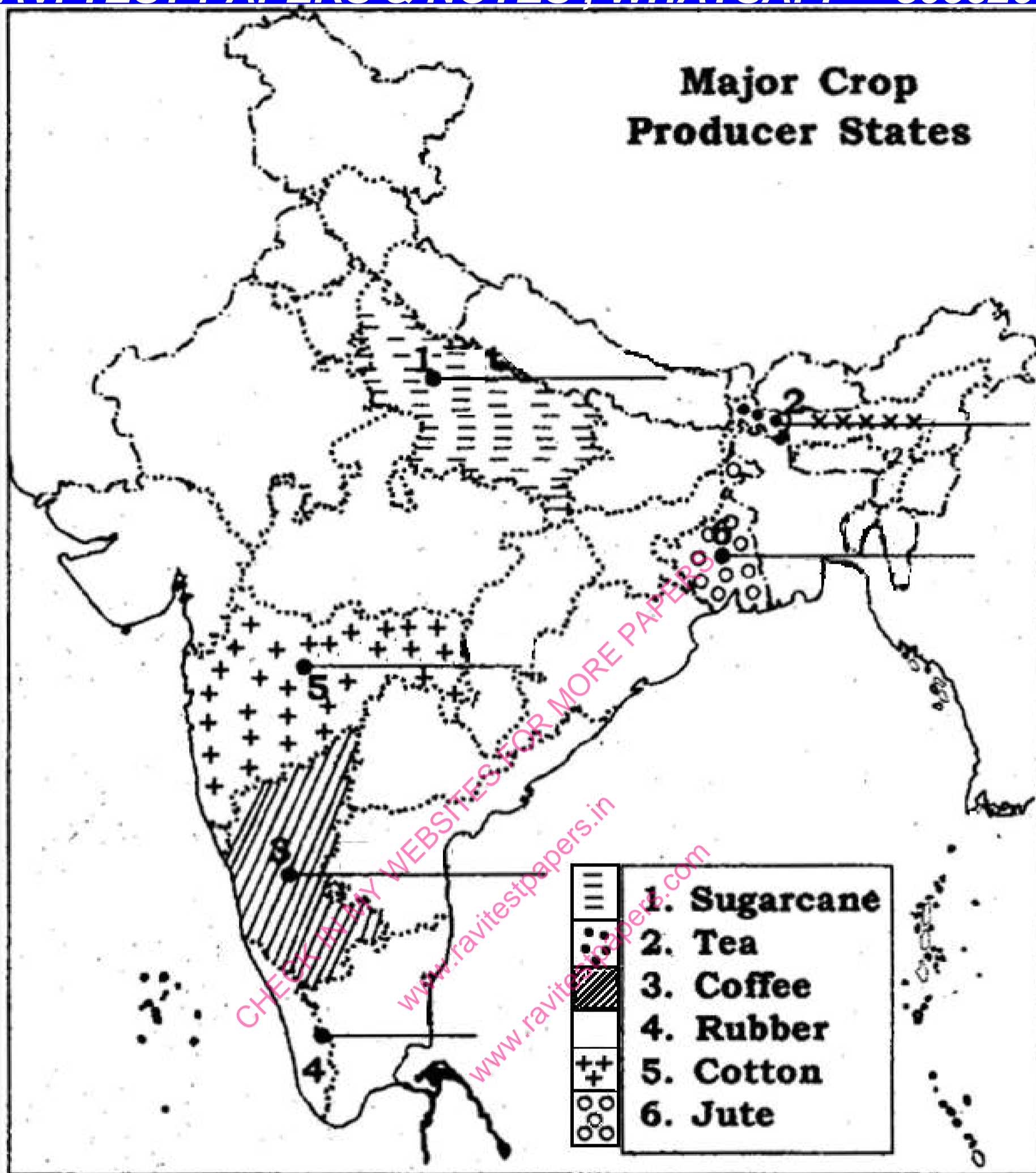
CHECK FREE TEST PAPERS [www.ravitestpapers.com](http://www.ravitestpapers.com) & [www.ravitestpapers.in](http://www.ravitestpapers.in)

RAVI TEST PAPERS & NOTES, WHATSAPP – 8056206308



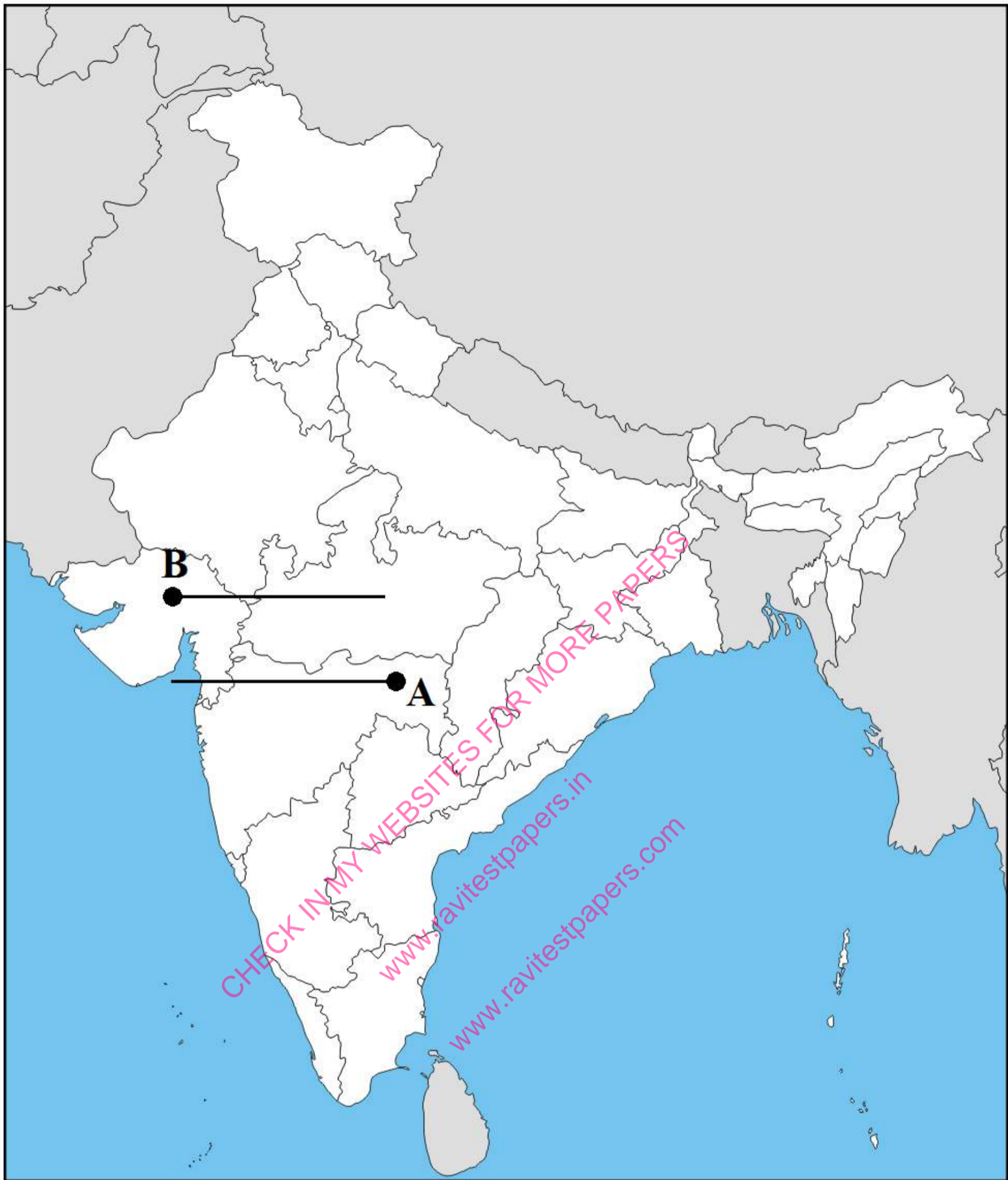
Q79. On an outline map of India given below, identify the largest/ major states of sugarcane, tea and coffee and write their names with the help of symbols marked in the map.

5 Marks



**Q80.** Two features A and B are marked on the given outline political map of India. Identify these features with the help of the following information provided and write their correct names on the line marked on the map. **5 Marks**

- (A) Place where the Indian National Congress Session was held in December 1920.  
 (B) The place where the cotton mill workers Satyagraha was organised in 1918.



**Q81.** Locate and label the following on the outline political map of India.

**5 Marks**

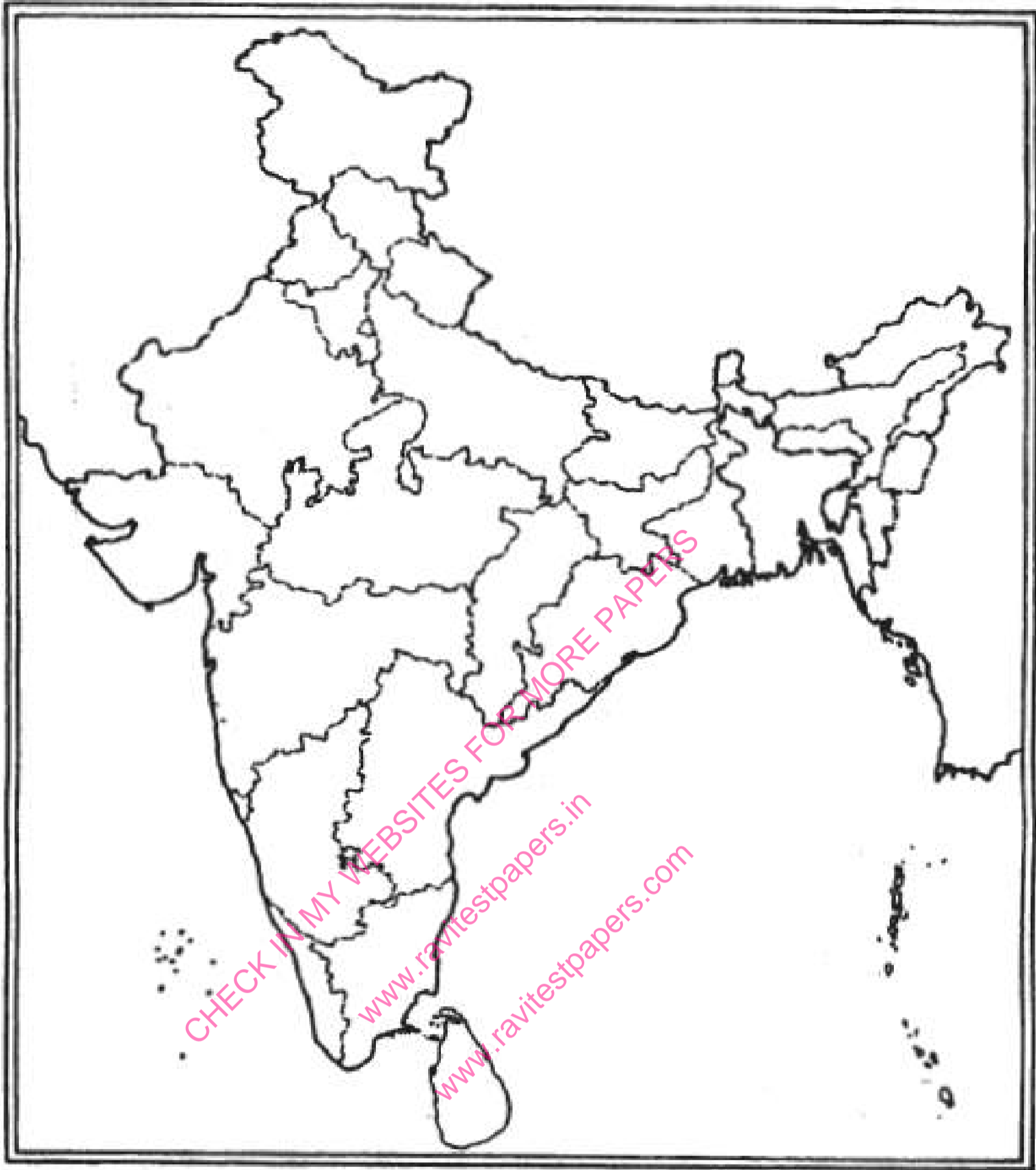
- (i) Ahmedabad- the cotton mill workers Satyagraha.
- (ii) Place where Gandhiji broke salt law.
- (iii) Place associated with the Indian National Congress Session of 1927.

**Q82.** Locate and label the following on the given political outline map of India:

**6 Marks**

1. Champaran.
2. Dandi.
3. Hirakud Dam.
4. Uran- Thermal Power Station.
5. Jaipur- Software Technology Park.

6. Vishakhapatnam- Sea-port.

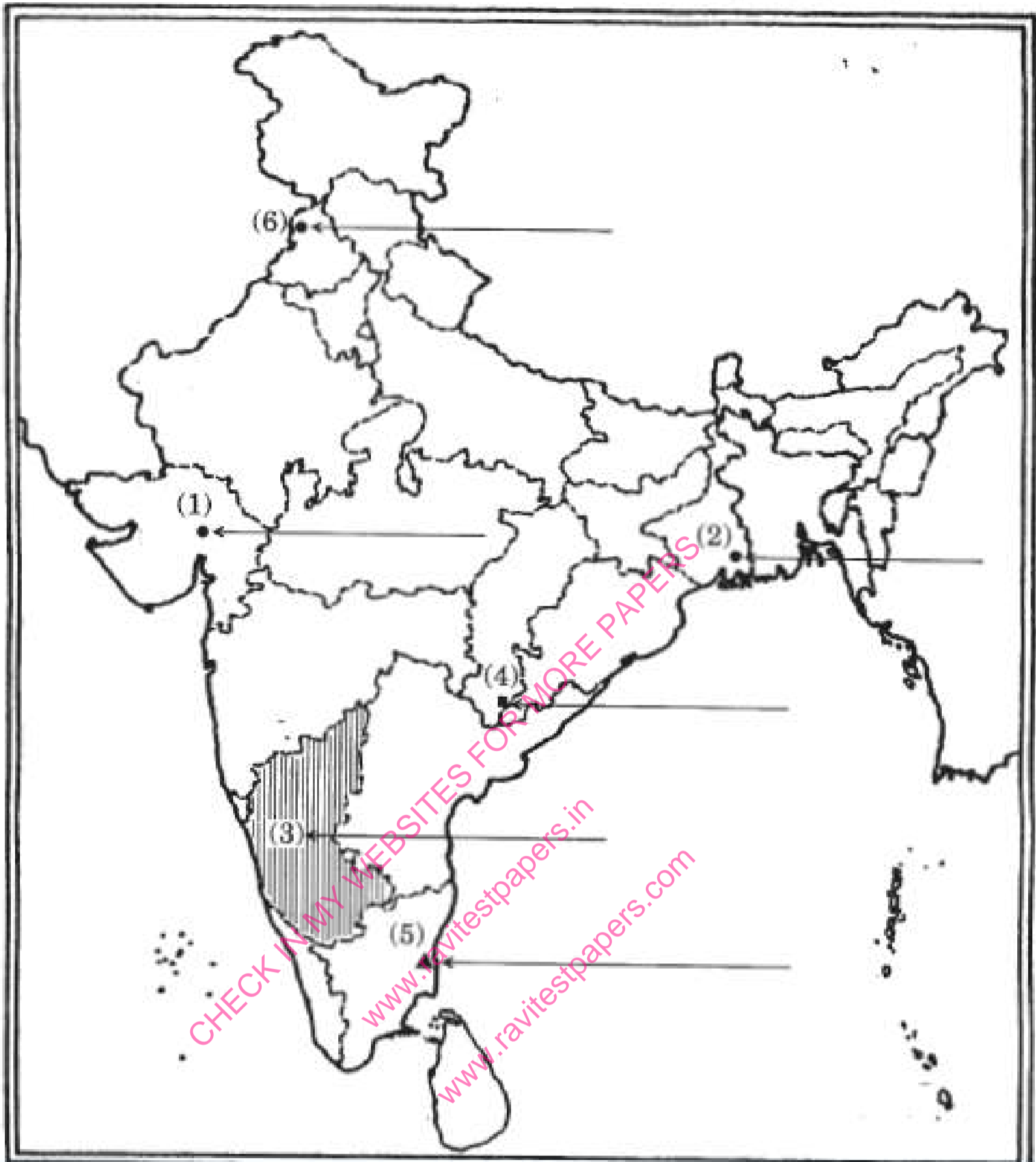


**Q83.** Six features with serial numbers (1) to (6) are marked in the given political outline map of India. Identify these features with the help of the following information and write their correct names on the lines marked in the map:

**6 Marks**

1. Centre of cotton textile mill workers' Satyagraha.
2. Place where Indian National Congress Session 1920 was held.
3. Coffee producing state.
4. Major iron-ore mine.
5. Important coal mine.

6. Terminal station of N.H. 1.

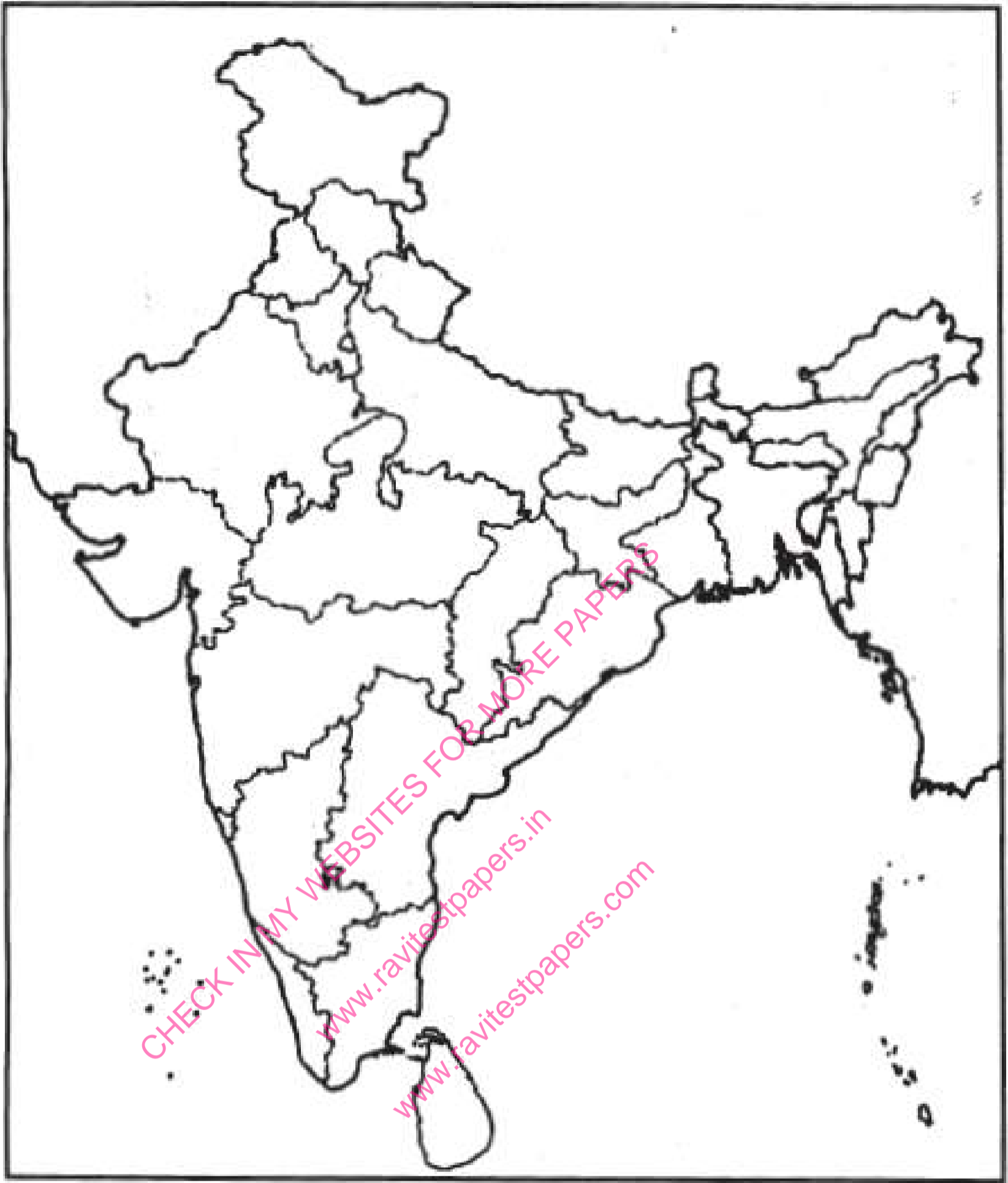


**Q84.** Locate and label the following on the given political outline map of India: -

**6 Marks**

1. Madras (Chennai).
2. Dandi.
3. Rihand - dam.
4. Kaiga - nuclear power plant.
5. Vishakhapatnam - iron and steel plant.

1. Srinagar - software technology park.

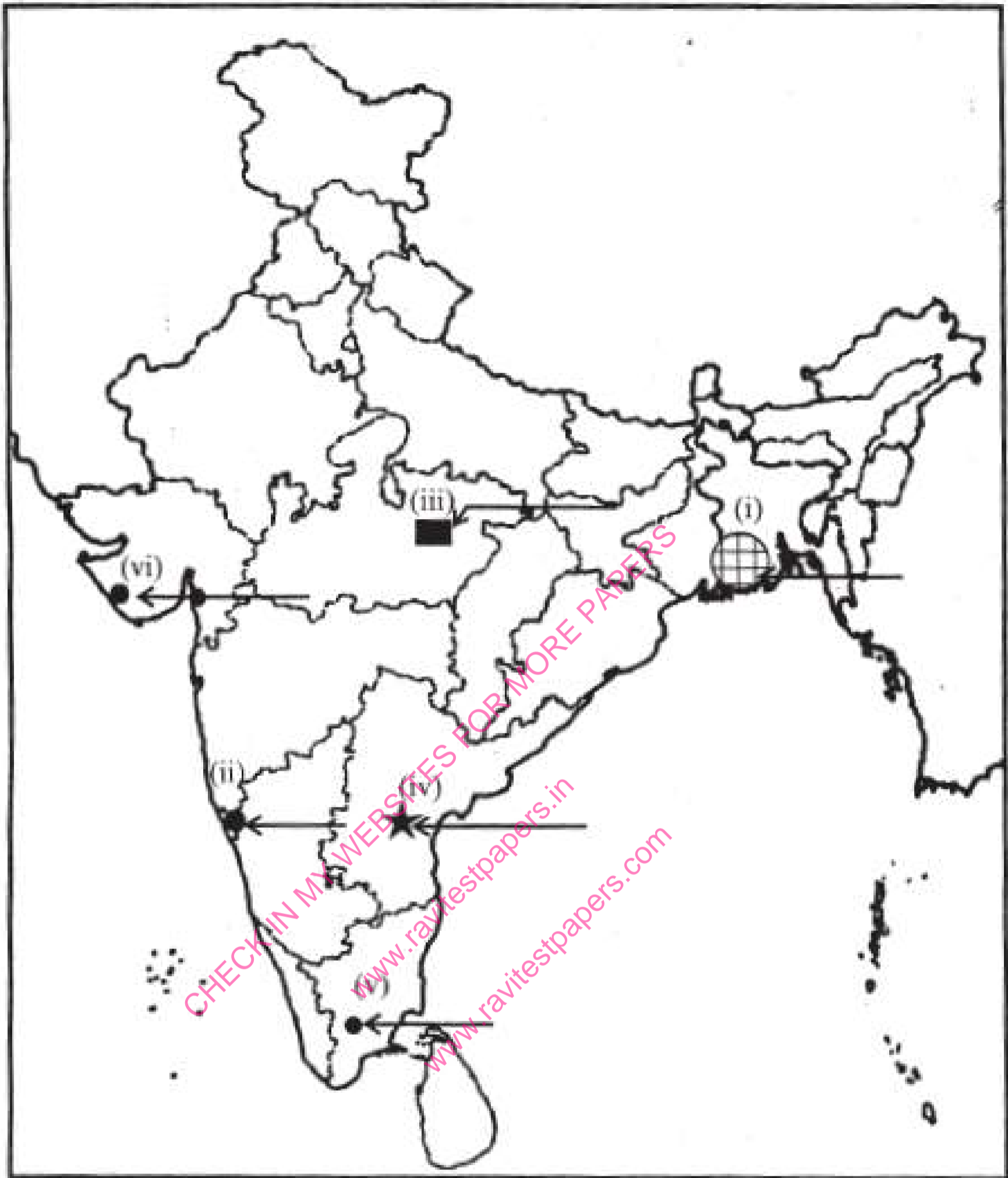


**Q85.** Six features with serial numbers (1) to (6) are marked in the given political outline map of India. Identify these features with the help of the following information and write their correct names on the lines marked in the map.

**6 Marks**

1. A region of large scale industries in 1931.
2. An important centre of overseas trade during 17th century.
3. A bauxite mine.
4. A mica mine.
5. A cotton textile centre.

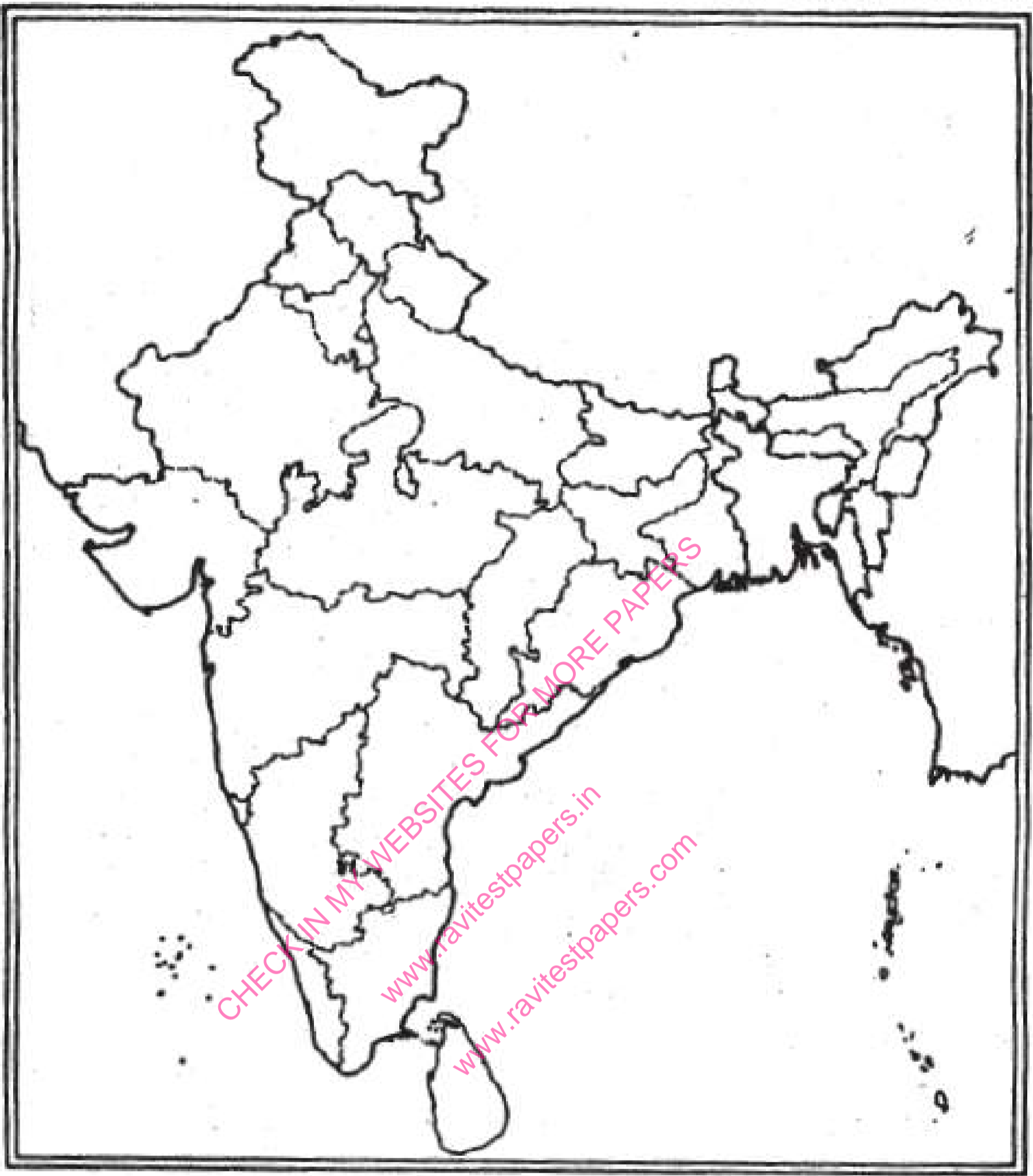
6. A terminal city of East - West Corridor.



**Q86.** Locate and label the following items with appropriate symbols on the given political outline map of India:-

**6 Marks**

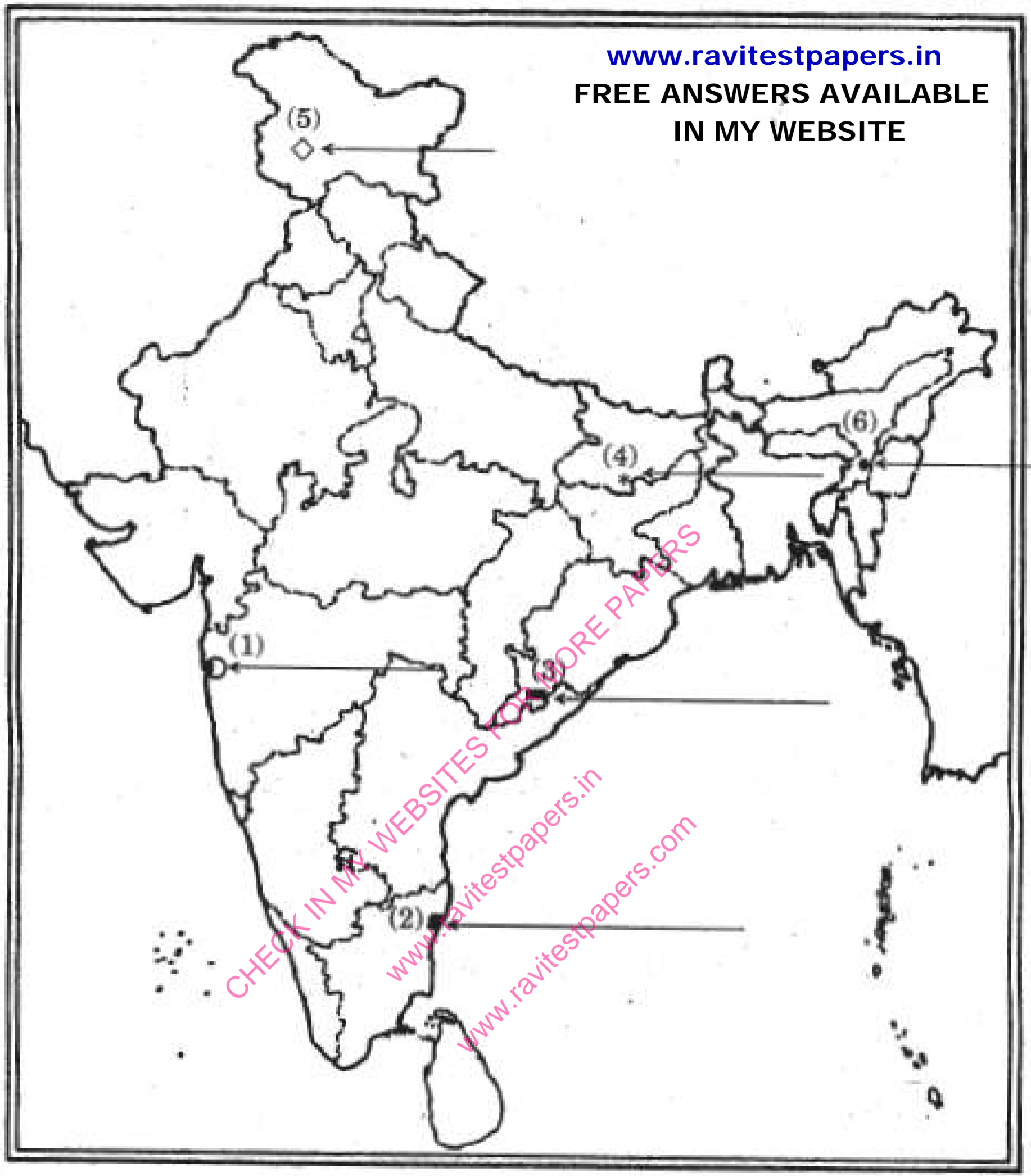
1. Chauri - Chaura.
2. Bardoli.
3. Koyna - Dam.
4. Rawat Bhata - Nuclear Power Plant.
5. Salem - Iron and Steel Plant.
6. Bhubaneshwar - Software Technology Park.



**Q87.** Six features with serial numbers (1) to (6) are marked in the given political outline map of India. Identify these features with the help of the following information and write their correct names on the lines marked in the map:-

**6 Marks**

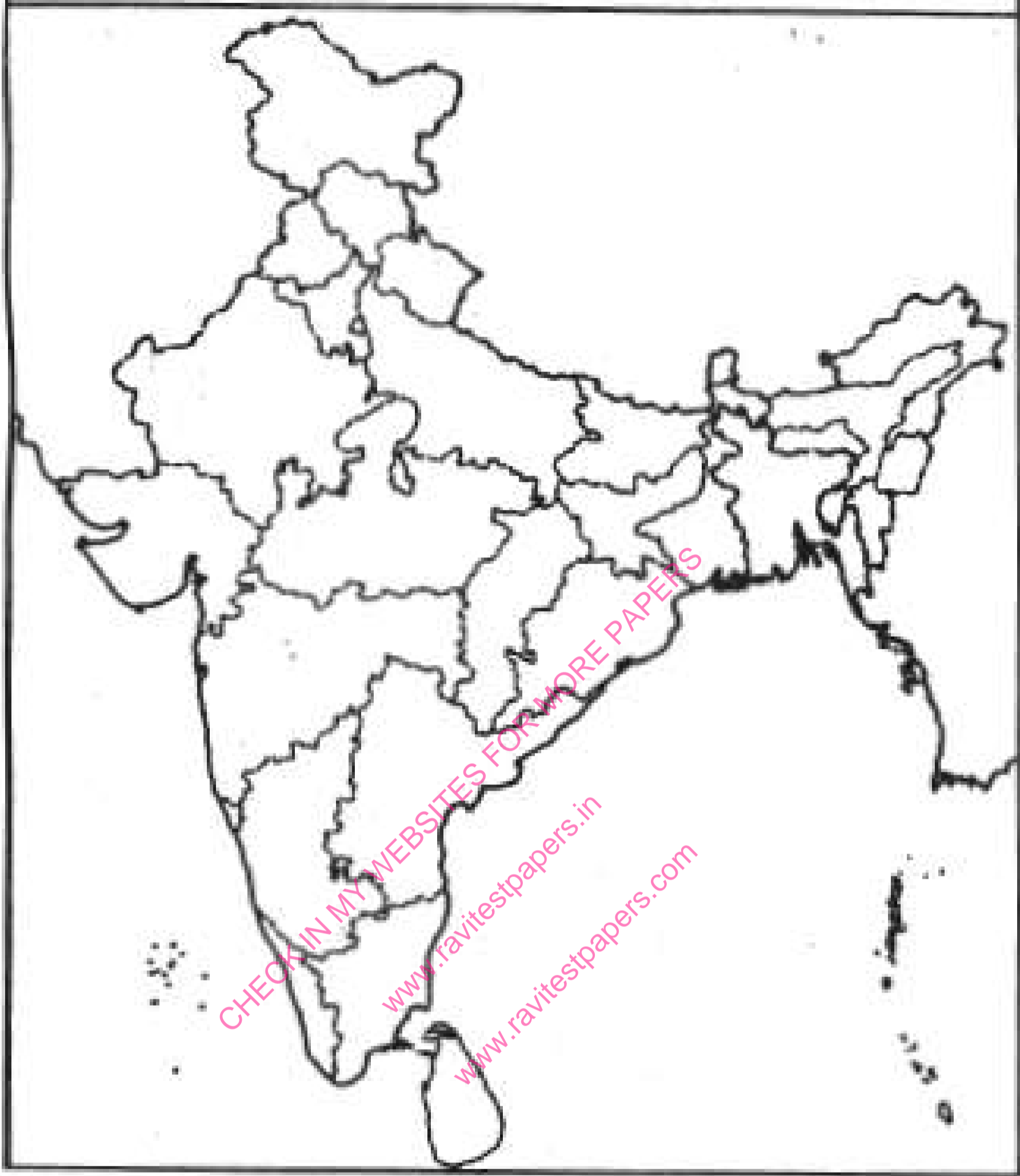
1. A region of large scale industries in 1931.
2. A centre of overseas trade during seventeenth century.
3. A Bauxite Mine.
4. A Mica Mine.
5. A Woollen Textile Centre.
6. Terminal station of East - West Corridor.



**Q88.** Locate and label the following on the given political outline map of India:

**6 Marks**

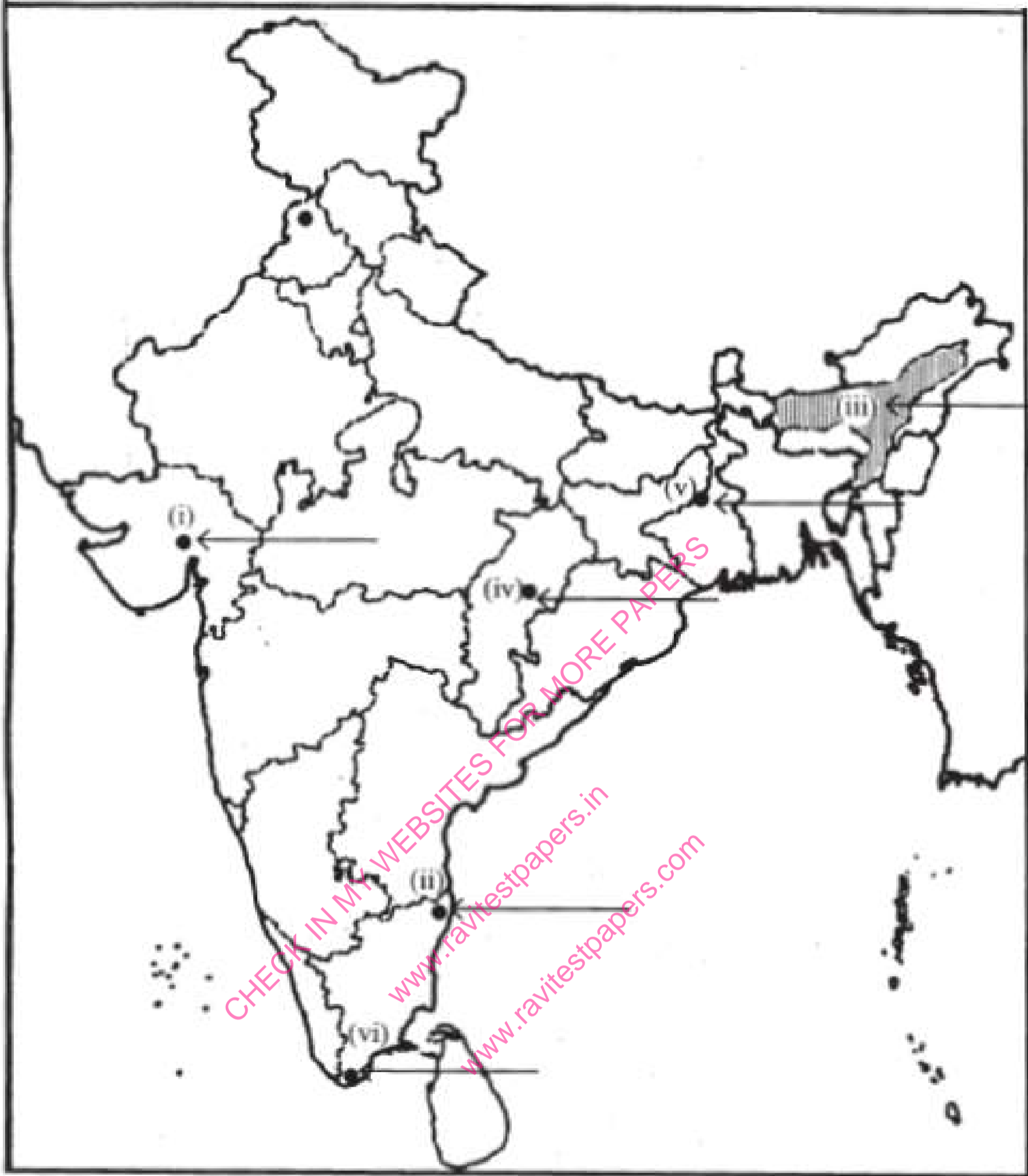
1. Chauri Chaura.
2. Amritsar.
3. Tungabhadra- Dam.
4. Talcher- Thermal Power Station.
5. Indore- Software Technology Park.
6. Kandla- Sea Port.



**Q89.** Six features with serial numbers (i) to (vi) are marked in the given political outline map of India. Identify these features with the help of the following information and write their correct names on the lines marked in the map.

**6 Marks**

1. The place of peasants Satyagraha in Gujarat.
2. The place where Indian National Congress Session was held in 1927.
3. Tea producing state.
4. The iron-ore mine.
5. The coal mine.
6. The terminal station of National Highway No.7.



**Q90.** Eight features are shown in the given political outline map of India. Identify these features with the help of the following information and write their correct names.

**6 Marks**

**Q91.** On the given political map of India locate and label the following with appropriate symbols.

**6 Marks**

A. Indore C

**Q92.** On an outline political map of India, show the major areas having concentration of iron and steel plants in India: Durgapur, Bhilai, Rourkela, Bokaro, Jamshedpur, Vijayanagar, Bhadravati, Vishakhapatnam and Salem.

**6 Marks**

**Q93.** Locate and label the following on an outline political map of India:

**6 Marks**

- Thermal power plants-Namrup, Talcher, Korba, Ramagundam, Vijayawada and Tuticorin.
- Nuclear power plants-Narora, Rawat Bhata, Tarapur, Kaiga and Kalpakkam.

**Q94.** Identify the following on an outline map of India and write their names on the lines marked in the map: Golden Quadrilateral, North-South Corridor, East-West Corridor.

**6 Marks**

**Q95.** Locate and label the following software technology parks on an outline map of India:

**6 Marks**

Mohali, Noida, Jaipur, Gandhinagar, Indore, Mumbai, Pune, Kolkata, Bhubaneswar, Vishakhapatnam, Hyderabad, Bengaluru, Mysuru, Chennai, Thiruvananthapuram.

**Q96.**

**6 Marks**

Five iron ore mines and five mica mines are shown on the given outline map of India with appropriate symbols. Identify them and write their names on the lines in the map.

**Q97.** Locate the label the following dams along with rivers on an outline map of India:

**6 Marks**

1. Salal.
2. Bhakra Nangal.
3. Tehri.
4. Rana Pratap Sagar.
5. Sardar Sarovar.
6. Hirakud.
7. Nagarjuna Sagar.
8. Tungabhadra.

**Q98.** On an outline map of India, locate and label the following power plants with appropriate symbols:

**6 Marks**

- Thermal: Namrup, Talcher, Singrauli, Harduaganj, Korba, Uran, Ramagundam, Vijayawada, Tuticorin.
- Nuclear: Narora, Rawat Bhata, Kakrapara, Tarapur, Kaiga, Kalpakkam

**Q99.** Locate and label the following industries on an outline map of India:

**6 Marks**

1. Cotton Textile Industries: Mumbai, Indore, Ahmedabad, Surat, Kanpur, Coimbatore, Madurai.
2. Iron and Steel Plants: Burnpur, Durgapur, Bokaro, Jamshedpur, Raurkela, Bhilai, Vijayanagar, Bhadravati, Vishakapatnam, Salem.

**Q100** Identify the important centres of the Indian National movement given below on an outline map of India:

**6 Marks**

1. The place associated with the movement of Indigo planters.
2. The place where Peasant Satyagraha took place.
3. The place where cotton mill workers organised Satyagraha.
4. The city related to Jallianwala Bagh Incident.
5. The place connected to the calling of the Non-Cooperation movement.
6. The place where Mahatma Gandhi violated salt law and started Civil Disobedience movement.

**Q101** On the given political map of India locate and label the following with appropriate symbols.

**6 Marks**

- A. Namrup Thermal Power plant
- B. Singrauli Thermal Power Plant
- C. Ramagundam Thermal Power Plant
- D. Naraura Nuclear Power Plant
- E. Tarapur Nuclear Power Plant
- F. Kalpakkam Nuclear Power Plant

**Q102** On the given political map of India locate and label the following with appropriate symbols.

**6 Marks**

- A. An Iron

**Q103** The following features (i), (ii), (iii), (iv), (v) are marked on the given political outline map of India. Identify these features with the help of the following information and write their correct names on the lines marked in the map.

**6 Marks**

1. The place where the Indian National Congress Session was held.
2. The place associated with peasant's Satyagraha.
3. The city associated with the Jallianwala Bagh incident.
4. The place where the Indian National Congress was held.
5. The place where peasants organised a Satyagraha.

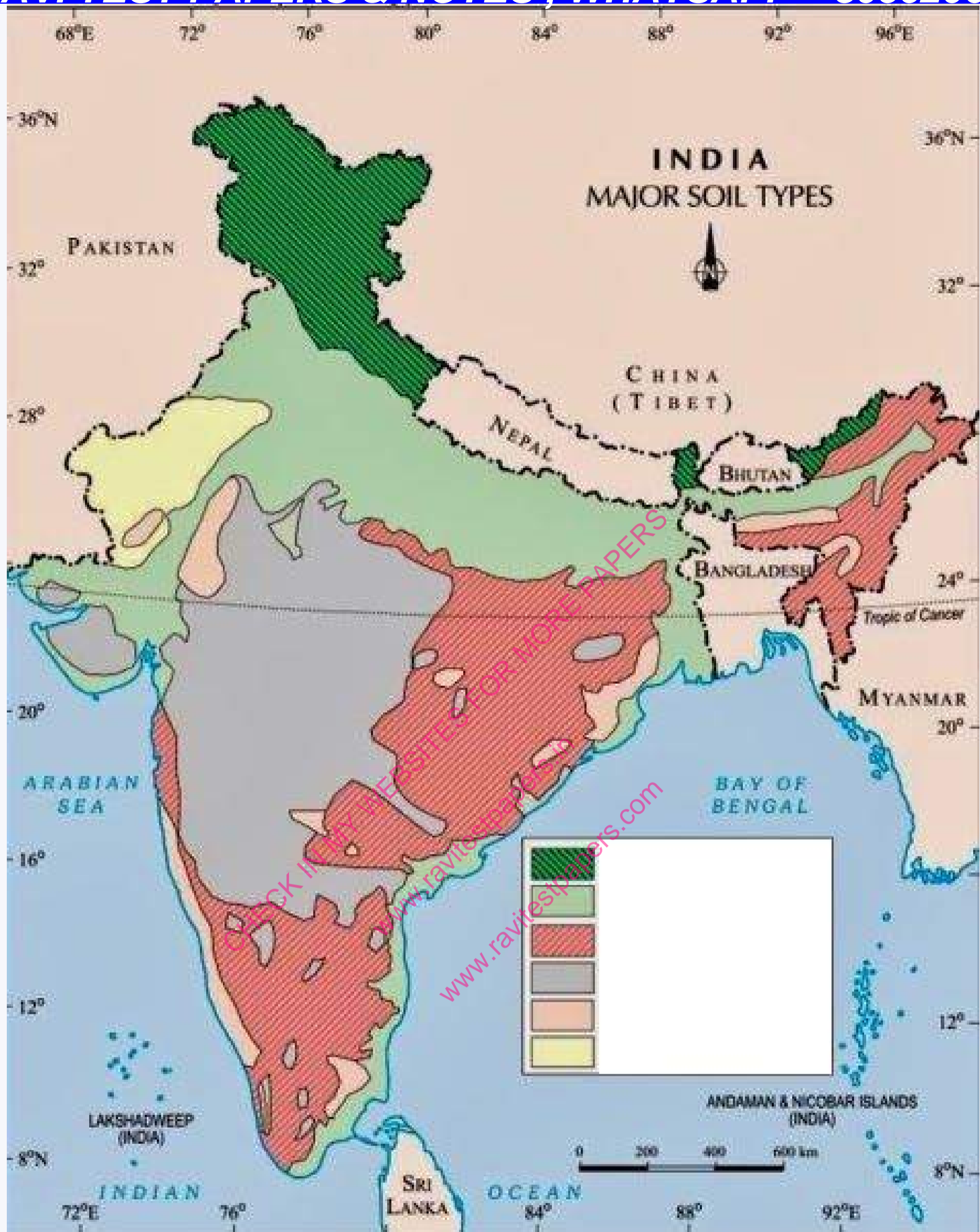
**Q104** Identify the major soil types shown in the given map of India and write their names on the lines marked in the map. **6 Marks**

<b>JAN 2026 – MARCH 2027 TEST SERIES</b>			
<b>JOIN MY PAID WHATSAPP GROUP - PDF FORMAT TEST WITH ANSWERS</b>			
<b>ONE TIME FEES</b>			
<i>JAN 2026 – MARCH 2027</i>	<b>FEES</b>	<i>JUNE 2026 – MARCH 2027</i>	<b>FEES</b>
CBSE 12TH	RS.4000	CBSE 12TH	RS.3000
CBSE 10TH	RS.4000	CBSE 10TH	RS.3000
NEET - TILL FINAL EXAM	RS.4500	NEET - TILL FINAL EXAM	RS.3500
JEE - TILL FINAL EXAM	RS.4500	JEE - TILL FINAL EXAM	RS.3500
TN 12TH	RS.3000	TN 12TH	RS.2000
TN 10TH	RS.3000	TN 10TH	RS.2000

**CHAPTER WISE STUDY MATERIALS AVAILABLE FOR ALL CLASSES**

CHECK FREE TEST PAPERS [www.ravitestpapers.com](http://www.ravitestpapers.com) & [www.ravitestpapers.in](http://www.ravitestpapers.in)

**RAVI TEST PAPERS & NOTES, WHATSAPP – 8056206308**



**Q105** On the political map of India locate and label the following with appropriate symbols.

6 Marks

1.

**Q106** On a political map of India locate and label the following with appropriate symbols.

6 Marks

A. A software Techn

**Q107** Locate and label the following on an outline map of India:

6 Marks

- Major Ports:** Kandla, Mumbai (Jawaharlal Nehru), Marmagao, New Mangalore, Kochchi, Tuticorin, Chennai, Vishakhapatnam, Paradip, Kolkata (Haldia).
- International Airports:** Amritsar (Raja Sansi), Delhi (Indira Gandhi International), Mumbai (Chhatrapati Shivaji), Thiruvananthapuram (Nedimbacherry), Chennai (Meenam Bakkam), Kolkata (Netaji Subhash Chandra Bose), Hyderabad (Rajiv Gandhi).

**Q108.**

6 Marks

Three features (i), (ii) and (iii) are marked on the given political outline map of India. Identify these features with the help of the following information and write their correct names on the lines marked on the map:

1. A place where session of the Indian National Congress was held in 1929.
2. Bardoli, the place, from where 'No tax' campaign was started.
3. A place in Gujarat where Gandhiji violated the Salt law.

**Q109** Locate and label the following places with appropriate symbols on a political outline map of India.

**6 Marks**

1. Balaghat-Manganese.
2. Kendujhar-Manganese.
3. Koraput-Bauxite.
4. Bilaspur-Bauxite.
5. Hazaribagh-Mica.
6. Mangaluru-Iron ore exporting port.

**Q110** On an outline political map of India, locate and label the following:

**6 Marks**

1. **Cotton Textile Industries:** Mumbai, Indore, Ahmedabad, Surat, Kanpur.
2. **Woollen Industries:** Srinagar, Amritsar, Ludhiana, Mirzapur.
3. **Silk Industries:** Srinagar, Murshidabad, Mysore (Mysuru).

**Q111** On an outline map of India, locate and label the following cities where Indian National Congress sessions were held: **6 Marks**

1. Calcutta (September 1920).
2. Nagpur (December 1920).
3. Madras (1927).
4. Lahore (1929).

**Q112** On the given political outline map of India, two features A and B are marked.

**6 Marks**

**Identify these features with the help of the following information:**

1. An iron ore mine.
2. A coal mine.

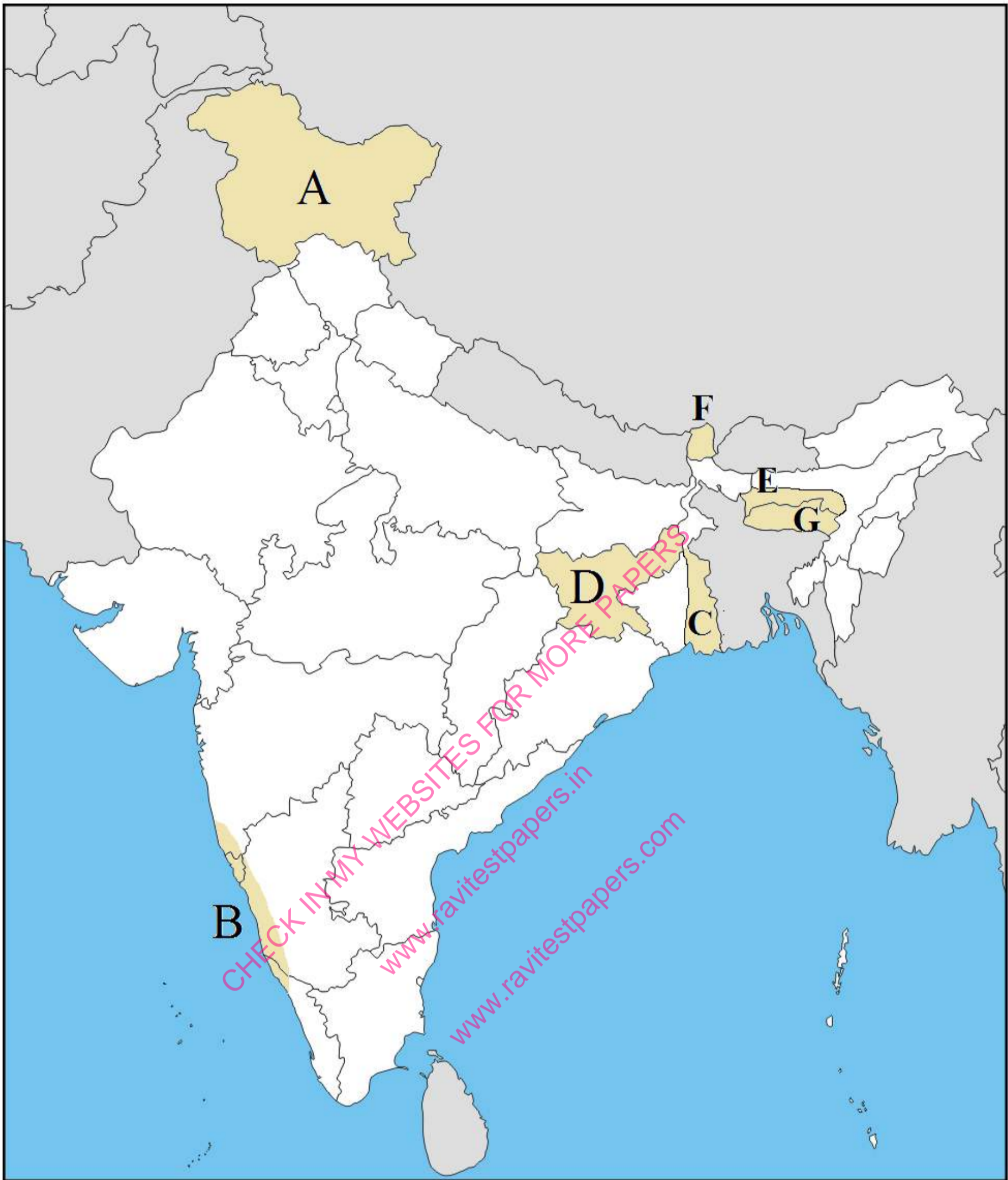
**On the same map locate and label the following:**

1. Kalol oil field.

**Q113** One item is shown in the given political outline map of India. Identify this item with the help of the following information and write its correct name.

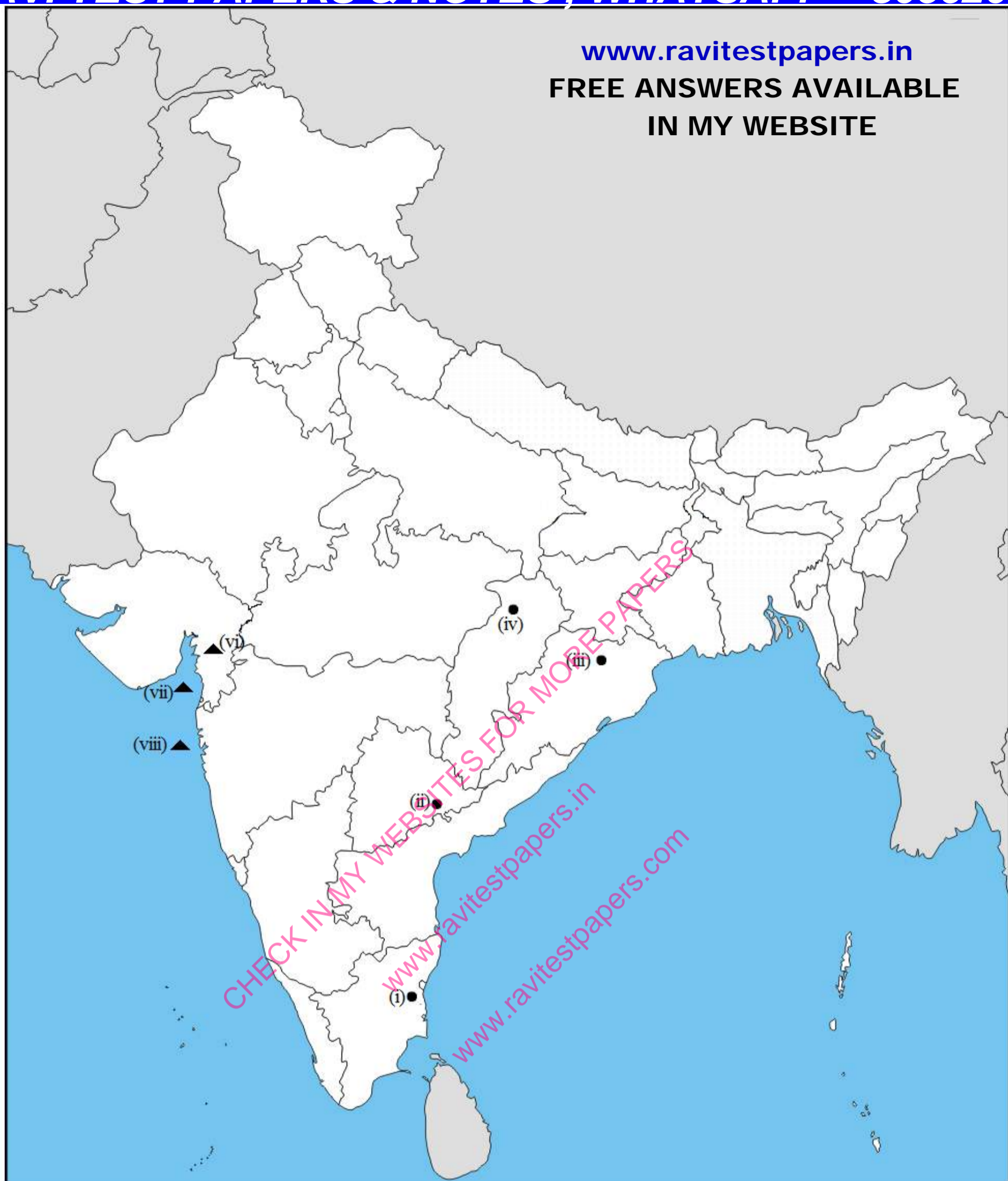
**6 Marks**

(A) Type of soil (B) Type of soil (C) Type of soil (D) Type of soil (E) Type of soil (F) Type of soil (G) Type of soil



**Q114** Identify the following places marked in the given outline political map of India with the help of references.

**6 Marks**



[www.ravitestpapers.in](http://www.ravitestpapers.in)  
**FREE ANSWERS AVAILABLE  
 IN MY WEBSITE**

**Q115** On the political map of India locate and label the following with appropriate symbols.

**6 Marks**

1.

**Q116** The following features (i), (ii) and (iii) are marked on the given political outline map of India. Identify these features with the help of the following information and write their correct names on the lines marked in the map.

**6 Marks**

1. The place where cotton mill workers organised Satyagraha.
2. The place related to the calling off the Non-Cooperation Movement.
3. The place where the Indian National Congress Session was held.

**Q117** Three features (i), (ii) and (iii) are marked on the given political outline map of India. Identify these features with the help of the following information and write their correct names on the lines marked on the map:

**6 Marks**

1. The place where the Indian National Congress Session was held in 1920.
2. A place in Punjab where the Jallianwala Bagh incident took place.
3. The place where the peasants struggled against the indigo plantation system.

**OR**

A place in Bihar where Satyagraha Movement of Indigo planters took place.

**Q118.**

**6 Marks**

Identify some bauxite deposits and mica deposits on an outline map of India. Write their names in the lines marked on the map.

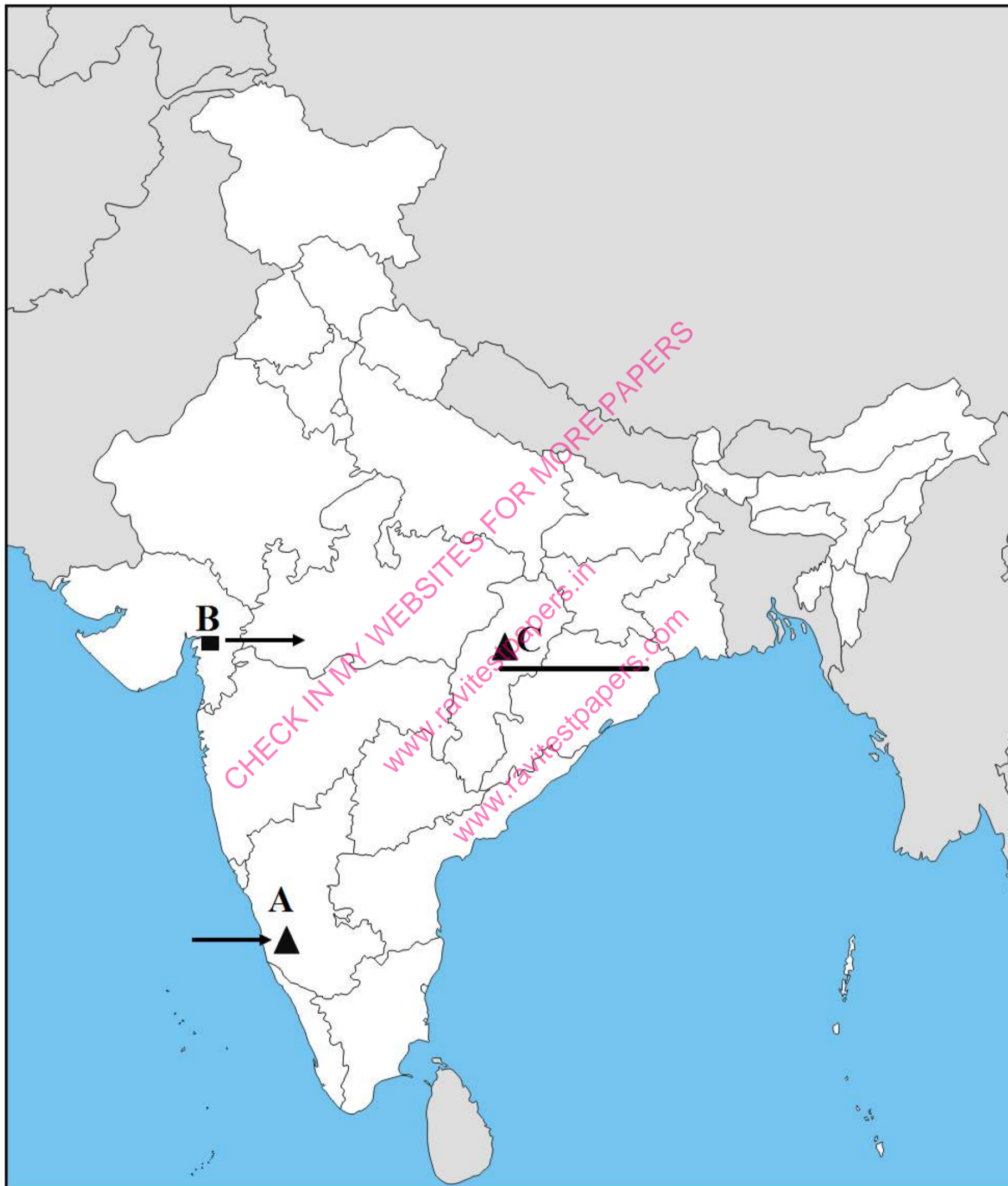
**Q119** Three features A, B and C are marked on the given political outline map of India. Identify them with the help of following information and write their correct names.

**6 Marks**

A. Iron ore mine

B. Oil Field

C. Coal mine.



**Q120** On an outline political map of India, show the major Super Highways.

**6 Marks**

**Q121** Some coal mines and oil fields are shown on the given outline map of India with appropriate symbols. Identify them and write their names on the lines marked in the map.

**6 Marks**

**Q122** On the given political map of India, locate and label the following:

**6 Marks**

1. Place where violence erupted during Non-Cooperation Movement leading to its withdrawal.
2. Place from where Mahatma Gandhi started the Dandi March in 1930.
3. Place where Indian National Congress held its session in December 1929.

**Q123.**

**6 Marks**

Identify the national highways shown on an outline map of India and write their names on the lines marked in the map.

**JAN 2026 – MARCH 2027 TEST SERIES****JOIN MY PAID WHATSAPP GROUP - PDF FORMAT TEST WITH ANSWERS****ONE TIME FEES**

<b>JAN 2026 – MARCH 2027</b>	<b>FEES</b>	<b>JUNE 2026 – MARCH 2027</b>	<b>FEES</b>
<b>CBSE 12TH</b>	<b>RS.4000</b>	<b>CBSE 12TH</b>	<b>RS.3000</b>
<b>CBSE 10TH</b>	<b>RS.4000</b>	<b>CBSE 10TH</b>	<b>RS.3000</b>
<b>NEET - TILL FINAL EXAM</b>	<b>RS.4500</b>	<b>NEET - TILL FINAL EXAM</b>	<b>RS.3500</b>
<b>JEE - TILL FINAL EXAM</b>	<b>RS.4500</b>	<b>JEE - TILL FINAL EXAM</b>	<b>RS.3500</b>
<b>TN 12TH</b>	<b>RS.3000</b>	<b>TN 12TH</b>	<b>RS.2000</b>
<b>TN 10TH</b>	<b>RS.3000</b>	<b>TN 10TH</b>	<b>RS.2000</b>

**CHAPTER WISE STUDY MATERIALS AVAILABLE FOR ALL CLASSES**CHECK FREE TEST PAPERS [www.ravitestpapers.com](http://www.ravitestpapers.com) & [www.ravitestpapers.in](http://www.ravitestpapers.in)**RAVI TEST PAPERS & NOTES, WHATSAPP – 8056206308**

CHECK IN MY WEBSITES FOR MORE PAPERS  
[www.ravitestpapers.in](http://www.ravitestpapers.in)  
[www.ravitestpapers.com](http://www.ravitestpapers.com)