

Revision - 3

1) The perimeter of the given shapes.


i)



ii)



iii)



2) The perimeter of rectangle is 140 cm. The length of a the rectangle is 57 cm. What is the breadth of the rectangle?

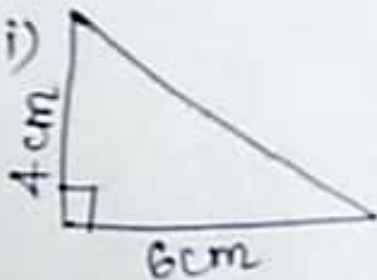
3) Find the circumference of the following?

i) $r = 2.5 \text{ cm}$

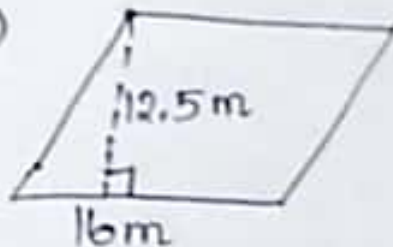
ii) $d = 4.8 \text{ m}$

4) Find the area of the following:

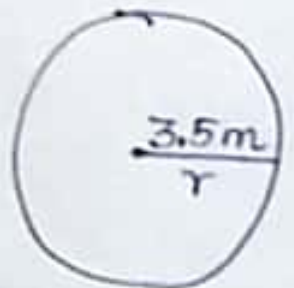
i)



ii)

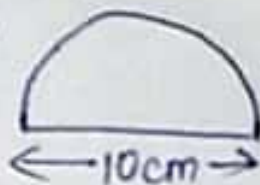


iii)



5) Find the perimeter of the given shapes.

(i)



(ii)

