

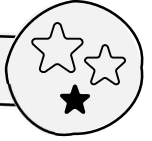


Name

Datum

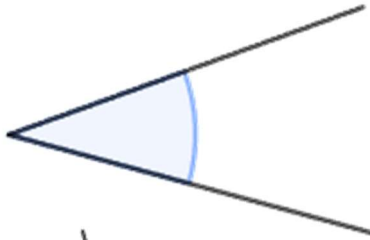
# Winkel

## Winkel messen

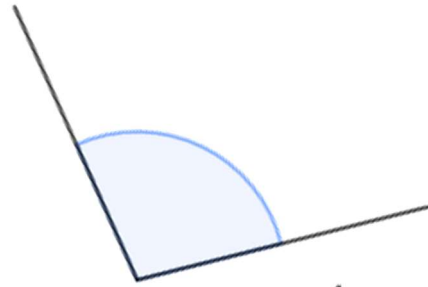


**Gib** die Größe des Winkels **an**! Ordne jedem Winkel die Winkelart zu!

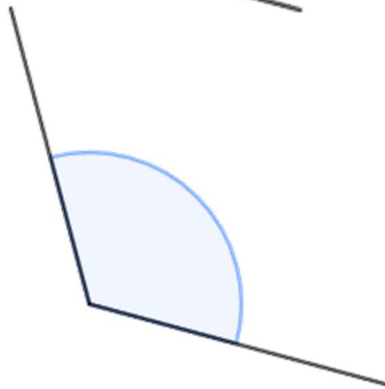
a)



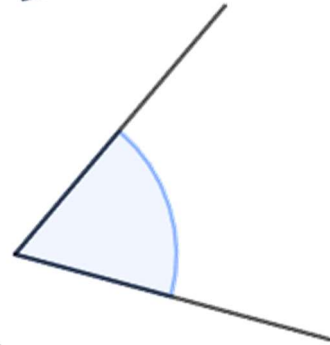
b)



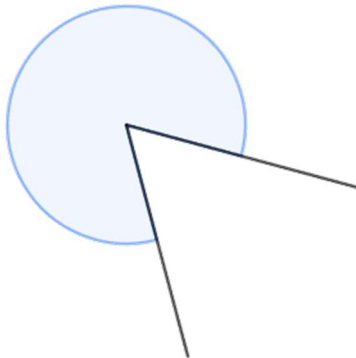
c)



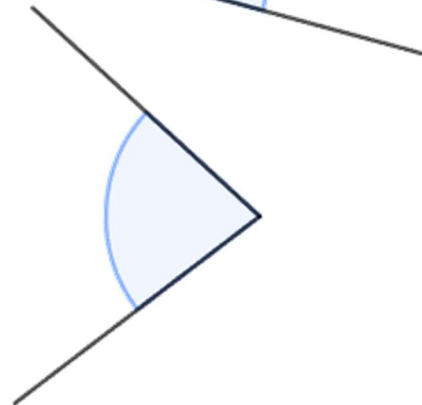
d)




e)



f)



## Winkel zeichnen



**Zeichne** die Winkel in deinen Hefter!

a)  $25^\circ$ b)  $165^\circ$ c)  $155^\circ$ d)  $70^\circ$ e)  $33^\circ$ f)  $122^\circ$ g)  $190^\circ$ h)  $210^\circ$