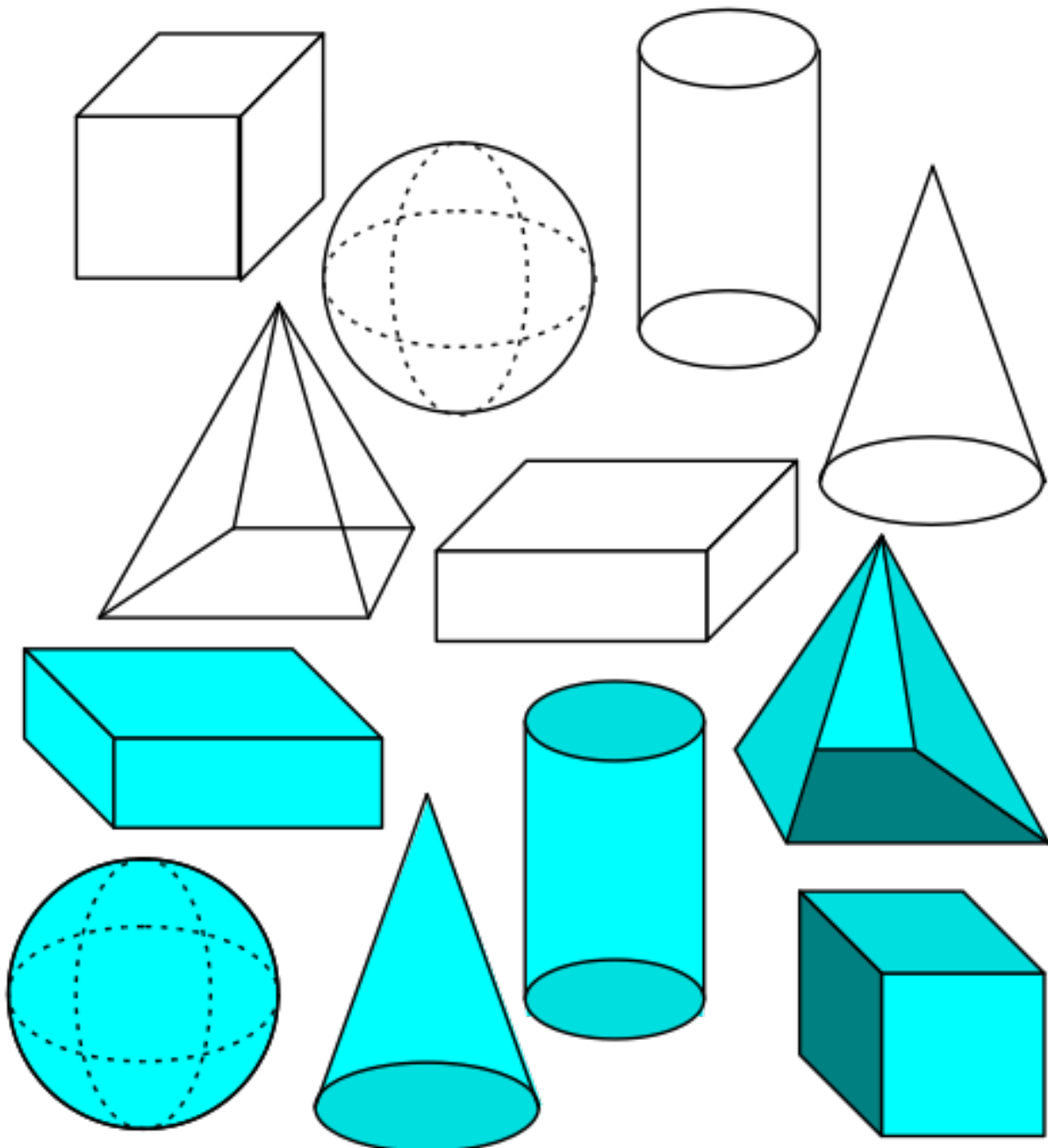




Thema: Geometrische Körper

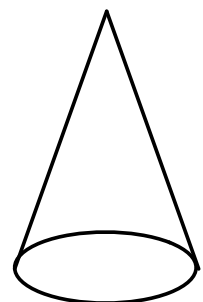
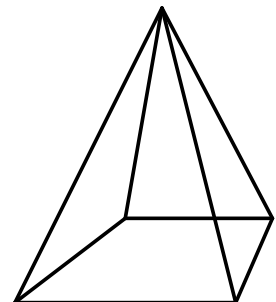
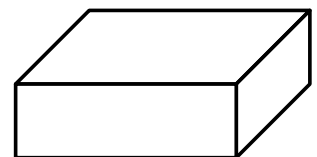
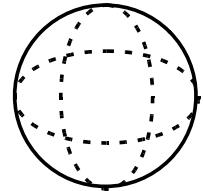
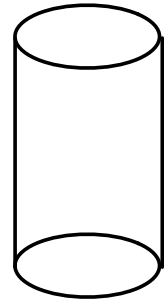
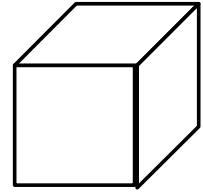
F a c h: Mathematik / Geometrie

Klasse: 2 bis 4



Welche geometrische Form steckt in diesen Gegenständen?

Glasmurmel	
Lesebuch	
Eiswaffel	
Ziegelstein	
Wasserball	
Kirchturmdach	
Spielwürfel	
Lolly	
Nudelholz	
Schuhkarton	
Rolle Toilettenpapier	
Globus	
Streichholzschachtel	
Dose Ananas	
Schultüte	
Walze	
Tapetenrolle	

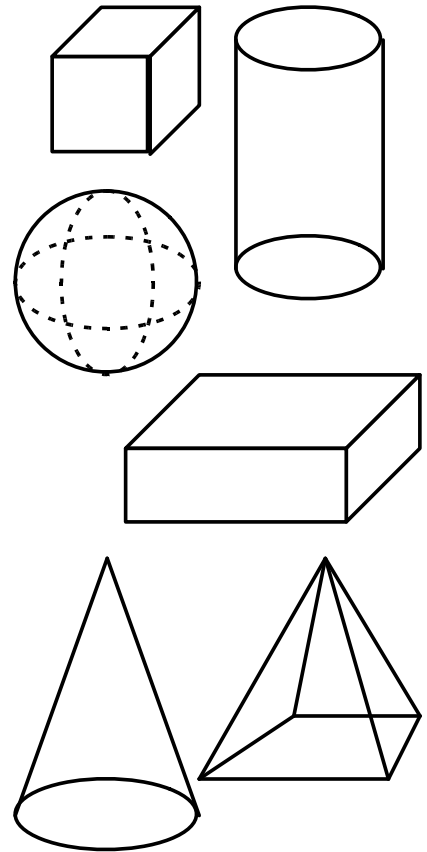


(Kegel Kugel Pyramide Quader Würfel Zylinder)

Welche geometrische Form steckt in diesen Gegenständen?

Glasmurmel	
Lesebuch	
Eiswaffel	
Ziegelstein	
Wasserball	
Kirchturmdach	
Spielwürfel	
Lolly	
Nudelholz	
Schuhkarton	
Rolle Toilettenpapier	
Globus	
Streichholzschachtel	
Dose Ananas	
Schultüte	
Walze	
Tapetenrolle	

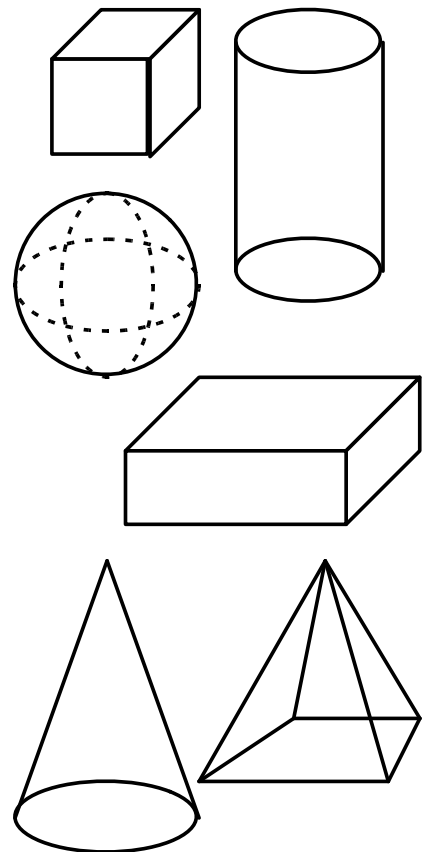
(Kegel Kugel Pyramide Quader Würfel Zylinder)



Welche geometrische Form steckt in diesen Gegenständen?

Glasmurmel	
Lesebuch	
Eiswaffel	
Ziegelstein	
Wasserball	
Kirchturmdach	
Spielwürfel	
Lolly	
Nudelholz	
Schuhkarton	
Rolle Toilettenpapier	
Globus	
Streichholzschachtel	
Dose Ananas	
Schultüte	
Walze	
Tapetenrolle	





(Kegel Kugel Pyramide Quader Würfel Zylinder)



Geometrische Körper

Name	Flächen	Kanten	Ecken
Würfel			
Quader			
Kegel			
Pyramide			
Zylinder			
Kugel			

An welchen Körpern kommen diese Flächen vor?

Welche Körper gehen durch diese Öffnungen hindurch?

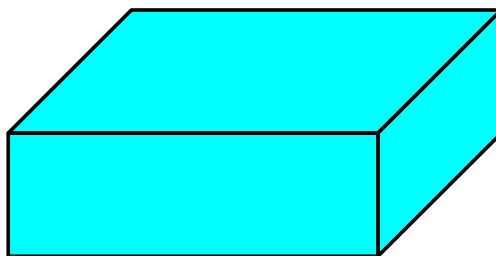
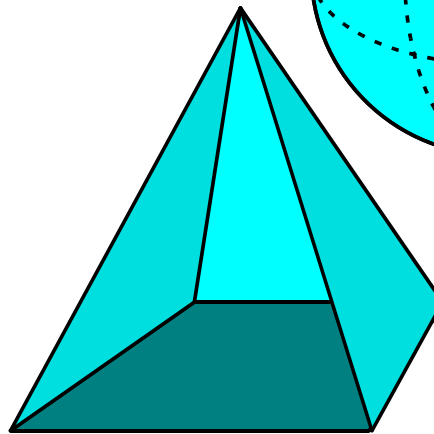
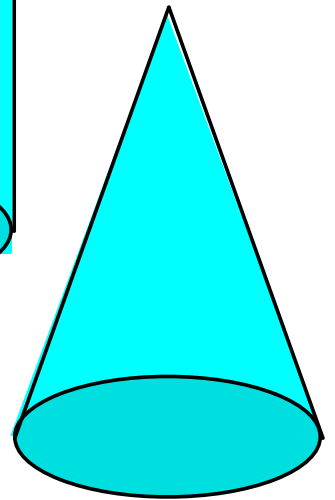

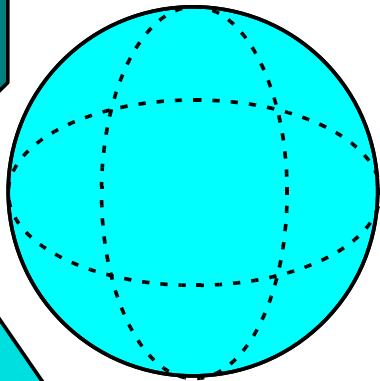
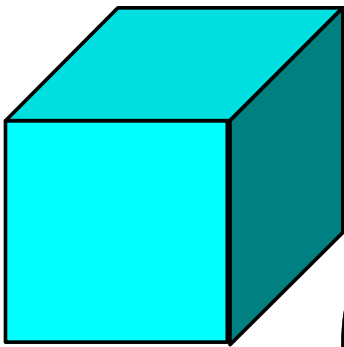
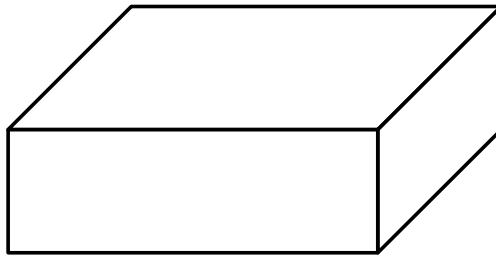
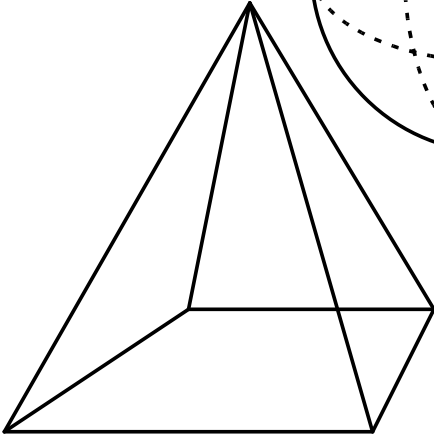
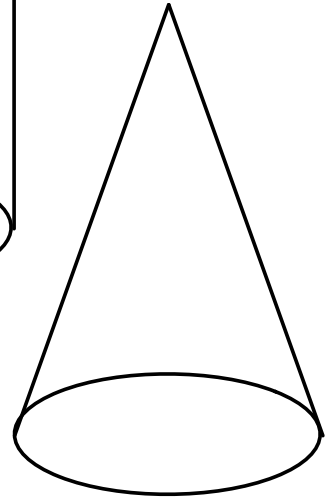

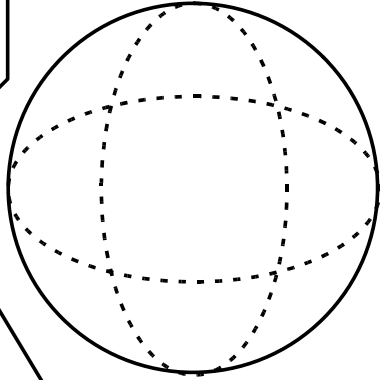
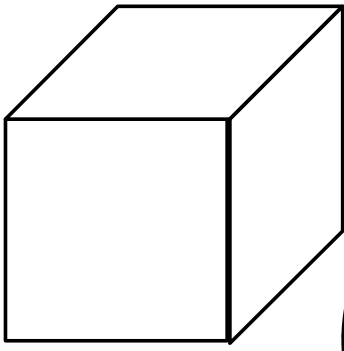


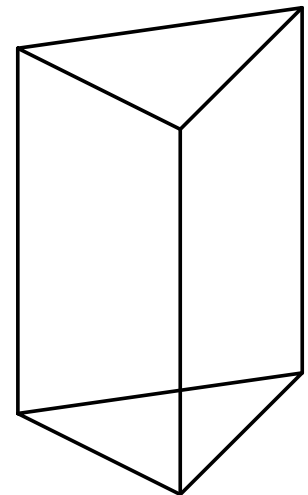
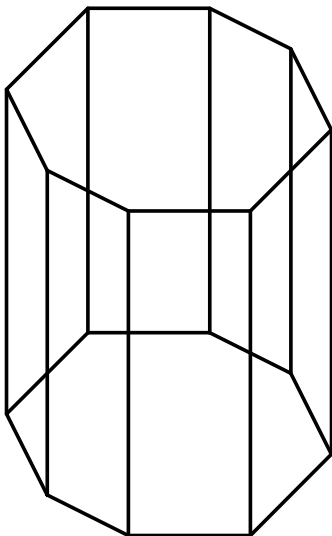
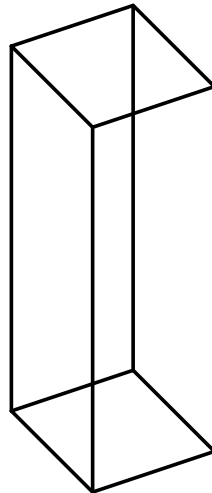
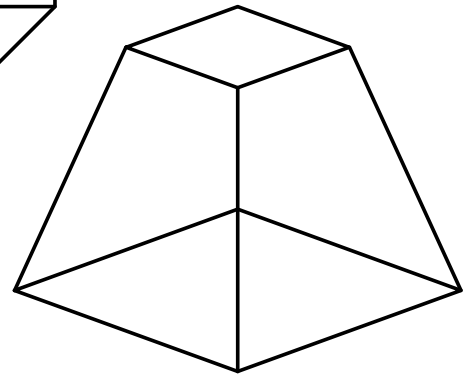
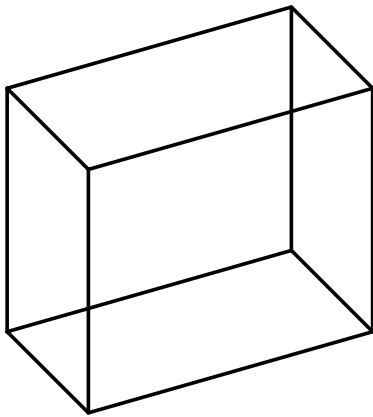
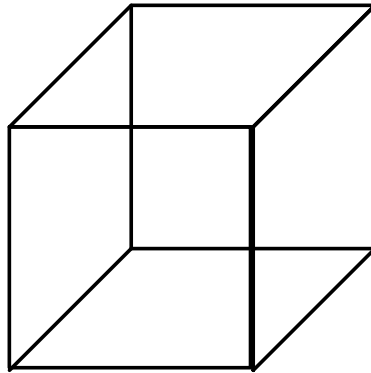
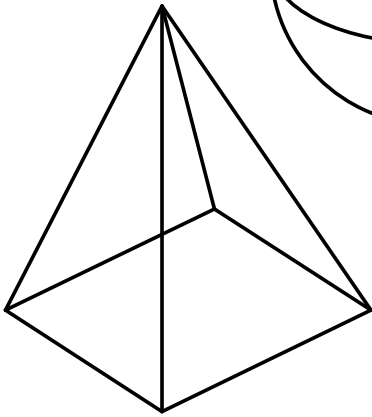
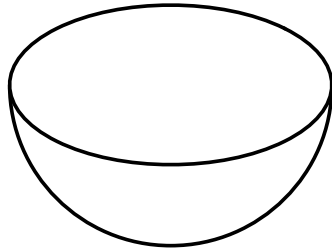
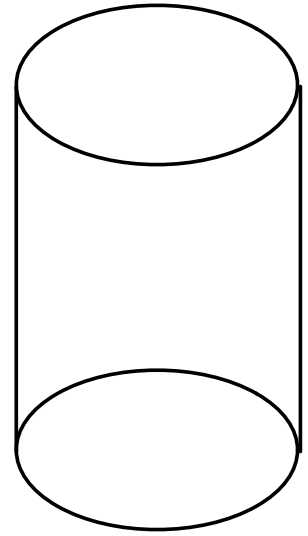
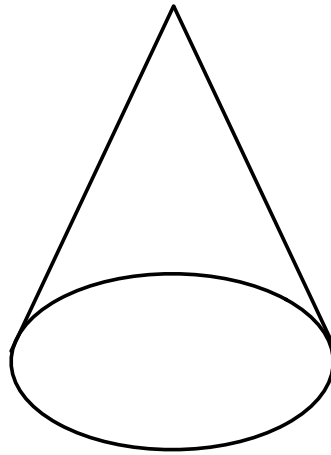
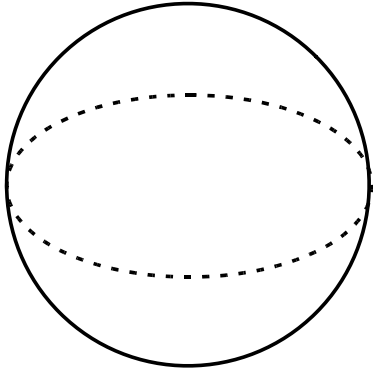
_____	_____	_____	_____
_____	_____	_____	_____
_____	_____	_____	_____

Jch kenne einen Körper mit fünf Ecken: _____

Jch kenne einen Körper ohne Kanten: _____

Jch kenne einen Körper mit zwei Flächen: _____





Quellenverzeichnis:

Thema: Geometrische Körper
Fach: Mathematik / Geometrie
Klasse: 2 bis 4

Bilder: Alle Bilder wurden als Vektorgrafiken selbst erstellt.

Texte: Sämtliche Texte und Übungen wurden selbst erstellt und gestaltet.

Schriften: Bei der Schrift handelt es sich um 'Comic Relief' von Jeff Davis. Diese steht unter der 'SIL Open Font License v1.10'

www.fontsquirrel.com/fonts/comic-relief

COMIC RELIEF

↓ DOWNLOAD TTF

🗨️ 🌐 📄 | Loudifier | comic | 1 Style

Sample Specimens Test Drive Glyphs **License** Webfont Kit

SIL Open Font License v1.10

This license can also be found at this permalink: <https://www.fontsquirrel.com/license/comic-relief>

Copyright (c) 2013, Jeff Davis (info@loudifier.com),
with Reserved Font Name "Comic Relief".

This Font Software is licensed under the SIL Open Font License, Version 1.1.
This license is copied below, and is also available with a FAQ at: <http://scripts.sil.org/OFL>

SIL OPEN FONT LICENSE Version 1.1 - 26 February 2007